



Risolvi ogni problema.

1)  $2 + 1 = \underline{\quad}$

2)  $4 + 1 = \underline{\quad}$

3)  $2 + 0 = \underline{\quad}$

4)  $2 + 2 = \underline{\quad}$

5)  $1 + 1 = \underline{\quad}$

6)  $3 + 0 = \underline{\quad}$

7)  $3 + 2 = \underline{\quad}$

8)  $1 + 3 = \underline{\quad}$

9)  $3 - 2 = \underline{\quad}$

10)  $5 - 5 = \underline{\quad}$

11)  $5 - 4 = \underline{\quad}$

12)  $5 - 3 = \underline{\quad}$

13)  $4 - 4 = \underline{\quad}$

14)  $2 - 1 = \underline{\quad}$

15)  $3 - 1 = \underline{\quad}$

16)  $2 - 2 = \underline{\quad}$

**Risposte**

1. \_\_\_\_\_

2. \_\_\_\_\_

3. \_\_\_\_\_

4. \_\_\_\_\_

5. \_\_\_\_\_

6. \_\_\_\_\_

7. \_\_\_\_\_

8. \_\_\_\_\_

9. \_\_\_\_\_

10. \_\_\_\_\_

11. \_\_\_\_\_

12. \_\_\_\_\_

13. \_\_\_\_\_

14. \_\_\_\_\_

15. \_\_\_\_\_

16. \_\_\_\_\_



Risolvi ogni problema.

1)  $2 + 1 = \underline{3}$

2)  $4 + 1 = \underline{5}$

3)  $2 + 0 = \underline{2}$

4)  $2 + 2 = \underline{4}$

5)  $1 + 1 = \underline{2}$

6)  $3 + 0 = \underline{3}$

7)  $3 + 2 = \underline{5}$

8)  $1 + 3 = \underline{4}$

9)  $3 - 2 = \underline{1}$

10)  $5 - 5 = \underline{0}$

11)  $5 - 4 = \underline{1}$

12)  $5 - 3 = \underline{2}$

13)  $4 - 4 = \underline{0}$

14)  $2 - 1 = \underline{1}$

15)  $3 - 1 = \underline{2}$



16)  $2 - 2 = \underline{0}$



**Risposte**1. 32. 53. 24. 45. 26. 37. 58. 49. 110. 011. 112. 213. 014. 115. 216. 0






Risolvi ogni problema.



**Risposte**


1)  $2 + 1 = \underline{\quad}$   
  $+$  



2)  $4 + 1 = \underline{\quad}$   
  $+$  



3)  $2 + 0 = \underline{\quad}$   




4)  $2 + 2 = \underline{\quad}$   
  $+$  



5)  $1 + 1 = \underline{\quad}$   
  $+$  



6)  $3 + 0 = \underline{\quad}$   




7)  $3 + 2 = \underline{\quad}$   
  $+$  



8)  $1 + 3 = \underline{\quad}$   
  $+$  



9)  $3 - 2 = \underline{\quad}$   
  $-$  



10)  $5 - 5 = \underline{\quad}$   
  $-$  



11)  $5 - 4 = \underline{\quad}$   
  $-$  

12)  $5 - 3 = \underline{\quad}$   
  $-$  

13)  $4 - 4 = \underline{\quad}$   
  $-$  

14)  $2 - 1 = \underline{\quad}$   
  $-$  

15)  $3 - 1 = \underline{\quad}$   
  $-$  

16)  $2 - 2 = \underline{\quad}$   
  $-$  

1. \_\_\_\_\_
2. \_\_\_\_\_
3. \_\_\_\_\_
4. \_\_\_\_\_
5. \_\_\_\_\_
6. \_\_\_\_\_
7. \_\_\_\_\_
8. \_\_\_\_\_
9. \_\_\_\_\_
10. \_\_\_\_\_
11. \_\_\_\_\_
12. \_\_\_\_\_
13. \_\_\_\_\_
14. \_\_\_\_\_
15. \_\_\_\_\_
16. \_\_\_\_\_