



Risolvi ogni problema.

1) $4 + 0 = \underline{\quad}$

2) $5 + 0 = \underline{\quad}$

3) $4 + 1 = \underline{\quad}$

4) $2 + 2 = \underline{\quad}$

5) $1 + 2 = \underline{\quad}$

6) $3 + 1 = \underline{\quad}$

7) $1 + 0 = \underline{\quad}$

8) $1 + 1 = \underline{\quad}$

9) $3 - 2 = \underline{\quad}$

10) $4 - 1 = \underline{\quad}$

11) $5 - 5 = \underline{\quad}$

12) $2 - 1 = \underline{\quad}$

13) $5 - 4 = \underline{\quad}$

14) $5 - 1 = \underline{\quad}$

15) $4 - 3 = \underline{\quad}$

16) $4 - 4 = \underline{\quad}$

Risposte

1. _____

2. _____

3. _____

4. _____

5. _____

6. _____

7. _____

8. _____

9. _____

10. _____

11. _____

12. _____

13. _____

14. _____

15. _____

16. _____



Risolvi ogni problema.

1) $4 + 0 = \underline{4}$

2) $5 + 0 = \underline{5}$

3) $4 + 1 = \underline{5}$

4) $2 + 2 = \underline{4}$

5) $1 + 2 = \underline{3}$

6) $3 + 1 = \underline{4}$

7) $1 + 0 = \underline{1}$

8) $1 + 1 = \underline{2}$

9) $3 - 2 = \underline{1}$

10) $4 - 1 = \underline{3}$

11) $5 - 5 = \underline{0}$

12) $2 - 1 = \underline{1}$

13) $5 - 4 = \underline{1}$

14) $5 - 1 = \underline{4}$


15) $4 - 3 = \underline{1}$

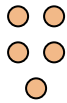
16) $4 - 4 = \underline{0}$


Risposte1. 42. 53. 54. 45. 36. 47. 18. 29. 110. 311. 012. 113. 114. 415. 116. 0





Risolvi ogni problema.

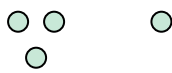
1) $4 + 0 = \underline{\quad}$



2) $5 + 0 = \underline{\quad}$



3) $4 + 1 = \underline{\quad}$



4) $2 + 2 = \underline{\quad}$


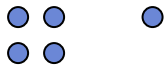
5) $1 + 2 = \underline{\quad}$


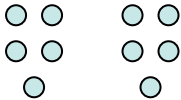
6) $3 + 1 = \underline{\quad}$



7) $1 + 0 = \underline{\quad}$


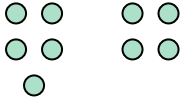
8) $1 + 1 = \underline{\quad}$


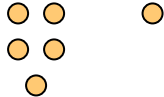
9) $3 - 2 = \underline{\quad}$



10) $4 - 1 = \underline{\quad}$



11) $5 - 5 = \underline{\quad}$


12) $2 - 1 = \underline{\quad}$


13) $5 - 4 = \underline{\quad}$


14) $5 - 1 = \underline{\quad}$


15) $4 - 3 = \underline{\quad}$


16) $4 - 4 = \underline{\quad}$


Risposte

1. _____
2. _____
3. _____
4. _____
5. _____
6. _____
7. _____
8. _____
9. _____
10. _____
11. _____
12. _____
13. _____
14. _____
15. _____
16. _____