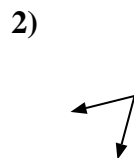
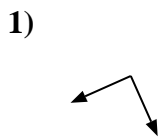
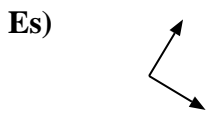




Determina se ogni angolo mostrato è 'minore', 'maggiore' o 'uguale' a 90°.

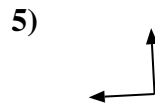
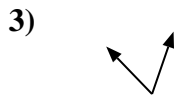
Risposte



Es. **uguale**

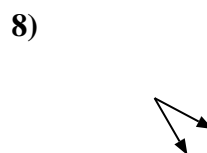
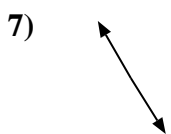
1. _____

2. _____



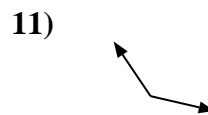
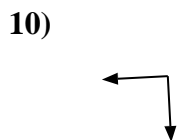
3. _____

4. _____



5. _____

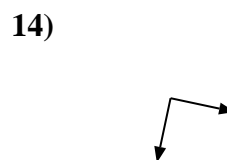
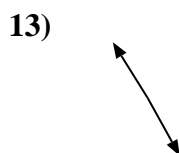
6. _____



8. _____

9. _____

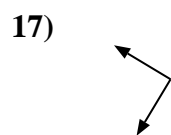
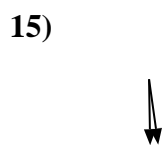
10. _____



11. _____

12. _____

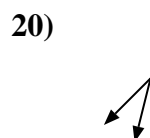
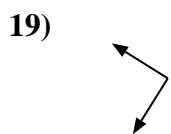
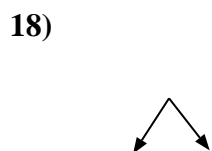
13. _____



14. _____

15. _____

16. _____



17. _____

18. _____

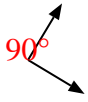
19. _____

20. _____



Determina se ogni angolo mostrato è 'minore', 'maggiore' o 'uguale' a 90° .

Es)



1)



2)



Risposte

Es. uguale

3)



4)



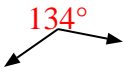
5)



1. uguale

2. minore

6)



7)



8)



3. minore

4. uguale

5. uguale

6. maggiore

7. maggiore

9)



10)



11)



8. minore

9. maggiore

10. uguale

11. maggiore

12)



13)



14)



12. minore

13. maggiore

14. uguale

15)



16)



17)



15. minore

16. maggiore

17. uguale

18)



19)



20)



18. minore

19. uguale

20. minore