



Determina se l'angolo mostrato è acuto, ottuso, retto, o piatto.

Risposte

Es)

Es. retto

1)

2)

1. _____

2. _____

3. _____

4. _____

5. _____

6. _____

7. _____

8. _____

9. _____

10. _____

11. _____

12. _____

13. _____

14. _____

15. _____

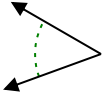
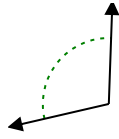
16. _____

17. _____

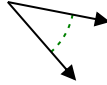
18. _____

19. _____

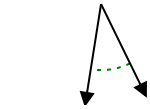
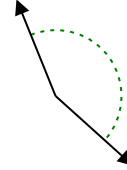
20. _____



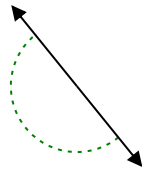
3)



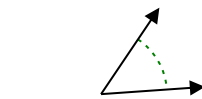
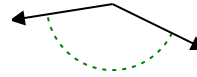
4)



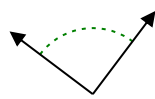
5)



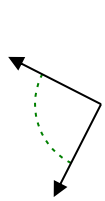
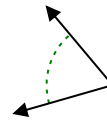
6)



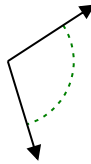
7)



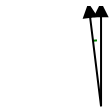
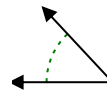
8)



9)



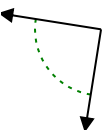
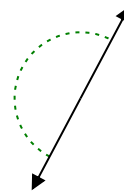
10)



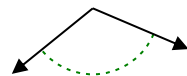
11)



12)



13)



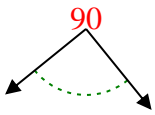
14)

1-10	95	90	85	80	75	70	65	60	55	50
11-20	45	40	35	30	25	20	15	10	5	0

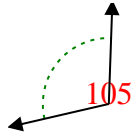


Determina se l'angolo mostrato è acuto, ottuso, retto, o piatto.

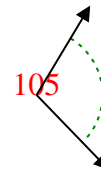
Es)



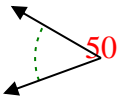
1)



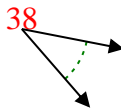
2)



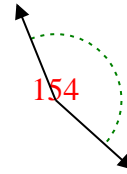
3)



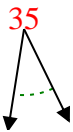
4)



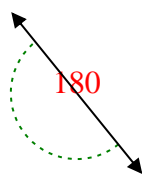
5)



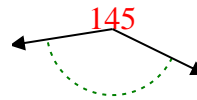
6)



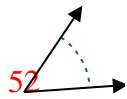
7)



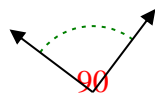
8)



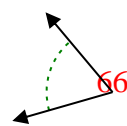
9)



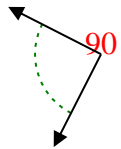
10)



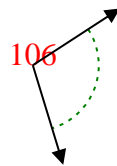
11)



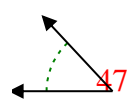
12)



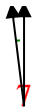
13)



14)



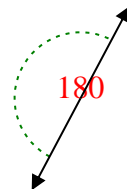
15)



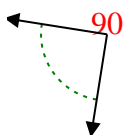
16)



17)



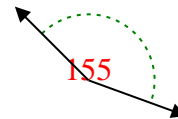
18)



19)



20)



Risposte

Es. retto

1. ottuso

2. ottuso

3. acuto

4. acuto

5. ottuso

6. acuto

7. piatto

8. ottuso

9. acuto

10. retto

11. acuto

12. retto

13. ottuso

14. acuto

15. acuto

16. acuto

17. piatto

18. retto

19. ottuso

20. ottuso