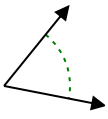




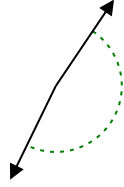
Determina se l'angolo mostrato è acuto, ottuso, retto, o piatto.

Risposte

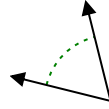
Es)



1)



2)

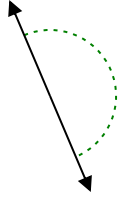


Es. **acuto**

1. _____

2. _____

3)



4)



5)



3. _____

4. _____

6)



7)



8)

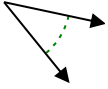


5. _____

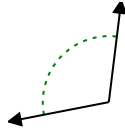
6. _____

7. _____

9)



10)



11)



8. _____

9. _____

10. _____

12)



13)



14)

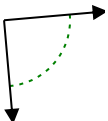


11. _____

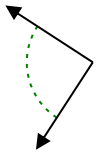
12. _____

13. _____

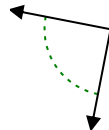
15)



16)



17)



14. _____

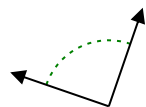
15. _____

16. _____

18)



19)



20)



17. _____

18. _____

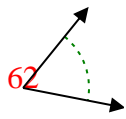
19. _____

20. _____

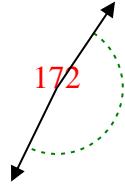


Determina se l'angolo mostrato è acuto, ottuso, retto, o piatto.

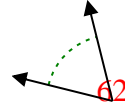
Es)



1)

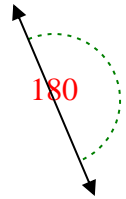


2)

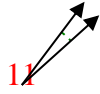


Es. acuto

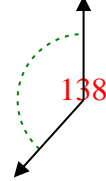
3)



4)

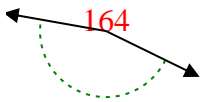


5)

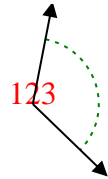


1. ottuso

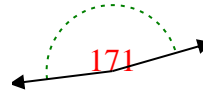
6)



7)

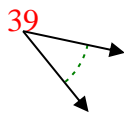


8)

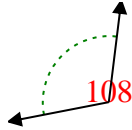


2. acuto

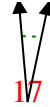
9)



10)



11)

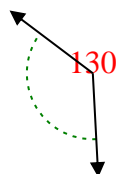


3. piatto

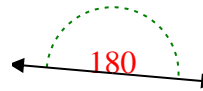
12)



13)

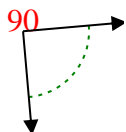


14)

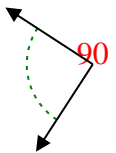


4. acuto

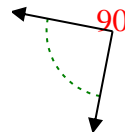
15)



16)

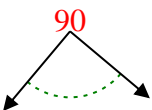


17)

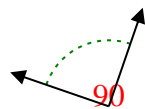


5. ottuso

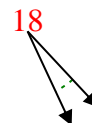
18)



19)



20)



6. ottuso

7. ottuso

8. ottuso

9. acuto

10. ottuso

11. acuto

12. acuto

13. ottuso

14. piatto

15. retto

16. retto

17. retto

18. retto

19. retto

20. acuto