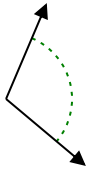




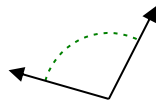
Determina se l'angolo mostrato è acuto, ottuso, retto, o piatto.

**Risposte**

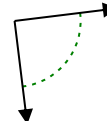
Es)



1)



2)

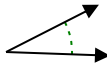


Es. **ottuso**

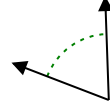
1. \_\_\_\_\_

2. \_\_\_\_\_

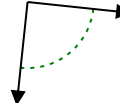
3)



4)



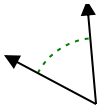
5)



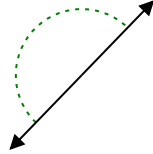
3. \_\_\_\_\_

4. \_\_\_\_\_

6)



7)



8)

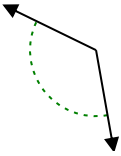


5. \_\_\_\_\_

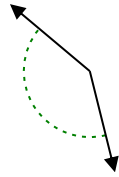
6. \_\_\_\_\_

7. \_\_\_\_\_

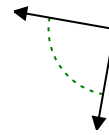
9)



10)



11)

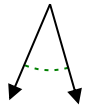


8. \_\_\_\_\_

9. \_\_\_\_\_

10. \_\_\_\_\_

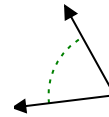
12)



13)



14)

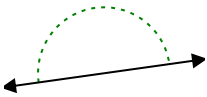


11. \_\_\_\_\_

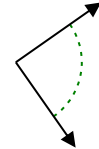
12. \_\_\_\_\_

13. \_\_\_\_\_

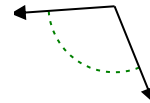
15)



16)



17)

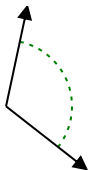


14. \_\_\_\_\_

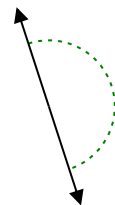
15. \_\_\_\_\_

16. \_\_\_\_\_

18)



19)



20)



17. \_\_\_\_\_

18. \_\_\_\_\_

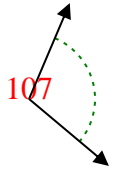
19. \_\_\_\_\_

20. \_\_\_\_\_

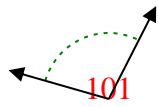


Determina se l'angolo mostrato è acuto, ottuso, retto, o piatto.

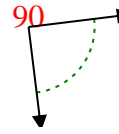
Es)



1)



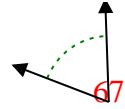
2)



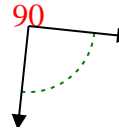
3)



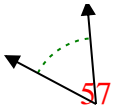
4)



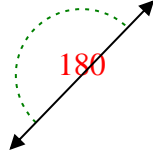
5)



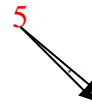
6)



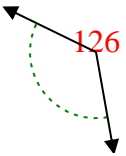
7)



8)



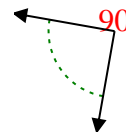
9)



10)



11)



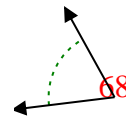
12)



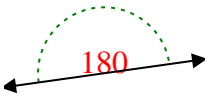
13)



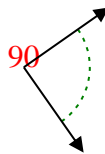
14)



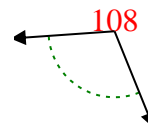
15)



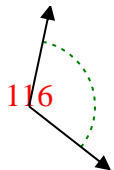
16)



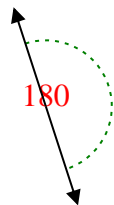
17)



18)



19)



20)



**Risposte**

Es. ottuso

1. ottuso

2. retto

3. acuto

4. acuto

5. retto

6. acuto

7. piatto

8. acuto

9. ottuso

10. ottuso

11. retto

12. acuto

13. acuto

14. acuto

15. piatto

16. retto

17. ottuso

18. ottuso

19. piatto

20. ottuso

|       |    |    |    |    |    |    |    |    |    |    |
|-------|----|----|----|----|----|----|----|----|----|----|
| 1-10  | 95 | 90 | 85 | 80 | 75 | 70 | 65 | 60 | 55 | 50 |
| 11-20 | 45 | 40 | 35 | 30 | 25 | 20 | 15 | 10 | 5  | 0  |