



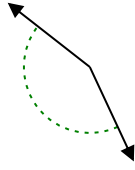
Determina se l'angolo mostrato è acuto, ottuso, retto, o piatto.

Risposte

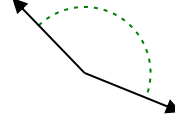
Es)



1)



2)

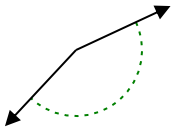


Es. piatto

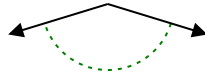
1. _____

2. _____

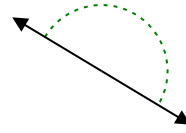
3)



4)



5)



3. _____

4. _____

5. _____

6)



7)



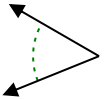
8)



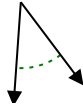
6. _____

7. _____

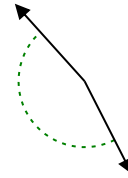
9)



10)



11)



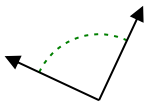
8. _____

9. _____

10. _____

11. _____

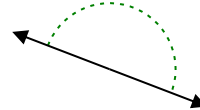
12)



13)



14)

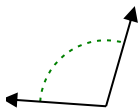


12. _____

13. _____

14. _____

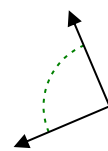
15)



16)



17)



15. _____

16. _____

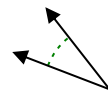
18)



19)



20)



17. _____

18. _____

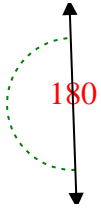
19. _____

20. _____

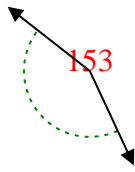


Determina se l'angolo mostrato è acuto, ottuso, retto, o piatto.

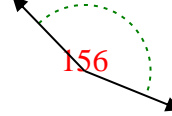
Es)



1)

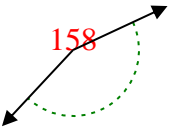


2)



Es. piatto

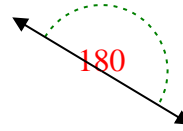
3)



4)



5)



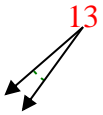
1. ottuso

2. ottuso

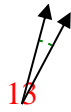
3. ottuso

4. ottuso

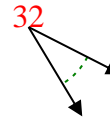
6)



7)



8)

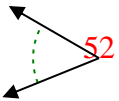


5. piatto

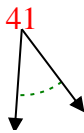
6. acuto

7. acuto

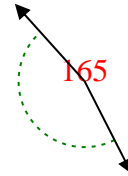
9)



10)



11)

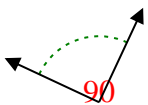


8. acuto

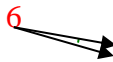
9. acuto

10. acuto

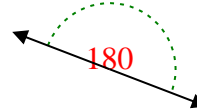
12)



13)



14)

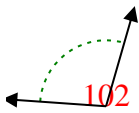


11. ottuso

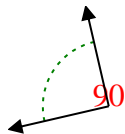
12. retto

13. acuto

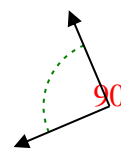
15)



16)



17)

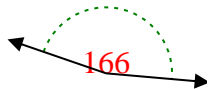


14. piatto

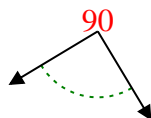
15. ottuso

16. retto

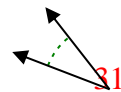
18)



19)



20)



17. retto

18. ottuso

19. retto

20. acuto