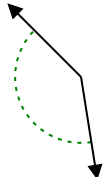




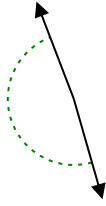
Determina se l'angolo mostrato è acuto, ottuso, retto, o piatto.

Risposte

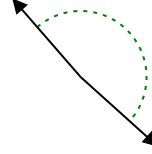
Es)



1)



2)

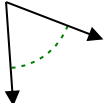


Es. **ottuso**

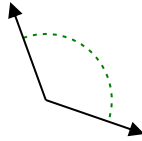
1. _____

2. _____

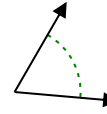
3)



4)



5)

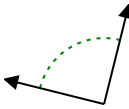


3. _____

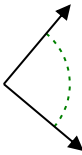
4. _____

5. _____

6)



7)



8)

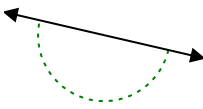


6. _____

7. _____

8. _____

9)



10)



11)

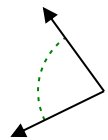


9. _____

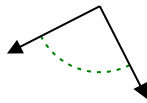
10. _____

11. _____

12)



13)



14)

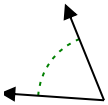


12. _____

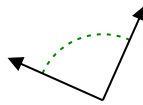
13. _____

14. _____

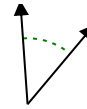
15)



16)



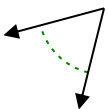
17)



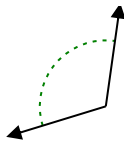
15. _____

16. _____

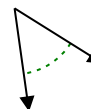
18)



19)



20)



17. _____

18. _____

19. _____

20. _____



Determina se l'angolo mostrato è acuto, ottuso, retto, o piatto.

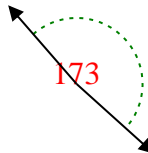
Es)



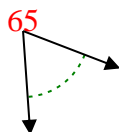
1)



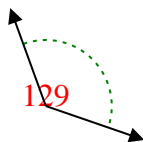
2)



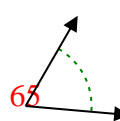
3)



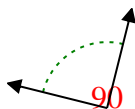
4)



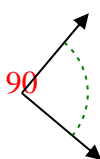
5)



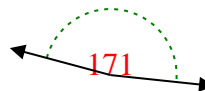
6)



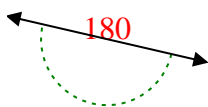
7)



8)



9)



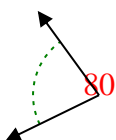
10)



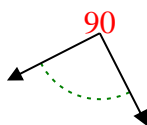
11)



12)



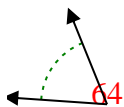
13)



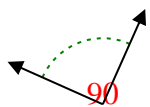
14)



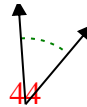
15)



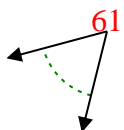
16)



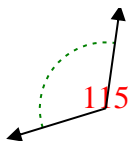
17)



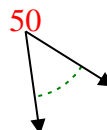
18)



19)



20)



Risposte

Es. ottuso

1. ottuso

2. ottuso

3. acuto

4. ottuso

5. acuto

6. retto

7. retto

8. ottuso

9. piatto

10. acuto

11. piatto

12. acuto

13. retto

14. ottuso

15. acuto

16. retto

17. acuto

18. acuto

19. ottuso

20. acuto