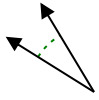




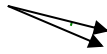
Determina se l'angolo mostrato è acuto, ottuso, retto, o piatto.

Risposte

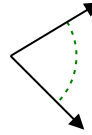
Es)



1)



2)

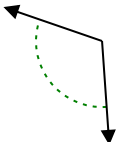


Es. **acuto**

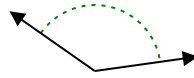
1. _____

2. _____

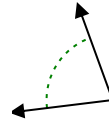
3)



4)



5)

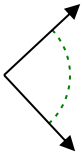


3. _____

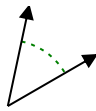
4. _____

5. _____

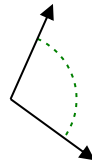
6)



7)



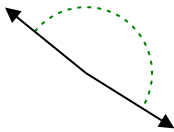
8)



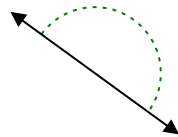
6. _____

7. _____

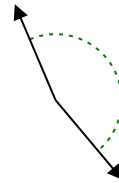
9)



10)



11)

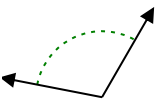


8. _____

9. _____

10. _____

12)



13)



14)

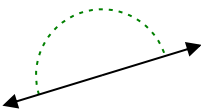


11. _____

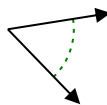
12. _____

13. _____

15)



16)



17)

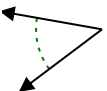


14. _____

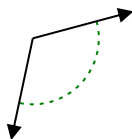
15. _____

16. _____

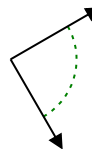
18)



19)



20)



17. _____

18. _____

19. _____

20. _____

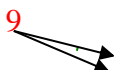


Determina se l'angolo mostrato è acuto, ottuso, retto, o piatto.

Es)



1)

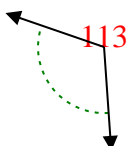


2)



Es. **acuto**

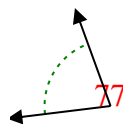
3)



4)



5)



1. **acuto**

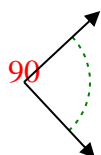
2. **acuto**

3. **ottuso**

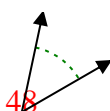
4. **ottuso**

5. **acuto**

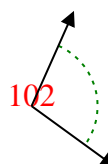
6)



7)



8)

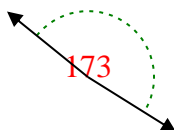


6. **retto**

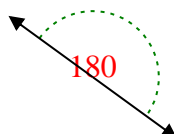
7. **acuto**

8. **ottuso**

9)



10)



11)



9. **ottuso**

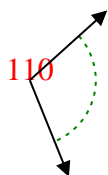
10. **piatto**

11. **ottuso**

12)



13)



14)

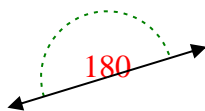


12. **ottuso**

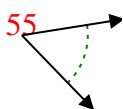
13. **ottuso**

14. **retto**

15)



16)



17)

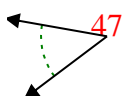


15. **piatto**

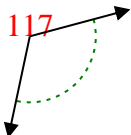
16. **acuto**

17. **retto**

18)



19)



20)



18. **acuto**

19. **ottuso**

20. **retto**