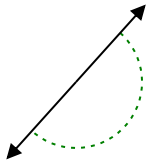




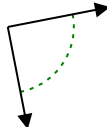
Determina se l'angolo mostrato è acuto, ottuso, retto, o piatto.

Risposte

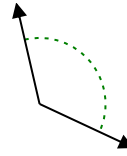
Es)



1)

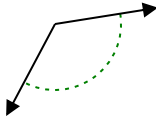


2)

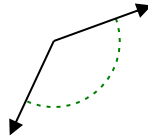


Es. piatto

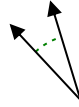
3)



4)



5)



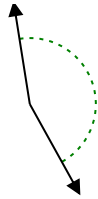
1. _____

2. _____

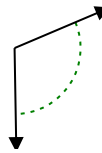
6)



7)



8)

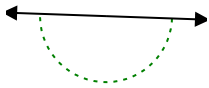


3. _____

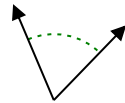
4. _____

5. _____

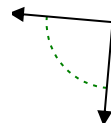
9)



10)



11)



6. _____

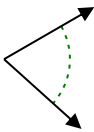
7. _____

8. _____

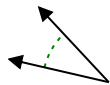
9. _____

10. _____

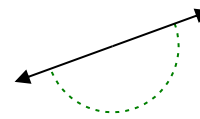
12)



13)



14)

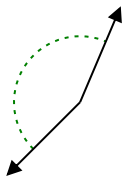


11. _____

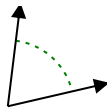
12. _____

13. _____

15)



16)



17)

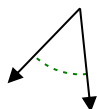


14. _____

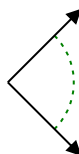
15. _____

16. _____

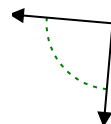
18)



19)



20)



17. _____

18. _____

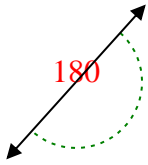
19. _____

20. _____

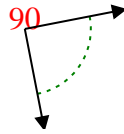


Determina se l'angolo mostrato è acuto, ottuso, retto, o piatto.

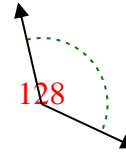
Es)



1)

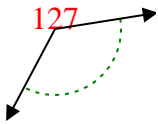


2)

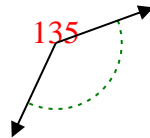


Es. piatto

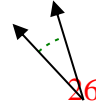
3)



4)



5)



1. retto

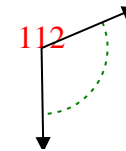
6)



7)

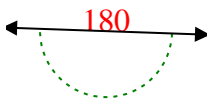


8)

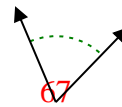


2. ottuso

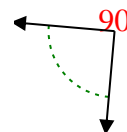
9)



10)

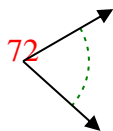


11)

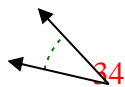


3. ottuso

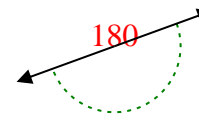
12)



13)

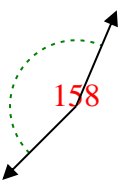


14)

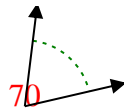


4. ottuso

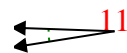
15)



16)

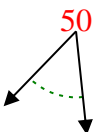


17)

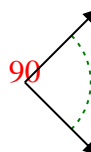


5. acuto

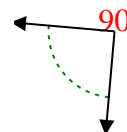
18)



19)



20)



6. ottuso

7. ottuso

8. ottuso

9. piatto

10. acuto

11. retto

12. acuto

13. acuto

14. piatto

15. ottuso

16. acuto

17. acuto

18. acuto

19. retto

20. retto