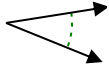


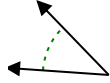


Determina se l'angolo mostrato è acuto, ottuso, retto, o piatto.

Es)



1)



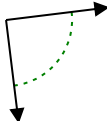
2)



Risposte

Es. **acuto**

3)



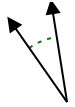
4)



5)



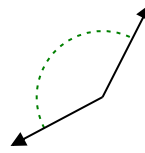
6)



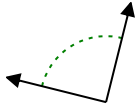
7)



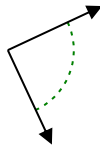
8)



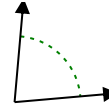
9)



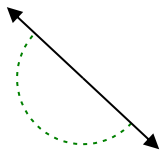
10)



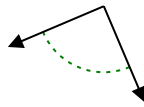
11)



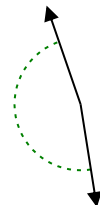
12)



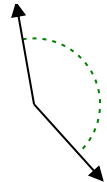
13)



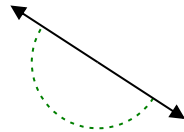
14)



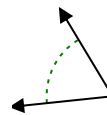
15)



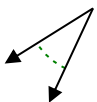
16)



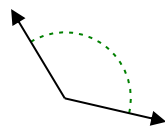
17)



18)



19)



20)

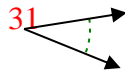


- 1. _____
- 2. _____
- 3. _____
- 4. _____
- 5. _____
- 6. _____
- 7. _____
- 8. _____
- 9. _____
- 10. _____
- 11. _____
- 12. _____
- 13. _____
- 14. _____
- 15. _____
- 16. _____
- 17. _____
- 18. _____
- 19. _____
- 20. _____

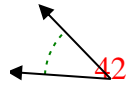


Determina se l'angolo mostrato è acuto, ottuso, retto, o piatto.

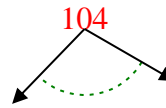
Es)



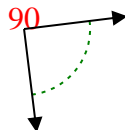
1)



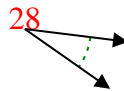
2)



3)



4)



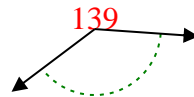
5)



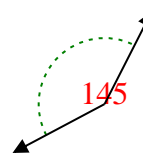
6)



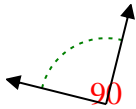
7)



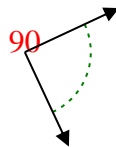
8)



9)



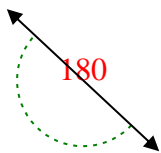
10)



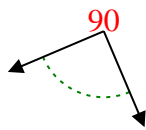
11)



12)



13)



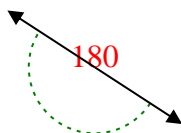
14)



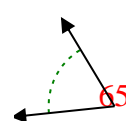
15)



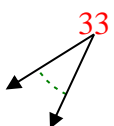
16)



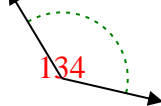
17)



18)



19)



20)



Risposte

Es. acuto

1. acuto

2. ottuso

3. retto

4. acuto

5. ottuso

6. acuto

7. ottuso

8. ottuso

9. retto

10. retto

11. acuto

12. piatto

13. retto

14. ottuso

15. ottuso

16. piatto

17. acuto

18. acuto

19. ottuso

20. ottuso