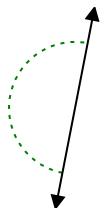




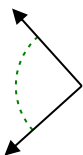
Determina se l'angolo mostrato è acuto, ottuso, retto, o piatto.

**Risposte**

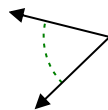
Es)



1)



2)



Es. piatto

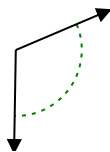
1. \_\_\_\_\_

2. \_\_\_\_\_

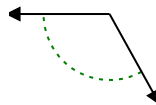
3)



4)



5)

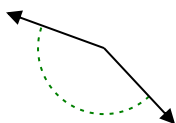


3. \_\_\_\_\_

4. \_\_\_\_\_

5. \_\_\_\_\_

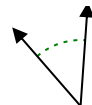
6)



7)



8)

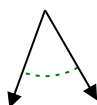


6. \_\_\_\_\_

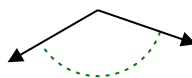
7. \_\_\_\_\_

8. \_\_\_\_\_

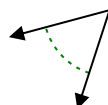
9)



10)



11)

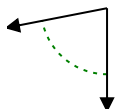


9. \_\_\_\_\_

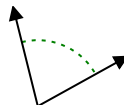
10. \_\_\_\_\_

11. \_\_\_\_\_

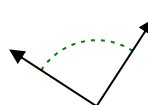
12)



13)



14)

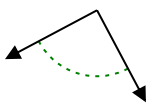


12. \_\_\_\_\_

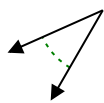
13. \_\_\_\_\_

14. \_\_\_\_\_

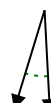
15)



16)



17)



15. \_\_\_\_\_

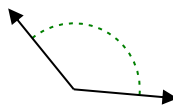
16. \_\_\_\_\_

17. \_\_\_\_\_

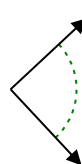
18)



19)



20)



18. \_\_\_\_\_

19. \_\_\_\_\_

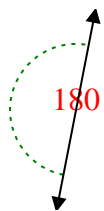
20. \_\_\_\_\_

20. \_\_\_\_\_



Determina se l'angolo mostrato è acuto, ottuso, retto, o piatto.

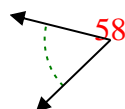
Es)



1)

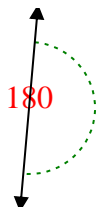


2)

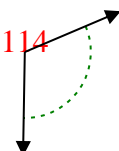


Es. piatto

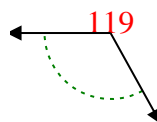
3)



4)

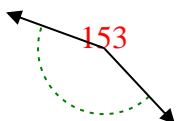


5)

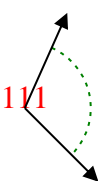


1. retto

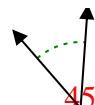
6)



7)

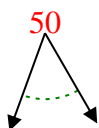


8)



2. acuto

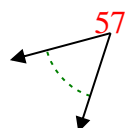
9)



10)

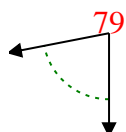


11)

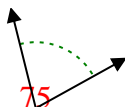


3. piatto

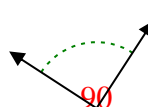
12)



13)

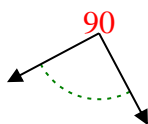


14)

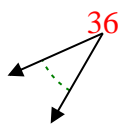


4. ottuso

15)



16)

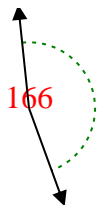


17)

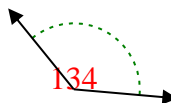


5. ottuso

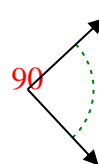
18)



19)



20)



6. ottuso

7. ottuso

8. acuto

9. acuto

10. ottuso

11. acuto

12. acuto

13. acuto

14. retto

15. retto

16. acuto

17. acuto

18. ottuso

19. ottuso

20. retto