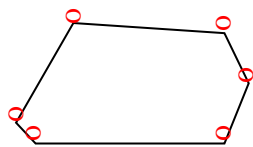




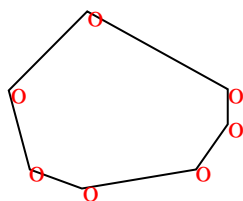


Conta il numero di angoli 'acuti', 'ottusi' e 'retti' in ogni forma.

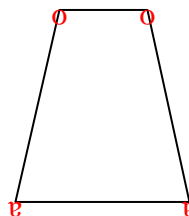
Es)



1)



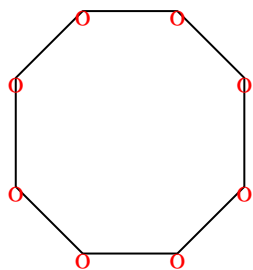
2)



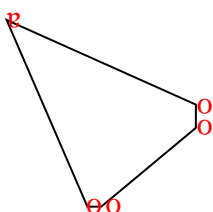
**Risposte**

| Es. | 0 | 6 | 0 |
|-----|---|---|---|
| 1.  | 0 | 7 | 0 |
| 2.  | 2 | 2 | 0 |
| 3.  | 0 | 8 | 0 |
| 4.  | 1 | 4 | 0 |
| 5.  | 1 | 1 | 2 |
| 6.  | 2 | 0 | 1 |
| 7.  | 0 | 3 | 2 |
| 8.  | 3 | 0 | 0 |
| 9.  | 2 | 2 | 0 |
| 10. | 0 | 6 | 0 |
| 11. | 0 | 2 | 3 |

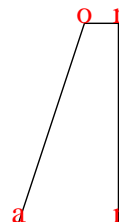
3)



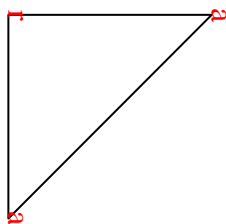
4)



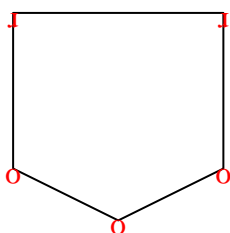
5)



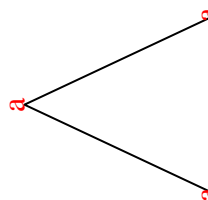
6)



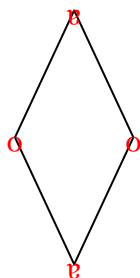
7)



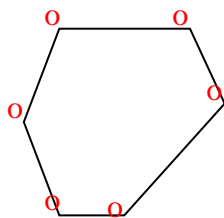
8)



9)



10)



11)

