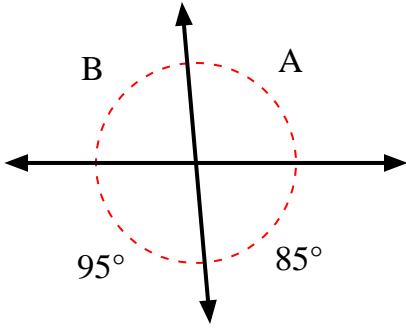


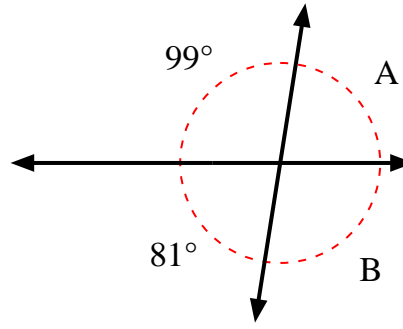


Trova il valore dell'angolo 'A' e dell'angolo 'B'.

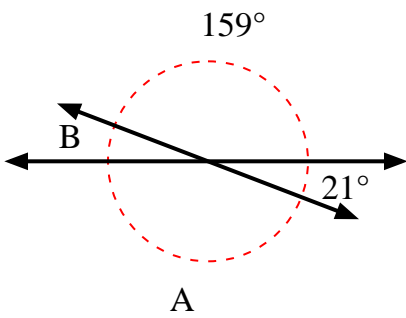
1)



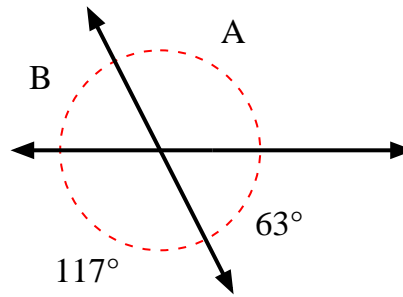
2)



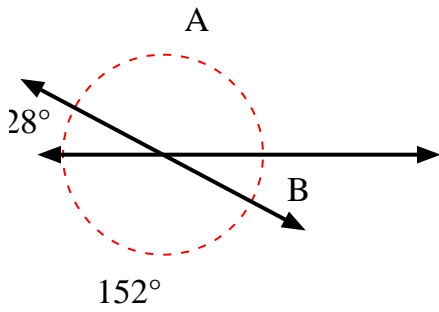
3)



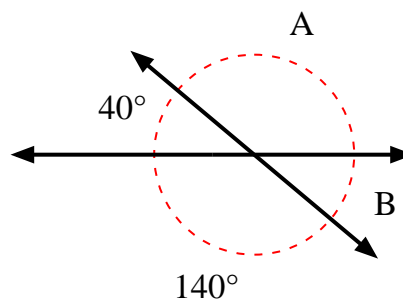
4)



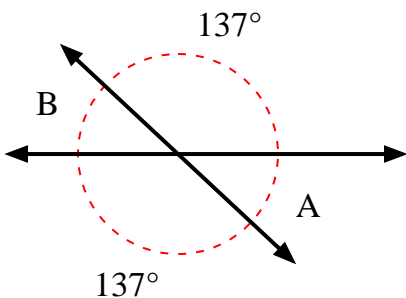
5)



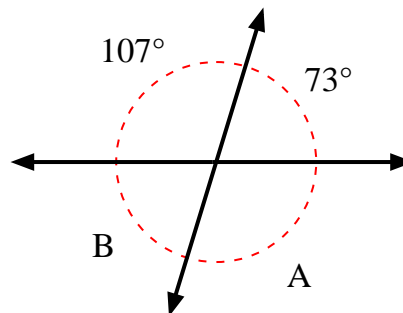
6)



7)



8)



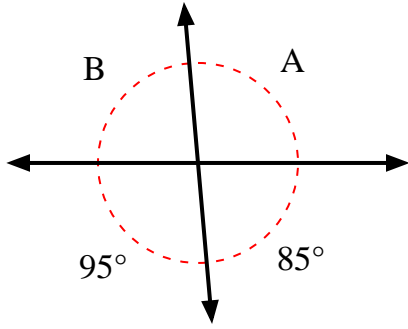
**Risposte**

1. \_\_\_\_\_
2. \_\_\_\_\_
3. \_\_\_\_\_
4. \_\_\_\_\_
5. \_\_\_\_\_
6. \_\_\_\_\_
7. \_\_\_\_\_
8. \_\_\_\_\_

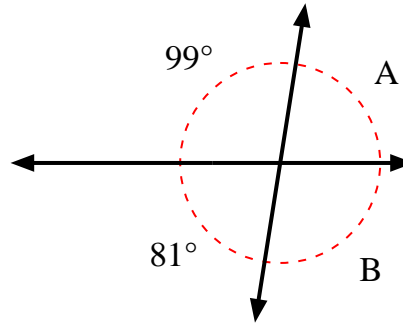


Trova il valore dell'angolo 'A' e dell'angolo 'B'.

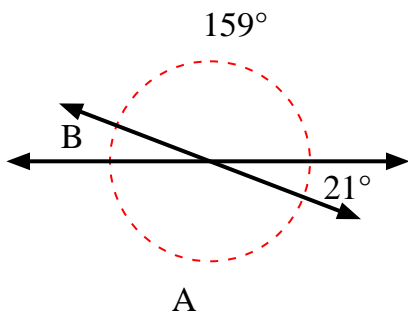
1)



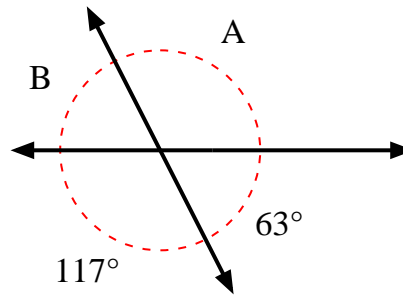
2)



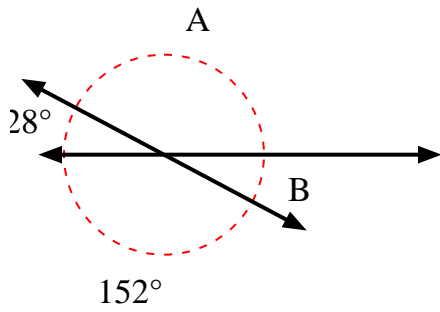
3)



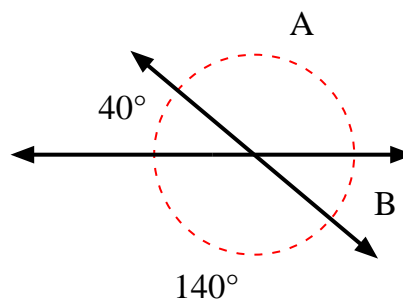
4)



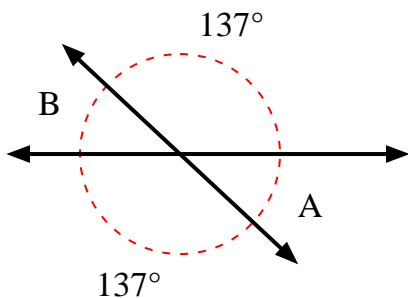
5)



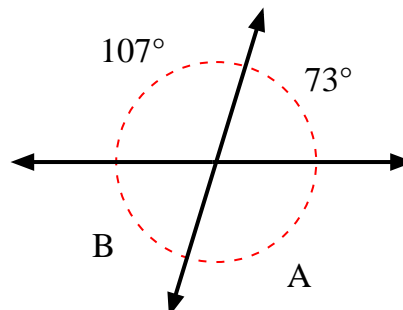
6)



7)



8)

**Risposte**

1.	<b>95°</b>	<b>85°</b>
2.	<b>81°</b>	<b>99°</b>
3.	<b>159°</b>	<b>21°</b>
4.	<b>117°</b>	<b>63°</b>
5.	<b>152°</b>	<b>28°</b>
6.	<b>140°</b>	<b>40°</b>
7.	<b>43°</b>	<b>43°</b>
8.	<b>107°</b>	<b>73°</b>