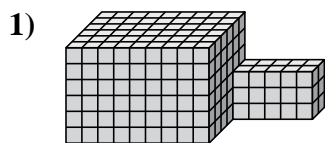




Trova il volume totale di ogni figura. La misura è in cm (non in scala).

Risposte



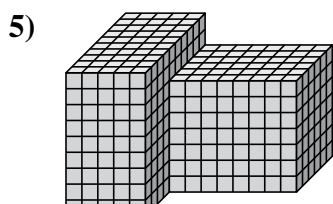
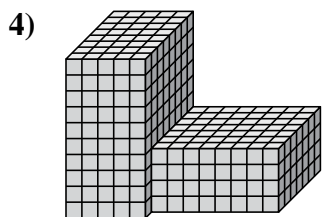
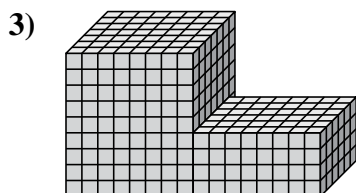
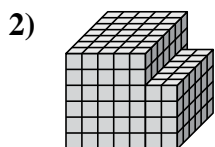
1. _____

2. _____

3. _____

4. _____

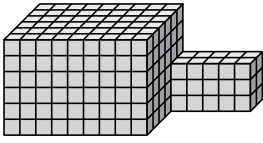
5. _____





Trova il volume totale di ogni figura. La misura è in cm (non in scala).

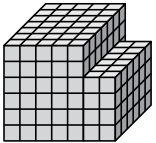
1)



$$9 \times 6 \times 6 = 324$$

$$5 \times 2 \times 3 = 30$$

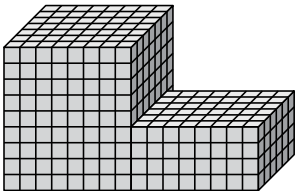
2)



$$5 \times 7 \times 6 = 210$$

$$2 \times 6 \times 4 = 48$$

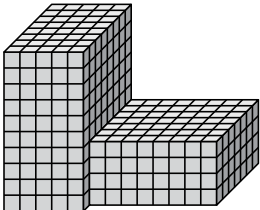
3)



$$8 \times 7 \times 9 = 504$$

$$8 \times 6 \times 4 = 192$$

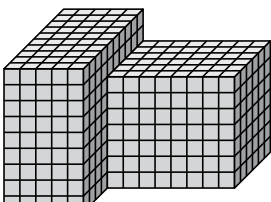
4)



$$5 \times 8 \times 10 = 400$$

$$8 \times 7 \times 4 = 224$$

5)



$$5 \times 10 \times 9 = 450$$

$$8 \times 6 \times 7 = 336$$

Risposte

1. 354 cm³

2. 258 cm³

3. 696 cm³

4. 624 cm³

5. 786 cm³