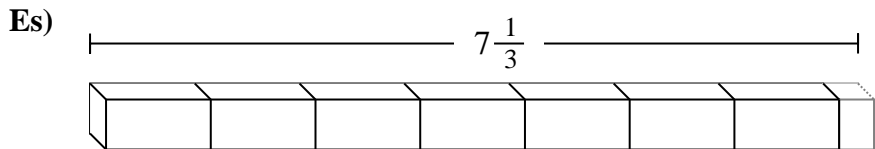


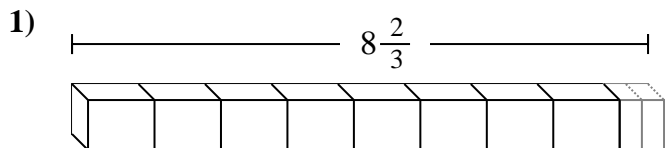


Indica il numero di piccole unità o parti frazionate che si possono ricavare dai pezzi più grandi.

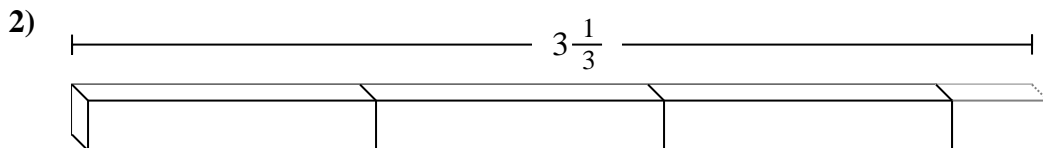
Risposte



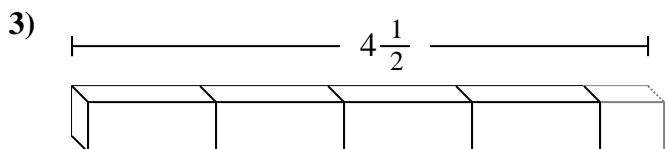
Es. **22**



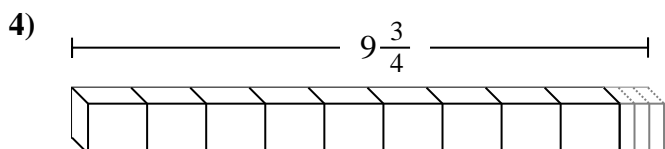
1. _____



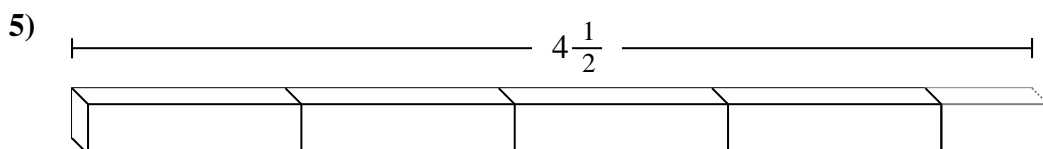
2. _____



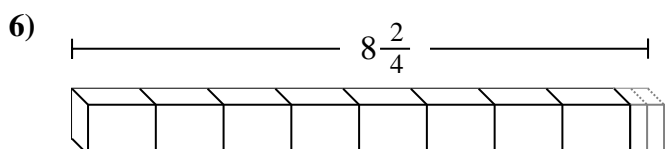
3. _____



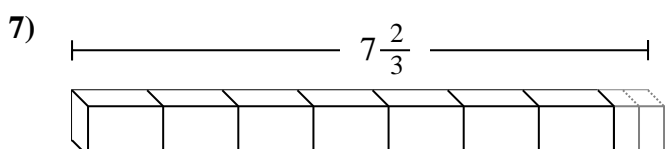
4. _____



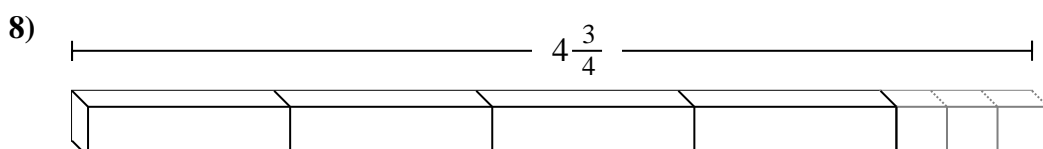
5. _____



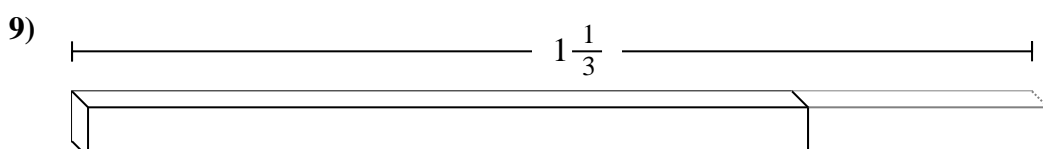
6. _____



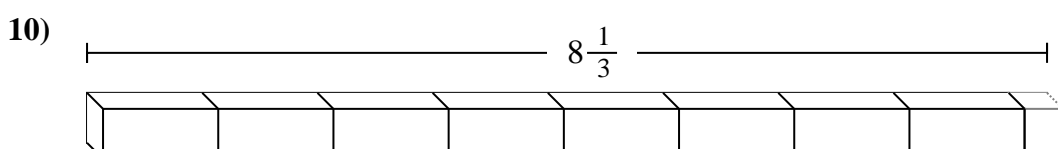
7. _____



8. _____



9. _____



10. _____



Indica il numero di piccole unità o parti frazionate che si possono ricavare dai pezzi più grandi.

Es) $7\frac{1}{3}$

1) $8\frac{2}{3}$

2) $3\frac{1}{3}$

3) $4\frac{1}{2}$

4) $9\frac{3}{4}$

5) $4\frac{1}{2}$

6) $8\frac{2}{4}$

7) $7\frac{2}{3}$

8) $4\frac{3}{4}$

9) $1\frac{1}{3}$

10) $8\frac{1}{3}$

Risposte

- Es. 22
- 1. 26
- 2. 10
- 3. 9
- 4. 39
- 5. 9
- 6. 34
- 7. 23
- 8. 19
- 9. 4
- 10. 25