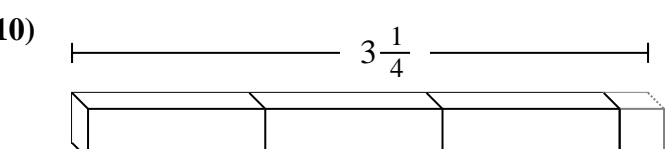
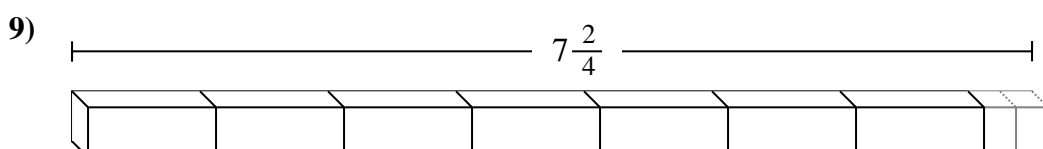
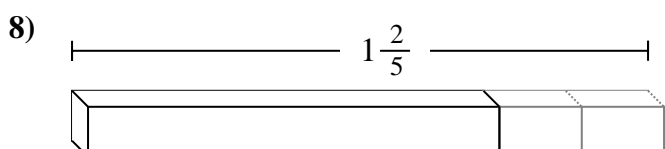
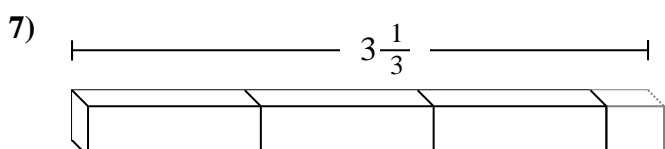
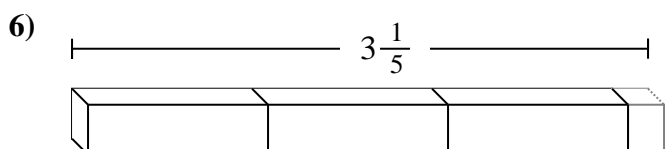
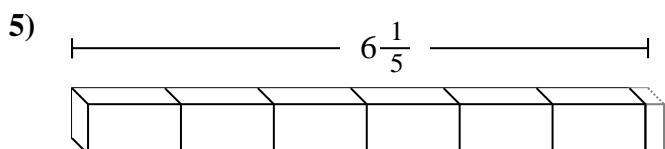
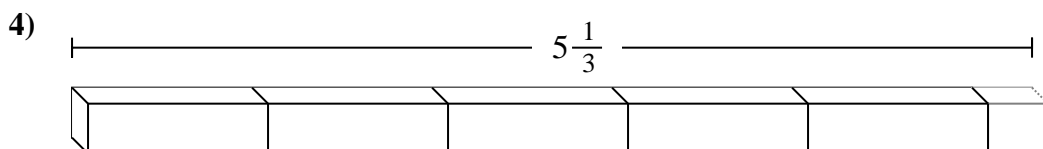
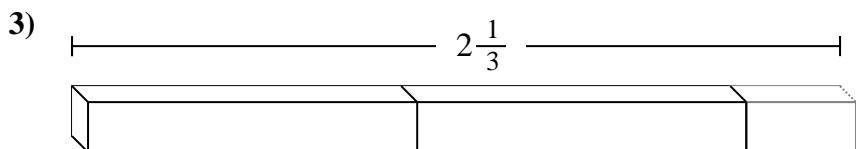
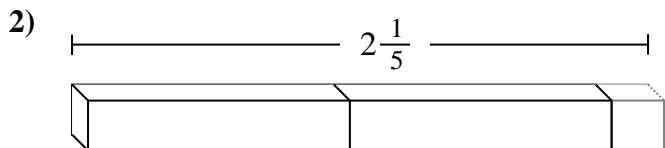
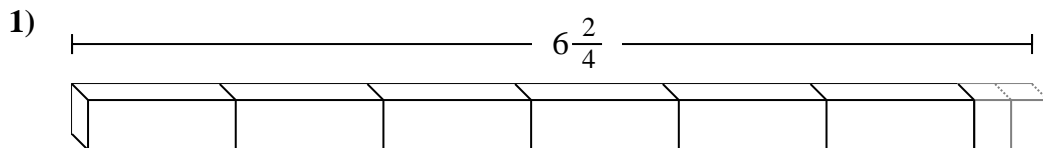
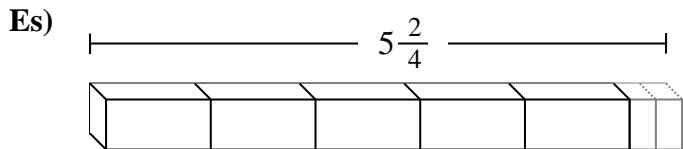




Indica il numero di piccole unità o parti frazionate che si possono ricavare dai pezzi più grandi.

**Risposte**



Es. **22**

1. \_\_\_\_\_

2. \_\_\_\_\_

3. \_\_\_\_\_

4. \_\_\_\_\_

5. \_\_\_\_\_

6. \_\_\_\_\_

7. \_\_\_\_\_

8. \_\_\_\_\_

9. \_\_\_\_\_

10. \_\_\_\_\_



Indica il numero di piccole unità o parti frazionate che si possono ricavare dai pezzi più grandi.

Es)  $5\frac{2}{4}$

1)  $6\frac{2}{4}$

2)  $2\frac{1}{5}$

3)  $2\frac{1}{3}$

4)  $5\frac{1}{3}$

5)  $6\frac{1}{5}$

6)  $3\frac{1}{5}$

7)  $3\frac{1}{3}$

8)  $1\frac{2}{5}$

9)  $7\frac{2}{4}$

10)  $3\frac{1}{4}$

**Risposte**

- Es. 22
1. 26
2. 11
3. 7
4. 16
5. 31
6. 16
7. 10
8. 7
9. 30
10. 13