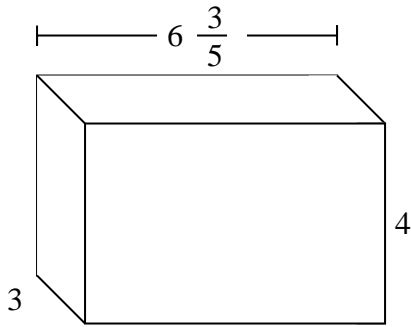


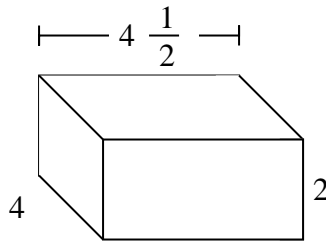


Dividi il prisma in cubi per determinare il volume complessivo, Ogni unità del prisma è misurata in cm (non va scalata).

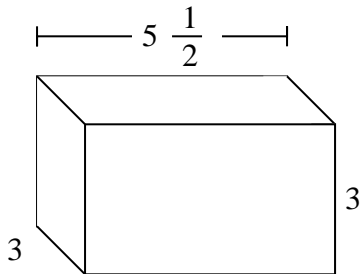
Es)



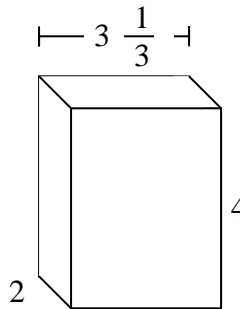
1)



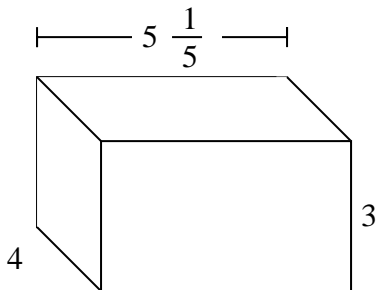
2)



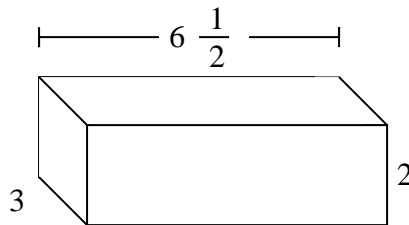
3)



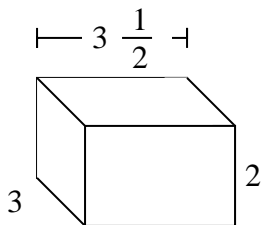
4)



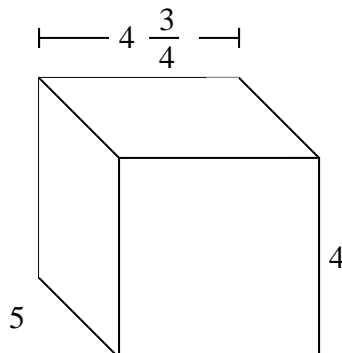
5)



6)



7)



Risposte

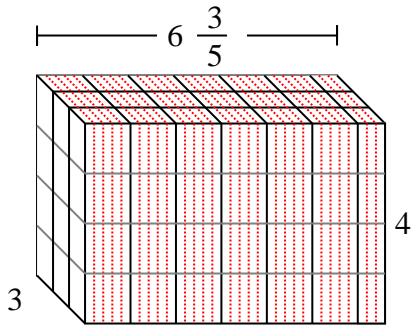
Es. $79 \frac{1}{5} \text{ cm}$

1. _____
2. _____
3. _____
4. _____
5. _____
6. _____
7. _____

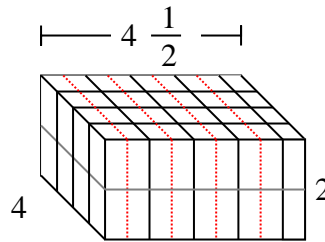


Dividi il prisma in cubi per determinare il volume complessivo, Ogni unità del prisma è misurata in cm (non va scalata).

Es)



1)



Es.

79 1/5 cm

1.

36 cm

2.

49 1/2 cm

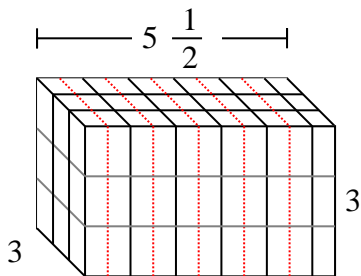
3.

26 2/3 cm

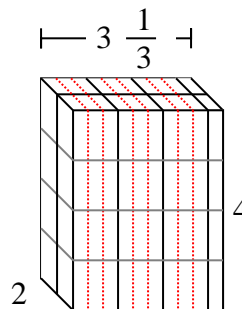
4.

62 2/5 cm

2)



3)



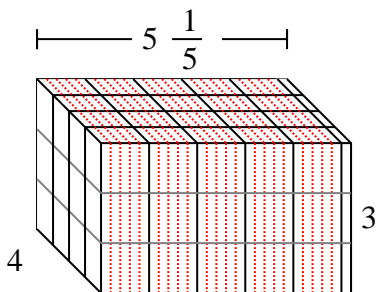
5.

39 cm

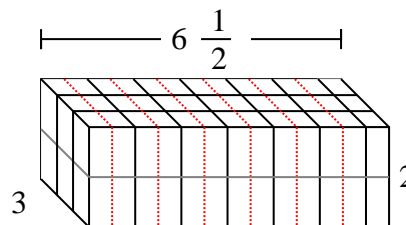
6.

21 cm

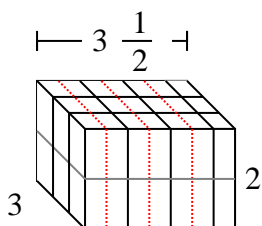
4)



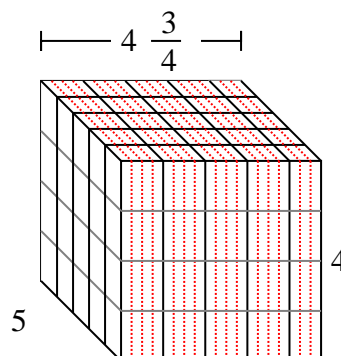
5)



6)



7)



7.

95 cm