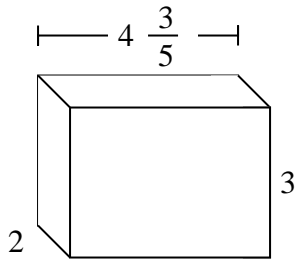


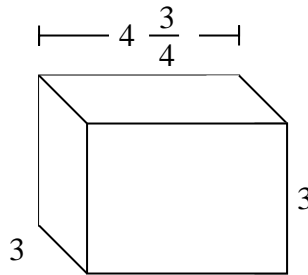


Dividi il prisma in cubi per determinare il volume complessivo, Ogni unità del prisma è misurata in cm (non va scalata).

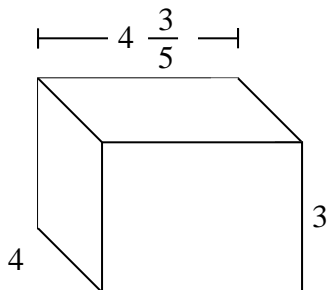
Es)



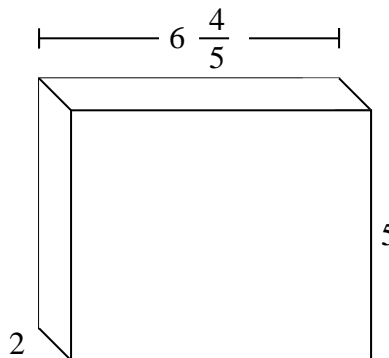
1)



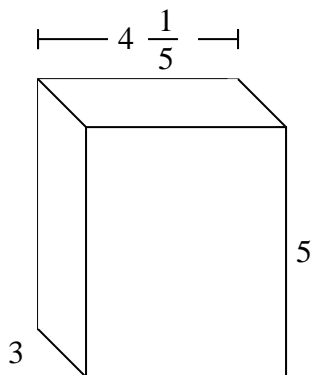
2)



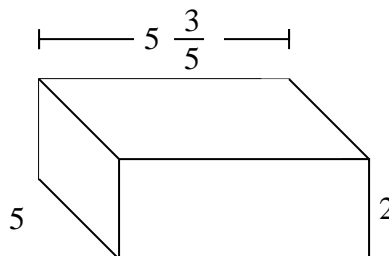
3)



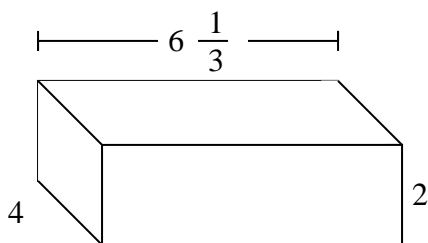
4)



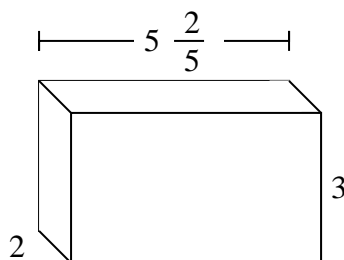
5)



6)



7)



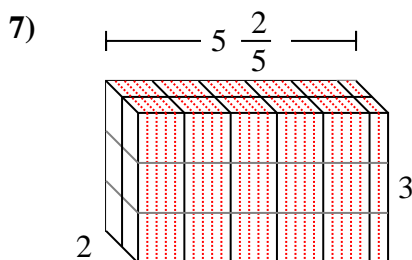
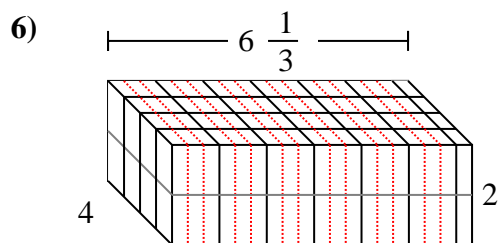
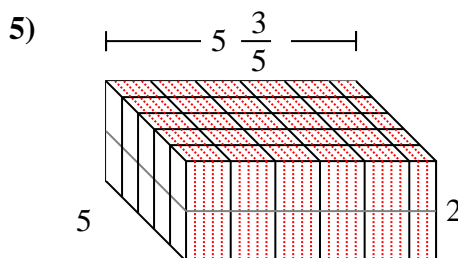
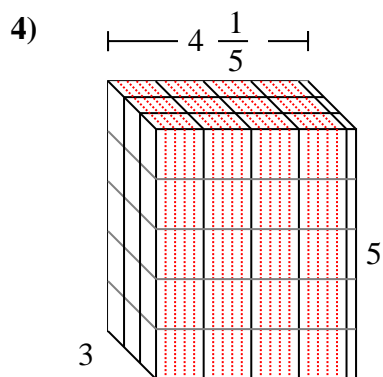
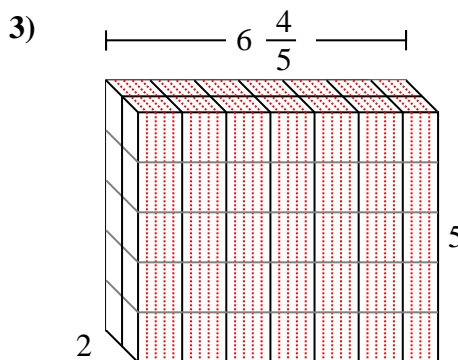
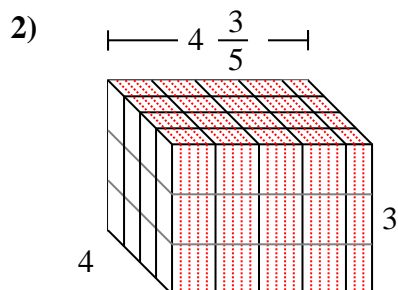
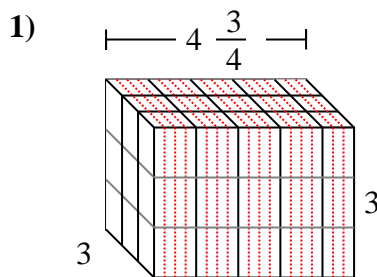
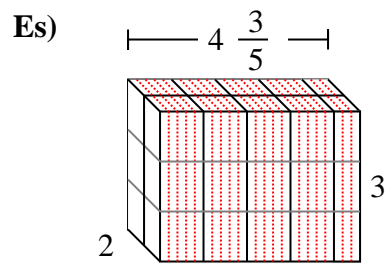
Risposte

Es. $27 \frac{3}{5}$ cm

1. _____
2. _____
3. _____
4. _____
5. _____
6. _____
7. _____



Dividi il prisma in cubi per determinare il volume complessivo, Ogni unità del prisma è misurata in cm (non va scalata).



Risposte

- Es. 27 ³/₅ cm
- 1. 42 ³/₄ cm
- 2. 55 ¹/₅ cm
- 3. 68 cm
- 4. 63 cm
- 5. 56 cm
- 6. 50 ²/₃ cm
- 7. 32 ²/₅ cm