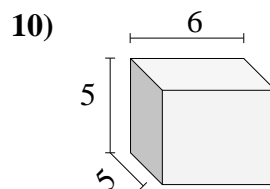
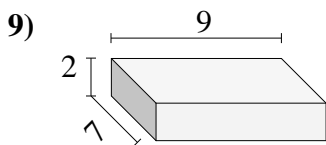
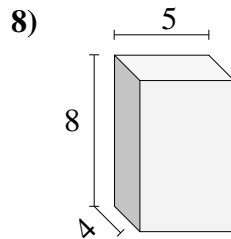
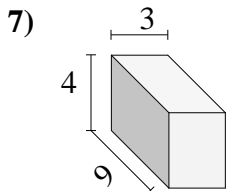
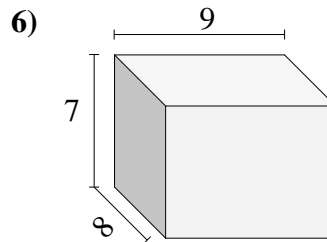
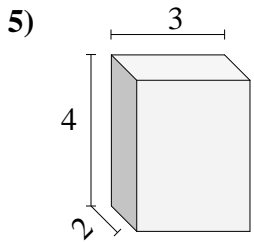
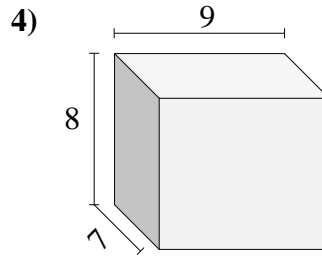
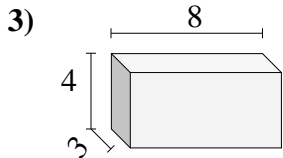
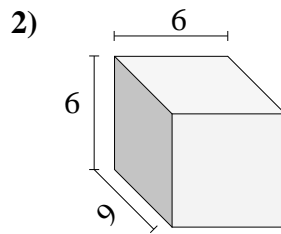
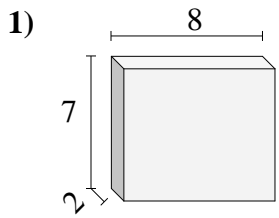




Trova il volume di ogni prisma.

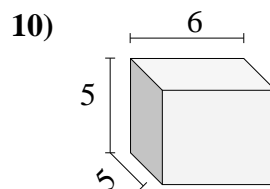
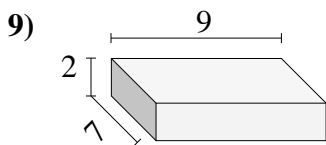
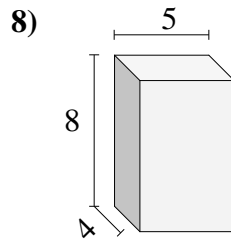
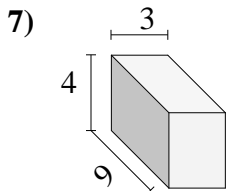
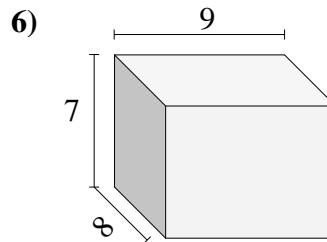
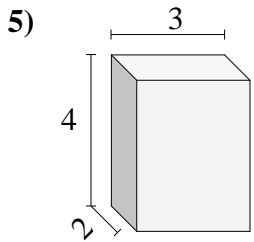
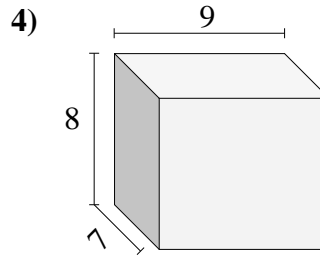
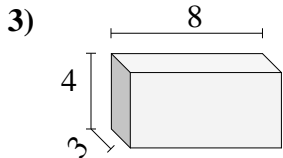
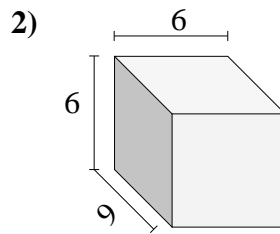
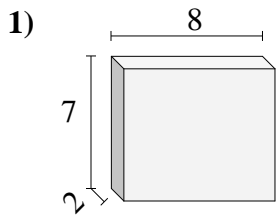


**Risposte**

- 1. \_\_\_\_\_
- 2. \_\_\_\_\_
- 3. \_\_\_\_\_
- 4. \_\_\_\_\_
- 5. \_\_\_\_\_
- 6. \_\_\_\_\_
- 7. \_\_\_\_\_
- 8. \_\_\_\_\_
- 9. \_\_\_\_\_
- 10. \_\_\_\_\_



Trova il volume di ogni prisma.

**Risposte**1. 1122. 3243. 964. 5045. 246. 5047. 1088. 1609. 12610. 150