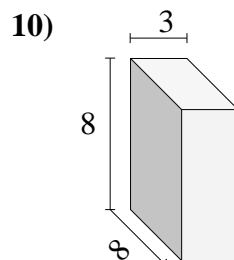
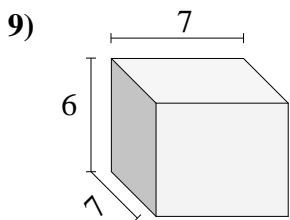
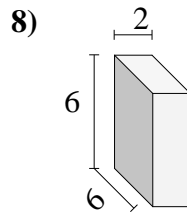
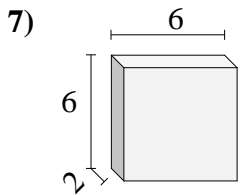
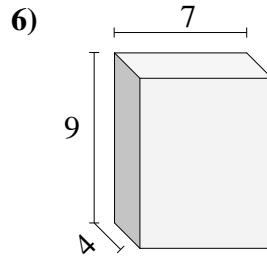
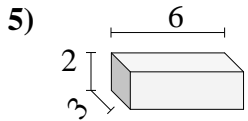
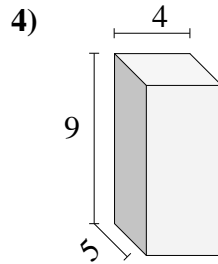
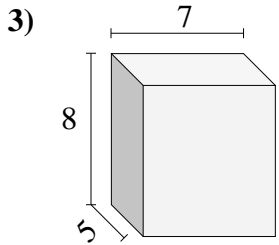
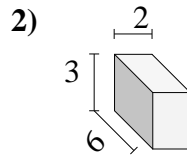
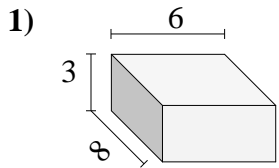




Trova il volume di ogni prisma.

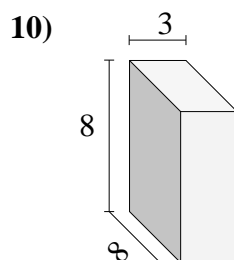
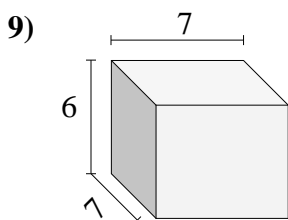
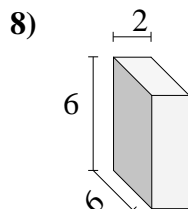
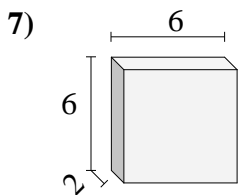
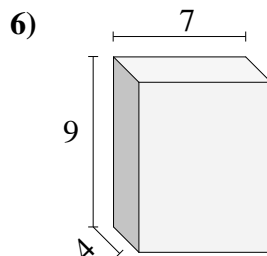
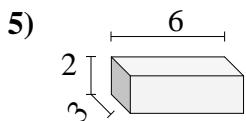
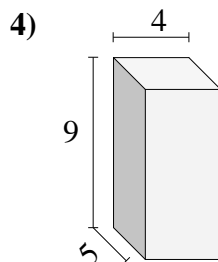
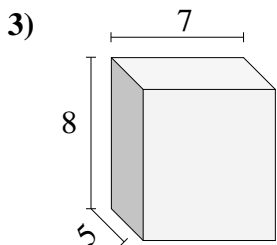
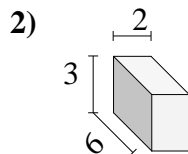
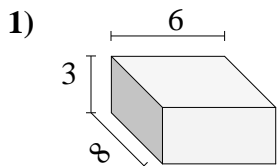


Risposte

- 1. _____
- 2. _____
- 3. _____
- 4. _____
- 5. _____
- 6. _____
- 7. _____
- 8. _____
- 9. _____
- 10. _____



Trova il volume di ogni prisma.



Risposte

1. **144**

2. **36**

3. **280**

4. **180**

5. **36**

6. **252**

7. **72**

8. **72**

9. **294**

10. **192**