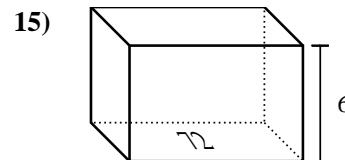
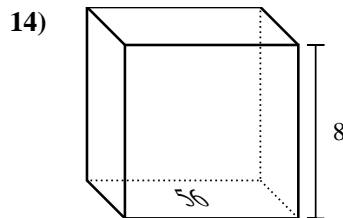
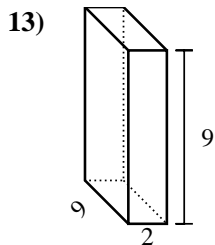
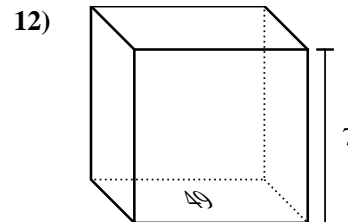
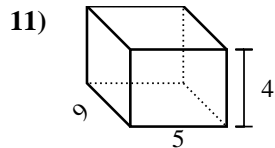
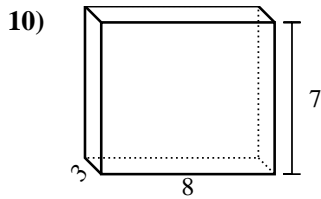
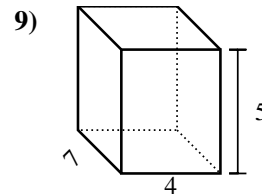
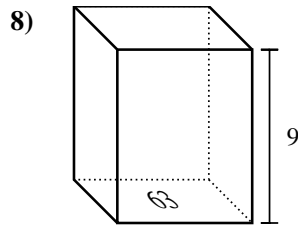
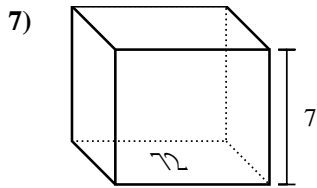
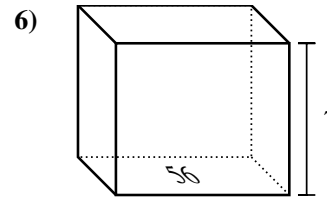
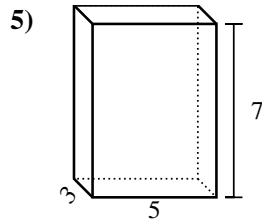
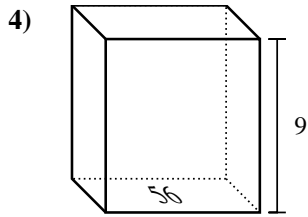
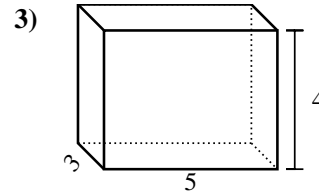
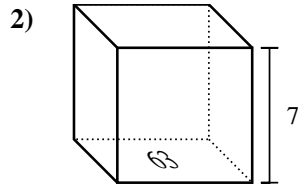
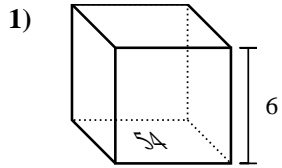


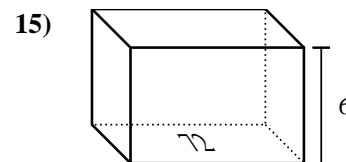
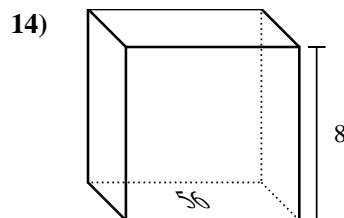
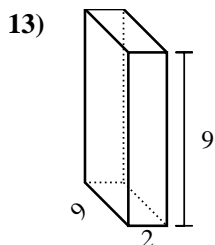
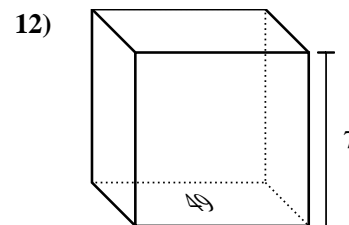
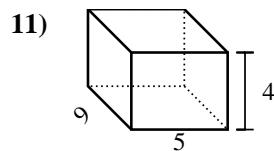
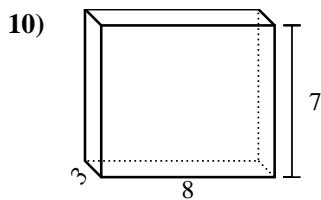
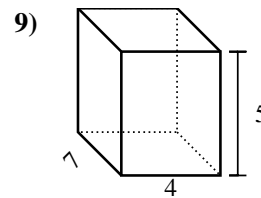
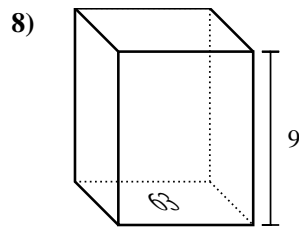
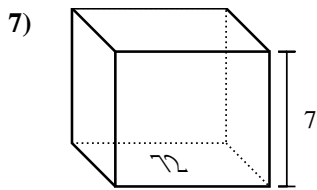
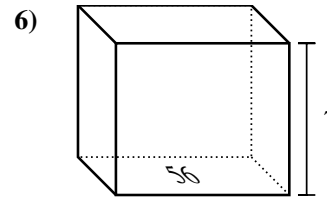
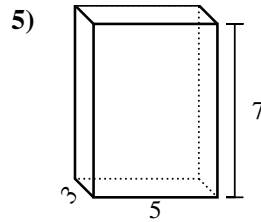
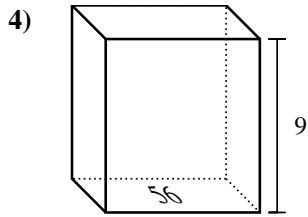
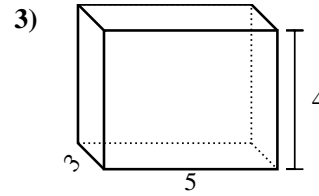
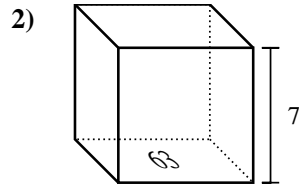
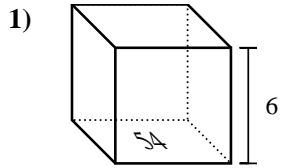


Trova il volume di ogni prisma. Ricorda $V=B \times H$ e $V=L \times P \times H$.



Risposte

1. _____
2. _____
3. _____
4. _____
5. _____
6. _____
7. _____
8. _____
9. _____
10. _____
11. _____
12. _____
13. _____
14. _____
15. _____

Trova il volume di ogni prisma. Ricorda $V=B \times H$ e $V=L \times P \times H$.**Risposte**1. **324 cm³**2. **441 cm³**3. **60 cm³**4. **504 cm³**5. **105 cm³**6. **392 cm³**7. **504 cm³**8. **567 cm³**9. **140 cm³**10. **168 cm³**11. **180 cm³**12. **343 cm³**13. **162 cm³**14. **448 cm³**15. **432 cm³**