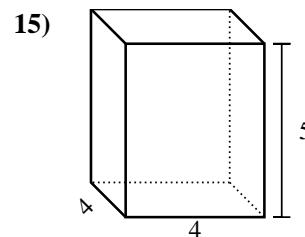
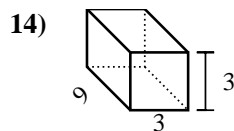
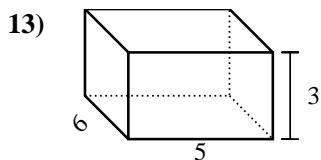
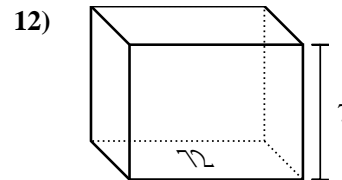
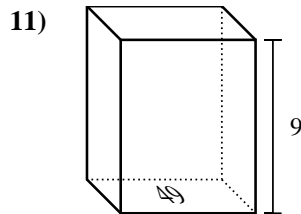
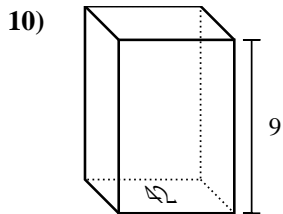
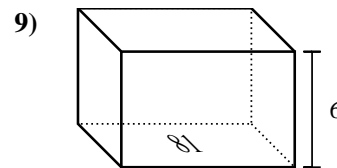
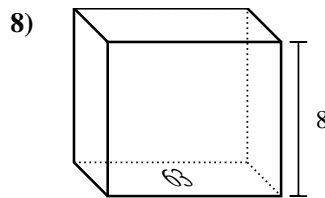
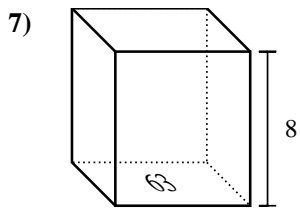
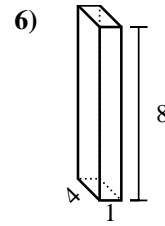
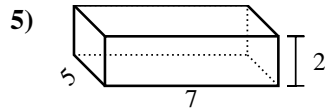
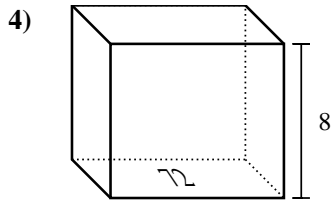
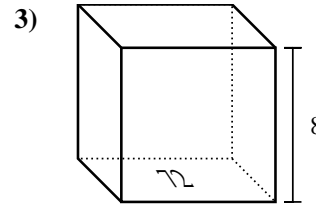
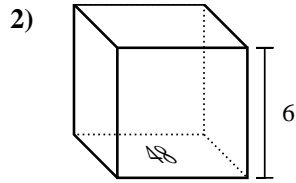
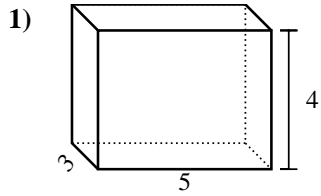


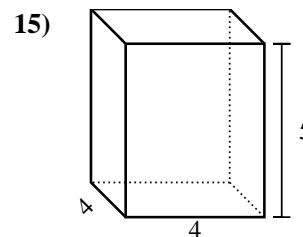
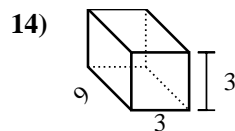
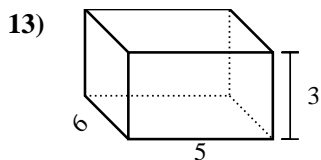
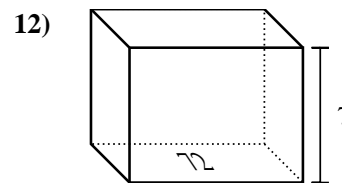
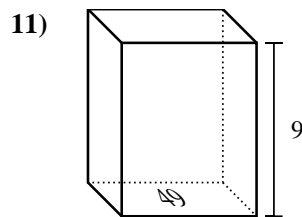
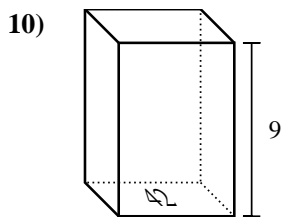
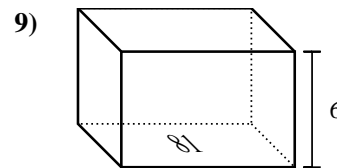
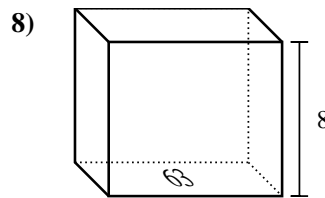
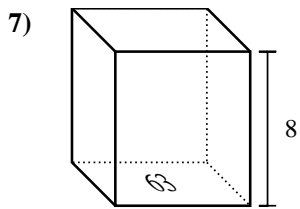
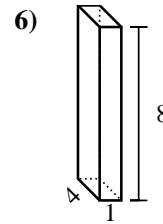
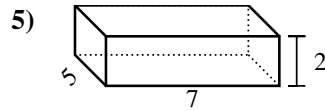
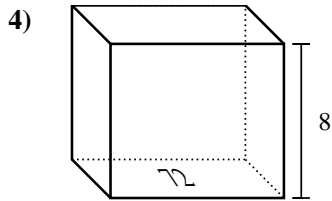
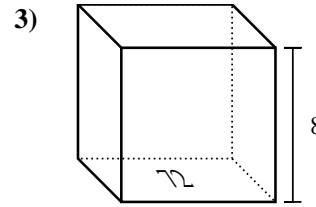
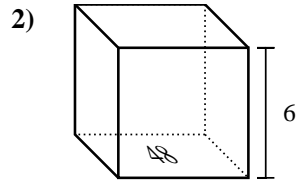
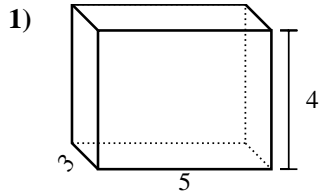


Trova il volume di ogni prisma. Ricorda $V=B \times H$ e $V=L \times P \times H$.



Risposte

1. _____
2. _____
3. _____
4. _____
5. _____
6. _____
7. _____
8. _____
9. _____
10. _____
11. _____
12. _____
13. _____
14. _____
15. _____

Trova il volume di ogni prisma. Ricorda $V=B \times H$ e $V=L \times P \times H$.**Risposte**1. 60 cm³2. 288 cm³3. 576 cm³4. 576 cm³5. 70 cm³6. 32 cm³7. 504 cm³8. 504 cm³9. 486 cm³10. 378 cm³11. 441 cm³12. 504 cm³13. 90 cm³14. 81 cm³15. 80 cm³