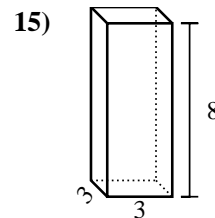
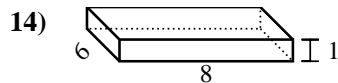
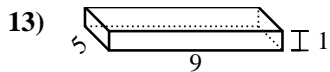
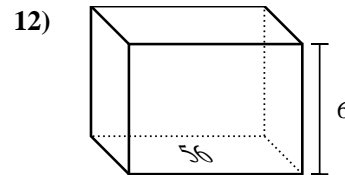
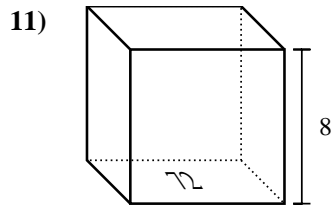
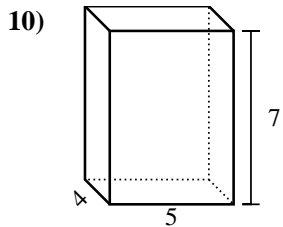
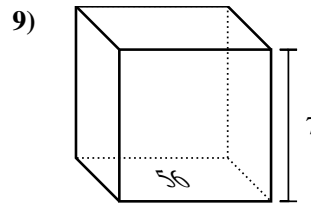
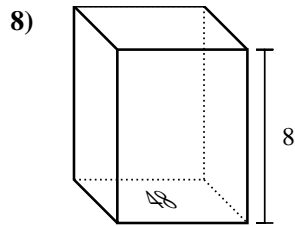
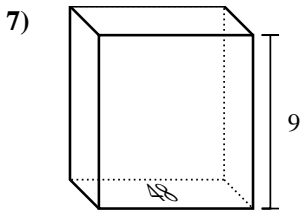
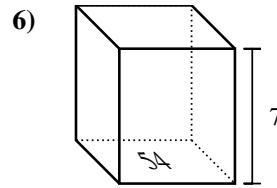
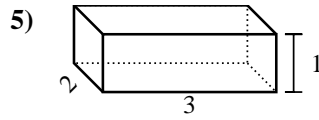
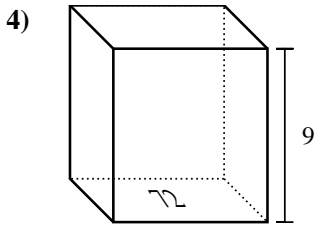
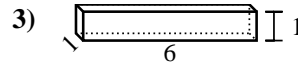
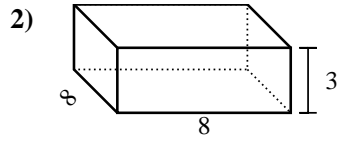
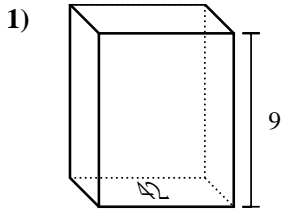




Trova il volume di ogni prisma. Ricorda $V=B \times H$ e $V=L \times P \times H$.

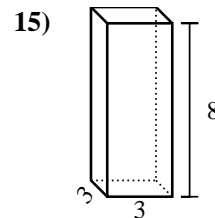
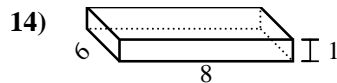
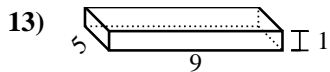
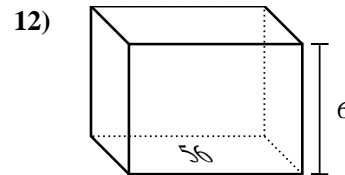
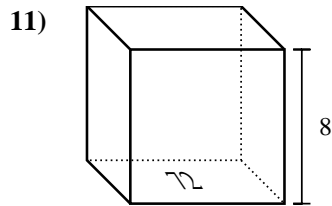
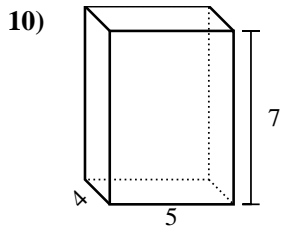
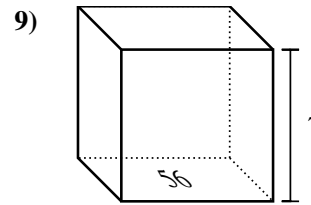
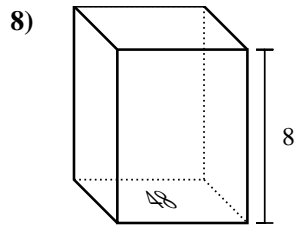
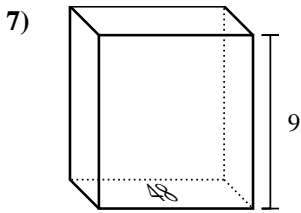
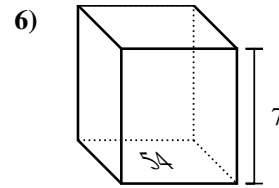
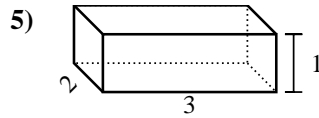
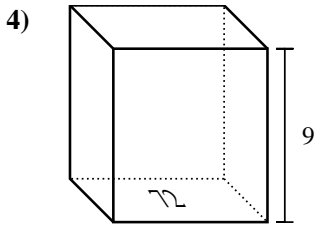
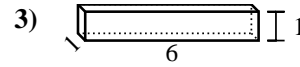
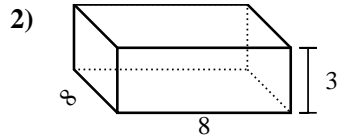
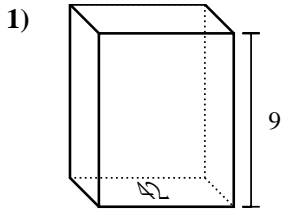


Risposte

1. _____
2. _____
3. _____
4. _____
5. _____
6. _____
7. _____
8. _____
9. _____
10. _____
11. _____
12. _____
13. _____
14. _____
15. _____



Trova il volume di ogni prisma. Ricorda $V=B \times H$ e $V=L \times P \times H$.



Risposte

1. 378 cm³
2. 192 cm³
3. 6 cm³
4. 648 cm³
5. 6 cm³
6. 378 cm³
7. 432 cm³
8. 384 cm³
9. 392 cm³
10. 140 cm³
11. 576 cm³
12. 336 cm³
13. 45 cm³
14. 48 cm³
15. 72 cm³