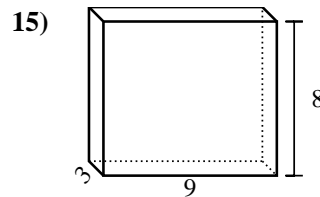
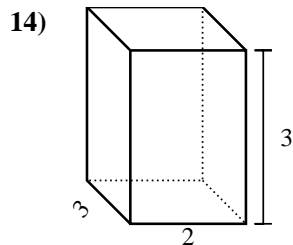
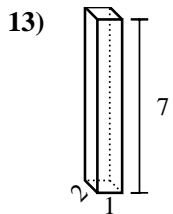
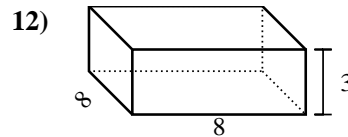
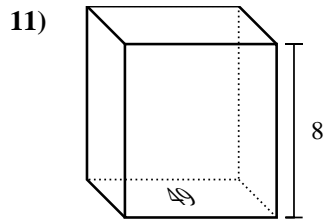
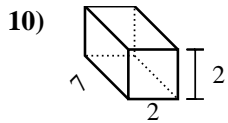
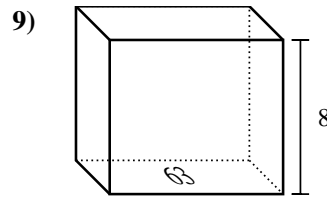
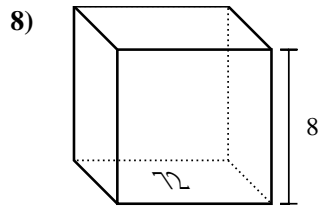
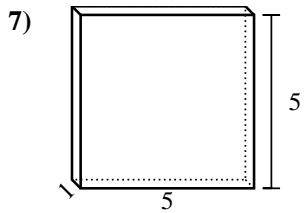
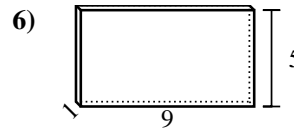
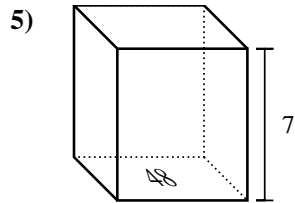
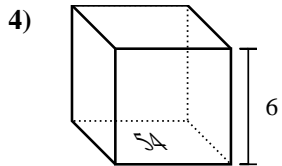
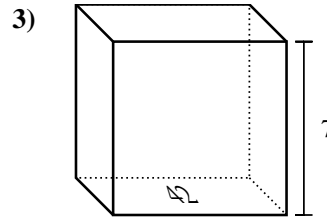
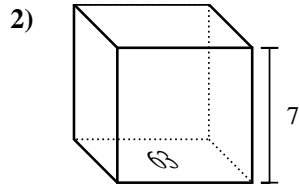
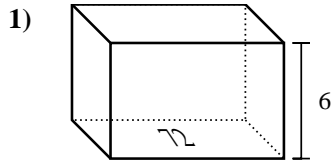


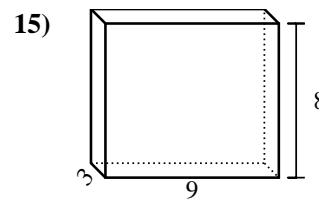
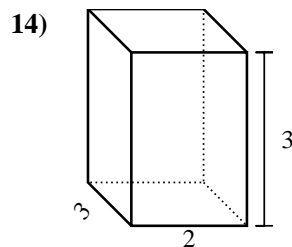
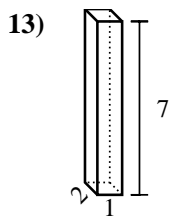
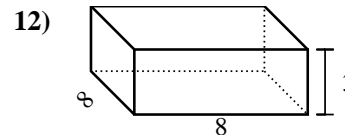
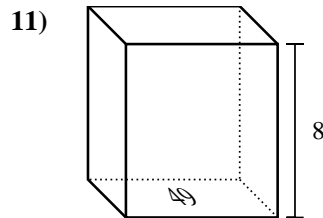
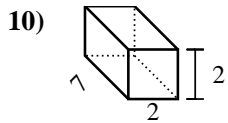
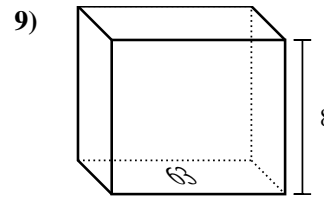
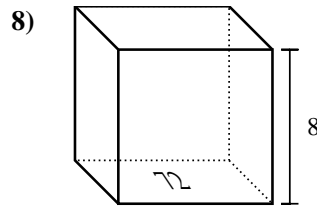
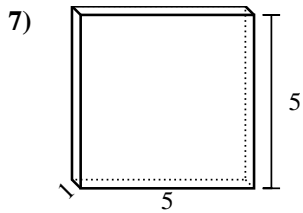
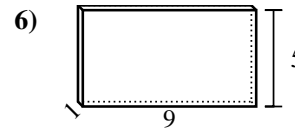
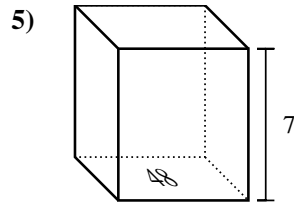
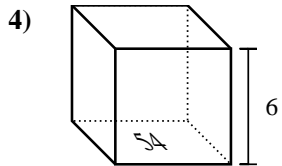
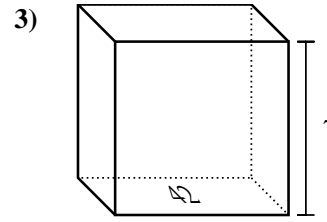
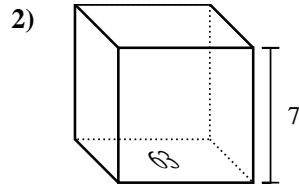
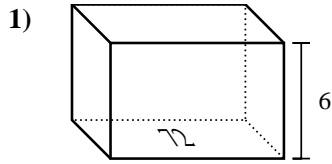


Trova il volume di ogni prisma. Ricorda $V=B \times H$ e $V=L \times P \times H$.



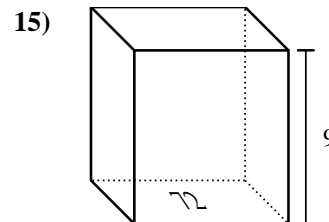
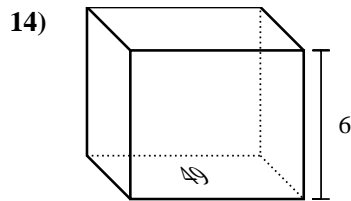
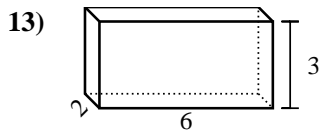
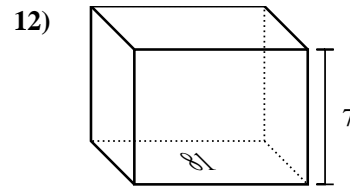
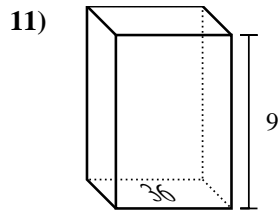
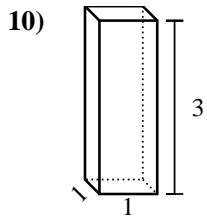
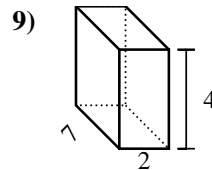
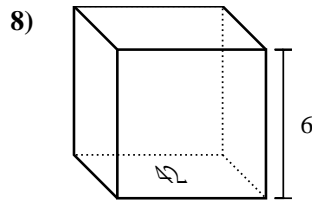
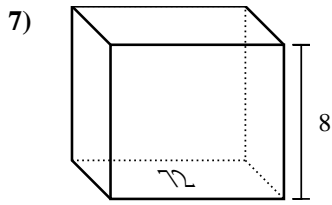
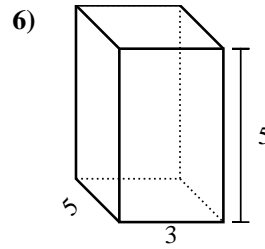
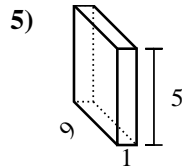
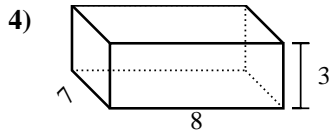
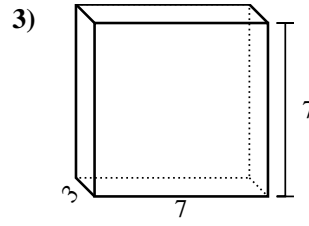
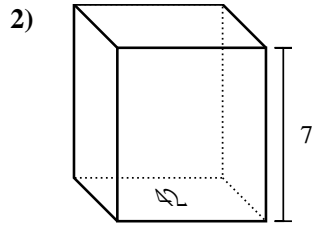
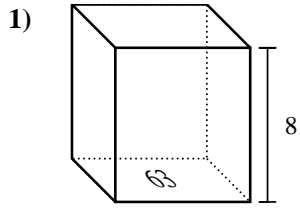
Risposte

1. _____
2. _____
3. _____
4. _____
5. _____
6. _____
7. _____
8. _____
9. _____
10. _____
11. _____
12. _____
13. _____
14. _____
15. _____

Trova il volume di ogni prisma. Ricorda $V=B \times H$ e $V=L \times P \times H$.**Risposte**1. 432 cm³2. 441 cm³3. 294 cm³4. 324 cm³5. 336 cm³6. 45 cm³7. 25 cm³8. 576 cm³9. 504 cm³10. 28 cm³11. 392 cm³12. 192 cm³13. 14 cm³14. 18 cm³15. 216 cm³

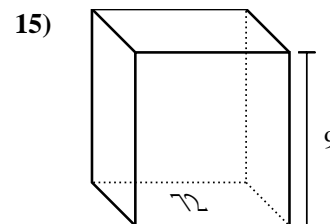
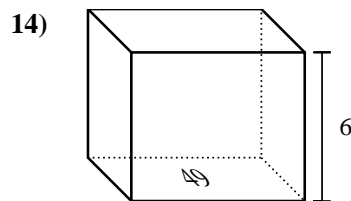
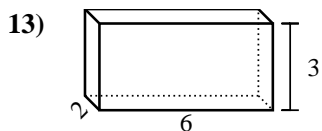
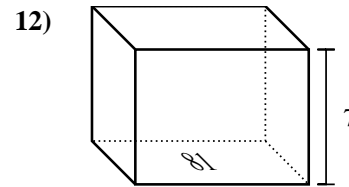
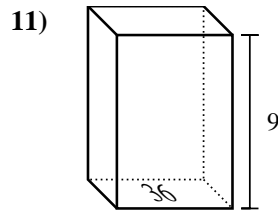
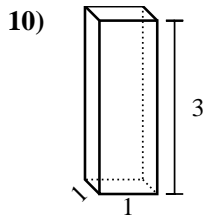
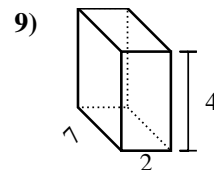
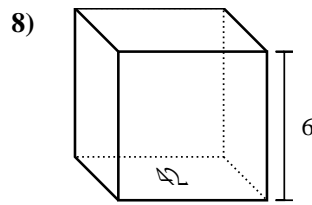
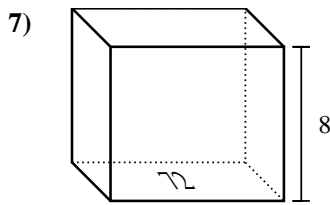
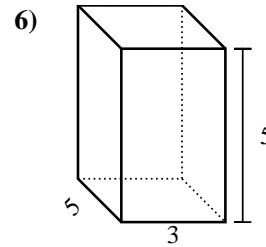
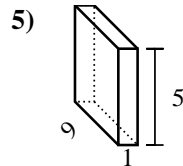
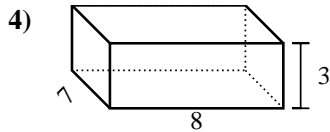
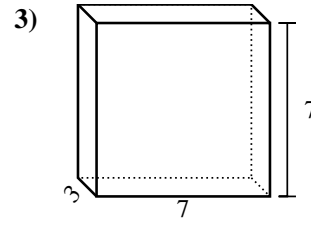
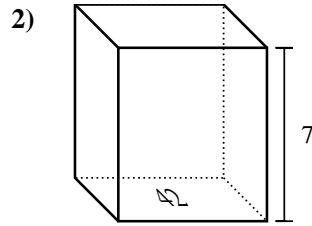
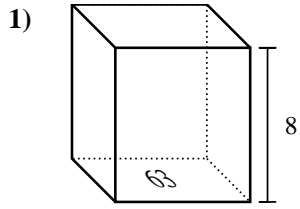


Trova il volume di ogni prisma. Ricorda $V=B \times H$ e $V=L \times P \times H$.



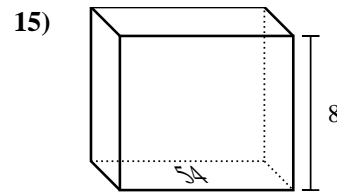
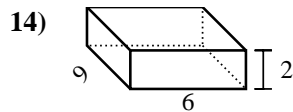
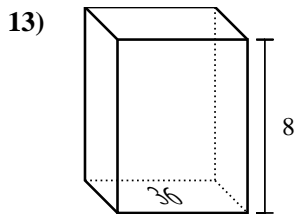
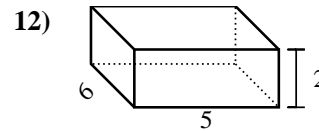
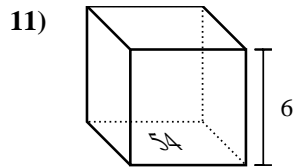
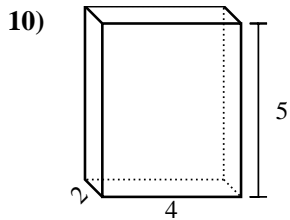
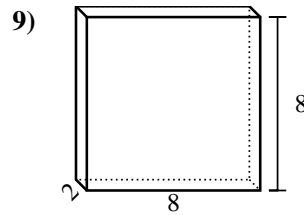
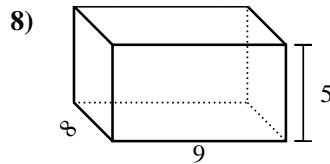
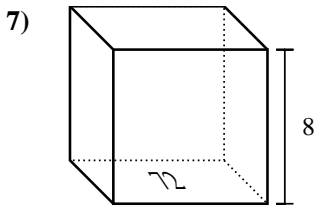
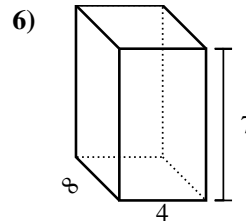
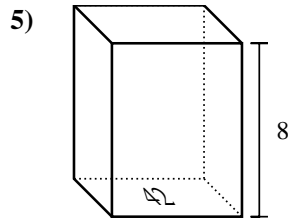
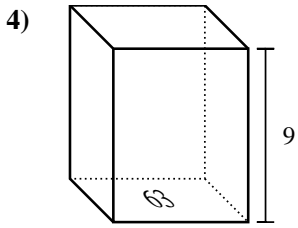
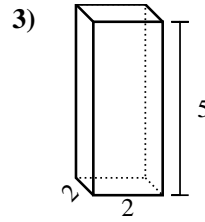
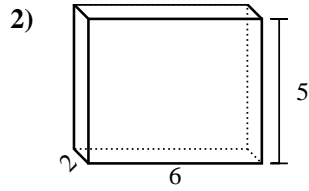
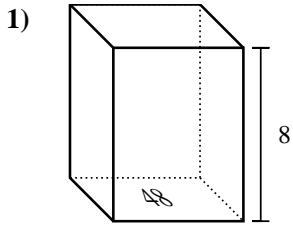
Risposte

1. _____
2. _____
3. _____
4. _____
5. _____
6. _____
7. _____
8. _____
9. _____
10. _____
11. _____
12. _____
13. _____
14. _____
15. _____

Trova il volume di ogni prisma. Ricorda $V=B \times H$ e $V=L \times P \times H$.**Risposte**1. **504 cm³**2. **294 cm³**3. **147 cm³**4. **168 cm³**5. **45 cm³**6. **75 cm³**7. **576 cm³**8. **252 cm³**9. **56 cm³**10. **3 cm³**11. **324 cm³**12. **567 cm³**13. **36 cm³**14. **294 cm³**15. **648 cm³**

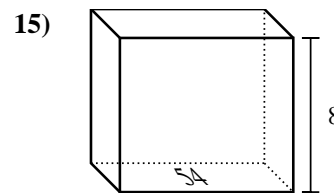
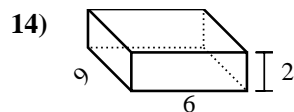
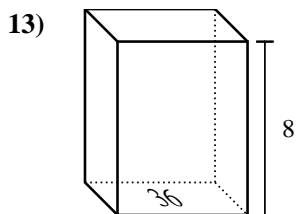
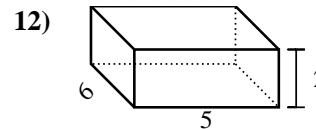
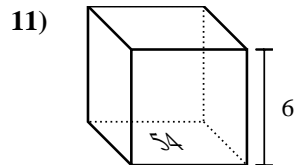
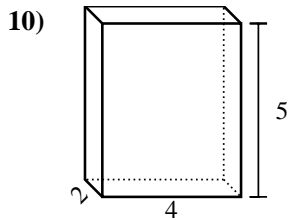
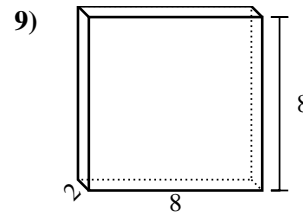
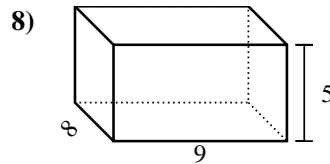
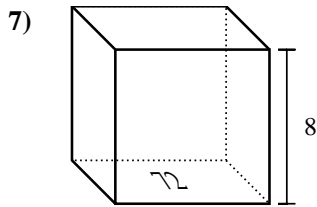
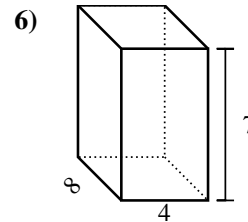
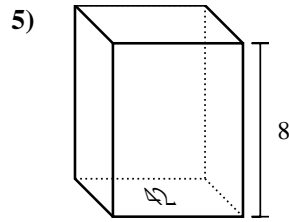
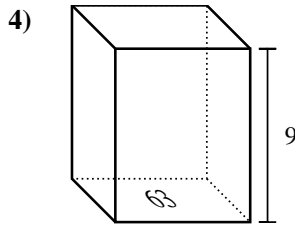
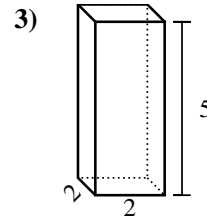
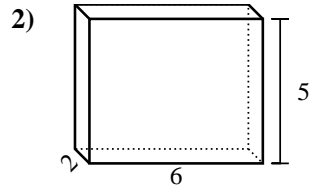
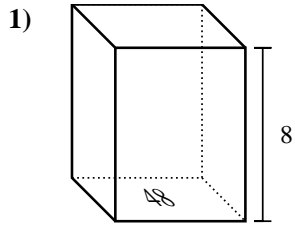


Trova il volume di ogni prisma. Ricorda $V=B \times H$ e $V=L \times P \times H$.



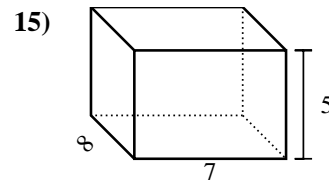
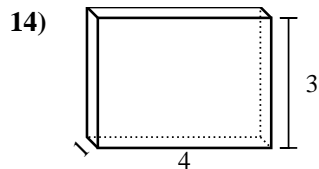
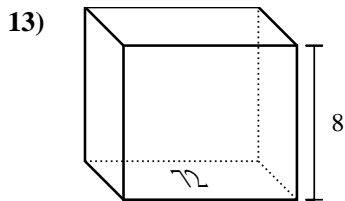
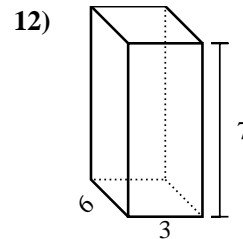
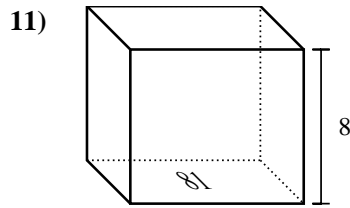
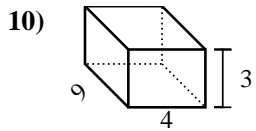
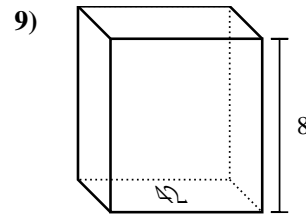
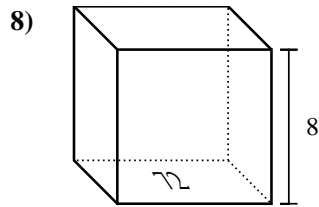
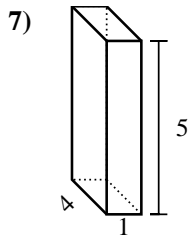
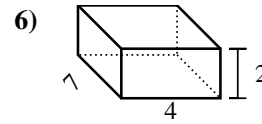
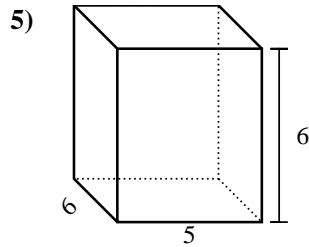
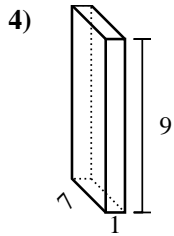
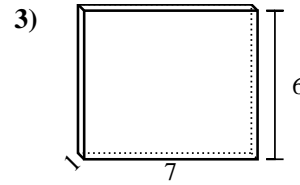
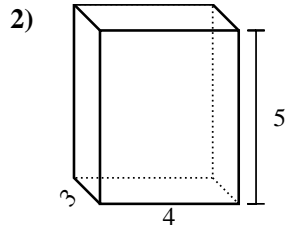
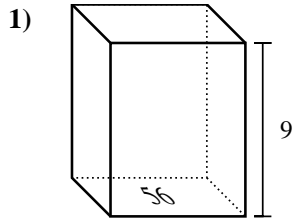
Risposte

1. _____
2. _____
3. _____
4. _____
5. _____
6. _____
7. _____
8. _____
9. _____
10. _____
11. _____
12. _____
13. _____
14. _____
15. _____

Trova il volume di ogni prisma. Ricorda $V=B \times H$ e $V=L \times P \times H$.**Risposte**1. 384 cm³2. 60 cm³3. 20 cm³4. 567 cm³5. 336 cm³6. 224 cm³7. 576 cm³8. 360 cm³9. 128 cm³10. 40 cm³11. 324 cm³12. 60 cm³13. 288 cm³14. 108 cm³15. 432 cm³

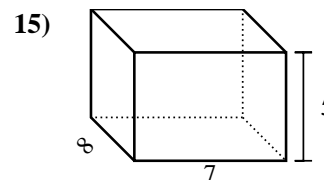
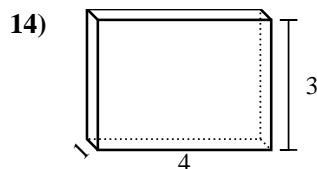
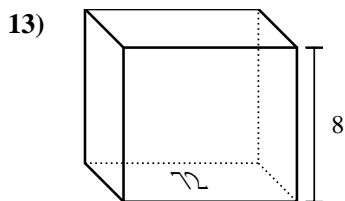
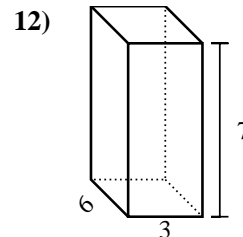
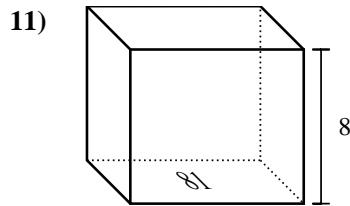
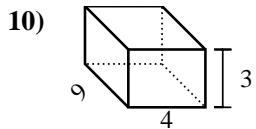
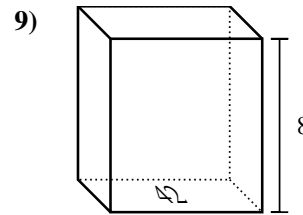
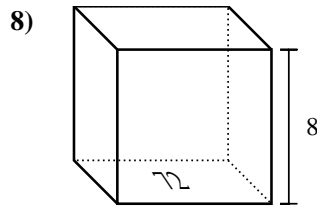
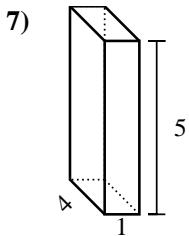
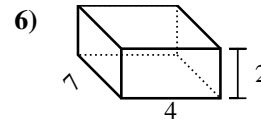
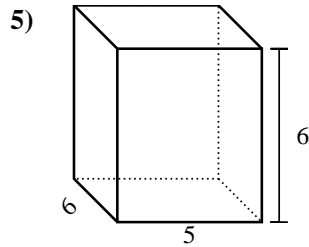
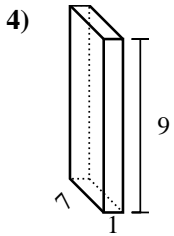
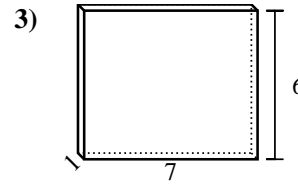
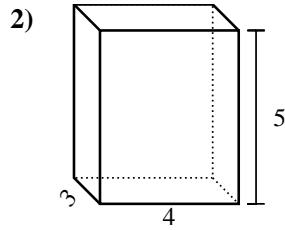
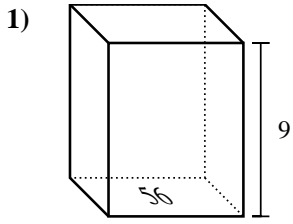


Trova il volume di ogni prisma. Ricorda $V=B \times H$ e $V=L \times P \times H$.



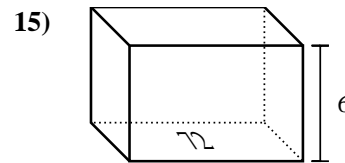
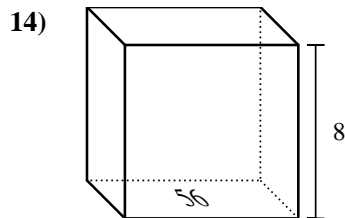
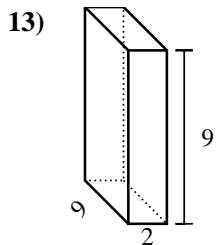
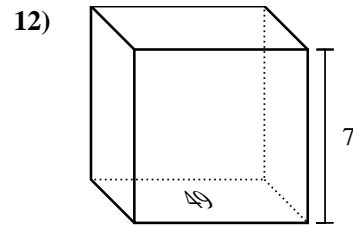
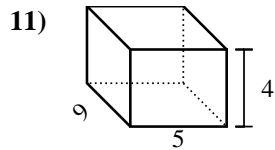
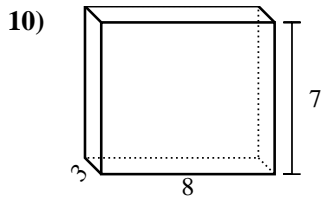
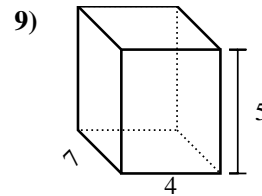
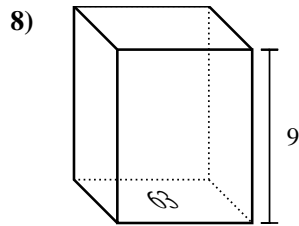
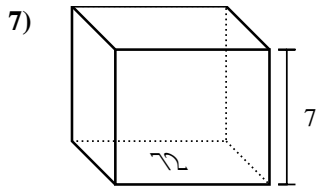
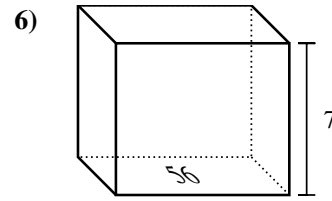
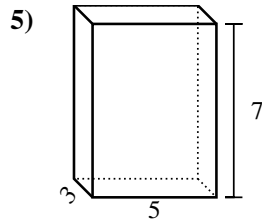
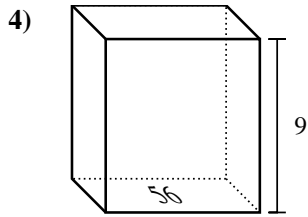
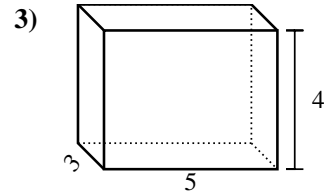
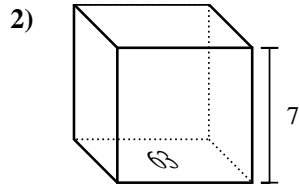
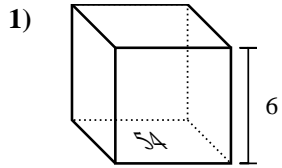
Risposte

1. _____
2. _____
3. _____
4. _____
5. _____
6. _____
7. _____
8. _____
9. _____
10. _____
11. _____
12. _____
13. _____
14. _____
15. _____

Trova il volume di ogni prisma. Ricorda $V=B \times H$ e $V=L \times P \times H$.**Risposte**1. **504 cm³**2. **60 cm³**3. **42 cm³**4. **63 cm³**5. **180 cm³**6. **56 cm³**7. **20 cm³**8. **576 cm³**9. **336 cm³**10. **108 cm³**11. **648 cm³**12. **126 cm³**13. **576 cm³**14. **12 cm³**15. **280 cm³**

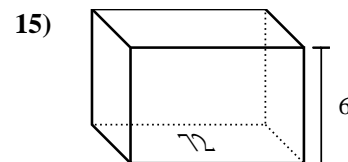
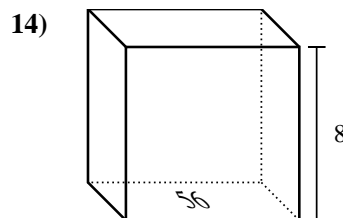
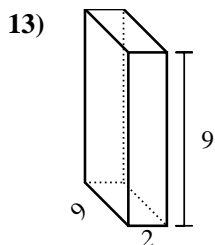
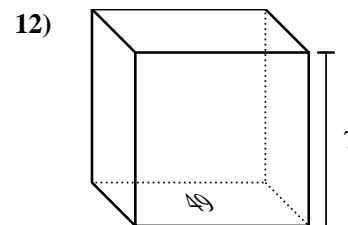
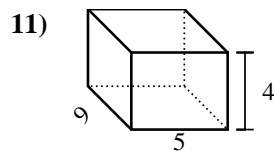
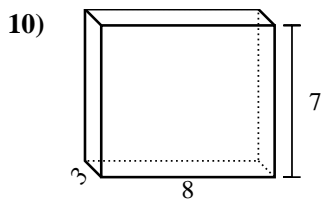
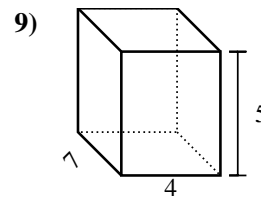
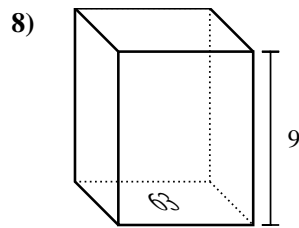
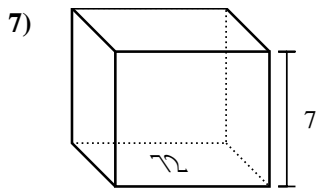
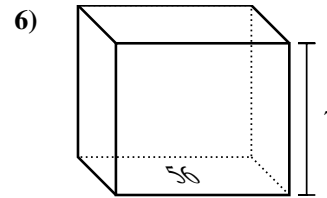
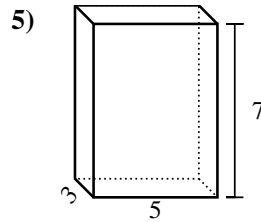
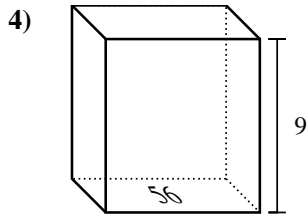
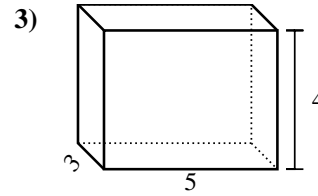
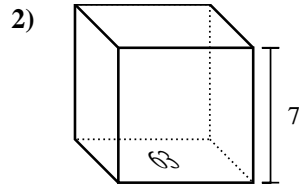
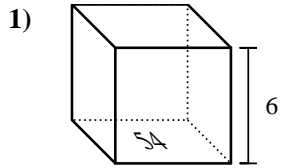


Trova il volume di ogni prisma. Ricorda $V=B \times H$ e $V=L \times P \times H$.



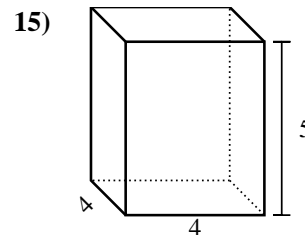
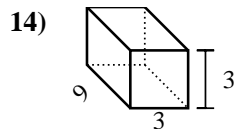
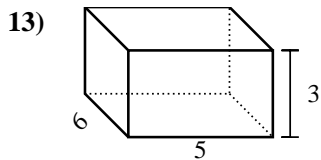
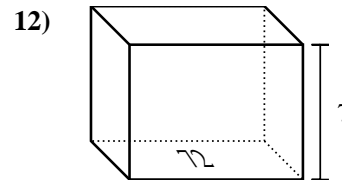
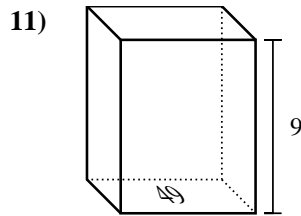
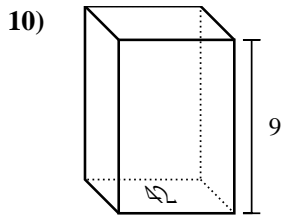
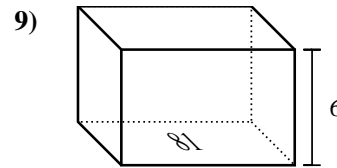
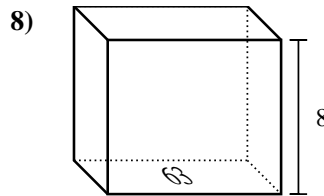
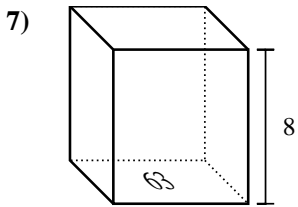
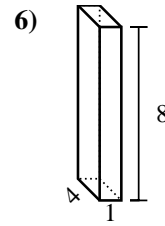
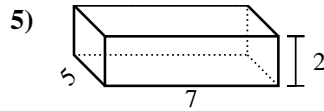
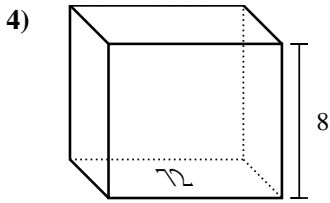
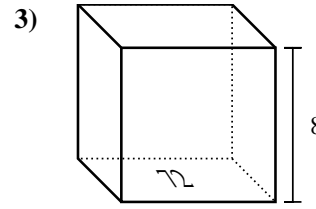
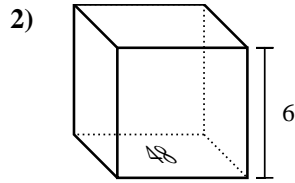
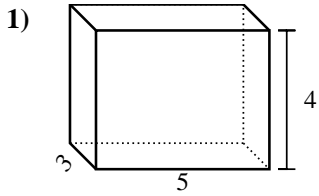
Risposte

1. _____
2. _____
3. _____
4. _____
5. _____
6. _____
7. _____
8. _____
9. _____
10. _____
11. _____
12. _____
13. _____
14. _____
15. _____

Trova il volume di ogni prisma. Ricorda $V=B \times H$ e $V=L \times P \times H$.**Risposte**1. **324 cm³**2. **441 cm³**3. **60 cm³**4. **504 cm³**5. **105 cm³**6. **392 cm³**7. **504 cm³**8. **567 cm³**9. **140 cm³**10. **168 cm³**11. **180 cm³**12. **343 cm³**13. **162 cm³**14. **448 cm³**15. **432 cm³**

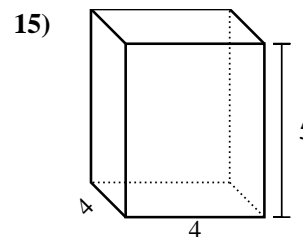
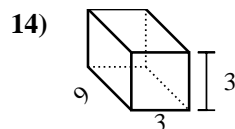
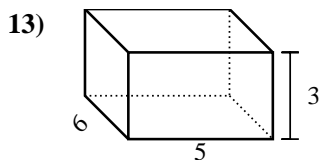
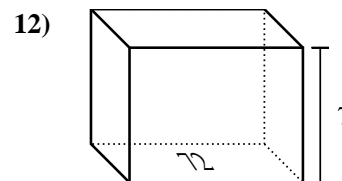
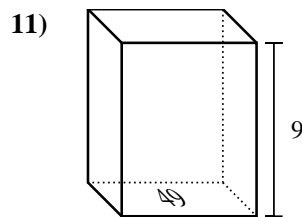
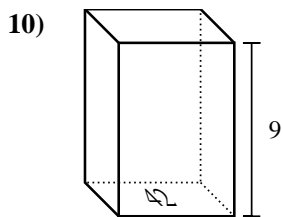
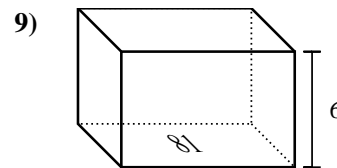
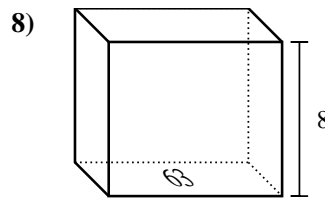
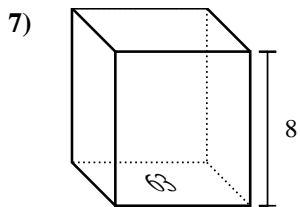
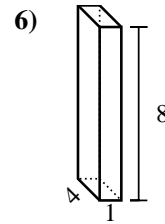
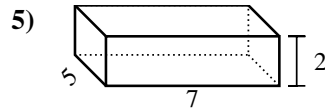
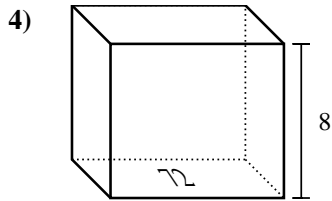
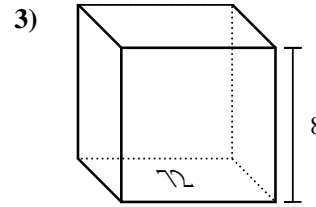
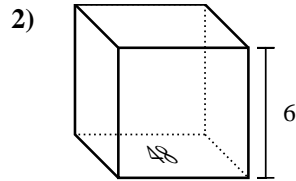
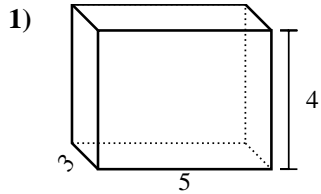


Trova il volume di ogni prisma. Ricorda $V=B \times H$ e $V=L \times P \times H$.



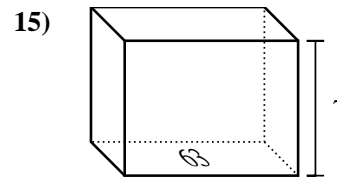
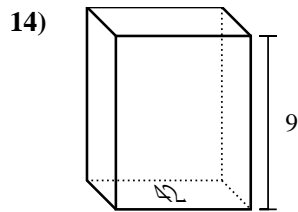
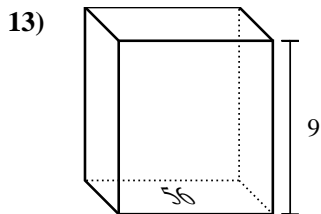
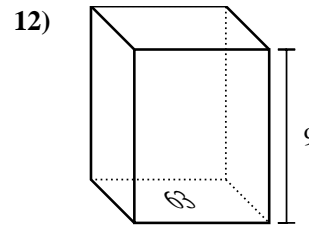
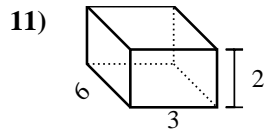
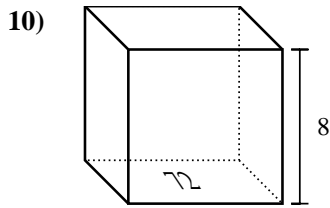
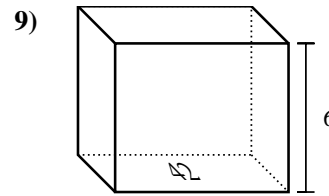
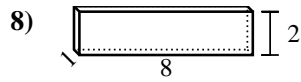
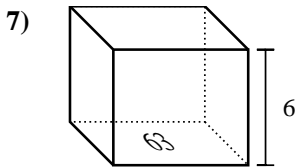
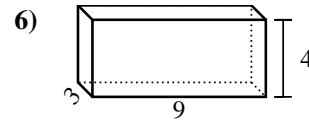
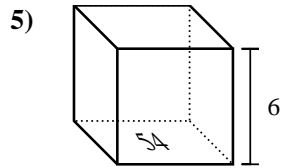
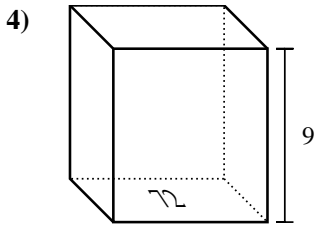
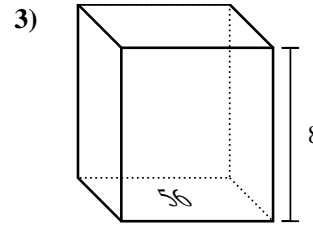
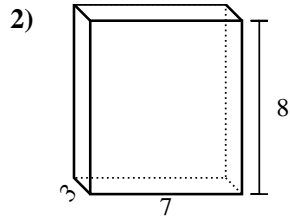
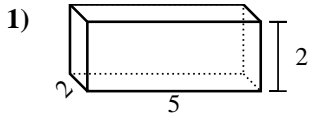
Risposte

1. _____
2. _____
3. _____
4. _____
5. _____
6. _____
7. _____
8. _____
9. _____
10. _____
11. _____
12. _____
13. _____
14. _____
15. _____

Trova il volume di ogni prisma. Ricorda $V=B \times H$ e $V=L \times P \times H$.**Risposte**1. 60 cm³2. 288 cm³3. 576 cm³4. 576 cm³5. 70 cm³6. 32 cm³7. 504 cm³8. 504 cm³9. 486 cm³10. 378 cm³11. 441 cm³12. 504 cm³13. 90 cm³14. 81 cm³15. 80 cm³

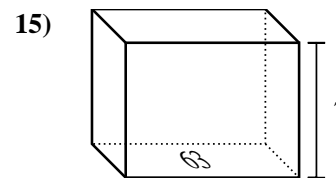
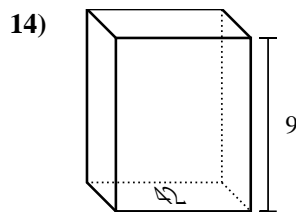
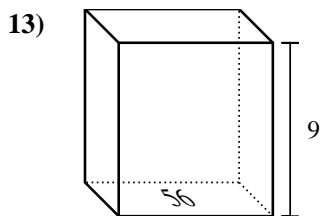
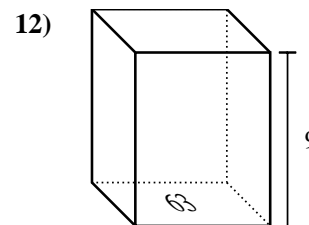
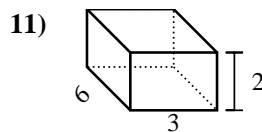
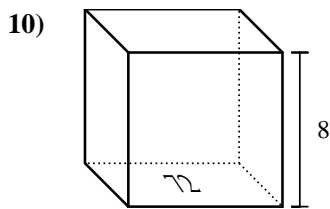
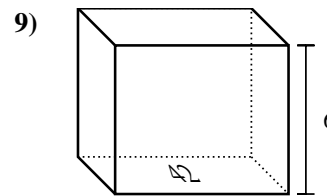
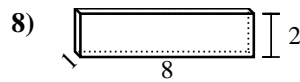
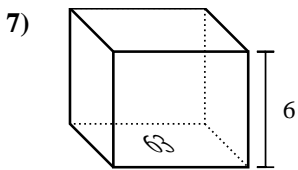
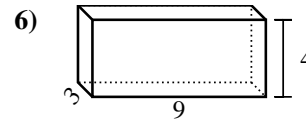
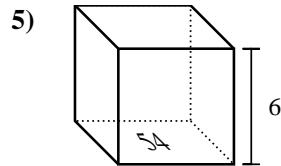
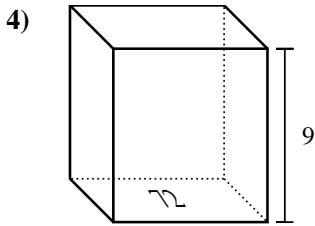
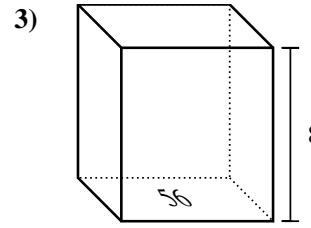
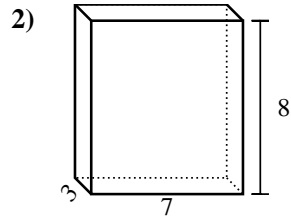
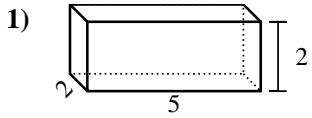


Trova il volume di ogni prisma. Ricorda $V=B \times H$ e $V=L \times P \times H$.



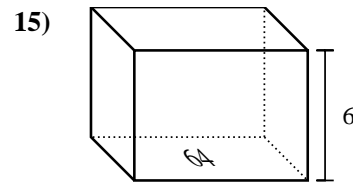
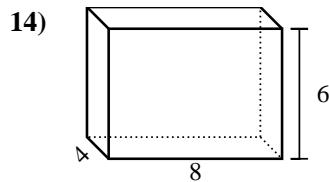
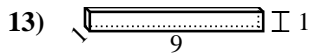
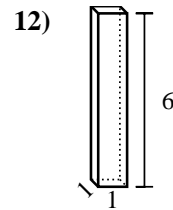
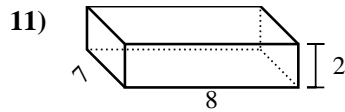
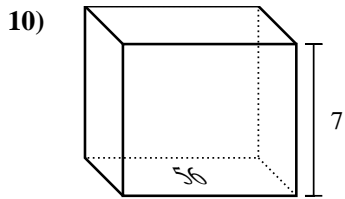
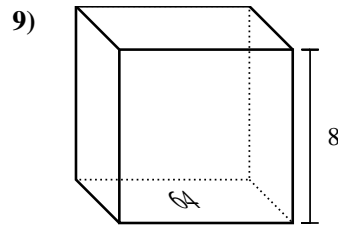
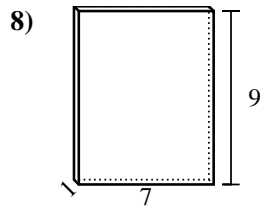
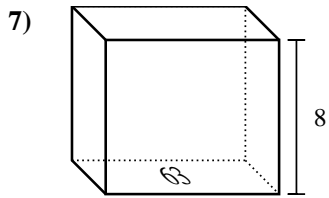
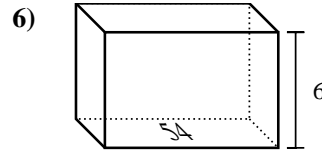
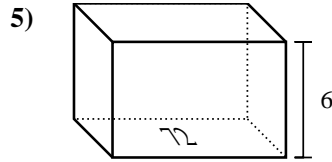
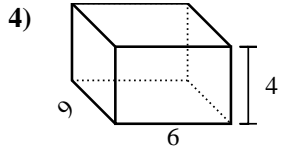
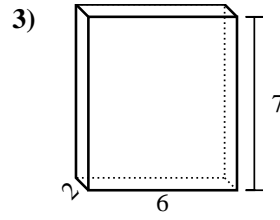
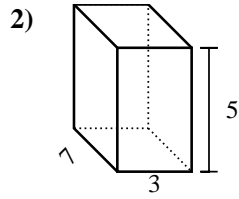
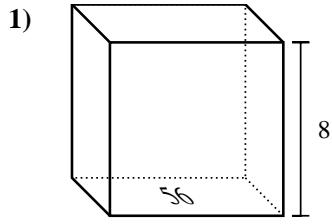
Risposte

1. _____
2. _____
3. _____
4. _____
5. _____
6. _____
7. _____
8. _____
9. _____
10. _____
11. _____
12. _____
13. _____
14. _____
15. _____

Trova il volume di ogni prisma. Ricorda $V=B \times H$ e $V=L \times P \times H$.**Risposte**1. **20 cm³**2. **168 cm³**3. **448 cm³**4. **648 cm³**5. **324 cm³**6. **108 cm³**7. **378 cm³**8. **16 cm³**9. **252 cm³**10. **576 cm³**11. **36 cm³**12. **567 cm³**13. **504 cm³**14. **378 cm³**15. **441 cm³**



Trova il volume di ogni prisma. Ricorda $V=B \times H$ e $V=L \times P \times H$.

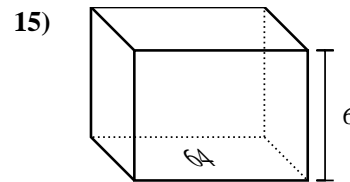
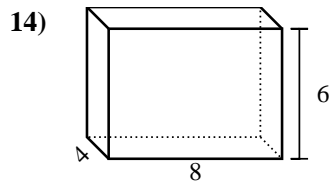
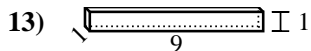
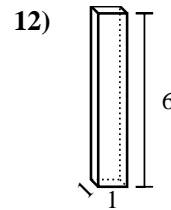
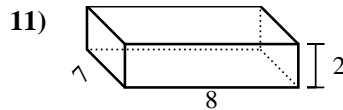
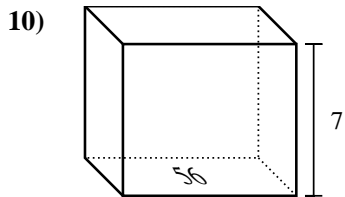
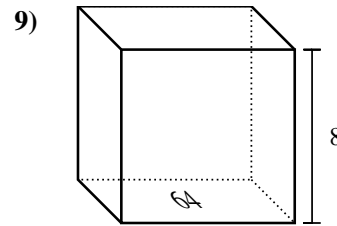
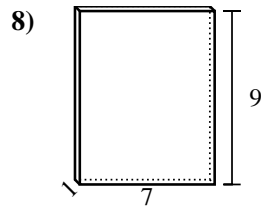
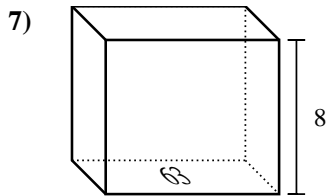
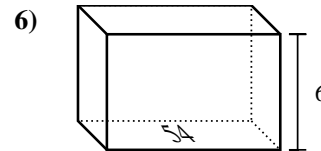
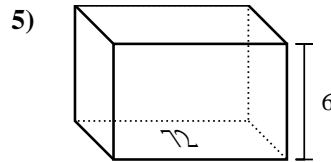
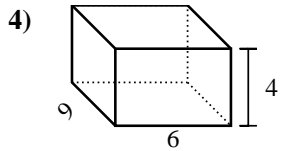
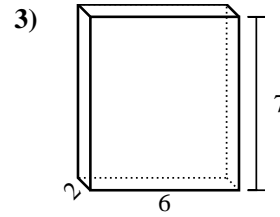
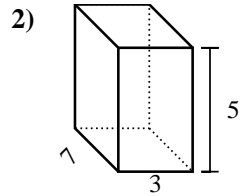
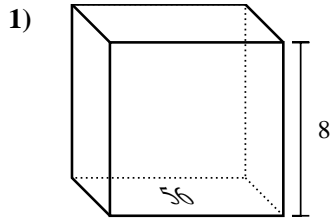


Risposte

1. _____
2. _____
3. _____
4. _____
5. _____
6. _____
7. _____
8. _____
9. _____
10. _____
11. _____
12. _____
13. _____
14. _____
15. _____



Trova il volume di ogni prisma. Ricorda $V=B \times H$ e $V=L \times P \times H$.

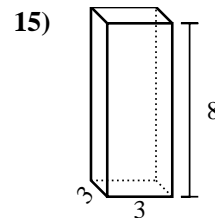
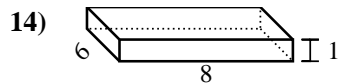
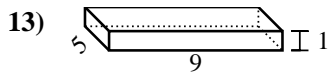
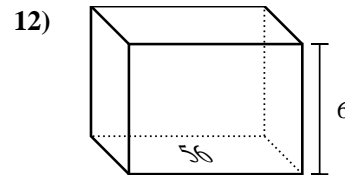
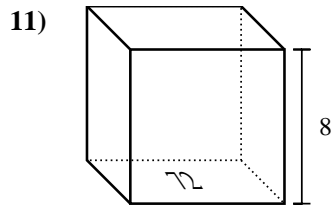
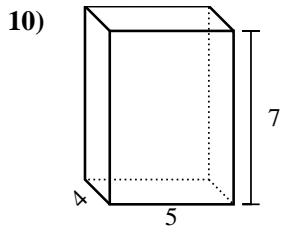
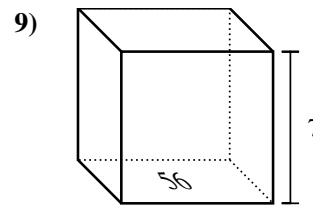
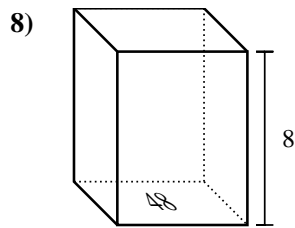
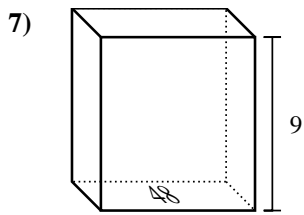
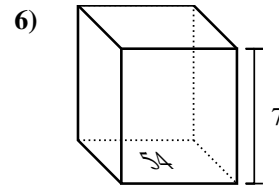
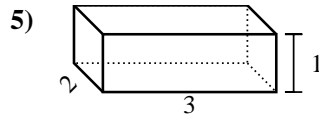
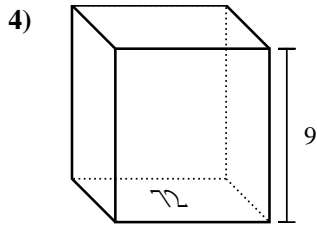
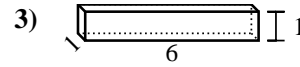
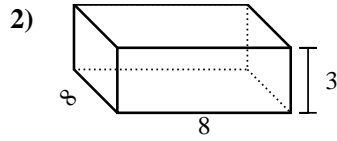
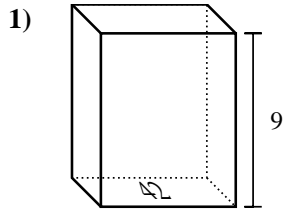


Risposte

1. 448 cm³
2. 105 cm³
3. 84 cm³
4. 216 cm³
5. 432 cm³
6. 324 cm³
7. 504 cm³
8. 63 cm³
9. 512 cm³
10. 392 cm³
11. 112 cm³
12. 6 cm³
13. 9 cm³
14. 192 cm³
15. 384 cm³



Trova il volume di ogni prisma. Ricorda $V=B \times H$ e $V=L \times P \times H$.

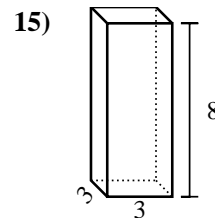
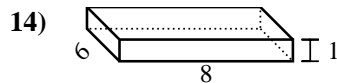
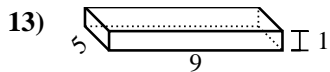
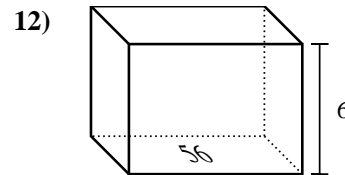
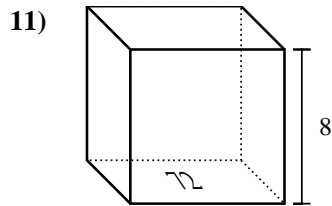
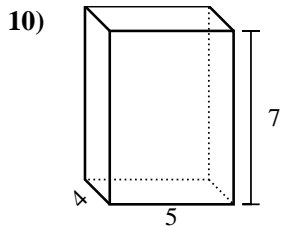
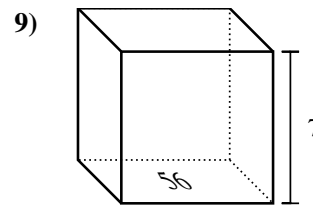
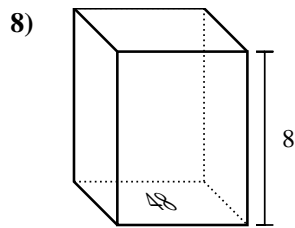
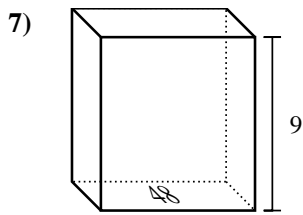
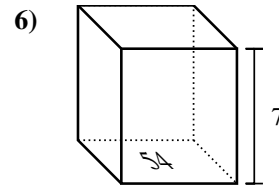
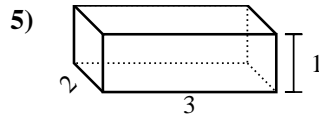
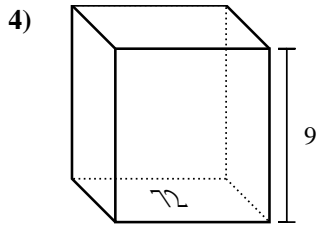
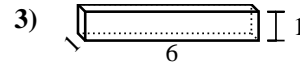
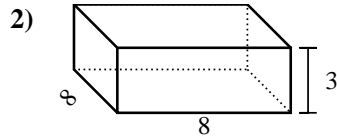
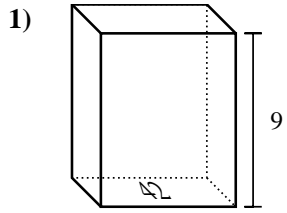


Risposte

1. _____
2. _____
3. _____
4. _____
5. _____
6. _____
7. _____
8. _____
9. _____
10. _____
11. _____
12. _____
13. _____
14. _____
15. _____



Trova il volume di ogni prisma. Ricorda $V=B \times H$ e $V=L \times P \times H$.

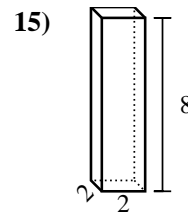
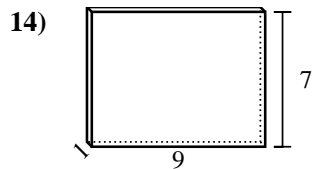
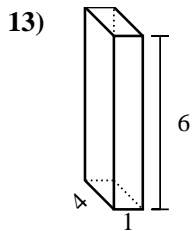
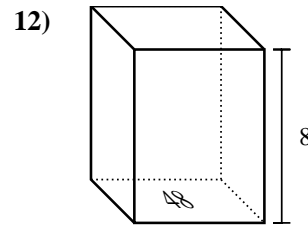
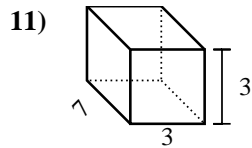
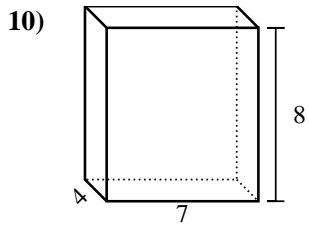
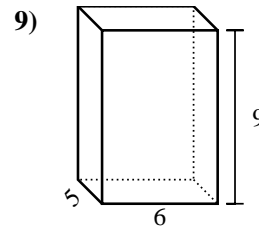
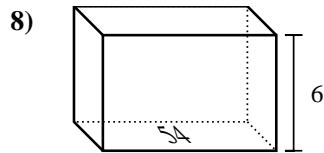
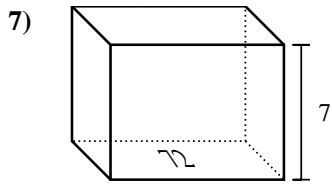
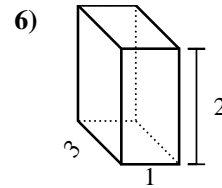
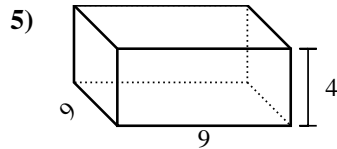
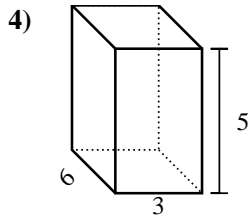
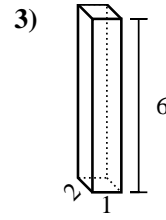
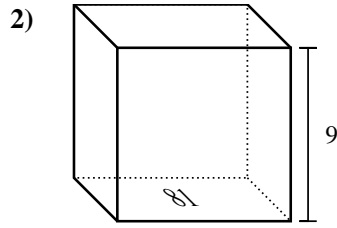
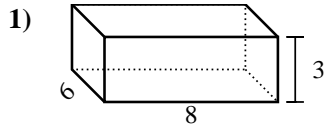


Risposte

1. 378 cm³
2. 192 cm³
3. 6 cm³
4. 648 cm³
5. 6 cm³
6. 378 cm³
7. 432 cm³
8. 384 cm³
9. 392 cm³
10. 140 cm³
11. 576 cm³
12. 336 cm³
13. 45 cm³
14. 48 cm³
15. 72 cm³

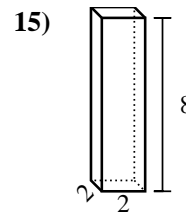
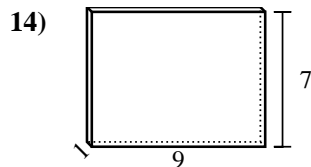
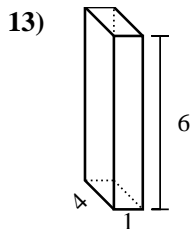
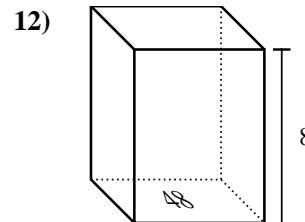
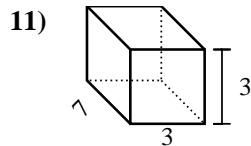
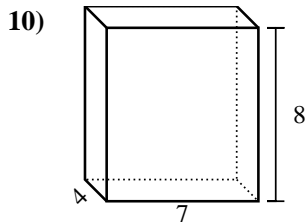
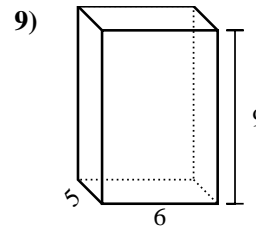
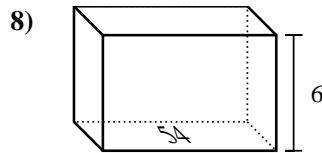
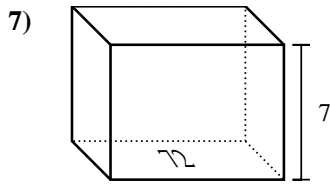
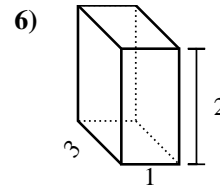
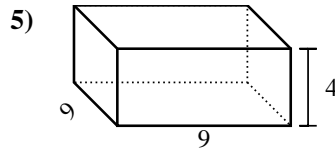
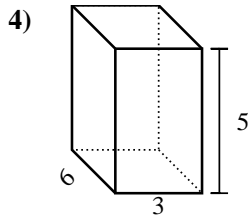
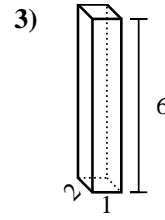
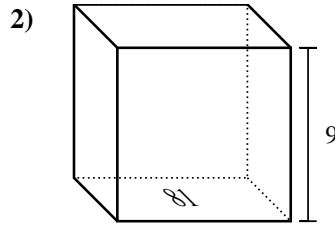
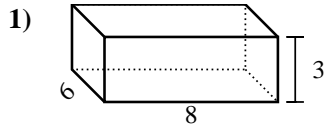


Trova il volume di ogni prisma. Ricorda $V=B \times H$ e $V=L \times P \times H$.



Risposte

1. _____
2. _____
3. _____
4. _____
5. _____
6. _____
7. _____
8. _____
9. _____
10. _____
11. _____
12. _____
13. _____
14. _____
15. _____

Trova il volume di ogni prisma. Ricorda $V=B \times H$ e $V=L \times P \times H$.**Risposte**1. **144 cm³**2. **729 cm³**3. **12 cm³**4. **90 cm³**5. **324 cm³**6. **6 cm³**7. **504 cm³**8. **324 cm³**9. **270 cm³**10. **224 cm³**11. **63 cm³**12. **384 cm³**13. **24 cm³**14. **63 cm³**15. **32 cm³**