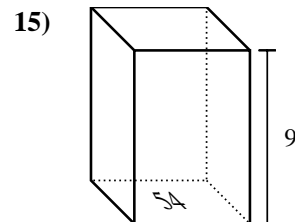
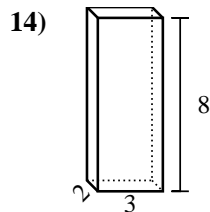
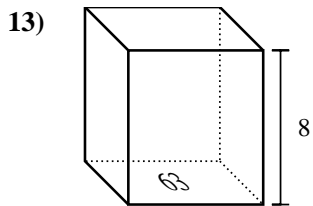
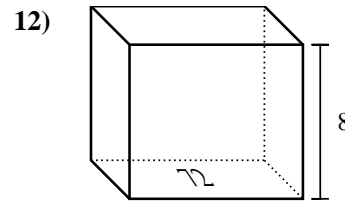
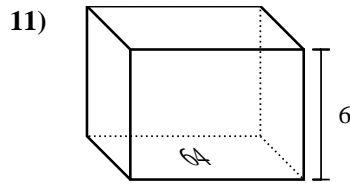
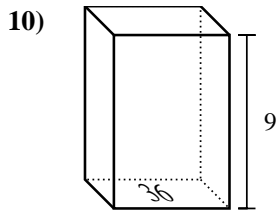
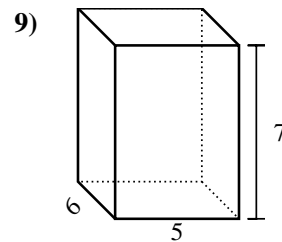
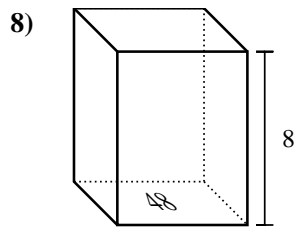
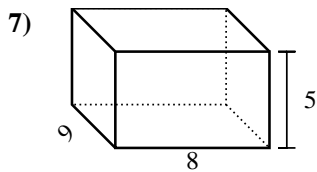
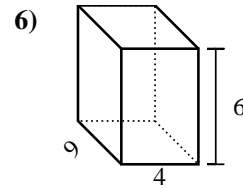
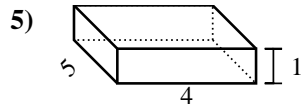
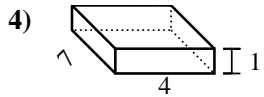
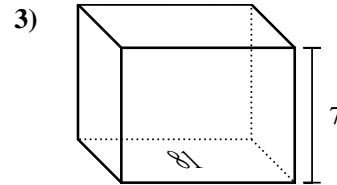
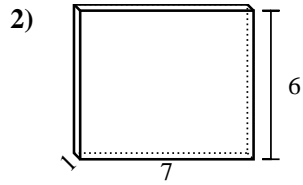
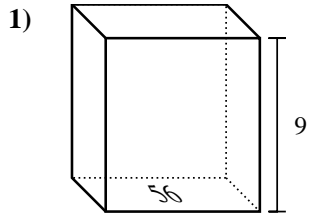




Trova il volume di ogni prisma. Ricorda $V=B \times H$ e $V=L \times P \times H$.

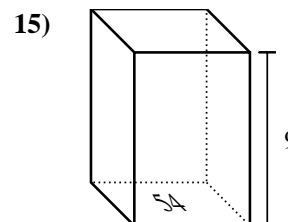
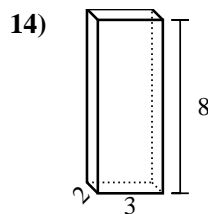
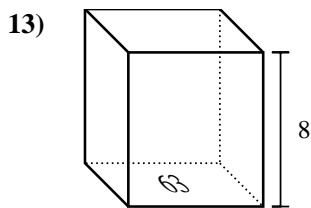
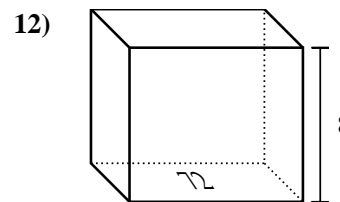
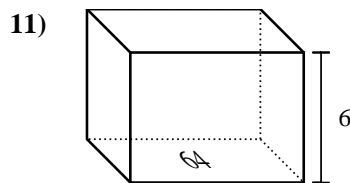
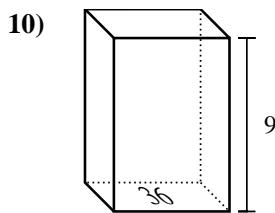
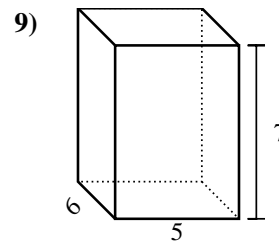
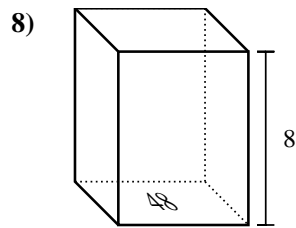
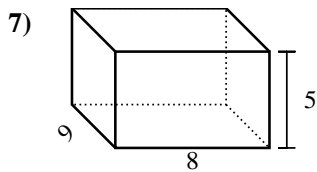
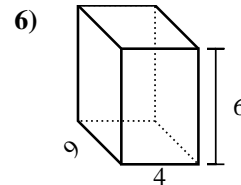
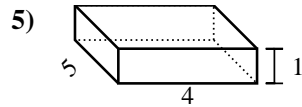
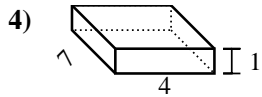
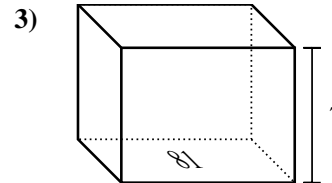
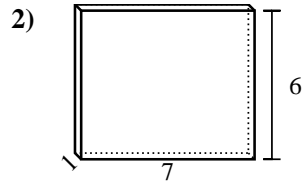
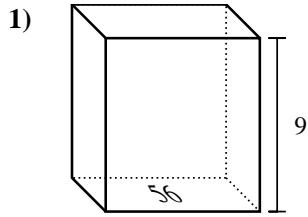


Risposte

1. _____
2. _____
3. _____
4. _____
5. _____
6. _____
7. _____
8. _____
9. _____
10. _____
11. _____
12. _____
13. _____
14. _____
15. _____



Trova il volume di ogni prisma. Ricorda $V=B \times H$ e $V=L \times P \times H$.



Risposte

1. **504 cm³**

2. **42 cm³**

3. **567 cm³**

4. **28 cm³**

5. **20 cm³**

6. **216 cm³**

7. **360 cm³**

8. **384 cm³**

9. **210 cm³**

10. **324 cm³**

11. **384 cm³**

12. **576 cm³**

13. **504 cm³**

14. **48 cm³**

15. **486 cm³**