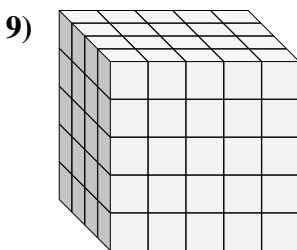
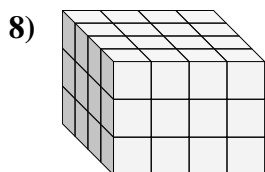
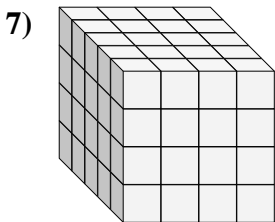
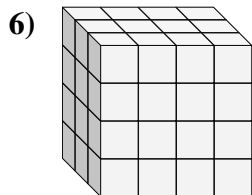
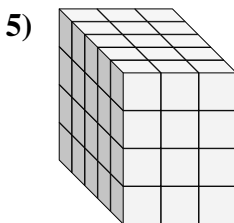
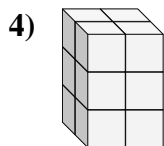
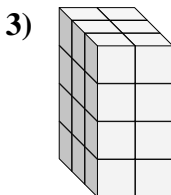
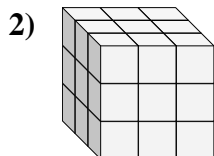
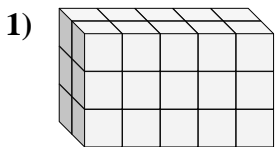
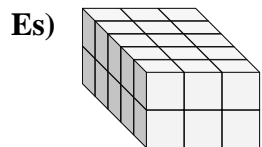




Trova la lunghezza, larghezza e altezza di ogni prisma. Poi calcola il volume.



**Risposte**

Es. 5 3 2 30

1. \_\_\_\_\_

2. \_\_\_\_\_

3. \_\_\_\_\_

4. \_\_\_\_\_

5. \_\_\_\_\_

6. \_\_\_\_\_

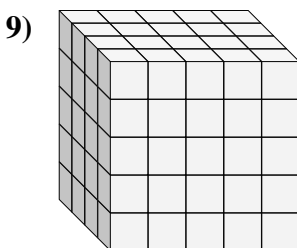
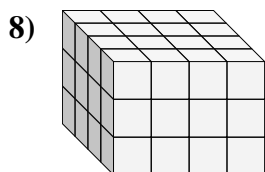
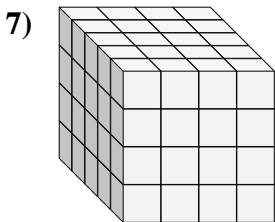
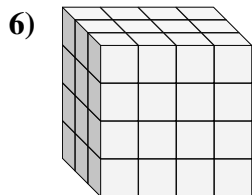
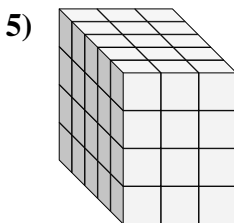
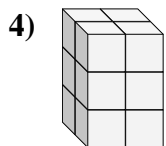
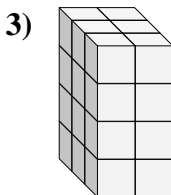
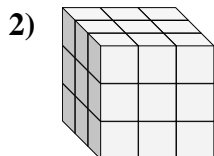
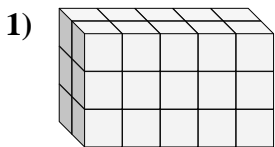
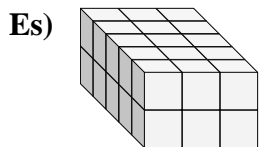
7. \_\_\_\_\_

8. \_\_\_\_\_

9. \_\_\_\_\_



Trova la lunghezza, larghezza e altezza di ogni prisma. Poi calcola il volume.



**Risposte**

Es. 5 3 2 30

1. 2 5 3 30

2. 3 3 3 27

3. 3 2 4 24

4. 2 2 3 12

5. 5 3 4 60

6. 3 4 4 48

7. 5 4 4 80

8. 4 4 3 48

9. 4 5 5 100