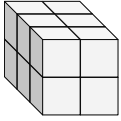


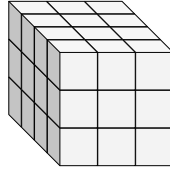


Trova la lunghezza, larghezza e altezza di ogni prisma. Poi calcola il volume.

Es)



1)



Risposte

Es. 3 2 2 12

1. _____

2. _____

3. _____

4. _____

5. _____

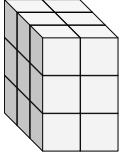
6. _____

7. _____

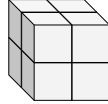
8. _____

9. _____

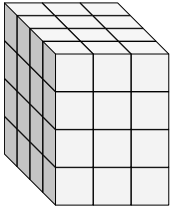
2)



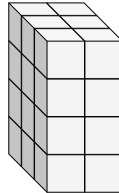
3)



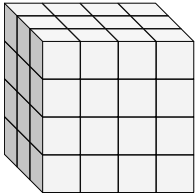
4)



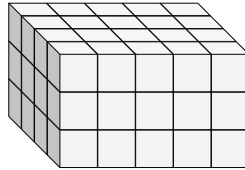
5)



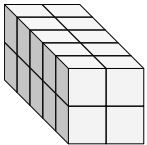
6)



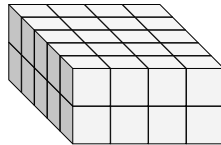
7)



8)

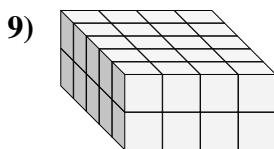
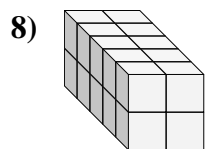
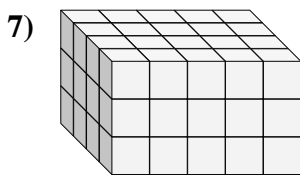
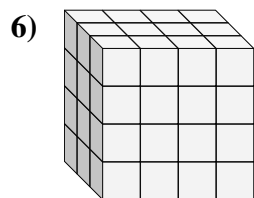
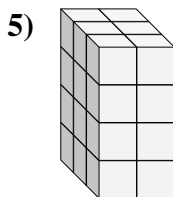
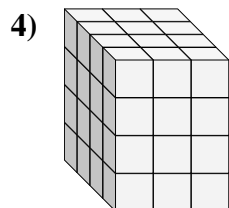
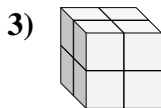
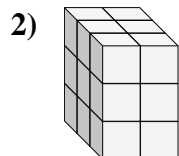
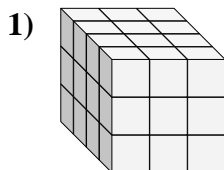
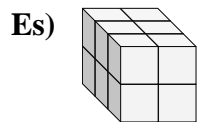


9)





Trova la lunghezza, larghezza e altezza di ogni prisma. Poi calcola il volume.

**Risposte**Es. 3 2 2 121. 4 3 3 362. 3 2 3 183. 2 2 2 84. 4 3 4 485. 3 2 4 246. 3 4 4 487. 4 5 3 608. 5 2 2 209. 5 4 2 40