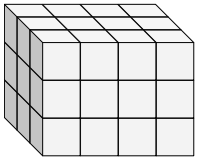


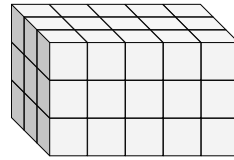


Trova la lunghezza, larghezza e altezza di ogni prisma. Poi calcola il volume.

Es)



1)



Risposte

Es. 3 4 3 36

1. _____

2. _____

3. _____

4. _____

5. _____

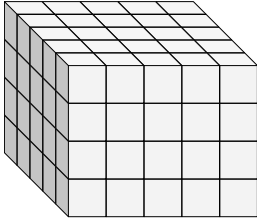
6. _____

7. _____

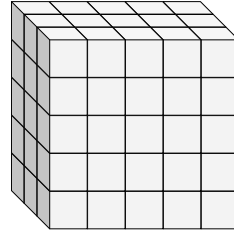
8. _____

9. _____

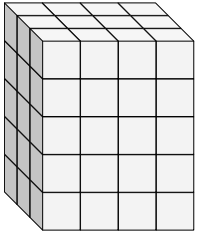
2)



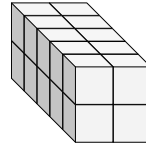
3)



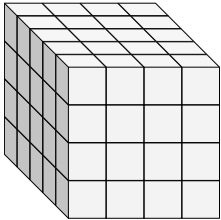
4)



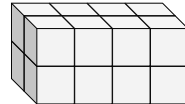
5)



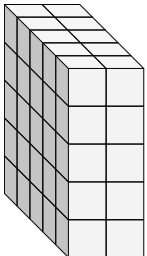
6)



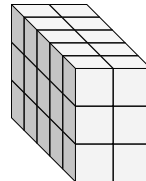
7)



8)

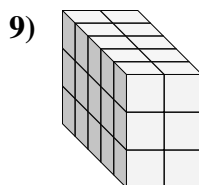
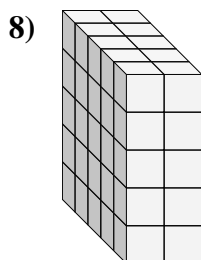
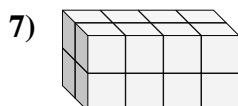
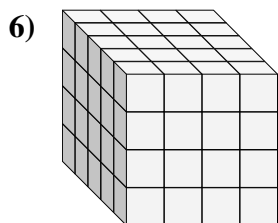
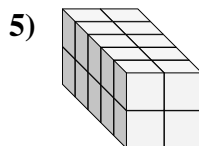
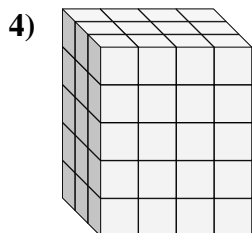
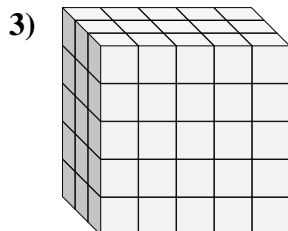
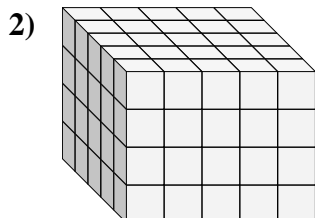
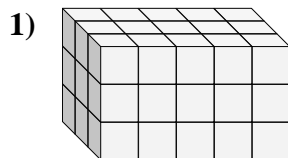
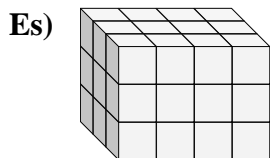


9)





Trova la lunghezza, larghezza e altezza di ogni prisma. Poi calcola il volume.

**Risposte**Es. 3 4 3 361. 3 5 3 452. 5 5 4 1003. 3 5 5 754. 3 4 5 605. 5 2 2 206. 5 4 4 807. 2 4 2 168. 5 2 5 509. 5 2 3 30