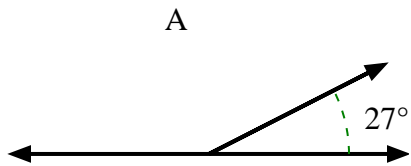




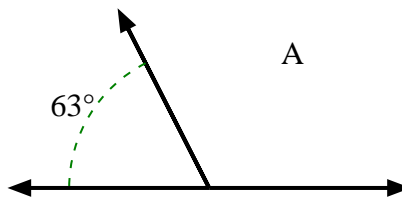
Trova il valore di 'A' nell'insieme degli angoli supplementari.

**Risposte**

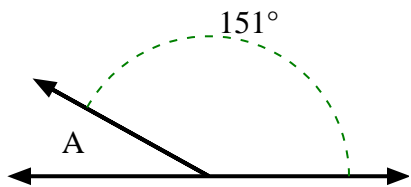
1)



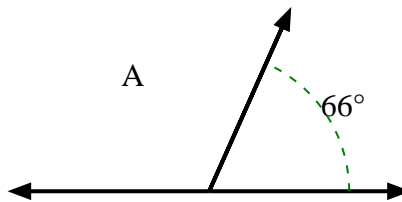
2)



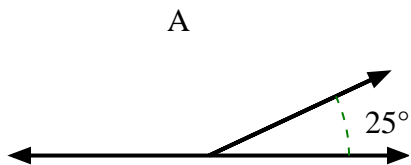
3)



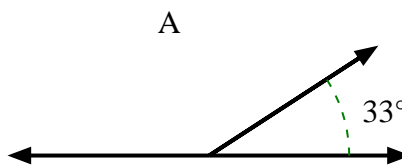
4)



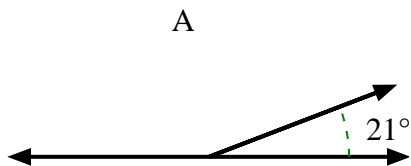
5)



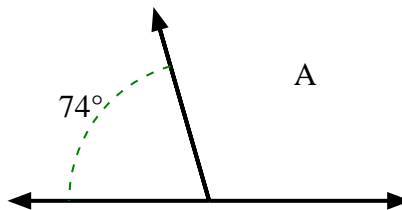
6)



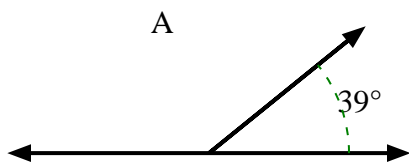
7)



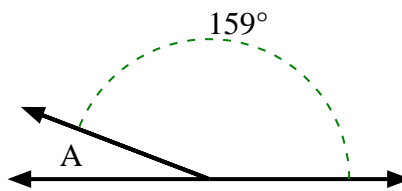
8)



9)



10)

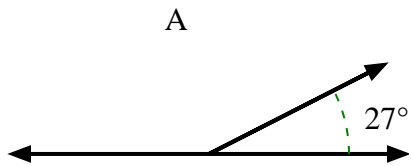


1. \_\_\_\_\_
2. \_\_\_\_\_
3. \_\_\_\_\_
4. \_\_\_\_\_
5. \_\_\_\_\_
6. \_\_\_\_\_
7. \_\_\_\_\_
8. \_\_\_\_\_
9. \_\_\_\_\_
10. \_\_\_\_\_

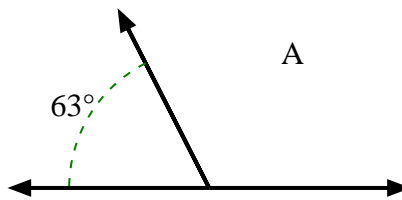


Trova il valore di 'A' nell'insieme degli angoli supplementari.

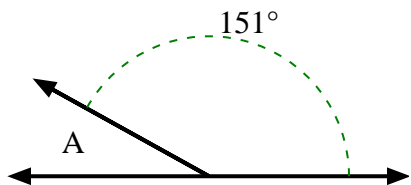
1)



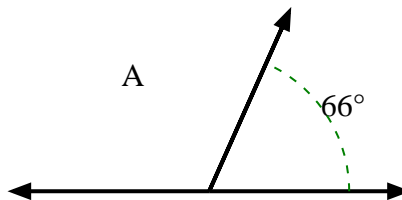
2)



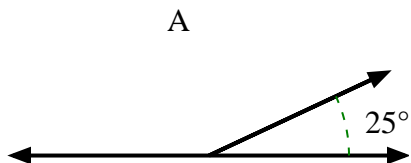
3)



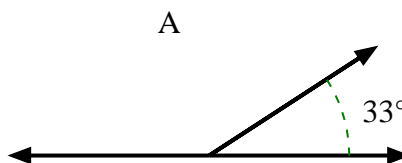
4)



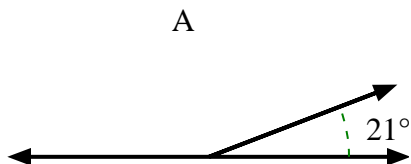
5)



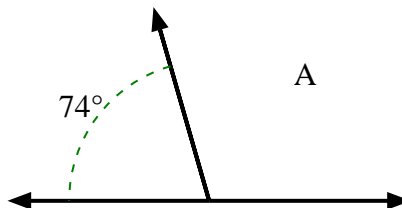
6)



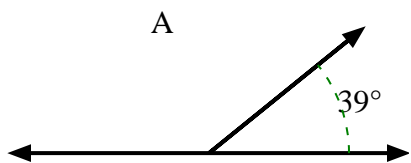
7)



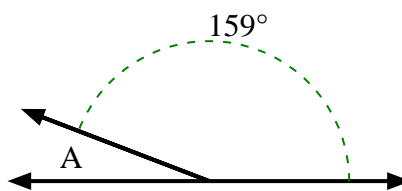
8)



9)



10)

**Risposte**1. **153°**2. **117°**3. **29°**4. **114°**5. **155°**6. **147°**7. **159°**8. **106°**9. **141°**10. **21°**