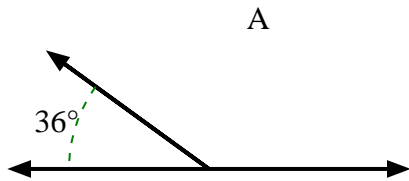


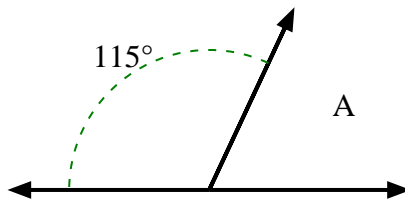


Trova il valore di 'A' nell'insieme degli angoli supplementari.

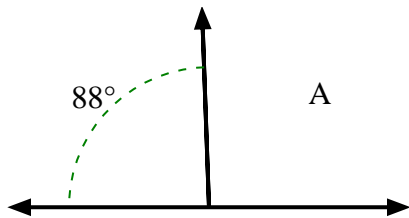
1)



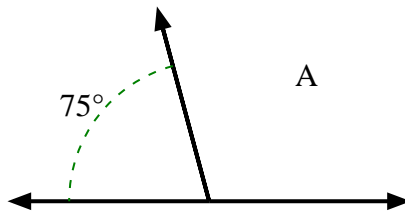
2)



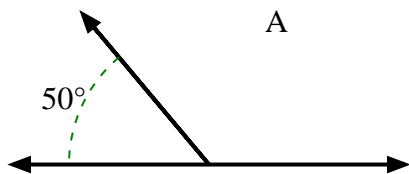
3)



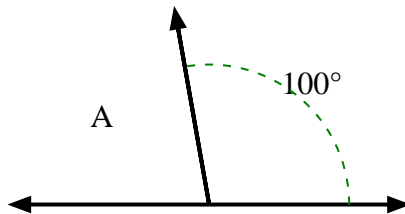
4)



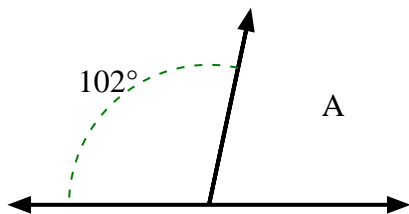
5)



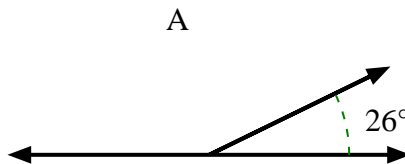
6)



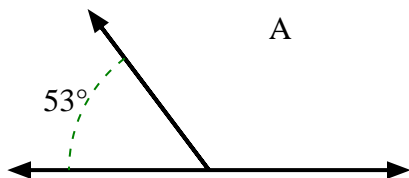
7)



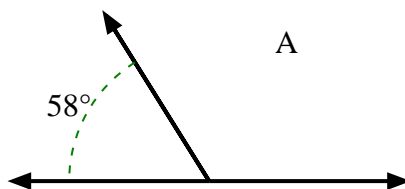
8)



9)



10)



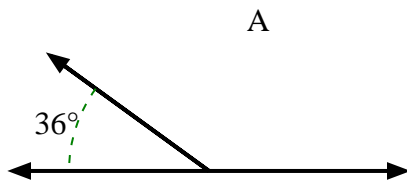
**Risposte**

- 1. \_\_\_\_\_
- 2. \_\_\_\_\_
- 3. \_\_\_\_\_
- 4. \_\_\_\_\_
- 5. \_\_\_\_\_
- 6. \_\_\_\_\_
- 7. \_\_\_\_\_
- 8. \_\_\_\_\_
- 9. \_\_\_\_\_
- 10. \_\_\_\_\_

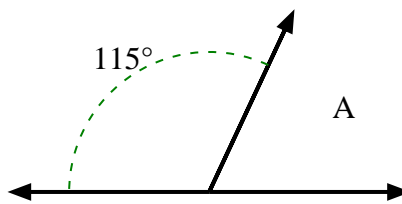


Trova il valore di 'A' nell'insieme degli angoli supplementari.

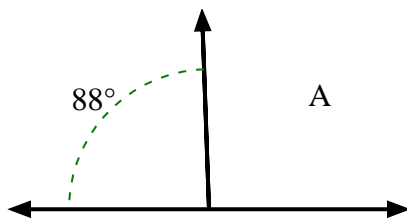
1)



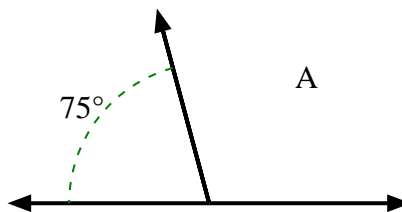
2)



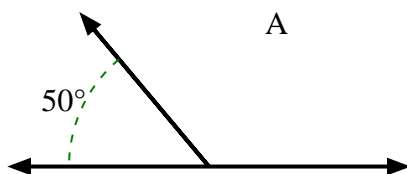
3)



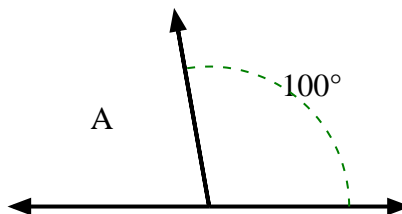
4)



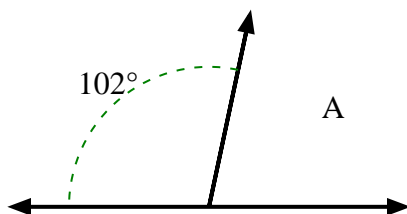
5)



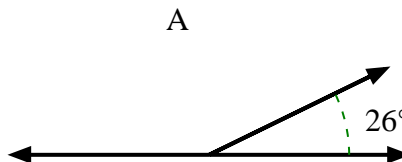
6)



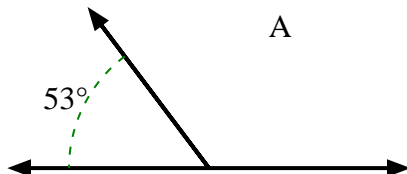
7)



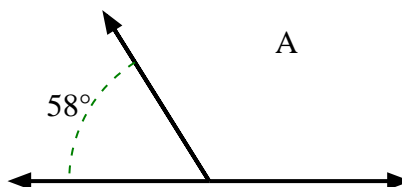
8)



9)



10)

**Risposte**1. **144°**2. **65°**3. **92°**4. **105°**5. **130°**6. **80°**7. **78°**8. **154°**9. **127°**10. **122°**