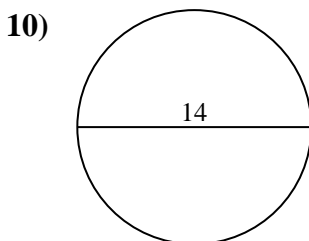
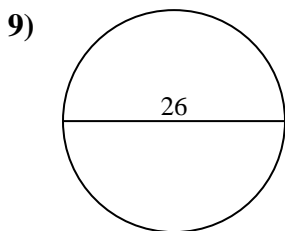
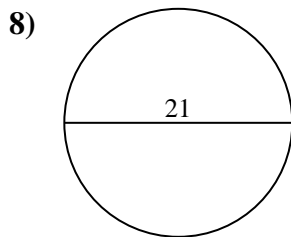
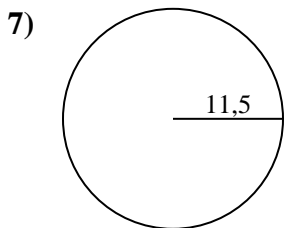
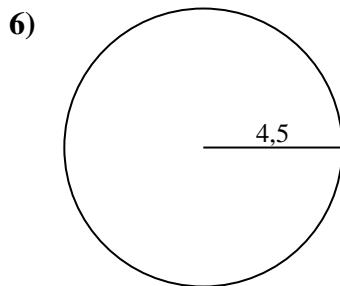
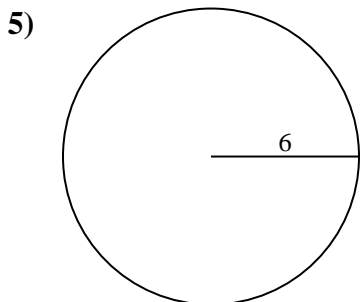
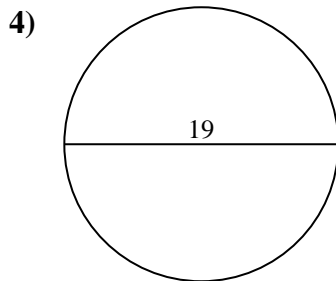
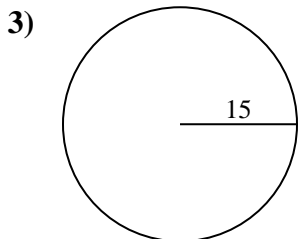
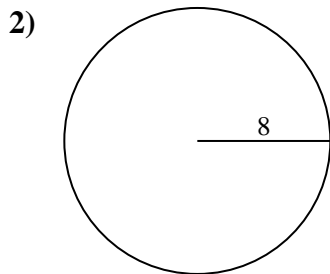
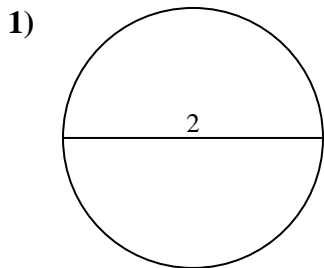




Calcola area e perimetro. Non sono in scala.

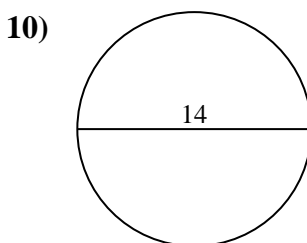
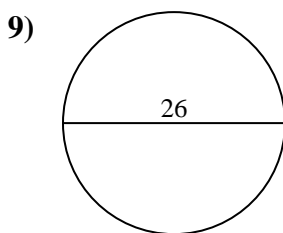
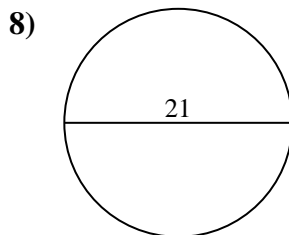
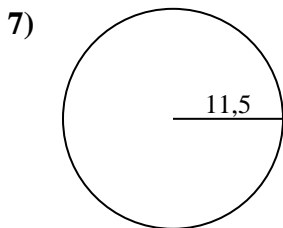
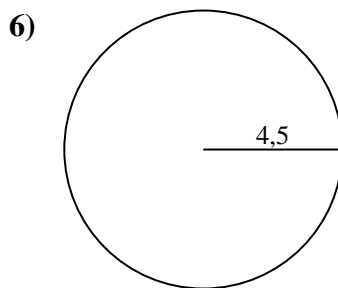
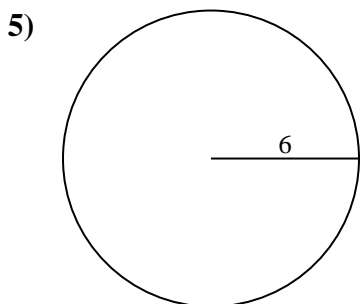
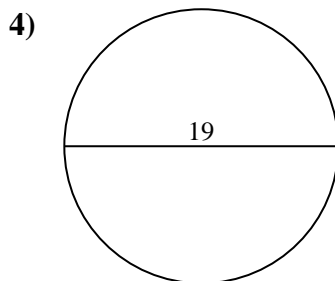
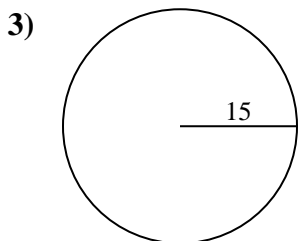
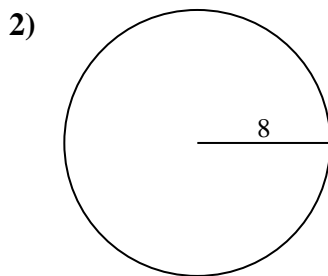
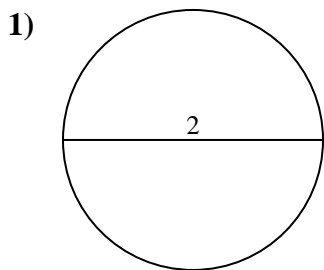


Risposte

- 1. _____
- 2. _____
- 3. _____
- 4. _____
- 5. _____
- 6. _____
- 7. _____
- 8. _____
- 9. _____
- 10. _____



Calcola area e perimetro. Non sono in scala.

**Risposte**

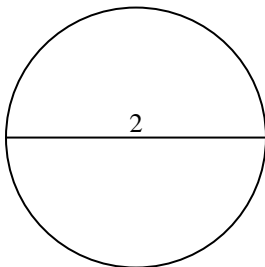
1.	<u>3,1</u>	<u>6,3</u>
2.	<u>201,1</u>	<u>50,3</u>
3.	<u>706,9</u>	<u>94,2</u>
4.	<u>283,5</u>	<u>59,7</u>
5.	<u>113,1</u>	<u>37,7</u>
6.	<u>63,6</u>	<u>28,3</u>
7.	<u>415,5</u>	<u>72,3</u>
8.	<u>346,4</u>	<u>66</u>
9.	<u>530,9</u>	<u>81,7</u>
10.	<u>153,9</u>	<u>44</u>



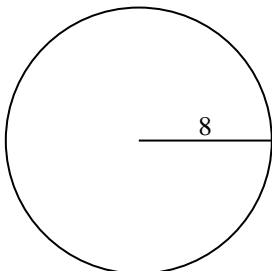
Calcola area e perimetro. Non sono in scala.

81,7	72,3	706,9	346,4	94,2
6,3	530,9	415,5	37,7	66
3,1	28,3	63,6	50,3	201,1
113,1	59,7	283,5		

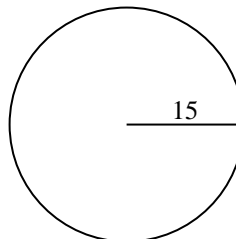
1)



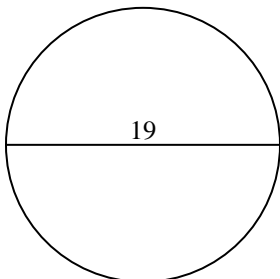
2)



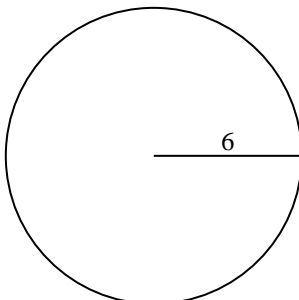
3)



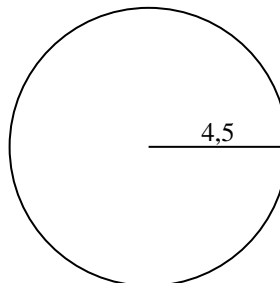
4)



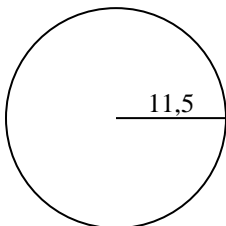
5)



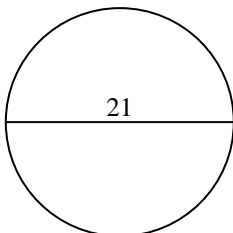
6)



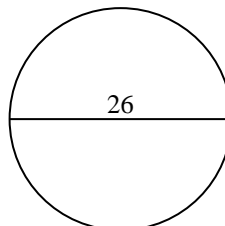
7)



8)



9)

**Risposte**

1. _____

2. _____

3. _____

4. _____

5. _____

6. _____

7. _____

8. _____

9. _____