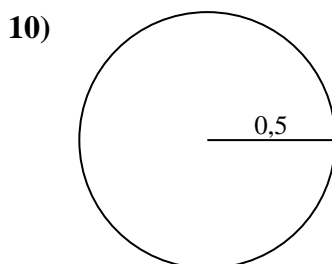
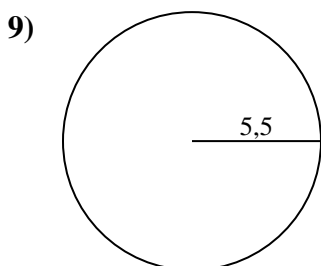
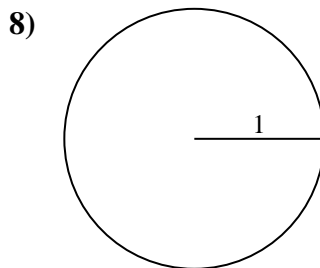
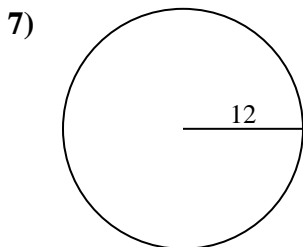
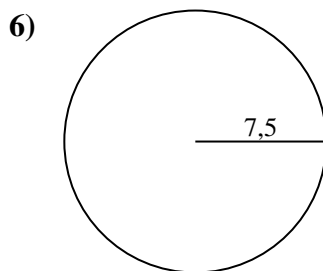
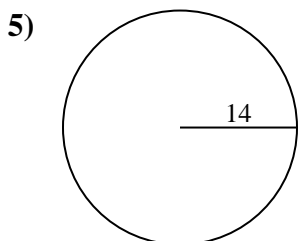
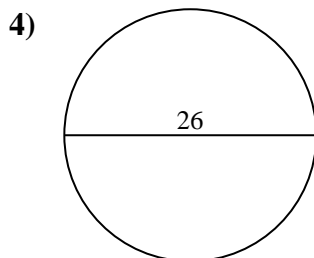
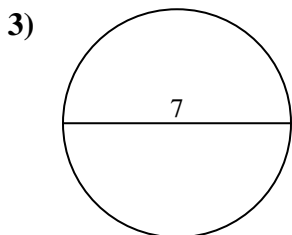
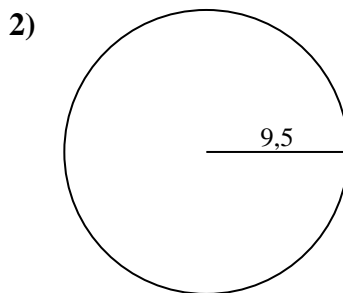
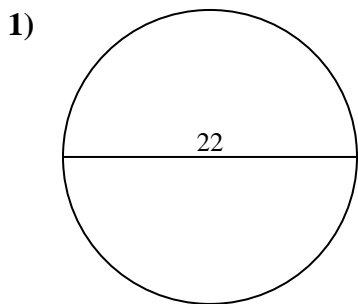




Calcola area e perimetro. Non sono in scala.

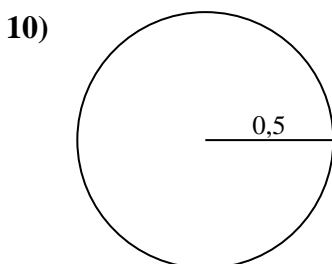
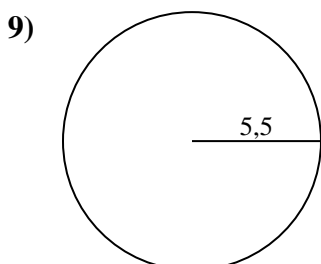
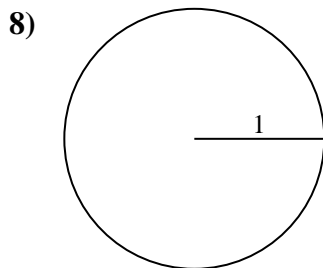
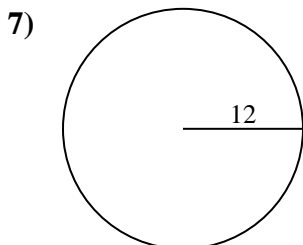
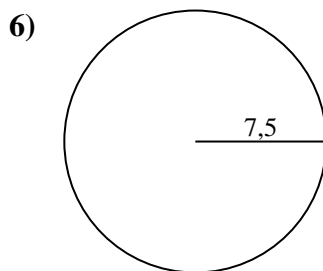
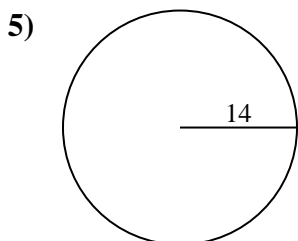
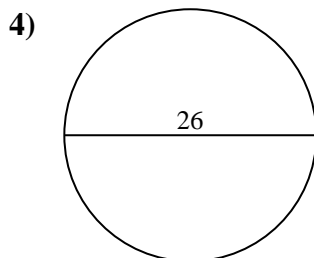
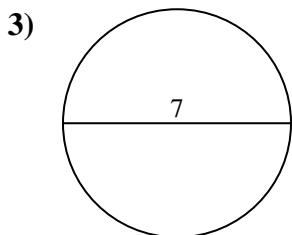
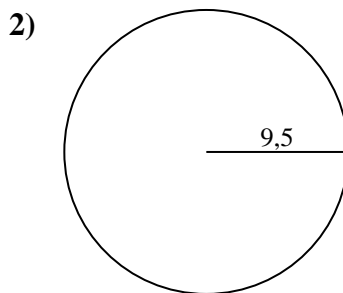
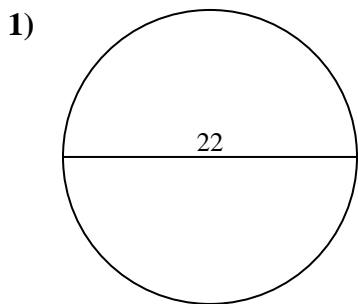


Risposte

- 1. _____
- 2. _____
- 3. _____
- 4. _____
- 5. _____
- 6. _____
- 7. _____
- 8. _____
- 9. _____
- 10. _____



Calcola area e perimetro. Non sono in scala.



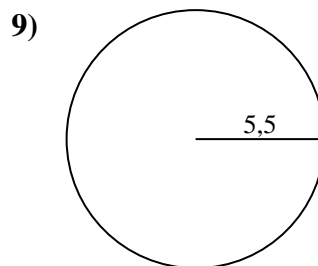
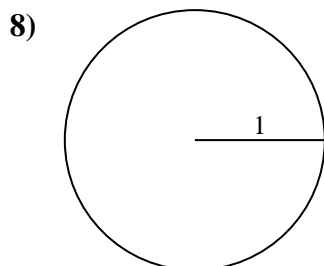
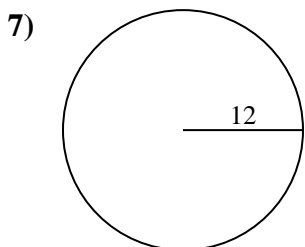
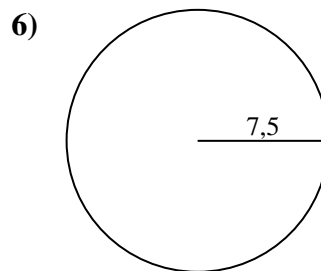
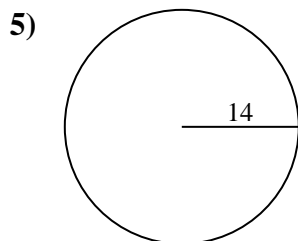
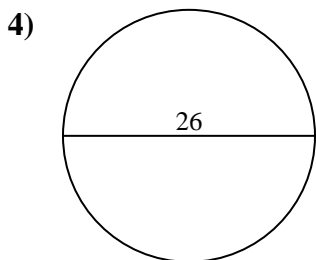
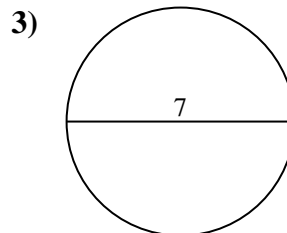
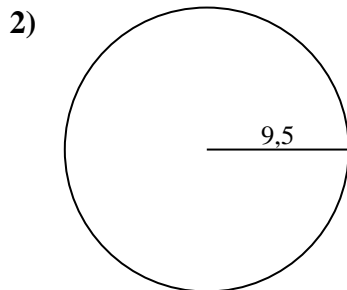
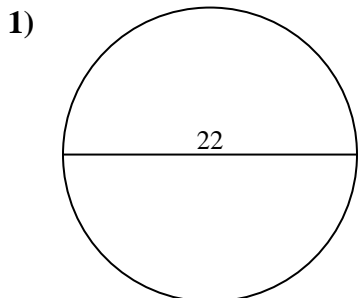
Risposte

1.	<u>380,1</u>	<u>69,1</u>
2.	<u>283,5</u>	<u>59,7</u>
3.	<u>38,5</u>	<u>22</u>
4.	<u>530,9</u>	<u>81,7</u>
5.	<u>615,8</u>	<u>88</u>
6.	<u>176,7</u>	<u>47,1</u>
7.	<u>452,4</u>	<u>75,4</u>
8.	<u>3,1</u>	<u>6,3</u>
9.	<u>95</u>	<u>34,6</u>
10.	<u>0,8</u>	<u>3,1</u>



Calcola area e perimetro. Non sono in scala.

95	34,6	283,5	380,1	530,9
75,4	59,7	615,8	452,4	6,3
81,7	3,1	47,1	22	176,7
69,1	38,5	88		



Risposte

1. _____
2. _____
3. _____
4. _____
5. _____
6. _____
7. _____
8. _____
9. _____