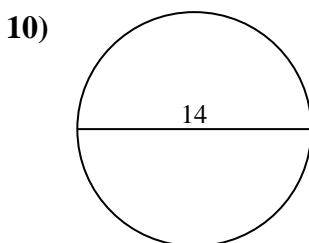
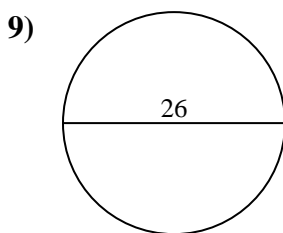
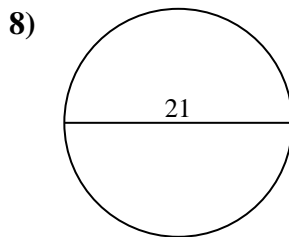
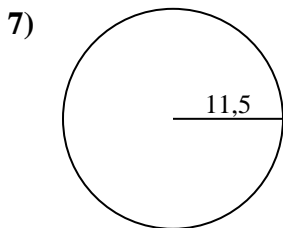
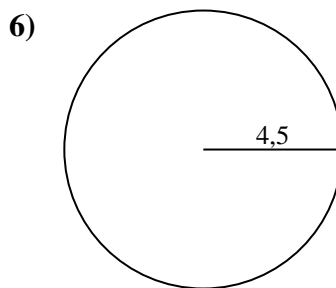
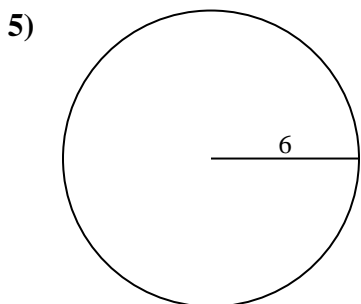
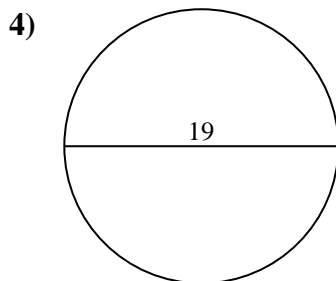
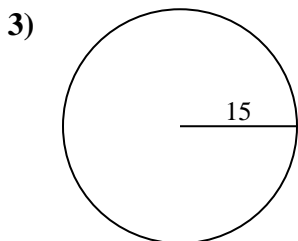
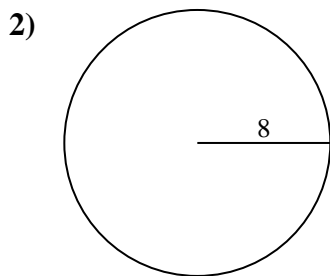
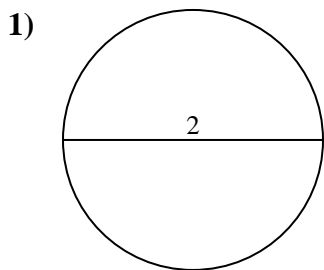




Calcola area e perimetro. Non sono in scala.

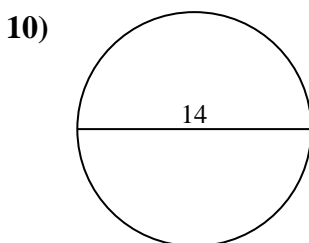
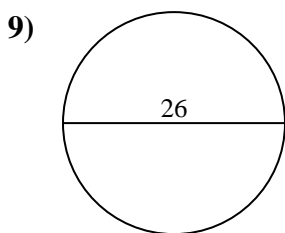
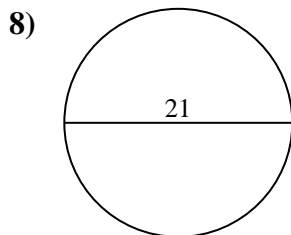
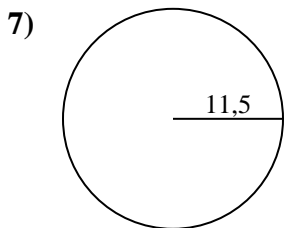
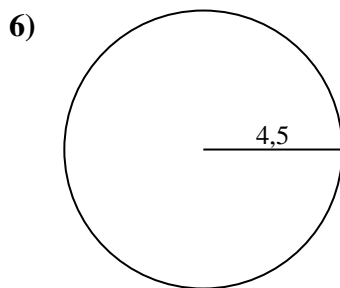
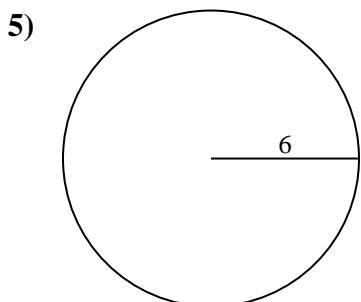
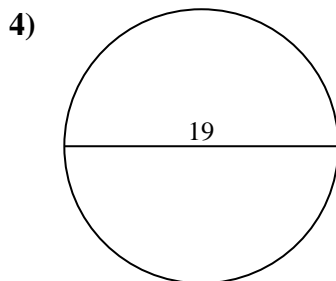
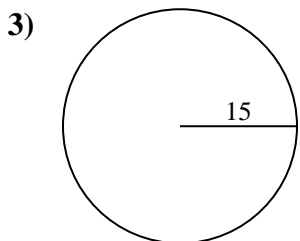
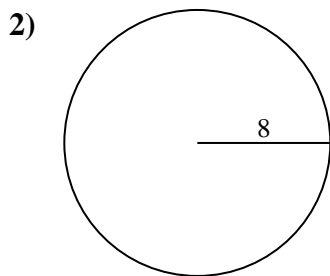
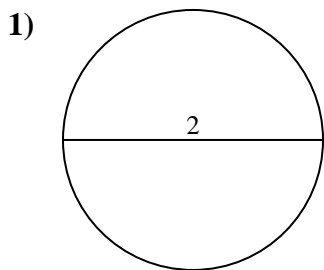


Risposte

- 1. _____
- 2. _____
- 3. _____
- 4. _____
- 5. _____
- 6. _____
- 7. _____
- 8. _____
- 9. _____
- 10. _____



Calcola area e perimetro. Non sono in scala.



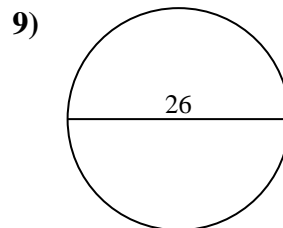
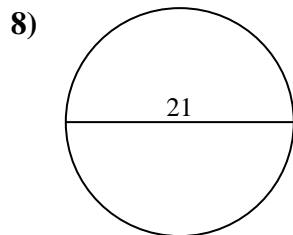
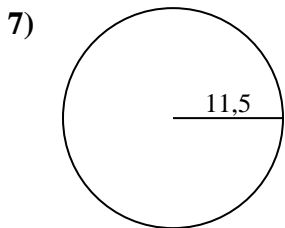
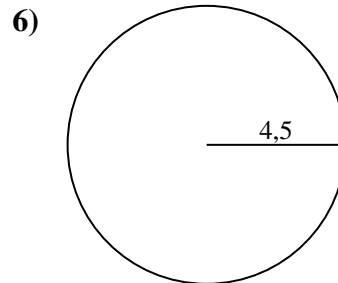
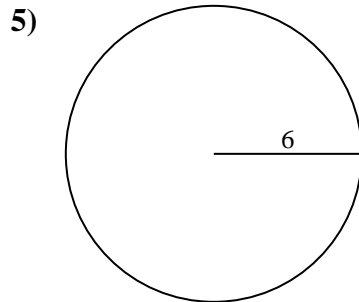
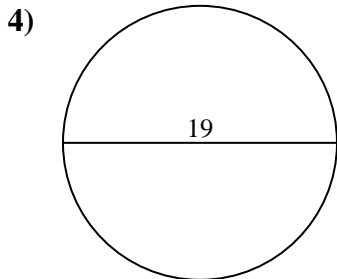
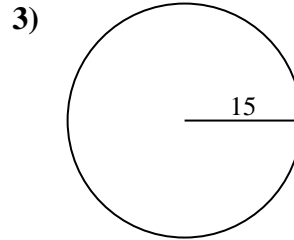
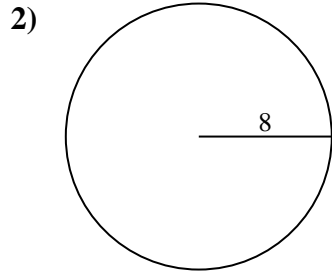
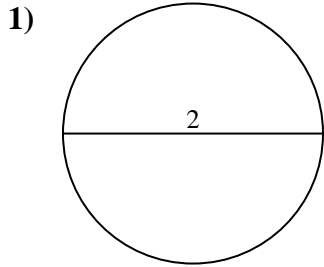
Risposte

1.	<u>3,1</u>	<u>6,3</u>
2.	<u>201,1</u>	<u>50,3</u>
3.	<u>706,9</u>	<u>94,2</u>
4.	<u>283,5</u>	<u>59,7</u>
5.	<u>113,1</u>	<u>37,7</u>
6.	<u>63,6</u>	<u>28,3</u>
7.	<u>415,5</u>	<u>72,3</u>
8.	<u>346,4</u>	<u>66</u>
9.	<u>530,9</u>	<u>81,7</u>
10.	<u>153,9</u>	<u>44</u>



Calcola area e perimetro. Non sono in scala.

81,7	72,3	706,9	346,4	94,2
6,3	530,9	415,5	37,7	66
3,1	28,3	63,6	50,3	201,1
113,1	59,7	283,5		

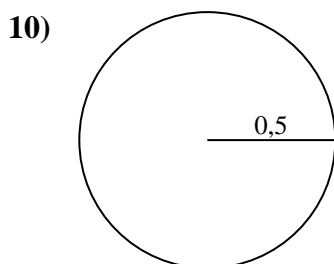
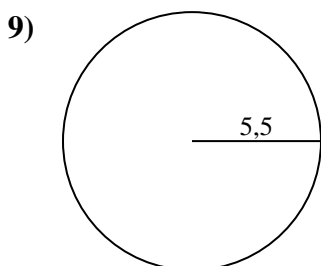
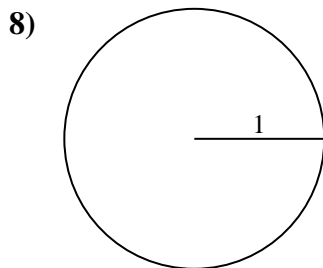
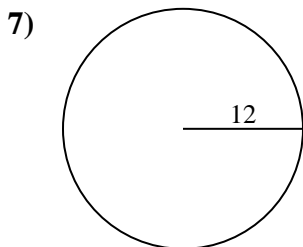
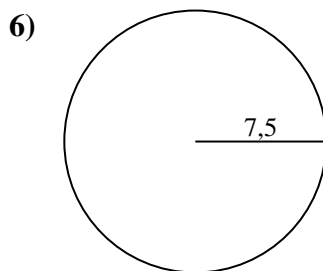
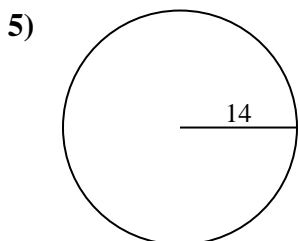
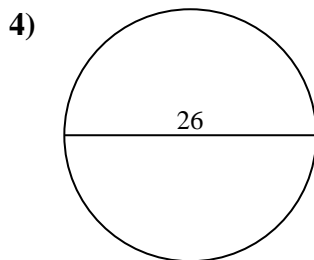
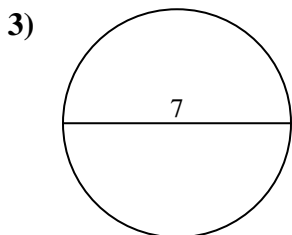
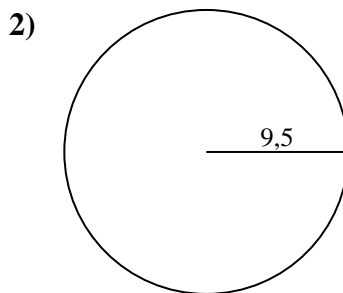
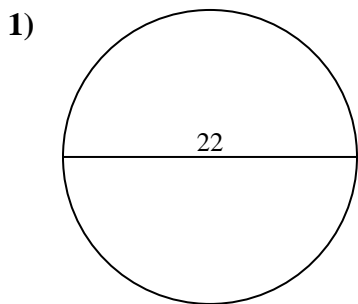


Risposte

1. _____
2. _____
3. _____
4. _____
5. _____
6. _____
7. _____
8. _____
9. _____



Calcola area e perimetro. Non sono in scala.

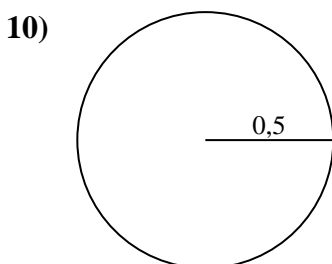
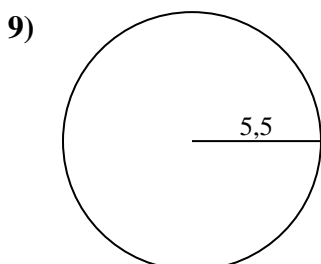
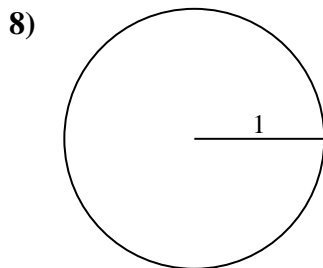
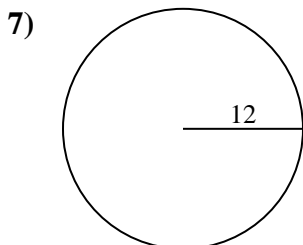
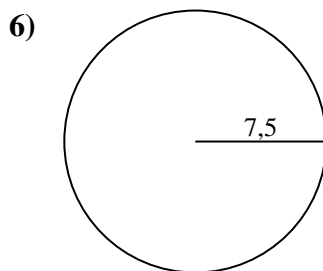
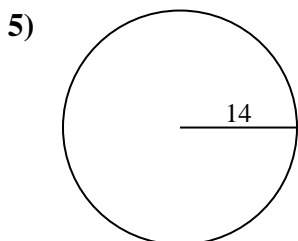
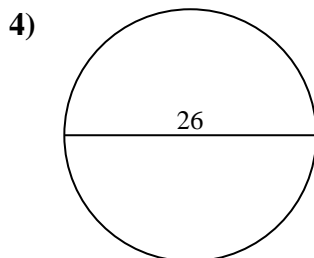
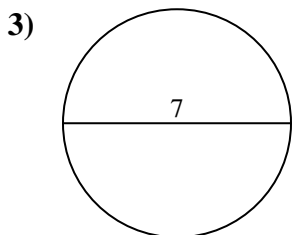
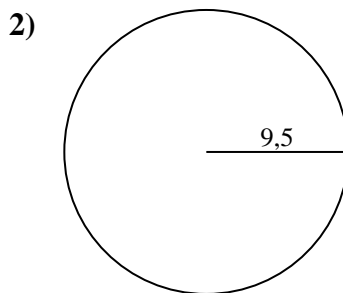
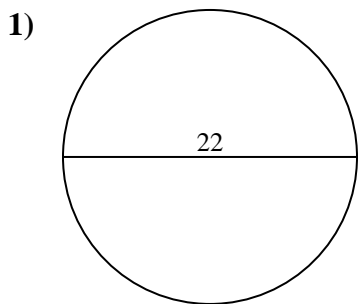


Risposte

- 1. _____
- 2. _____
- 3. _____
- 4. _____
- 5. _____
- 6. _____
- 7. _____
- 8. _____
- 9. _____
- 10. _____



Calcola area e perimetro. Non sono in scala.



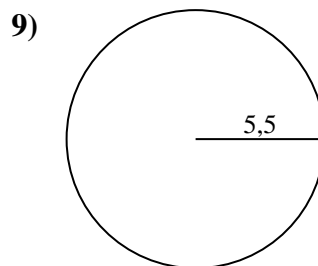
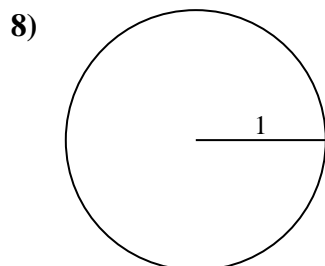
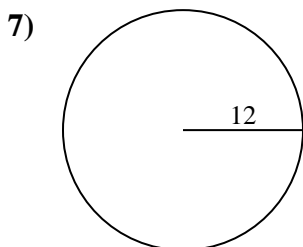
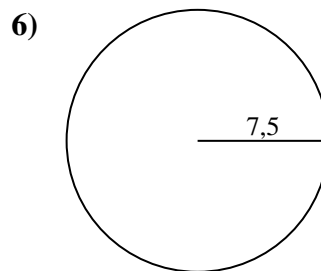
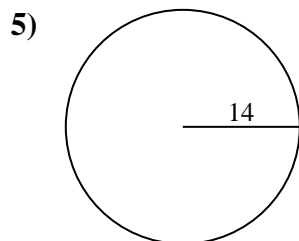
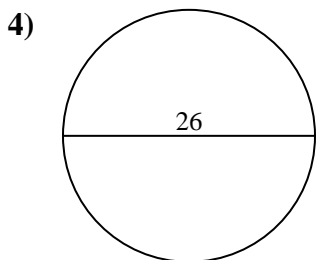
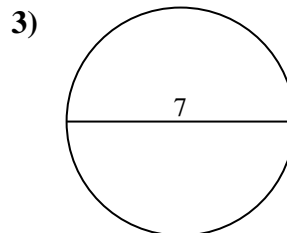
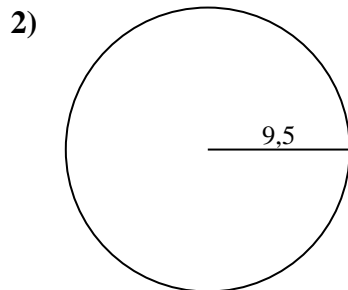
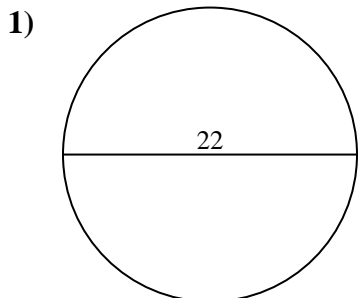
Risposte

1.	<u>380,1</u>	<u>69,1</u>
2.	<u>283,5</u>	<u>59,7</u>
3.	<u>38,5</u>	<u>22</u>
4.	<u>530,9</u>	<u>81,7</u>
5.	<u>615,8</u>	<u>88</u>
6.	<u>176,7</u>	<u>47,1</u>
7.	<u>452,4</u>	<u>75,4</u>
8.	<u>3,1</u>	<u>6,3</u>
9.	<u>95</u>	<u>34,6</u>
10.	<u>0,8</u>	<u>3,1</u>



Calcola area e perimetro. Non sono in scala.

95	34,6	283,5	380,1	530,9
75,4	59,7	615,8	452,4	6,3
81,7	3,1	47,1	22	176,7
69,1	38,5	88		

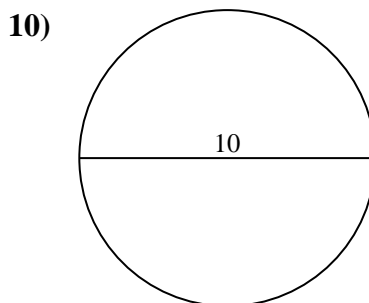
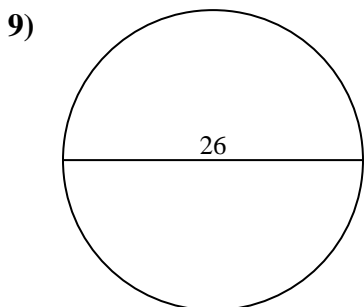
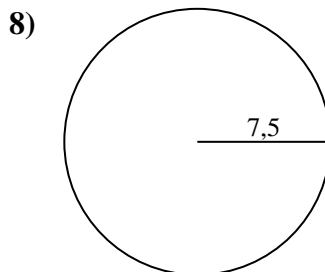
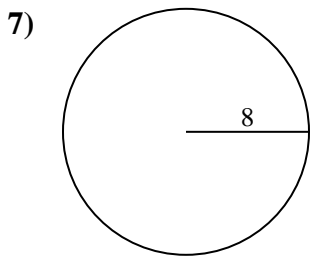
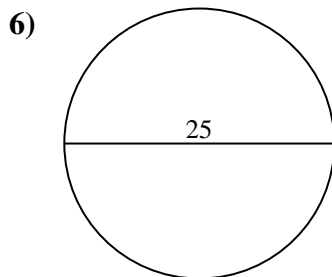
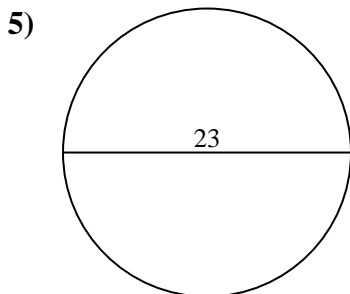
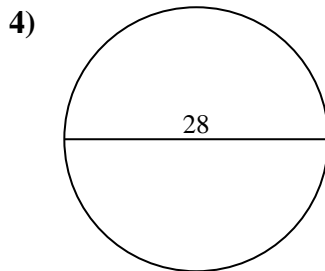
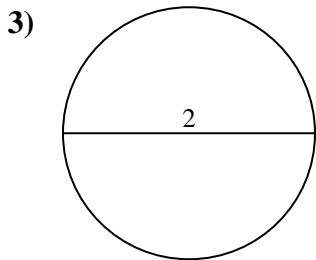
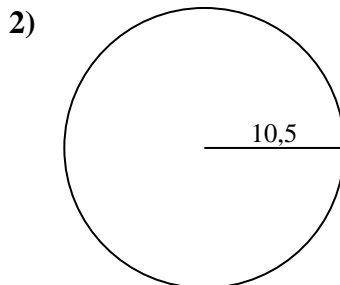
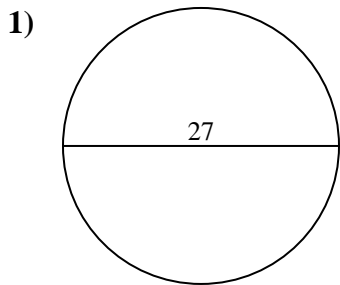


Risposte

1. _____
2. _____
3. _____
4. _____
5. _____
6. _____
7. _____
8. _____
9. _____



Calcola area e perimetro. Non sono in scala.

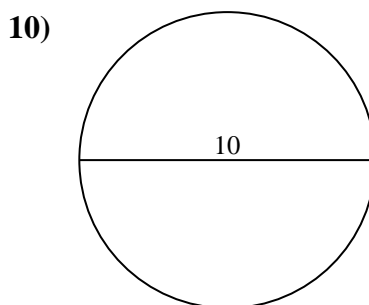
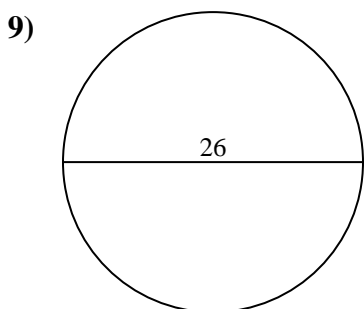
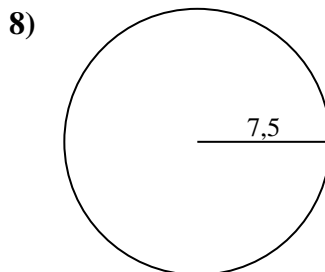
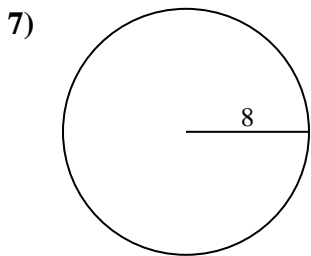
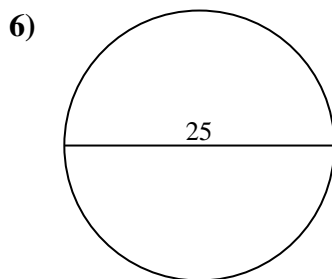
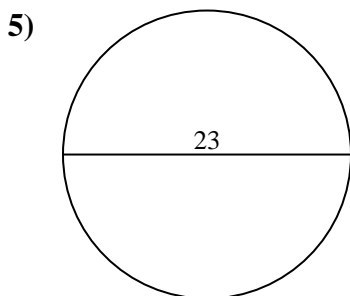
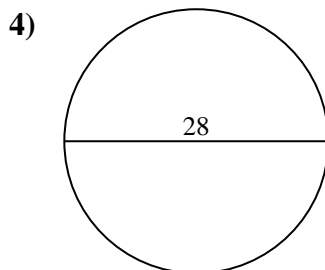
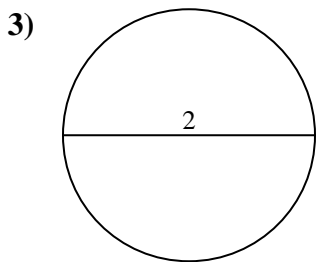
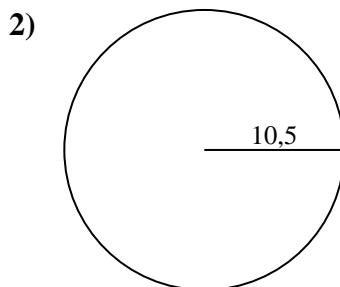
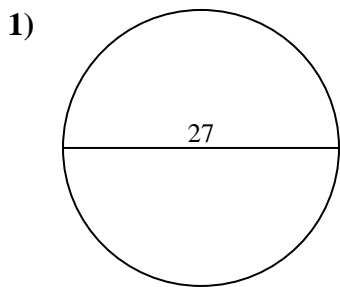


Risposte

- 1. _____
- 2. _____
- 3. _____
- 4. _____
- 5. _____
- 6. _____
- 7. _____
- 8. _____
- 9. _____
- 10. _____



Calcola area e perimetro. Non sono in scala.

**Risposte**

1.	<u>572,6</u>	<u>84,8</u>
2.	<u>346,4</u>	<u>66</u>
3.	<u>3,1</u>	<u>6,3</u>
4.	<u>615,8</u>	<u>88</u>
5.	<u>415,5</u>	<u>72,3</u>
6.	<u>490,9</u>	<u>78,5</u>
7.	<u>201,1</u>	<u>50,3</u>
8.	<u>176,7</u>	<u>47,1</u>
9.	<u>530,9</u>	<u>81,7</u>
10.	<u>78,5</u>	<u>31,4</u>

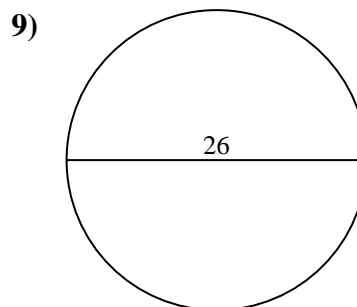
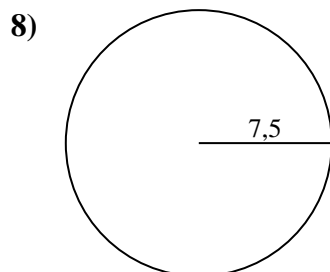
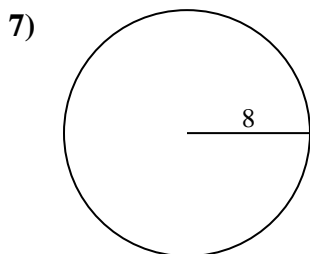
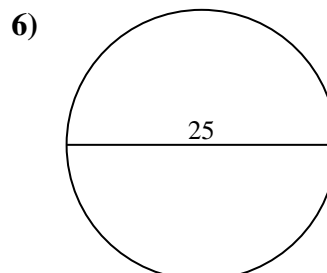
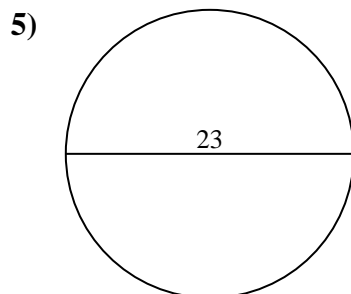
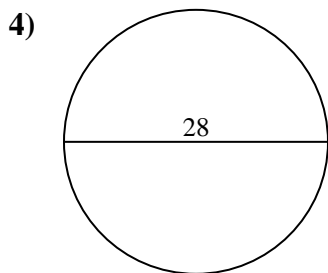
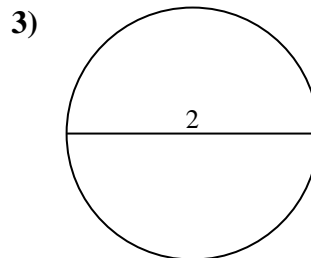
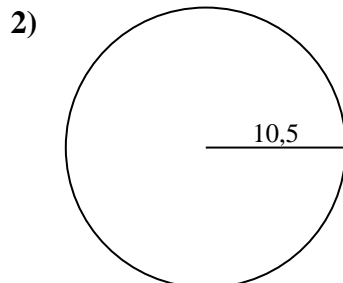
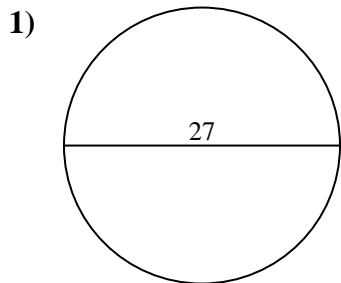


Calcola area e perimetro. Non sono in scala.

3,1	346,4	530,9	6,3	572,6
66	490,9	201,1	415,5	176,7
47,1	615,8	88	78,5	72,3
81,7	50,3	84,8		

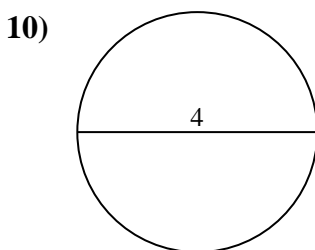
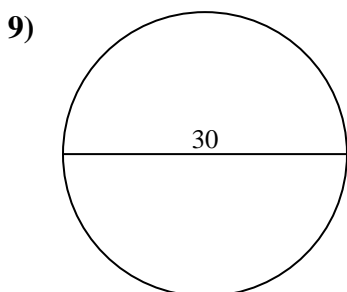
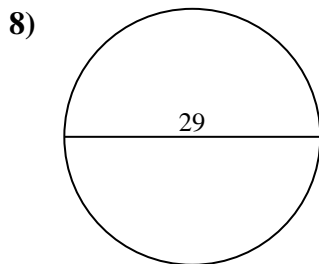
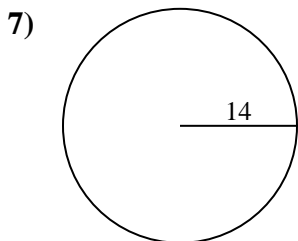
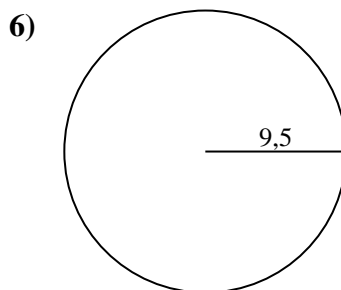
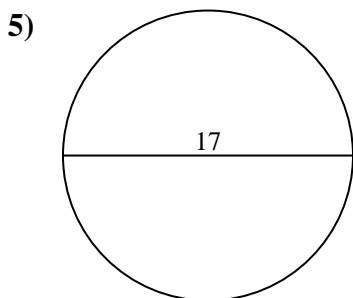
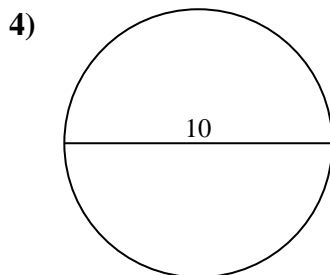
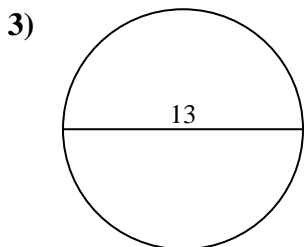
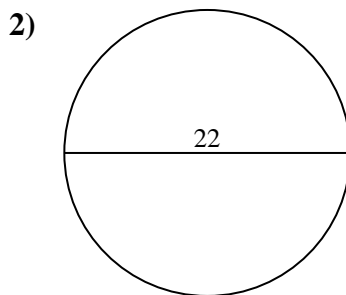
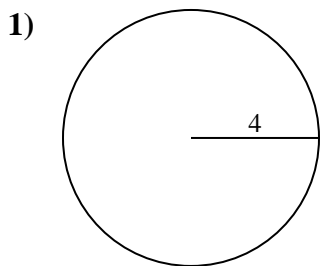
Risposte

1. _____
2. _____
3. _____
4. _____
5. _____
6. _____
7. _____
8. _____
9. _____





Calcola area e perimetro. Non sono in scala.

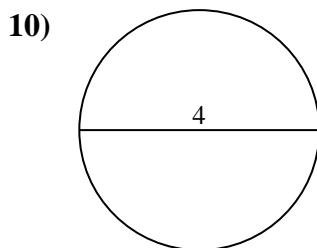
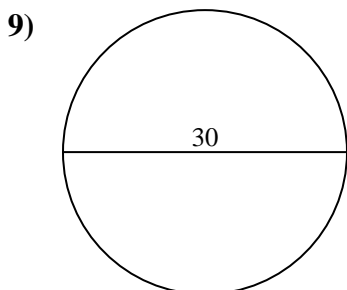
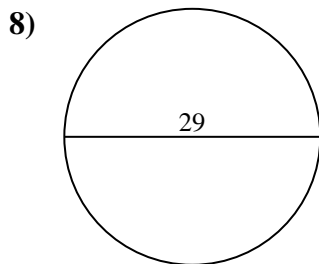
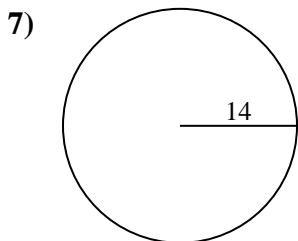
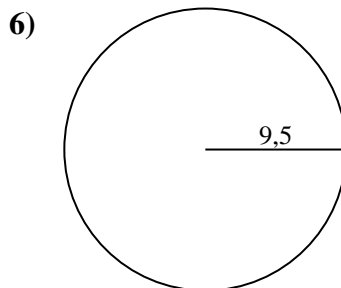
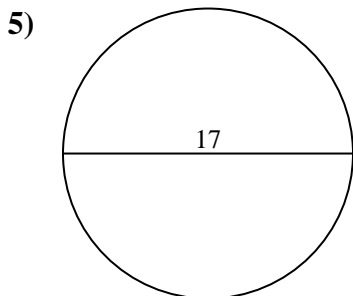
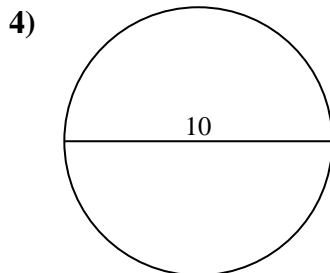
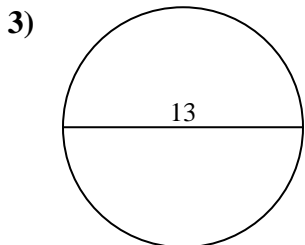
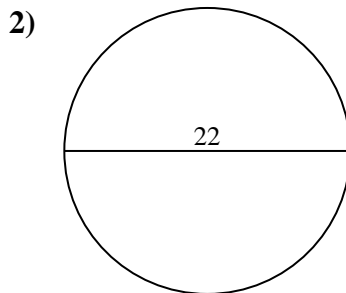
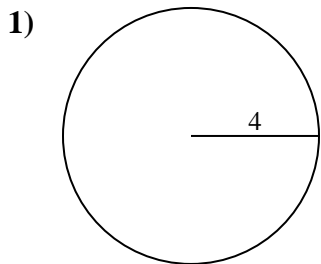


Risposte

- 1. _____
- 2. _____
- 3. _____
- 4. _____
- 5. _____
- 6. _____
- 7. _____
- 8. _____
- 9. _____
- 10. _____



Calcola area e perimetro. Non sono in scala.

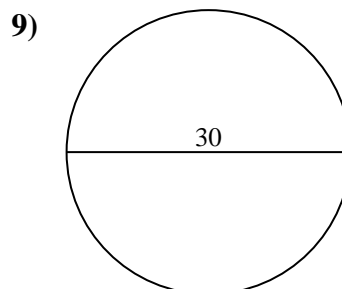
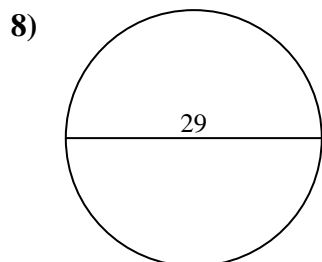
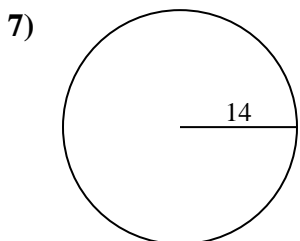
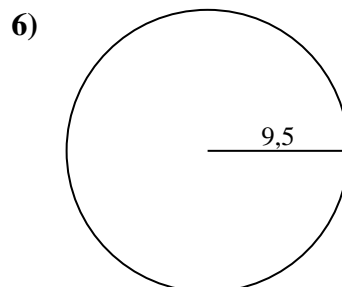
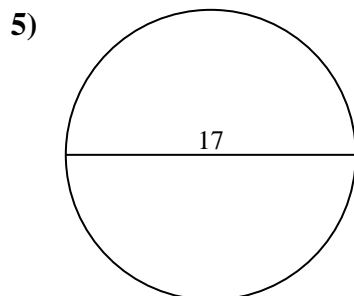
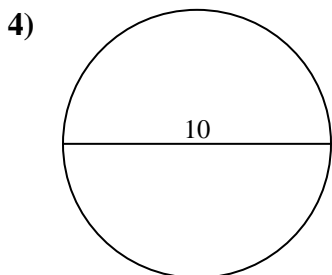
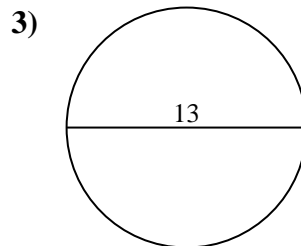
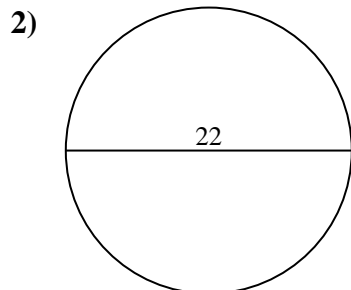
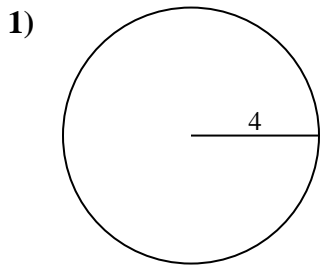
**Risposte**

1.	<u>50,3</u>	<u>25,1</u>
2.	<u>380,1</u>	<u>69,1</u>
3.	<u>132,7</u>	<u>40,8</u>
4.	<u>78,5</u>	<u>31,4</u>
5.	<u>227</u>	<u>53,4</u>
6.	<u>283,5</u>	<u>59,7</u>
7.	<u>615,8</u>	<u>88</u>
8.	<u>660,5</u>	<u>91,1</u>
9.	<u>706,9</u>	<u>94,2</u>
10.	<u>12,6</u>	<u>12,6</u>



Calcola area e perimetro. Non sono in scala.

25,1	227	78,5	615,8	91,1
380,1	31,4	132,7	706,9	59,7
50,3	69,1	88	53,4	660,5
283,5	40,8	94,2		

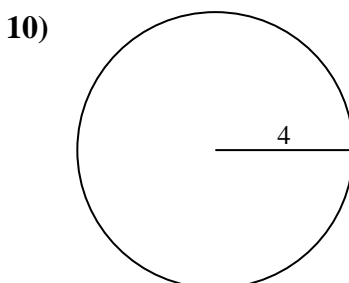
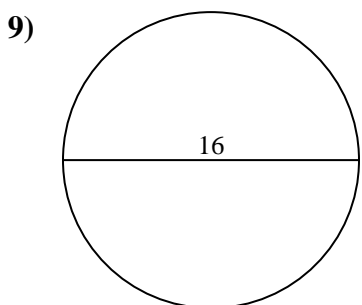
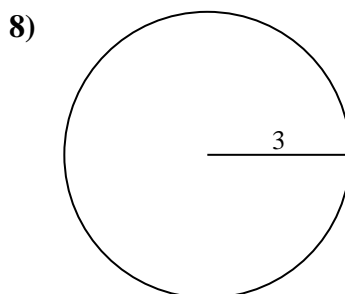
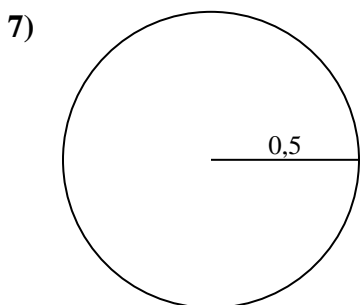
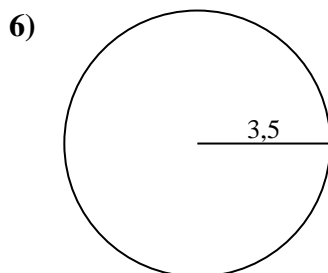
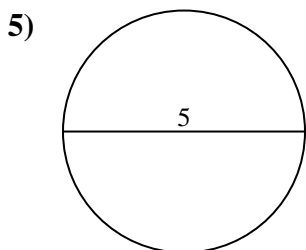
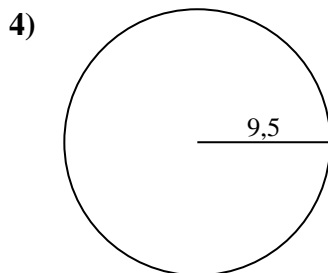
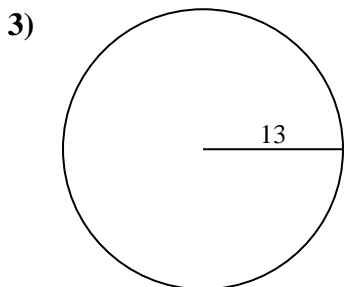
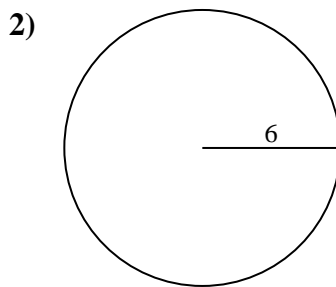
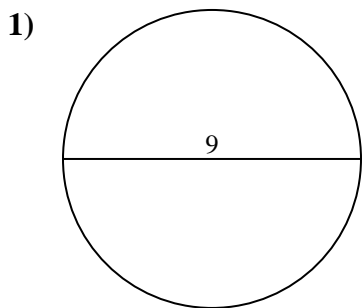


Risposte

1. _____
2. _____
3. _____
4. _____
5. _____
6. _____
7. _____
8. _____
9. _____



Calcola area e perimetro. Non sono in scala.

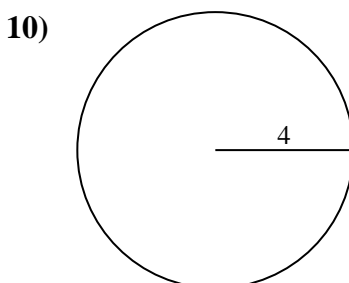
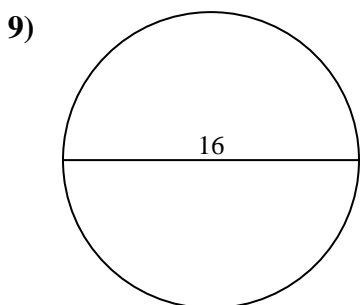
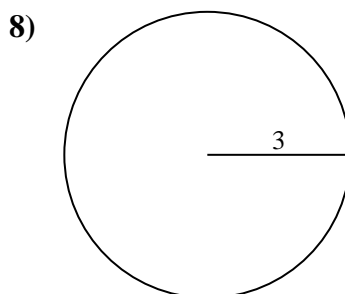
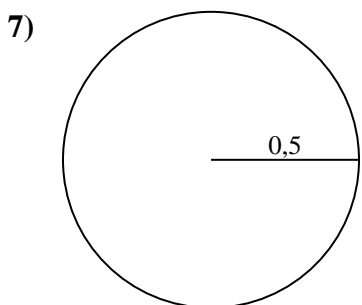
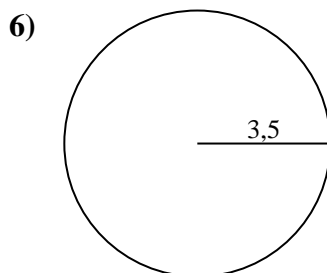
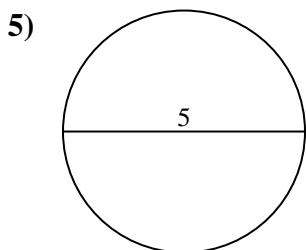
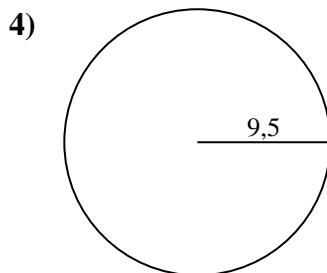
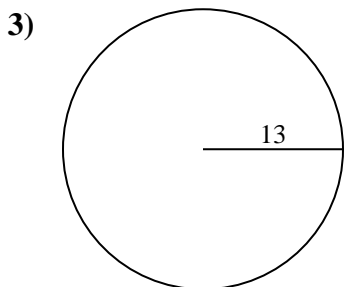
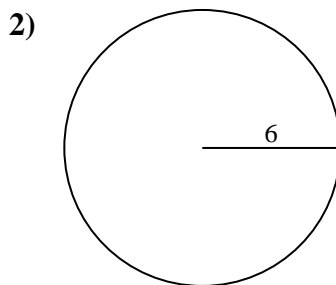
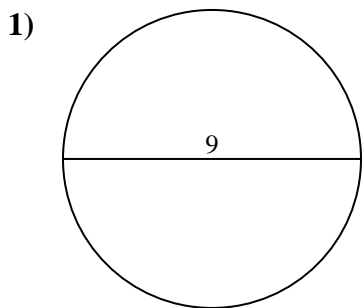


Risposte

- 1. _____
- 2. _____
- 3. _____
- 4. _____
- 5. _____
- 6. _____
- 7. _____
- 8. _____
- 9. _____
- 10. _____



Calcola area e perimetro. Non sono in scala.



Risposte

1.	<u>63,6</u>	<u>28,3</u>
2.	<u>113,1</u>	<u>37,7</u>
3.	<u>530,9</u>	<u>81,7</u>
4.	<u>283,5</u>	<u>59,7</u>
5.	<u>19,6</u>	<u>15,7</u>
6.	<u>38,5</u>	<u>22</u>
7.	<u>0,8</u>	<u>3,1</u>
8.	<u>28,3</u>	<u>18,8</u>
9.	<u>201,1</u>	<u>50,3</u>
10.	<u>50,3</u>	<u>25,1</u>

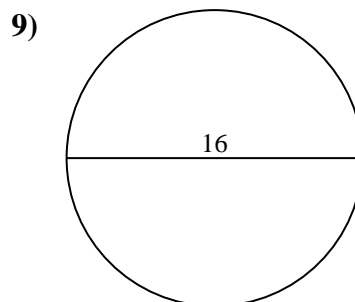
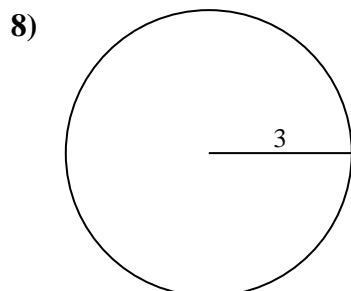
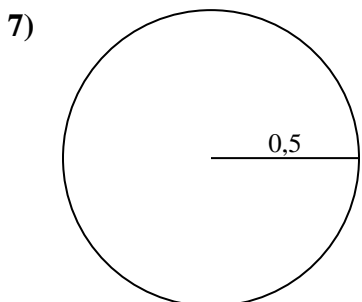
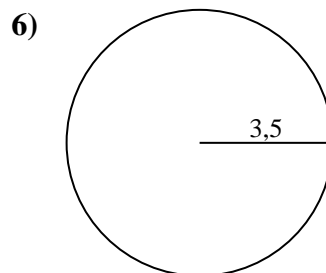
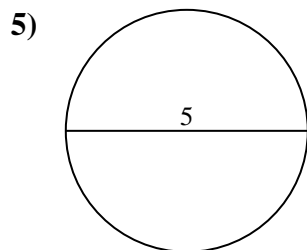
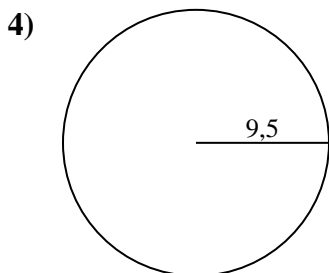
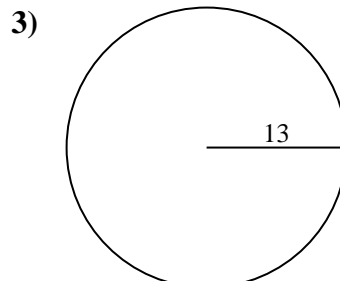
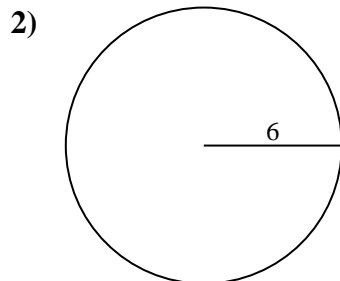
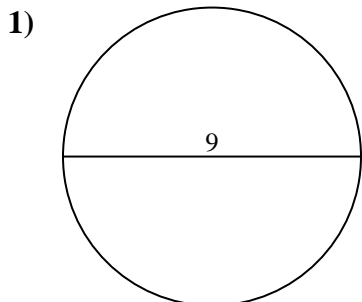


Calcola area e perimetro. Non sono in scala.

18,8	0,8	59,7	28,3	201,1
38,5	37,7	63,6	15,7	19,6
28,3	50,3	81,7	283,5	530,9
22	3,1	113,1		

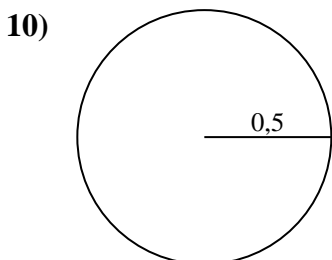
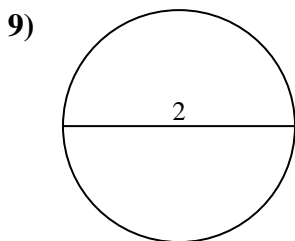
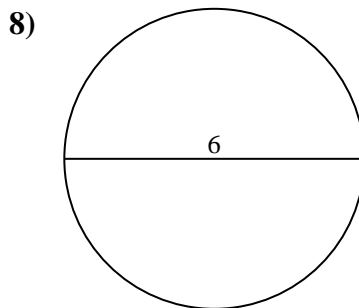
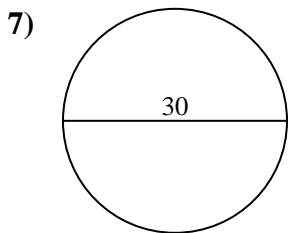
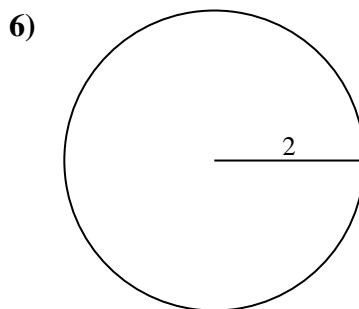
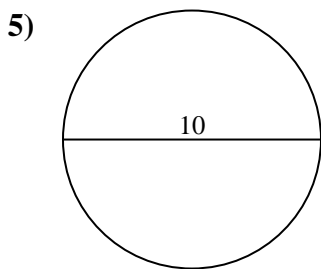
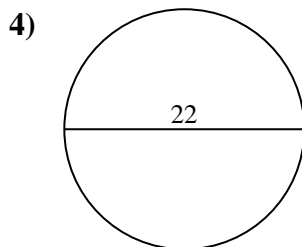
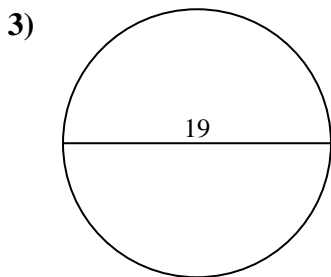
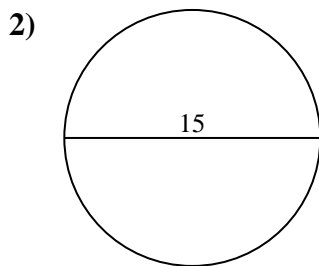
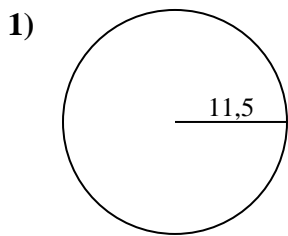
Risposte

1. _____
2. _____
3. _____
4. _____
5. _____
6. _____
7. _____
8. _____
9. _____





Calcola area e perimetro. Non sono in scala.

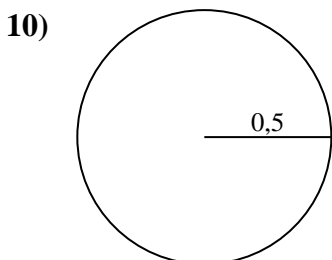
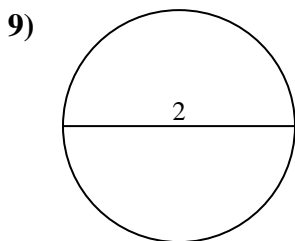
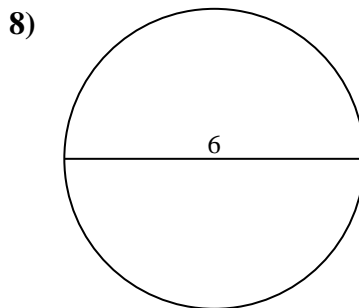
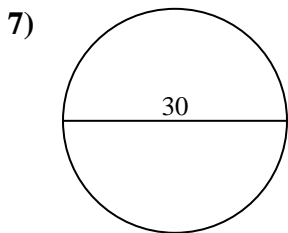
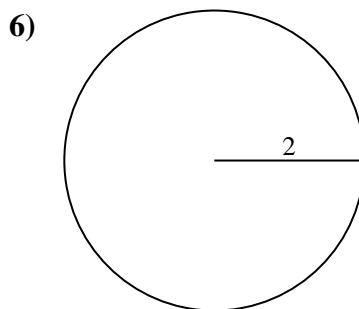
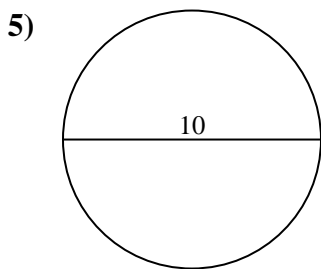
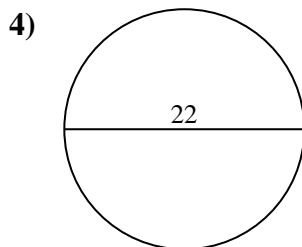
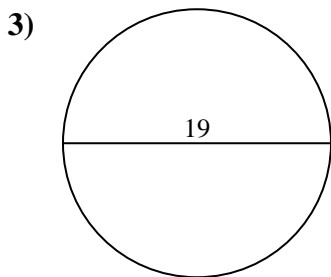
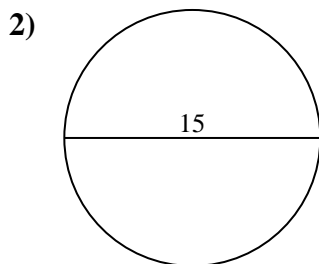
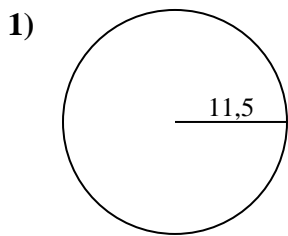


Risposte

- 1. _____
- 2. _____
- 3. _____
- 4. _____
- 5. _____
- 6. _____
- 7. _____
- 8. _____
- 9. _____
- 10. _____



Calcola area e perimetro. Non sono in scala.



Risposte

1.	<u>415,5</u>	<u>72,3</u>
2.	<u>176,7</u>	<u>47,1</u>
3.	<u>283,5</u>	<u>59,7</u>
4.	<u>380,1</u>	<u>69,1</u>
5.	<u>78,5</u>	<u>31,4</u>
6.	<u>12,6</u>	<u>12,6</u>
7.	<u>706,9</u>	<u>94,2</u>
8.	<u>28,3</u>	<u>18,8</u>
9.	<u>3,1</u>	<u>6,3</u>
10.	<u>0,8</u>	<u>3,1</u>

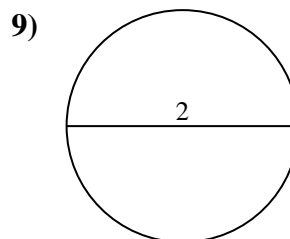
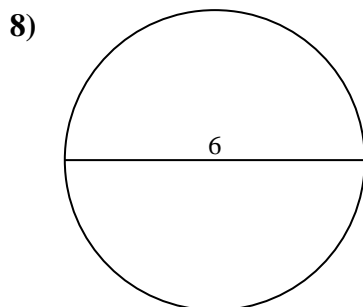
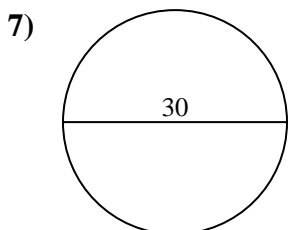
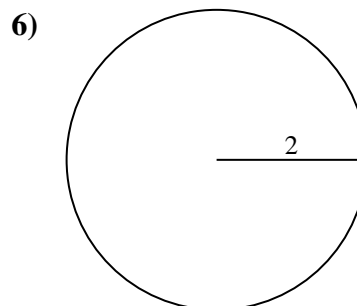
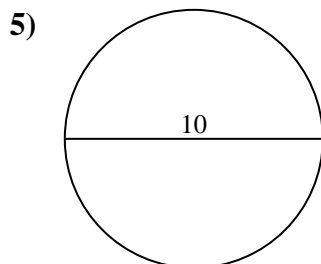
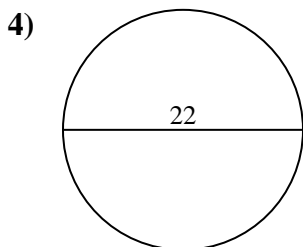
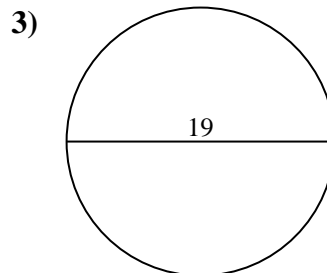
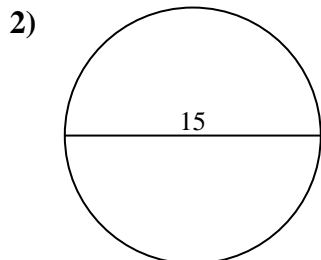
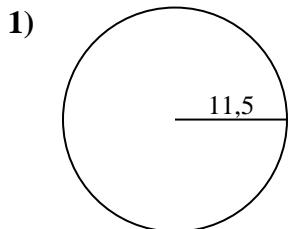


Calcola area e perimetro. Non sono in scala.

72,3	18,8	78,5	6,3	380,1
706,9	12,6	12,6	69,1	415,5
176,7	28,3	94,2	47,1	31,4
283,5	3,1	59,7		

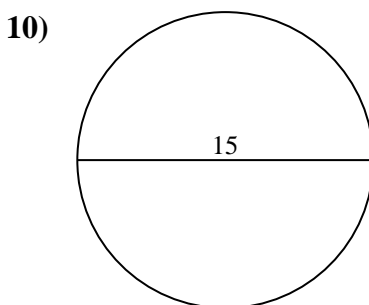
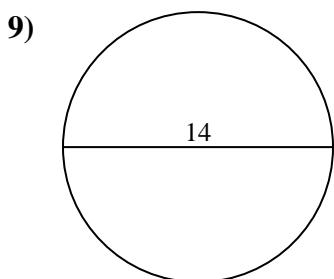
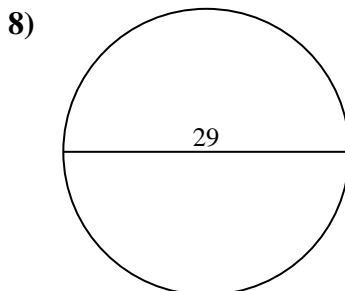
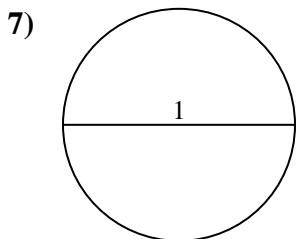
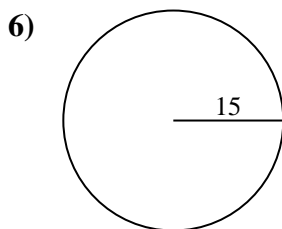
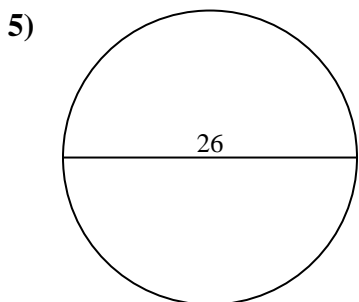
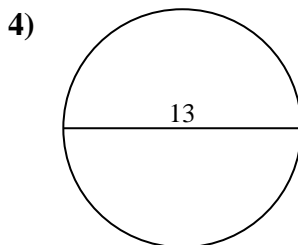
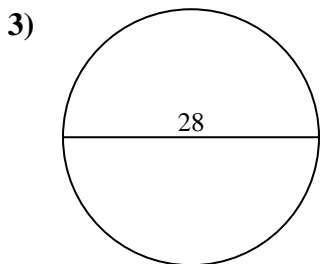
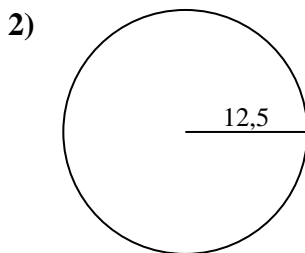
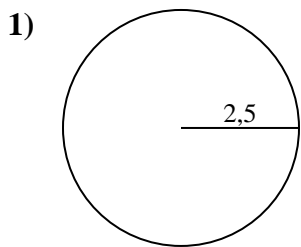
Risposte

1. _____
2. _____
3. _____
4. _____
5. _____
6. _____
7. _____
8. _____
9. _____





Calcola area e perimetro. Non sono in scala.

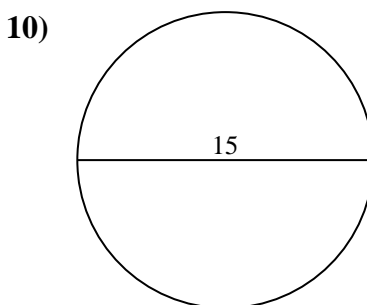
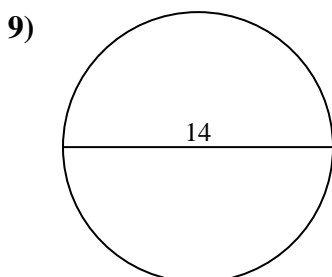
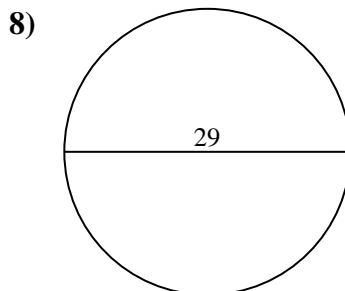
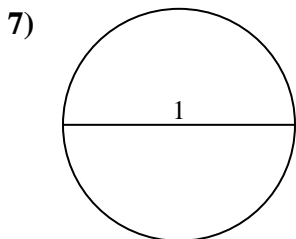
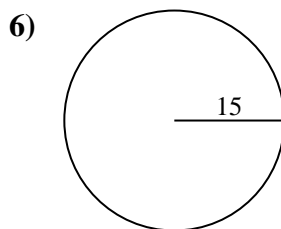
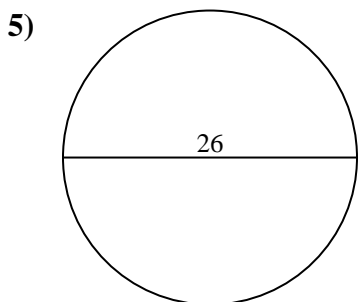
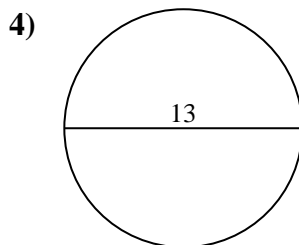
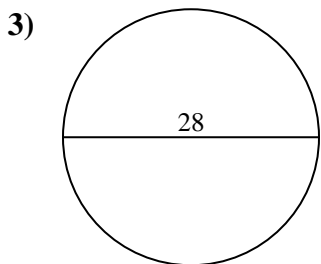
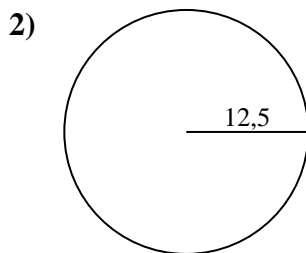
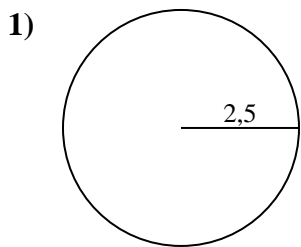


Risposte

- 1. _____
- 2. _____
- 3. _____
- 4. _____
- 5. _____
- 6. _____
- 7. _____
- 8. _____
- 9. _____
- 10. _____



Calcola area e perimetro. Non sono in scala.



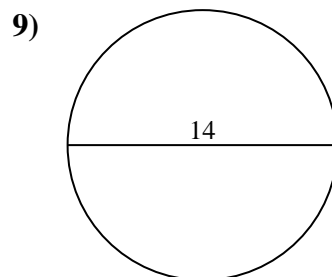
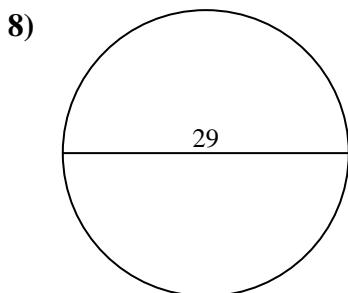
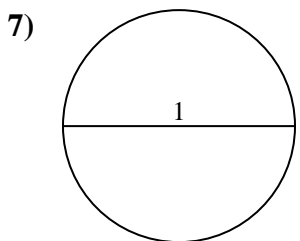
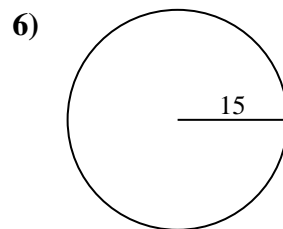
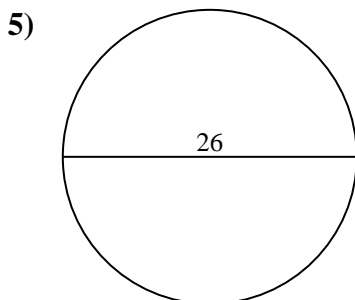
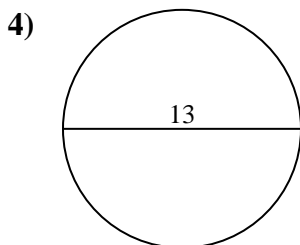
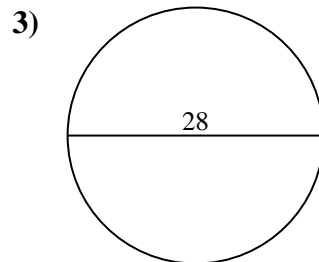
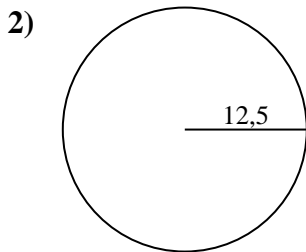
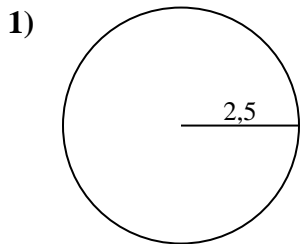
Risposte

1.	<u>19,6</u>	<u>15,7</u>
2.	<u>490,9</u>	<u>78,5</u>
3.	<u>615,8</u>	<u>88</u>
4.	<u>132,7</u>	<u>40,8</u>
5.	<u>530,9</u>	<u>81,7</u>
6.	<u>706,9</u>	<u>94,2</u>
7.	<u>0,8</u>	<u>3,1</u>
8.	<u>660,5</u>	<u>91,1</u>
9.	<u>153,9</u>	<u>44</u>
10.	<u>176,7</u>	<u>47,1</u>



Calcola area e perimetro. Non sono in scala.

490,9	78,5	15,7	88	530,9
0,8	153,9	44	660,5	3,1
615,8	81,7	94,2	91,1	19,6
706,9	132,7	40,8		

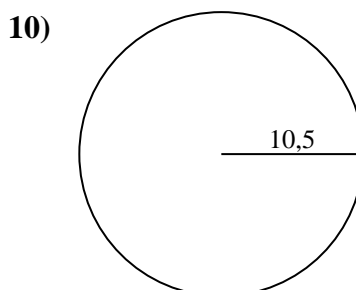
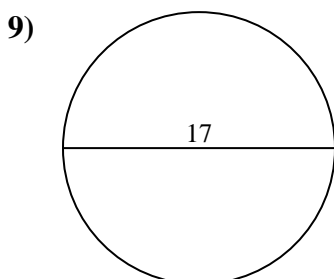
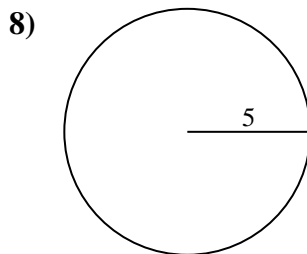
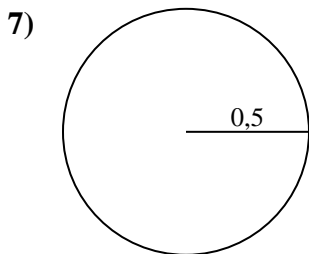
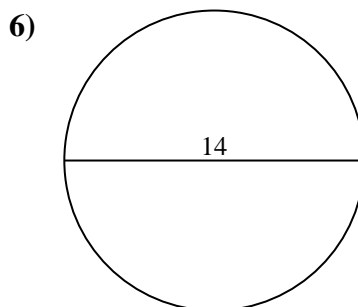
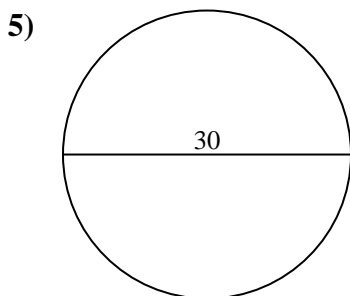
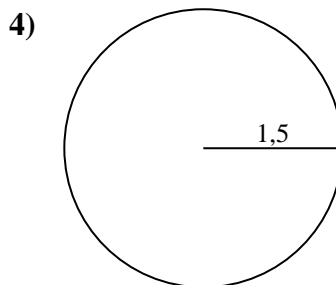
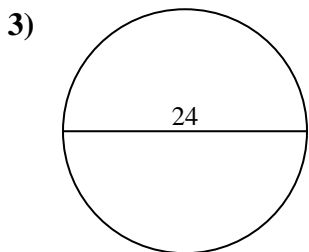
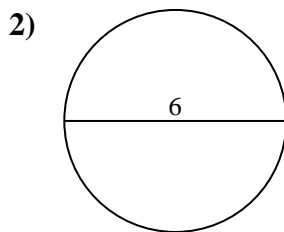
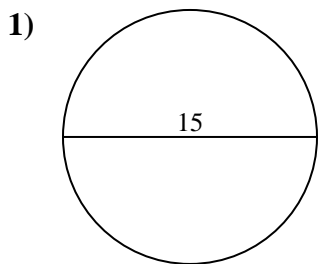


Risposte

1. _____
2. _____
3. _____
4. _____
5. _____
6. _____
7. _____
8. _____
9. _____



Calcola area e perimetro. Non sono in scala.

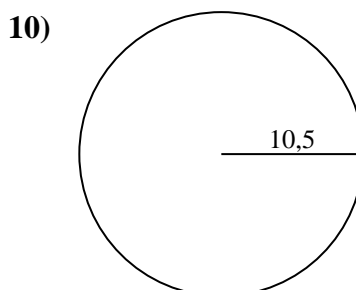
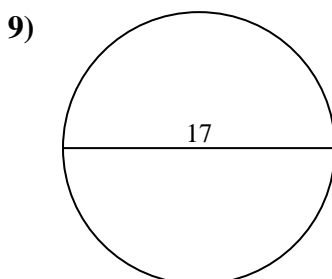
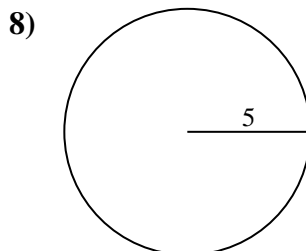
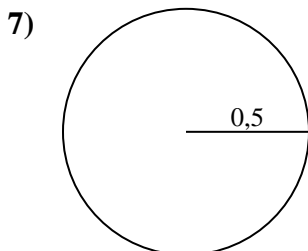
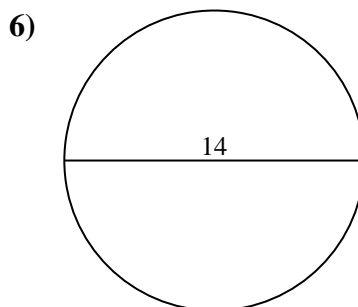
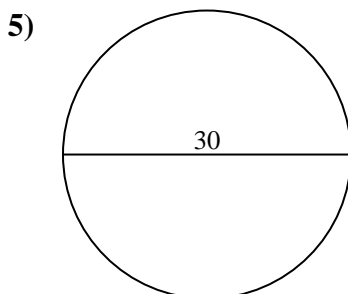
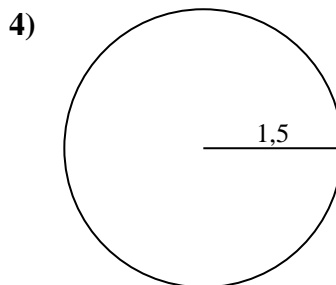
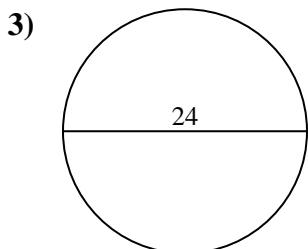
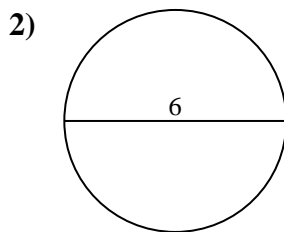
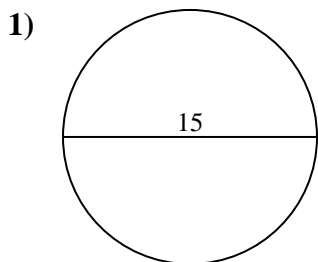


Risposte

- 1. _____
- 2. _____
- 3. _____
- 4. _____
- 5. _____
- 6. _____
- 7. _____
- 8. _____
- 9. _____
- 10. _____



Calcola area e perimetro. Non sono in scala.

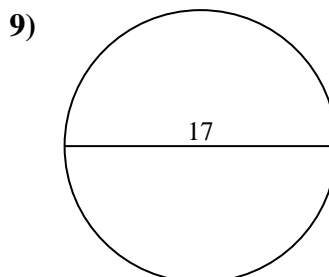
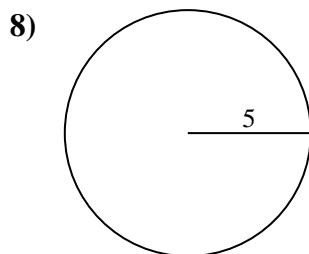
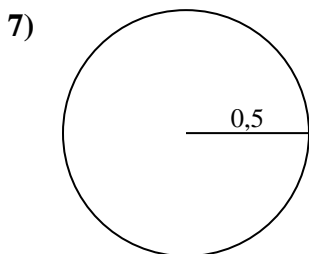
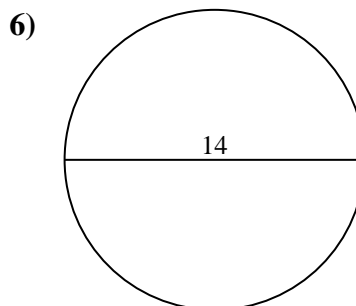
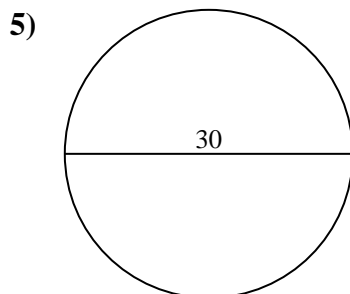
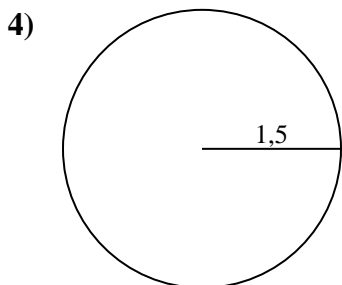
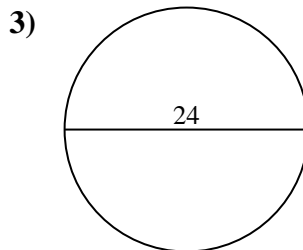
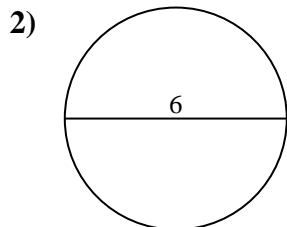
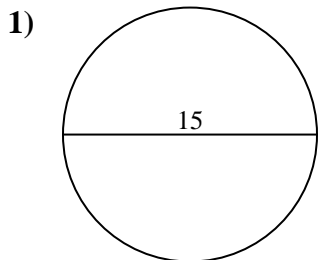
**Risposte**

1.	<u>176,7</u>	<u>47,1</u>
2.	<u>28,3</u>	<u>18,8</u>
3.	<u>452,4</u>	<u>75,4</u>
4.	<u>7,1</u>	<u>9,4</u>
5.	<u>706,9</u>	<u>94,2</u>
6.	<u>153,9</u>	<u>44</u>
7.	<u>0,8</u>	<u>3,1</u>
8.	<u>78,5</u>	<u>31,4</u>
9.	<u>227</u>	<u>53,4</u>
10.	<u>346,4</u>	<u>66</u>



Calcola area e perimetro. Non sono in scala.

78,5	75,4	7,1	18,8	53,4
31,4	28,3	153,9	3,1	9,4
176,7	0,8	452,4	706,9	47,1
227	44	94,2		

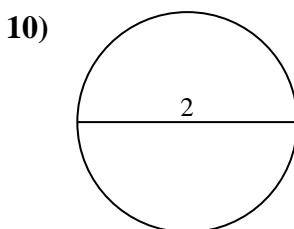
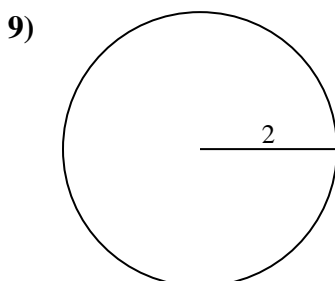
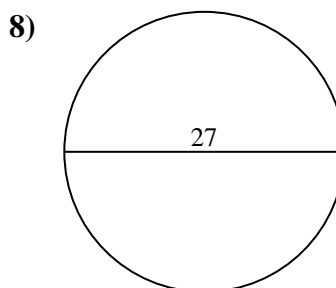
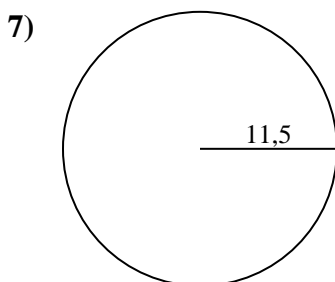
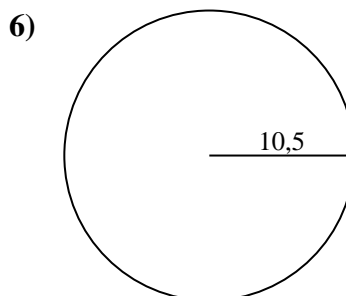
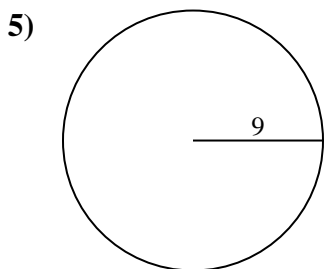
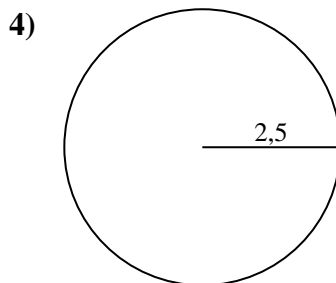
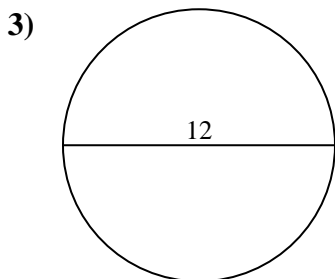
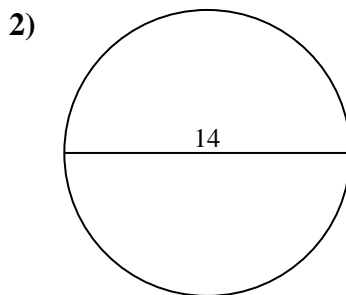
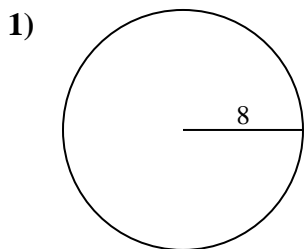


Risposte

1. _____
2. _____
3. _____
4. _____
5. _____
6. _____
7. _____
8. _____
9. _____



Calcola area e perimetro. Non sono in scala.

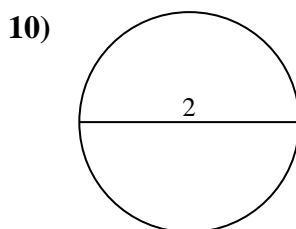
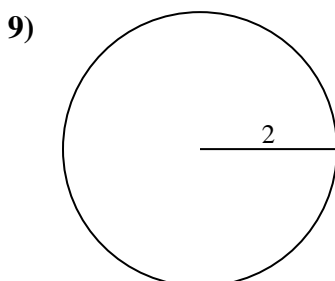
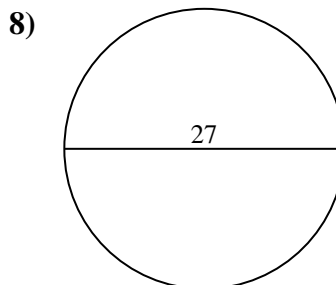
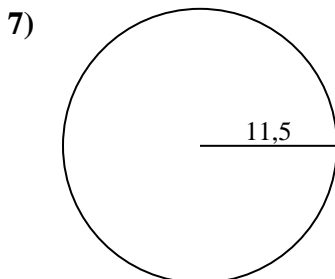
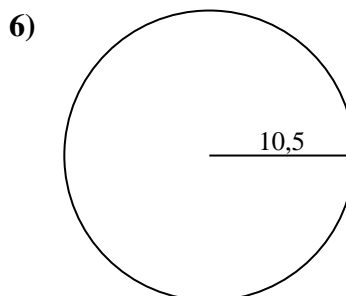
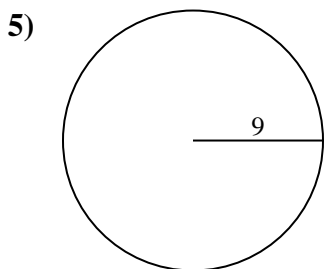
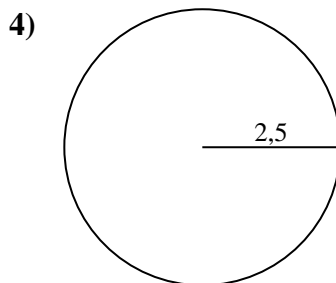
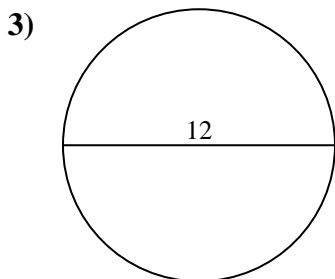
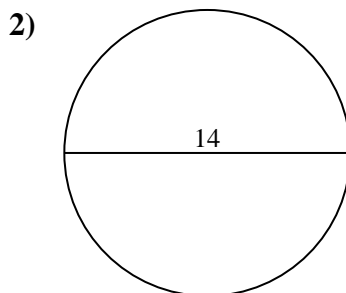
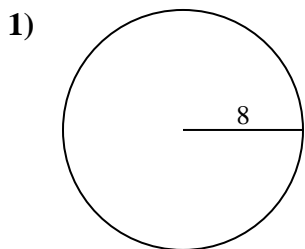


Risposte

- 1. _____
- 2. _____
- 3. _____
- 4. _____
- 5. _____
- 6. _____
- 7. _____
- 8. _____
- 9. _____
- 10. _____



Calcola area e perimetro. Non sono in scala.

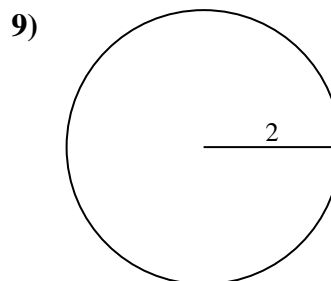
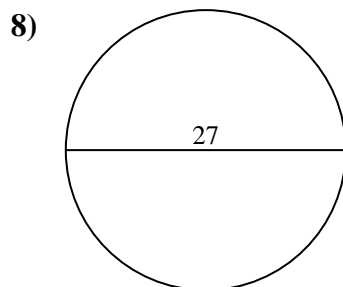
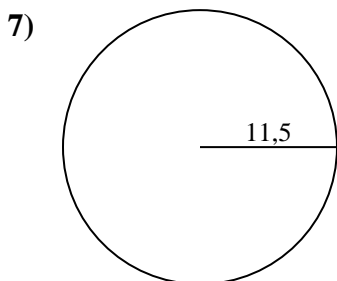
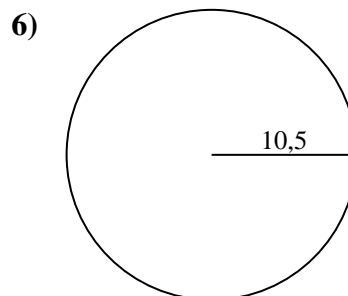
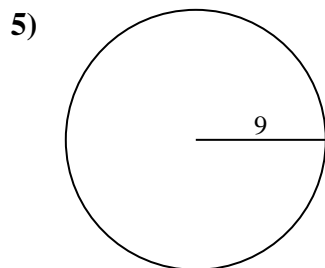
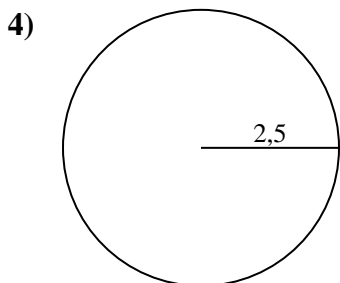
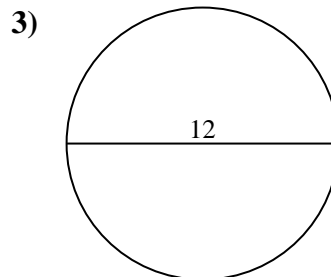
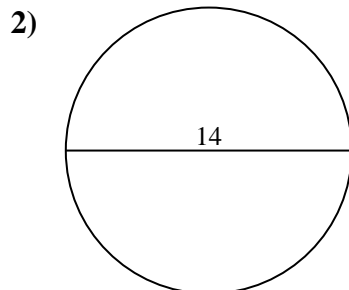
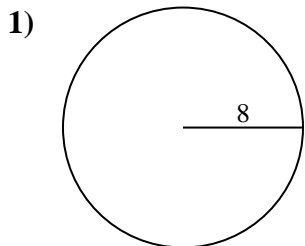
**Risposte**

1.	<u>201,1</u>	<u>50,3</u>
2.	<u>153,9</u>	<u>44</u>
3.	<u>113,1</u>	<u>37,7</u>
4.	<u>19,6</u>	<u>15,7</u>
5.	<u>254,5</u>	<u>56,5</u>
6.	<u>346,4</u>	<u>66</u>
7.	<u>415,5</u>	<u>72,3</u>
8.	<u>572,6</u>	<u>84,8</u>
9.	<u>12,6</u>	<u>12,6</u>
10.	<u>3,1</u>	<u>6,3</u>



Calcola area e perimetro. Non sono in scala.

66	254,5	50,3	572,6	37,7
72,3	12,6	19,6	113,1	153,9
15,7	346,4	56,5	201,1	84,8
415,5	12,6	44		

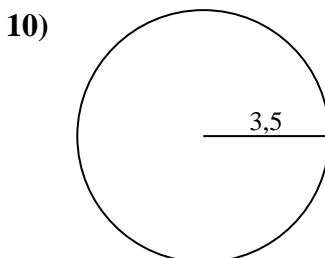
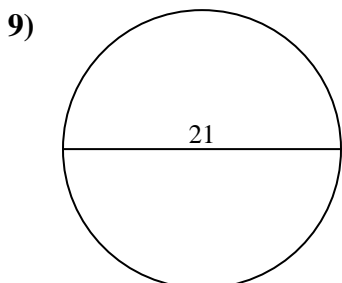
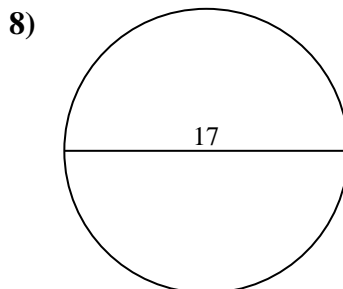
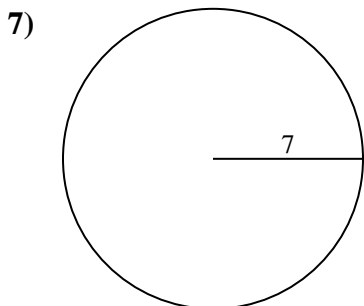
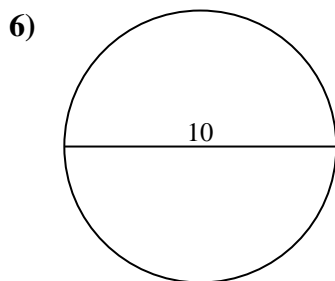
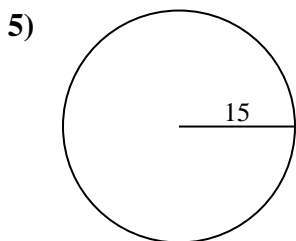
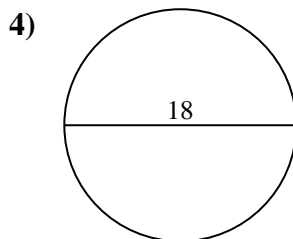
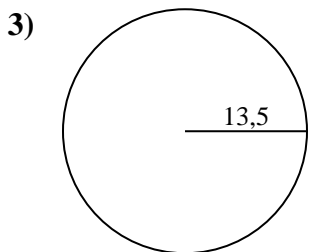
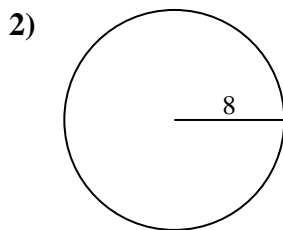
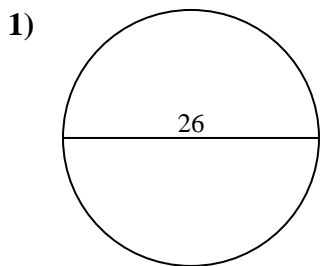


Risposte

1. _____
2. _____
3. _____
4. _____
5. _____
6. _____
7. _____
8. _____
9. _____



Calcola area e perimetro. Non sono in scala.

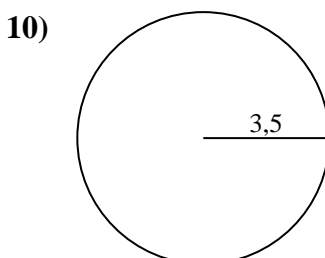
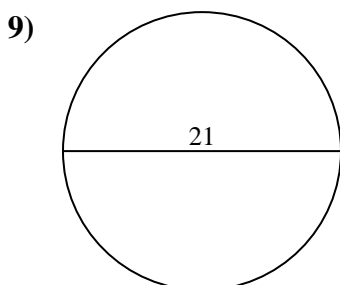
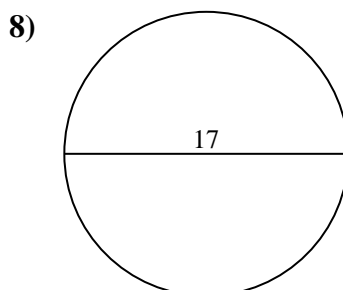
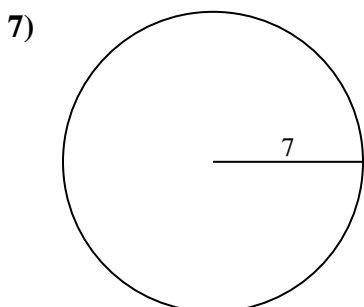
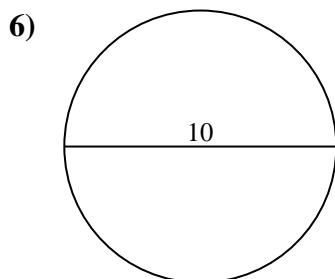
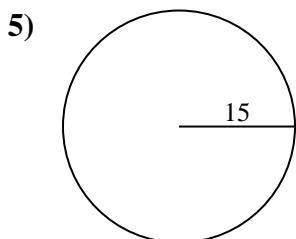
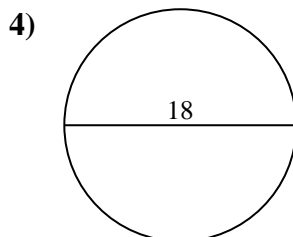
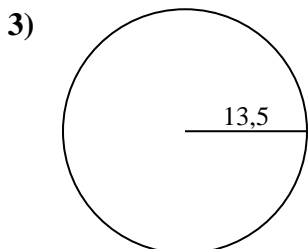
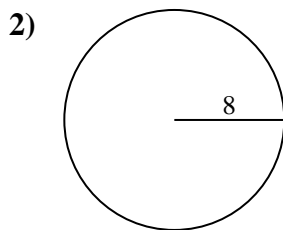
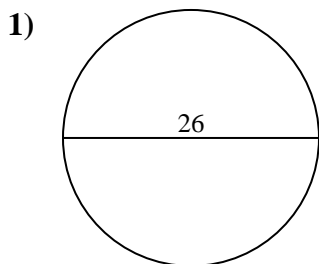


Risposte

- 1. _____
- 2. _____
- 3. _____
- 4. _____
- 5. _____
- 6. _____
- 7. _____
- 8. _____
- 9. _____
- 10. _____



Calcola area e perimetro. Non sono in scala.

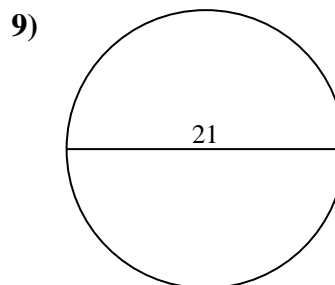
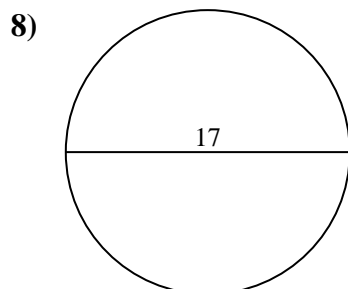
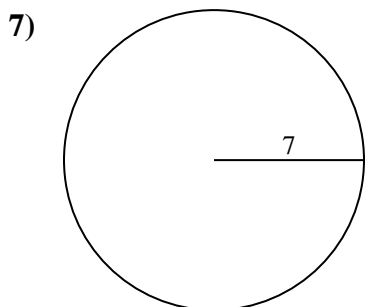
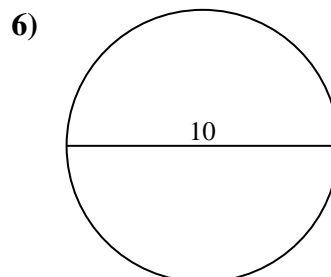
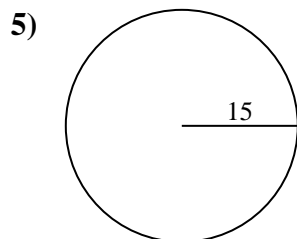
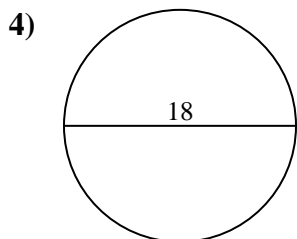
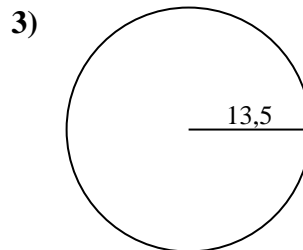
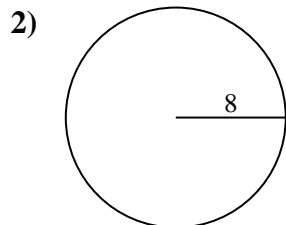
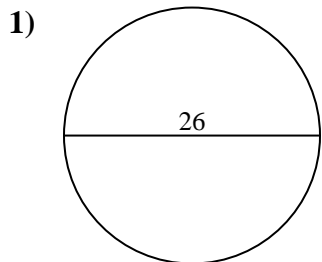
**Risposte**

1.	<u>530,9</u>	<u>81,7</u>
2.	<u>201,1</u>	<u>50,3</u>
3.	<u>572,6</u>	<u>84,8</u>
4.	<u>254,5</u>	<u>56,5</u>
5.	<u>706,9</u>	<u>94,2</u>
6.	<u>78,5</u>	<u>31,4</u>
7.	<u>153,9</u>	<u>44</u>
8.	<u>227</u>	<u>53,4</u>
9.	<u>346,4</u>	<u>66</u>
10.	<u>38,5</u>	<u>22</u>



Calcola area e perimetro. Non sono in scala.

227	346,4	530,9	201,1	706,9
84,8	31,4	78,5	153,9	53,4
44	94,2	66	254,5	56,5
572,6	81,7	50,3		



Risposte

1. _____
2. _____
3. _____
4. _____
5. _____
6. _____
7. _____
8. _____
9. _____