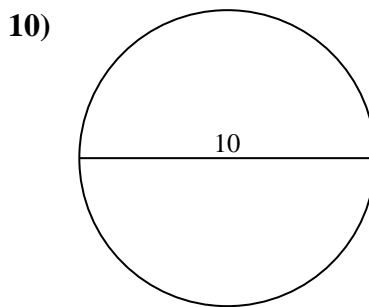
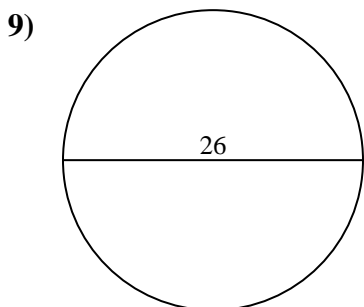
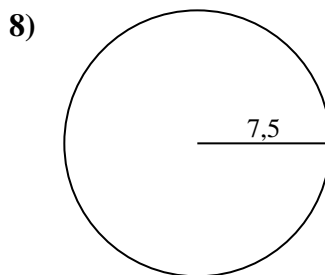
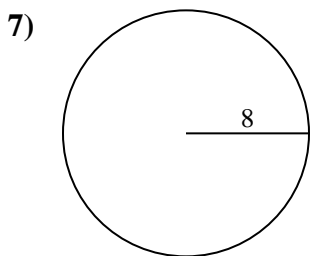
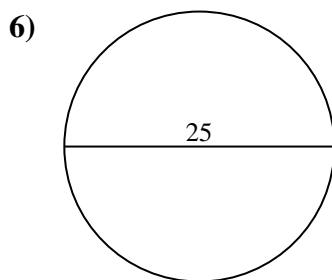
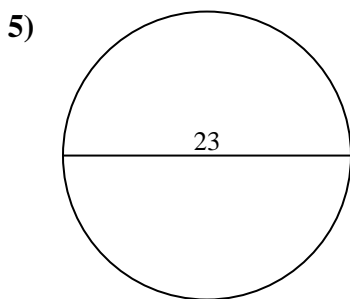
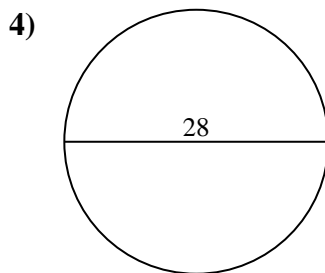
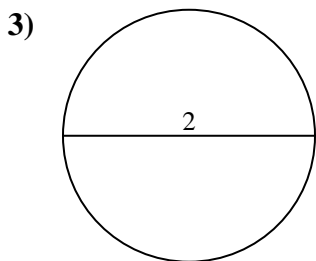
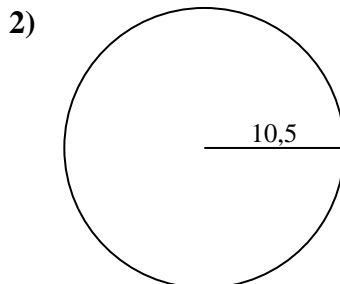
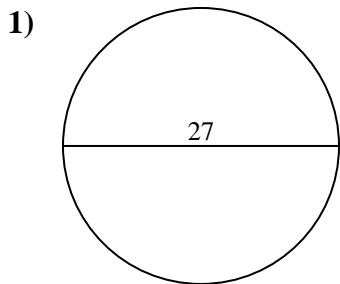




Calcola l'area di ogni cerchio. i cerchi non sono in scala.



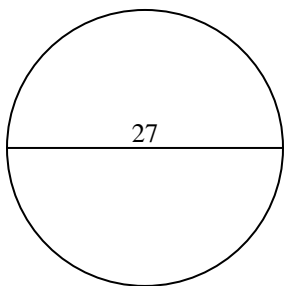
Risposte

- 1. _____
- 2. _____
- 3. _____
- 4. _____
- 5. _____
- 6. _____
- 7. _____
- 8. _____
- 9. _____
- 10. _____

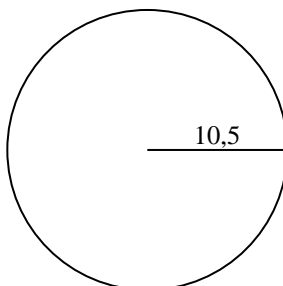


Calcola l'area di ogni cerchio. i cerchi non sono in scala.

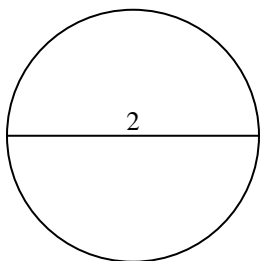
1)



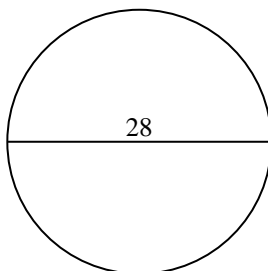
2)



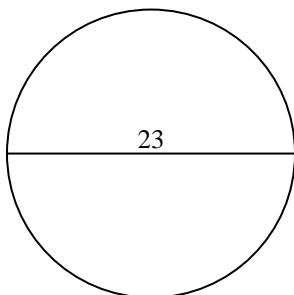
3)



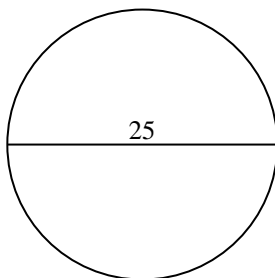
4)



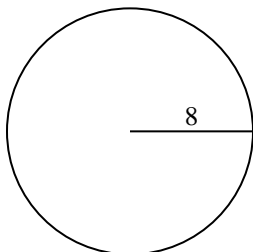
5)



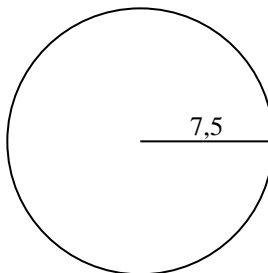
6)



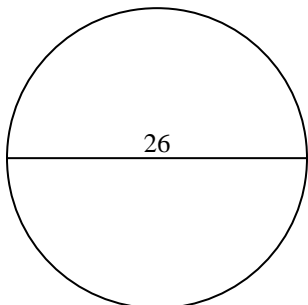
7)



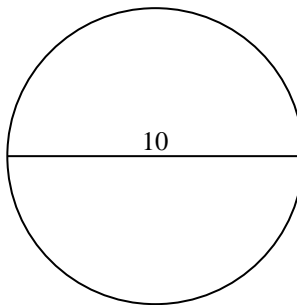
8)



9)



10)

**Risposte**1. 572,62. 346,43. 3,14. 615,85. 415,56. 490,97. 201,18. 176,79. 530,910. 78,5



Calcola l'area di ogni cerchio. i cerchi non sono in scala.

530,9

3,1

615,8

201,1

490,9

572,6

415,5

176,7

346,4

Risposte

1. _____

2. _____

3. _____

4. _____

5. _____

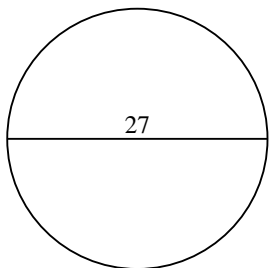
6. _____

7. _____

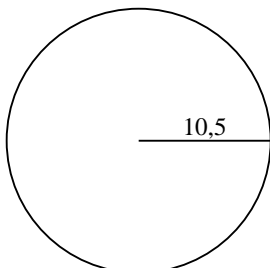
8. _____

9. _____

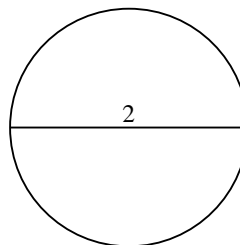
1)



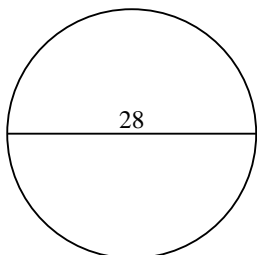
2)



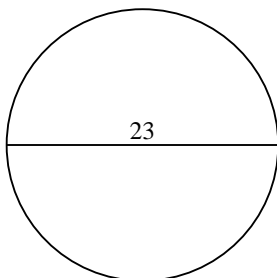
3)



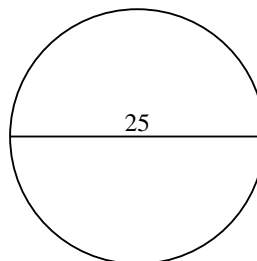
4)



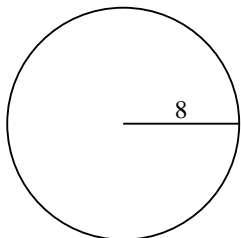
5)



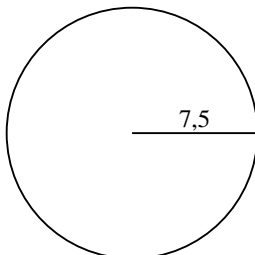
6)



7)



8)



9)

