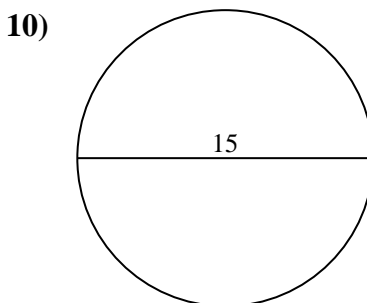
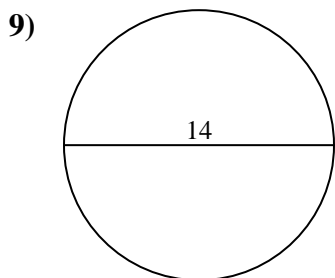
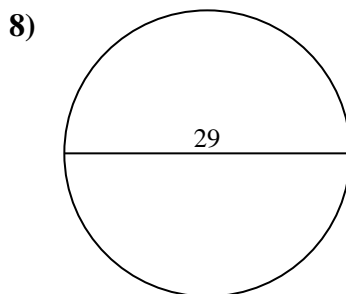
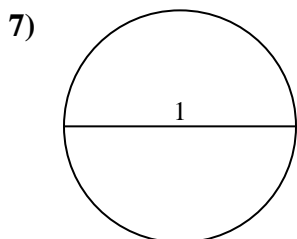
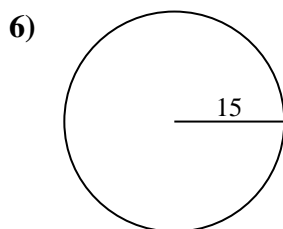
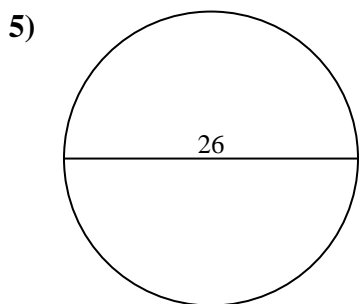
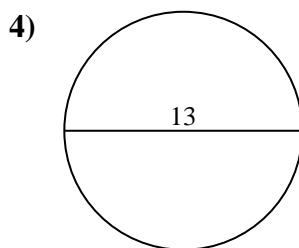
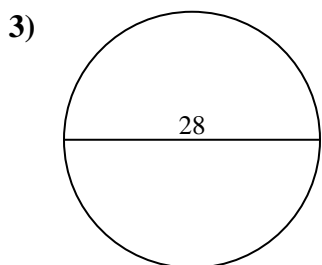
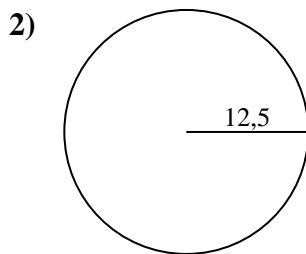
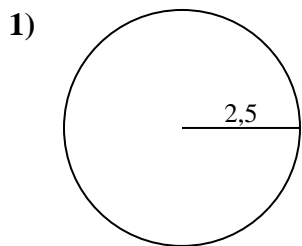




Calcola l'area di ogni cerchio. i cerchi non sono in scala.

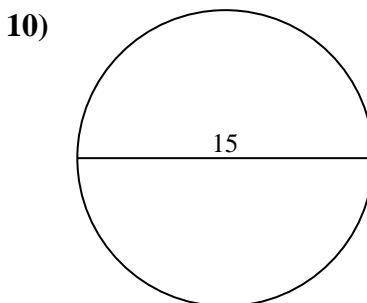
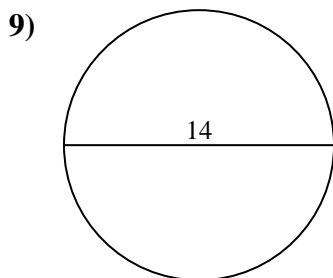
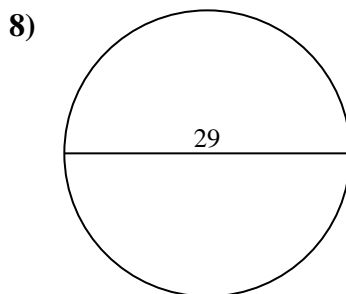
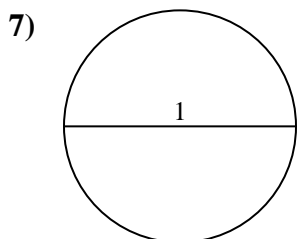
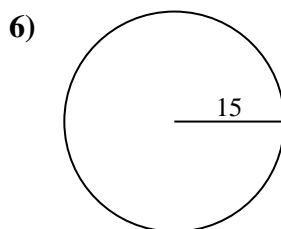
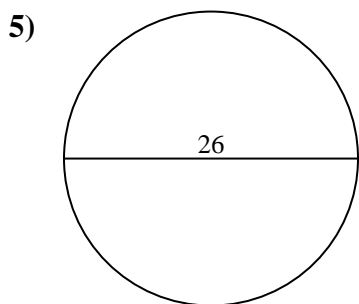
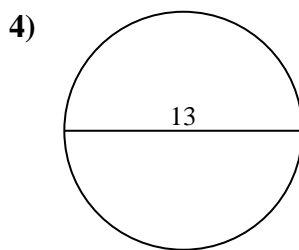
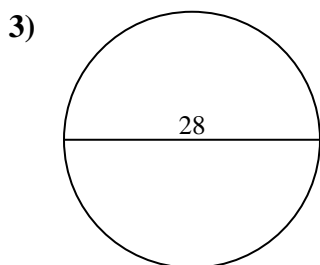
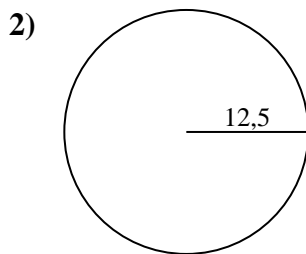
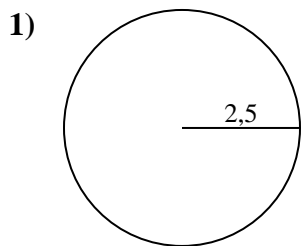


Risposte

- 1. _____
- 2. _____
- 3. _____
- 4. _____
- 5. _____
- 6. _____
- 7. _____
- 8. _____
- 9. _____
- 10. _____



Calcola l'area di ogni cerchio. i cerchi non sono in scala.

**Risposte**1. 19,62. 490,93. 615,84. 132,75. 530,96. 706,97. 0,88. 660,59. 153,910. 176,7



Calcola l'area di ogni cerchio. i cerchi non sono in scala.

490,9	615,8	706,9	132,7	153,9
19,6	530,9	0,8	660,5	

Risposte

- 1. _____
- 2. _____
- 3. _____
- 4. _____
- 5. _____
- 6. _____
- 7. _____
- 8. _____
- 9. _____

