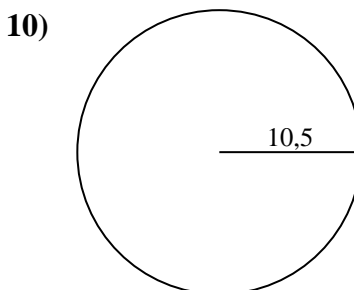
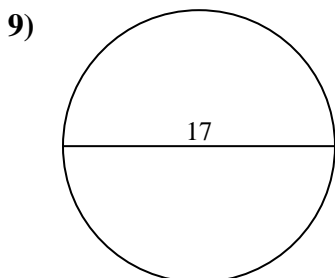
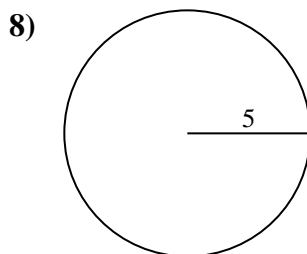
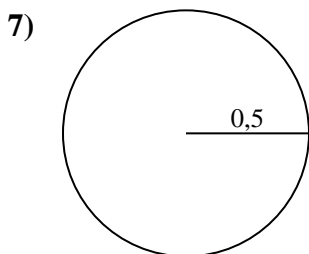
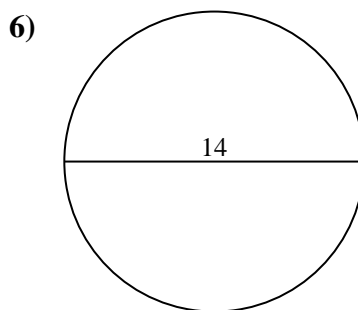
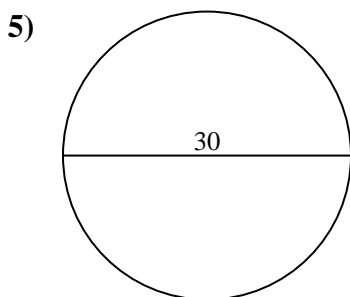
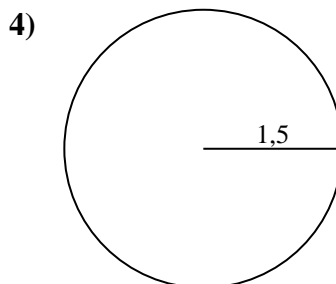
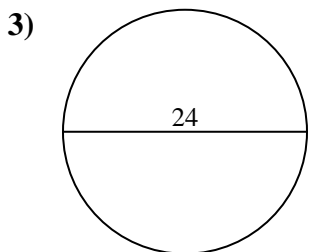
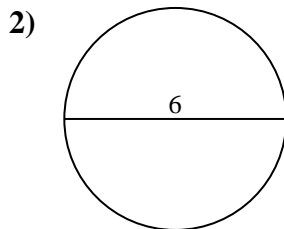
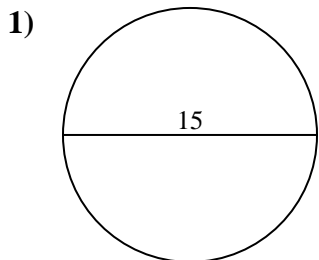




Calcola l'area di ogni cerchio. i cerchi non sono in scala.

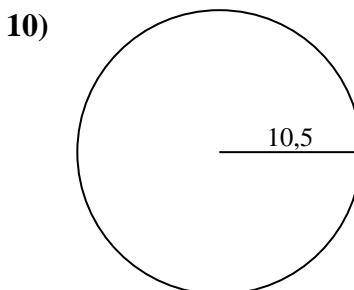
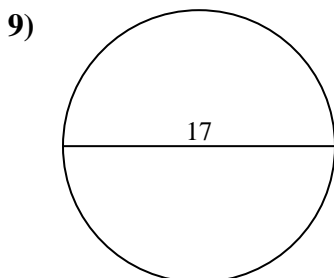
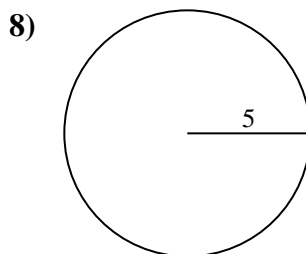
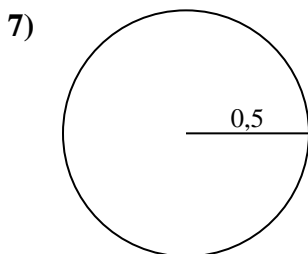
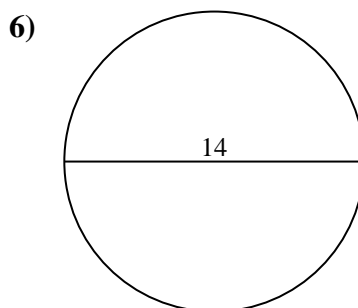
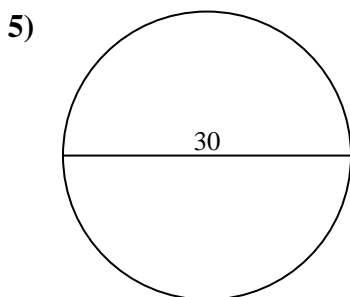
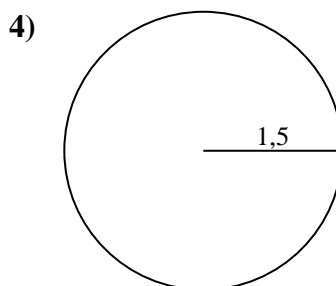
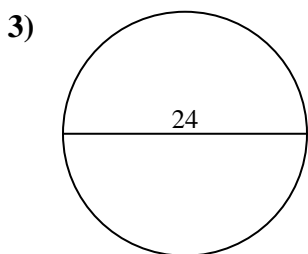
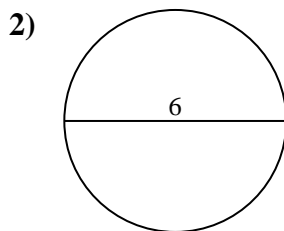
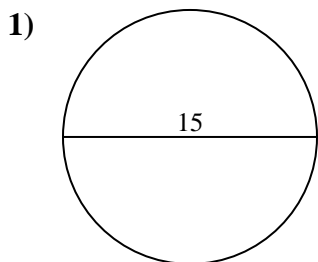


Risposte

- 1. _____
- 2. _____
- 3. _____
- 4. _____
- 5. _____
- 6. _____
- 7. _____
- 8. _____
- 9. _____
- 10. _____



Calcola l'area di ogni cerchio. i cerchi non sono in scala.

**Risposte**1. 176,72. 28,33. 452,44. 7,15. 706,96. 153,97. 0,88. 78,59. 22710. 346,4



Calcola l'area di ogni cerchio. i cerchi non sono in scala.

452,4	0,8	153,9	7,1	227
28,3	78,5	706,9	176,7	

Risposte

- 1. _____
- 2. _____
- 3. _____
- 4. _____
- 5. _____
- 6. _____
- 7. _____
- 8. _____
- 9. _____

