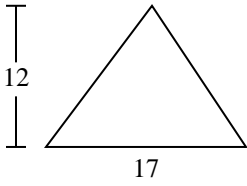


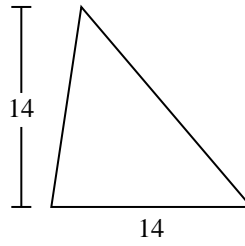


Trova l'area di ciascun traingoli. Le dimensioni non sono in scala.

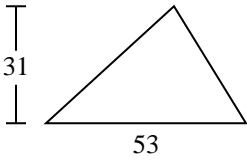
1)



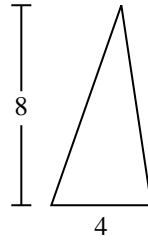
2)



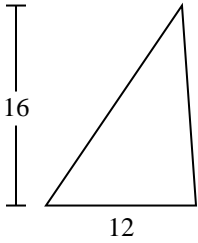
3)



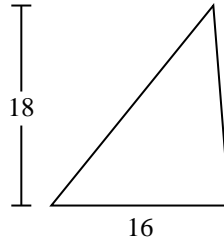
4)



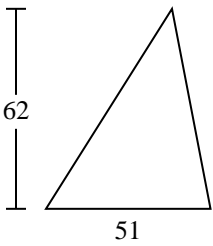
5)



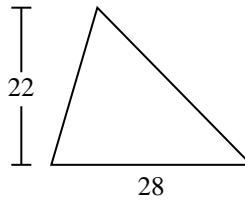
6)



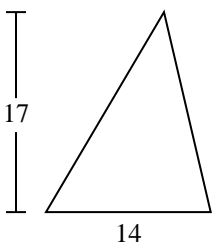
7)



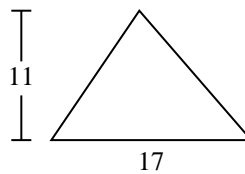
8)



9)



10)



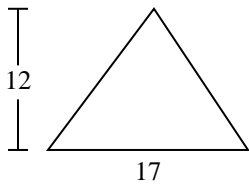
Risposte

- 1. _____
- 2. _____
- 3. _____
- 4. _____
- 5. _____
- 6. _____
- 7. _____
- 8. _____
- 9. _____
- 10. _____

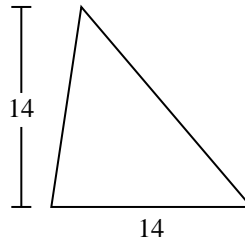


Trova l'area di ciascun traingoli. Le dimensioni non sono in scala.

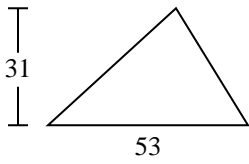
1)



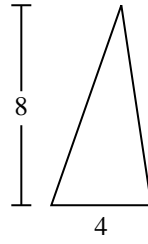
2)



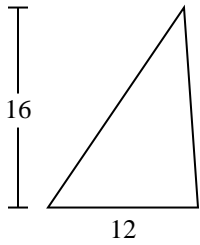
3)



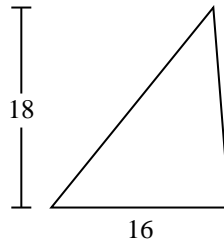
4)



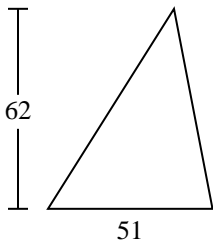
5)



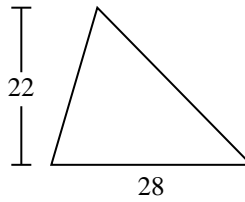
6)



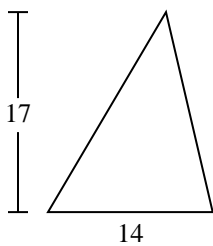
7)



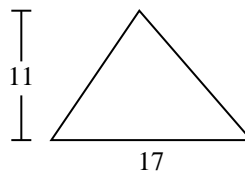
8)



9)



10)

**Risposte**

1. 102
2. 98
3. 821,5
4. 16
5. 96
6. 144
7. 1.581
8. 308
9. 119
10. 93,5



Trova l'area di ciascun traingoli. Le dimensioni non sono in scala.

102

1.581

308

144

16

119

821,5

98

96

Risposte

1. _____

2. _____

3. _____

4. _____

5. _____

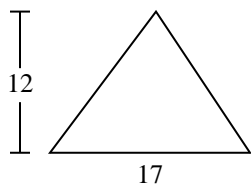
6. _____

7. _____

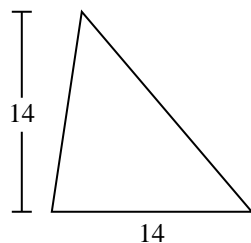
8. _____

9. _____

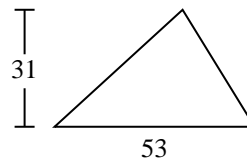
1)



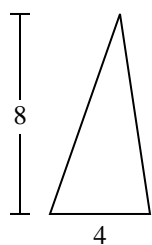
2)



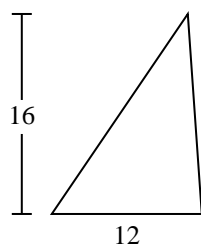
3)



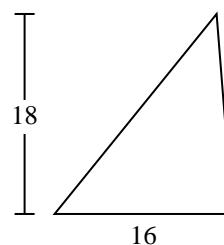
4)



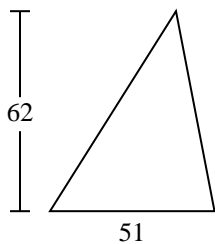
5)



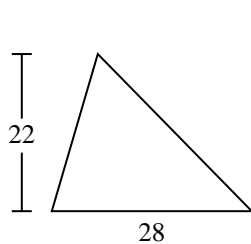
6)



7)



8)



9)

