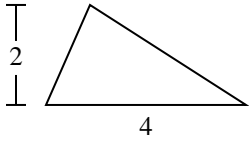


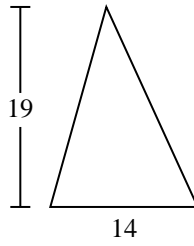


Trova l'area di ciascun traingoli. Le dimensioni non sono in scala.

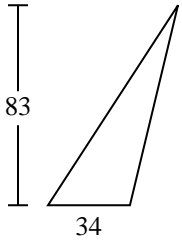
1)



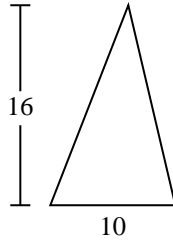
2)



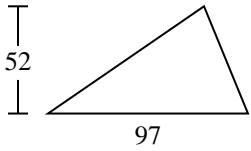
3)



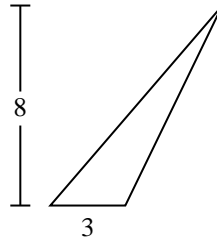
4)



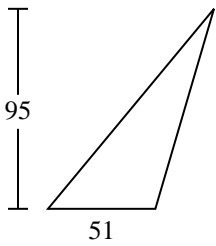
5)



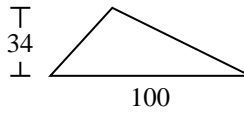
6)



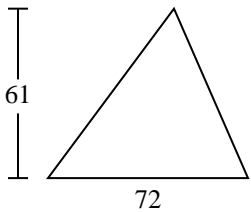
7)



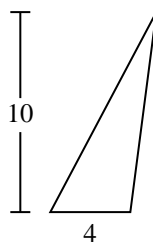
8)



9)



10)



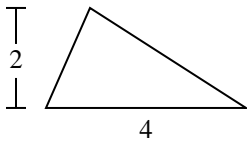
Risposte

1. _____
2. _____
3. _____
4. _____
5. _____
6. _____
7. _____
8. _____
9. _____
10. _____

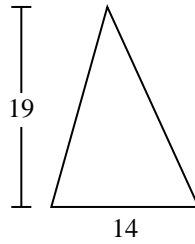


Trova l'area di ciascun traingoli. Le dimensioni non sono in scala.

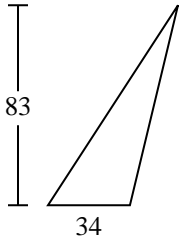
1)



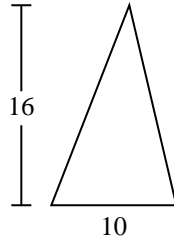
2)



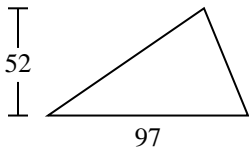
3)



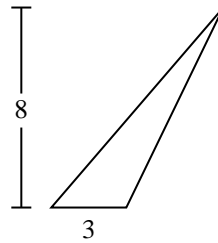
4)



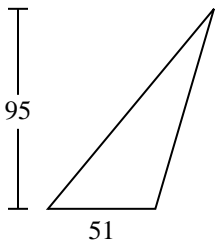
5)



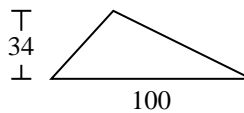
6)



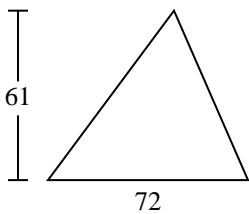
7)



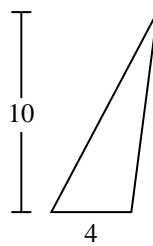
8)



9)



10)

**Risposte**

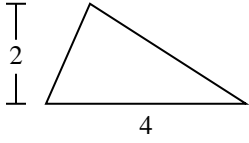
1. 4
2. 133
3. 1.411
4. 80
5. 2.522
6. 12
7. 2.422,5
8. 1.700
9. 2.196
10. 20



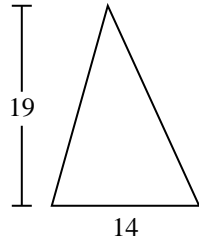
Trova l'area di ciascun traingoli. Le dimensioni non sono in scala.

133	4	1.411	2.522	2.196
1.700	2.422,5	80	12	

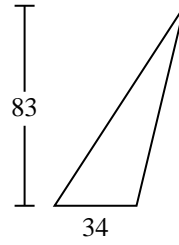
1)



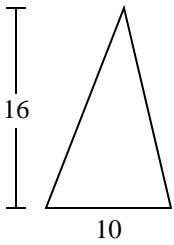
2)



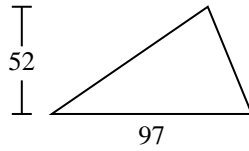
3)



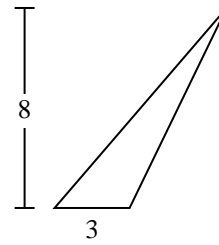
4)



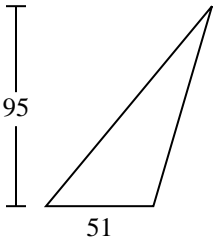
5)



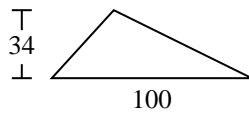
6)



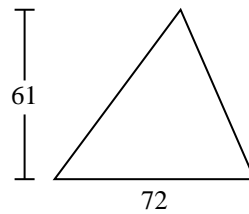
7)



8)



9)



Risposte

1. _____
2. _____
3. _____
4. _____
5. _____
6. _____
7. _____
8. _____
9. _____