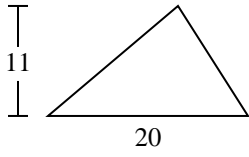


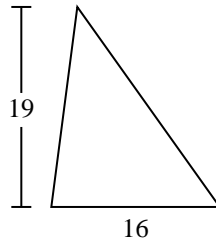


Trova l'area di ciascun traingoli. Le dimensioni non sono in scala.

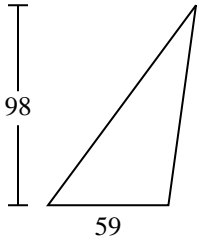
1)



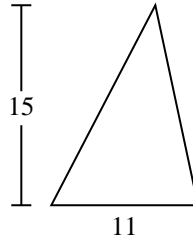
2)



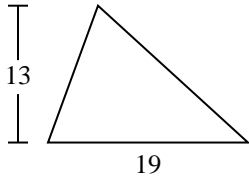
3)



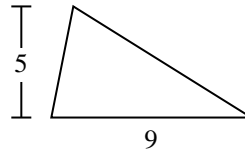
4)



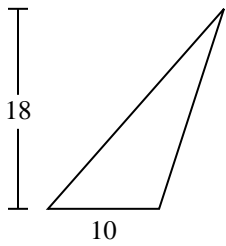
5)



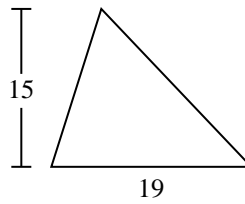
6)



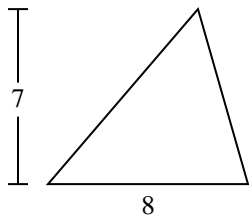
7)



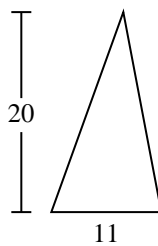
8)



9)



10)



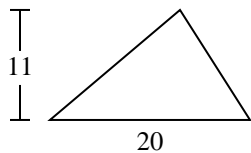
Risposte

- 1. _____
- 2. _____
- 3. _____
- 4. _____
- 5. _____
- 6. _____
- 7. _____
- 8. _____
- 9. _____
- 10. _____

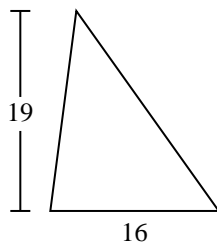


Trova l'area di ciascun traingoli. Le dimensioni non sono in scala.

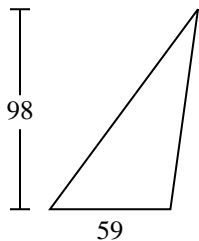
1)



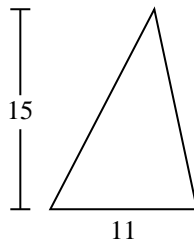
2)



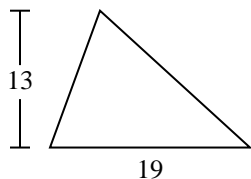
3)



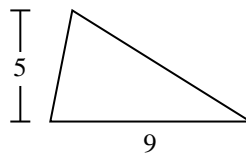
4)



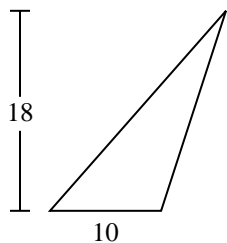
5)



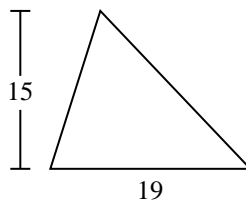
6)



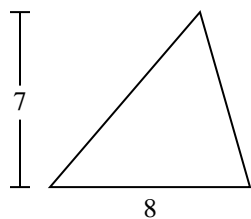
7)



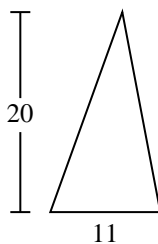
8)



9)



10)

**Risposte**1. **110**2. **152**3. **2.891**4. **82,5**5. **123,5**6. **22,5**7. **90**8. **142,5**9. **28**10. **110**



Trova l'area di ciascun traingoli. Le dimensioni non sono in scala.

22,5

152

28

90

142,5

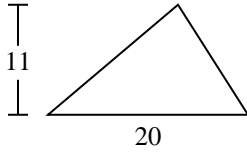
123,5

2.891

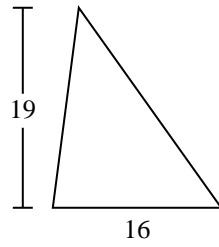
82,5

110

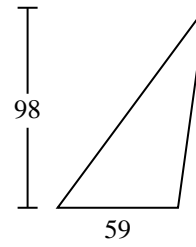
1)



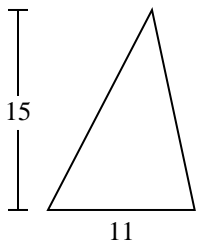
2)



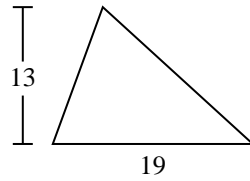
3)



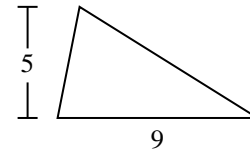
4)



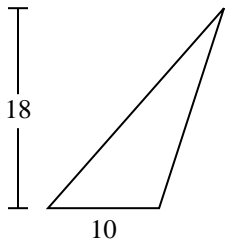
5)



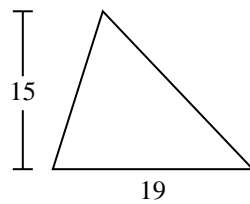
6)



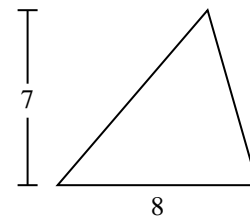
7)



8)



9)

**Risposte**

1. _____

2. _____

3. _____

4. _____

5. _____

6. _____

7. _____

8. _____

9. _____