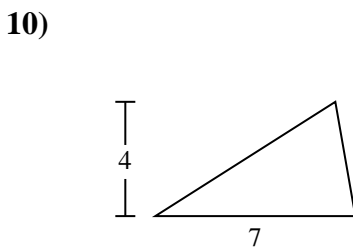
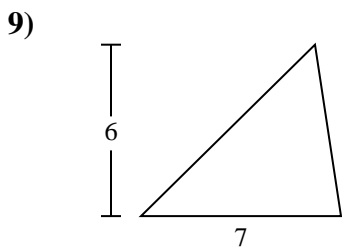
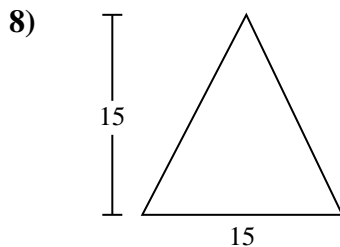
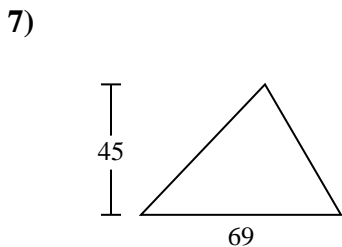
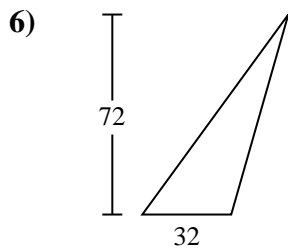
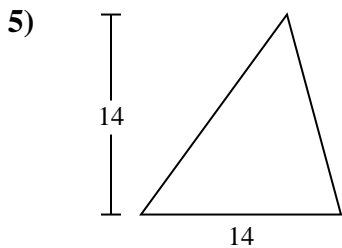
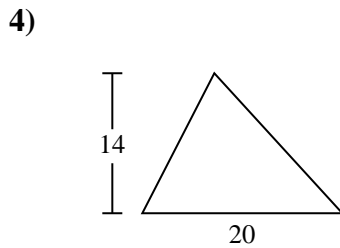
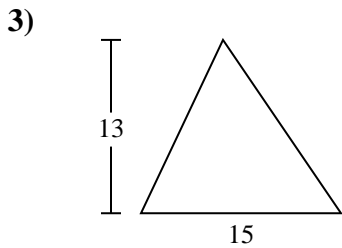
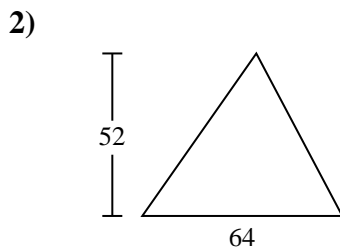
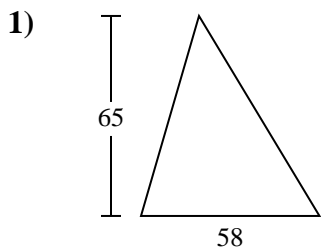




Trova l'area di ciascun traingoli. Le dimensioni non sono in scala.

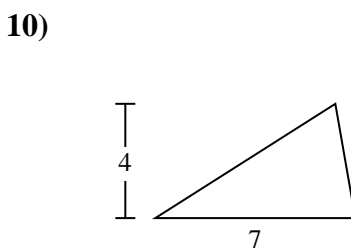
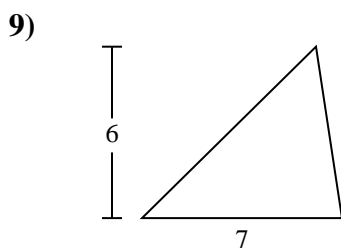
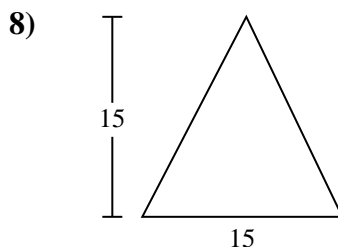
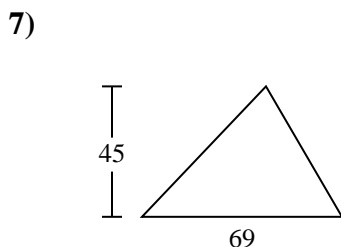
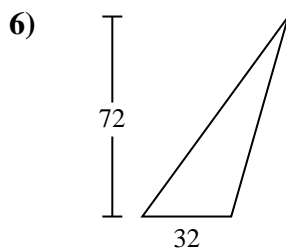
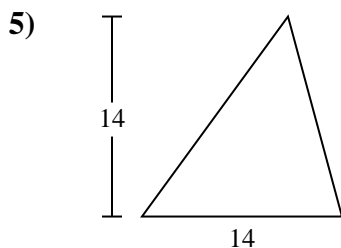
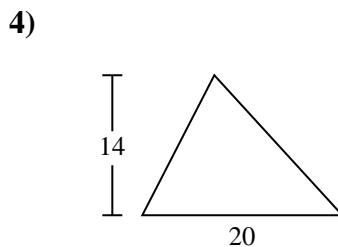
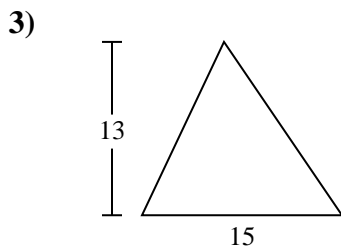
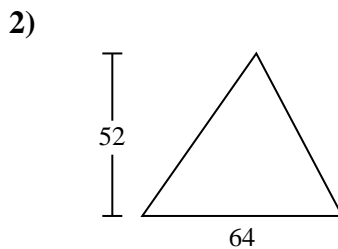
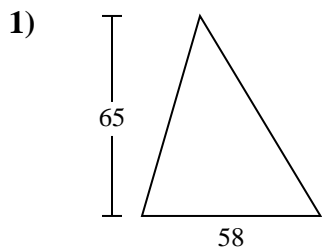


Risposte

- 1. _____
- 2. _____
- 3. _____
- 4. _____
- 5. _____
- 6. _____
- 7. _____
- 8. _____
- 9. _____
- 10. _____



Trova l'area di ciascun traingoli. Le dimensioni non sono in scala.

**Risposte**1. 1.8852. 1.6643. 97,54. 1405. 986. 1.1527. 1.552,58. 112,59. 2110. 14



Trova l'area di ciascun traingoli. Le dimensioni non sono in scala.

| | | | | |
|-------|-------|-------|---------|-------|
| 97,5 | 21 | 1.664 | 140 | 112,5 |
| 1.152 | 1.885 | 98 | 1.552,5 | |

Risposte

1. _____
2. _____
3. _____
4. _____
5. _____
6. _____
7. _____
8. _____
9. _____

