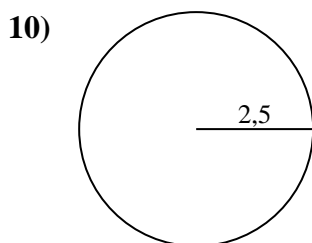
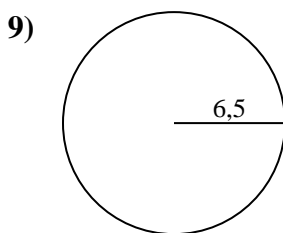
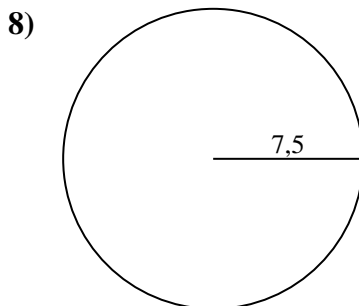
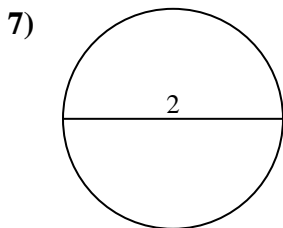
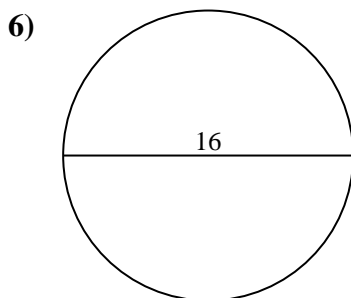
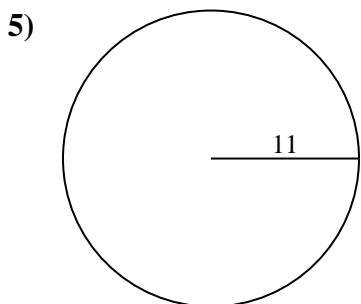
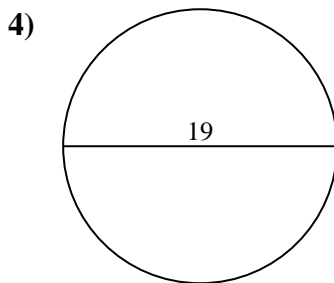
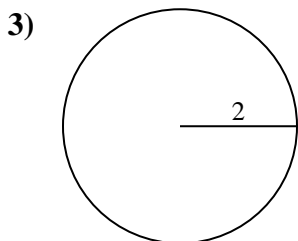
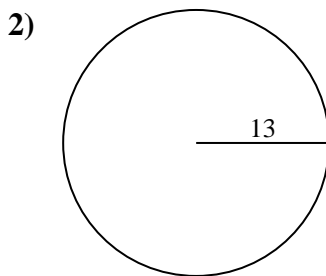
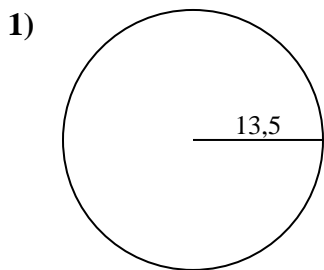




Calcola la circonferenza di ogni cerchio. I cerchi non sono da scalare.

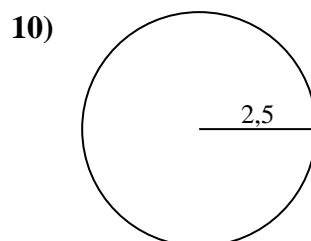
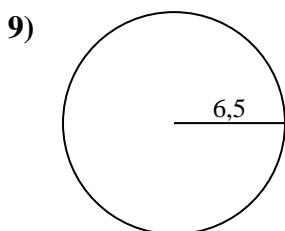
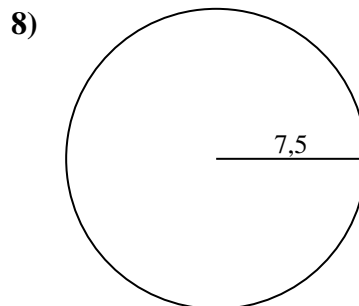
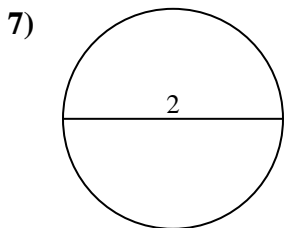
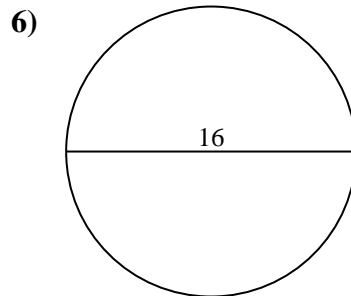
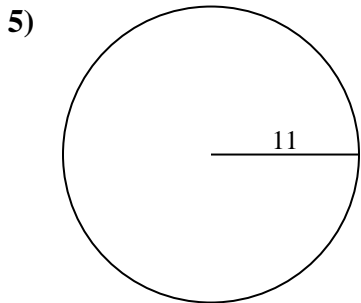
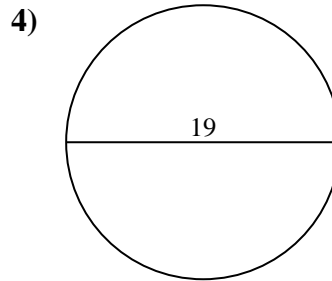
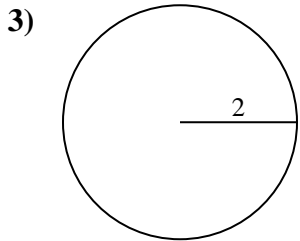
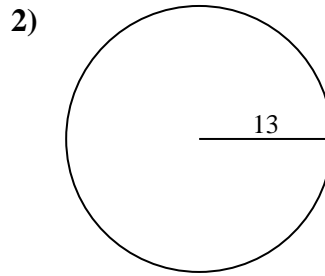
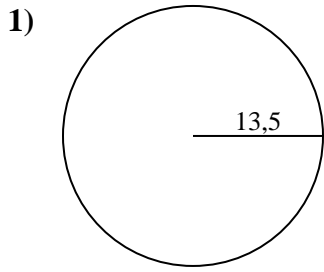


Risposte

- 1. _____
- 2. _____
- 3. _____
- 4. _____
- 5. _____
- 6. _____
- 7. _____
- 8. _____
- 9. _____
- 10. _____



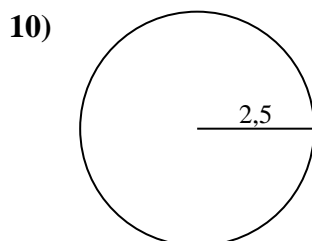
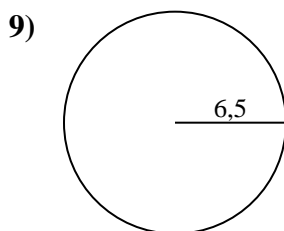
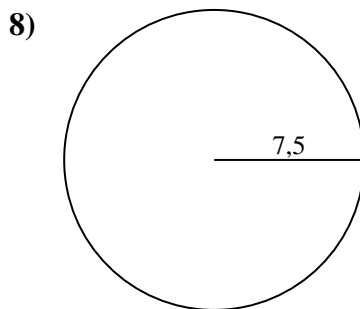
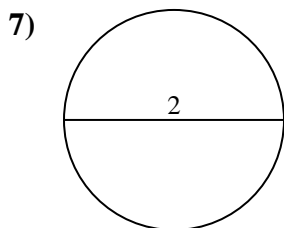
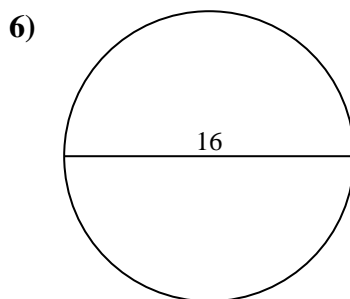
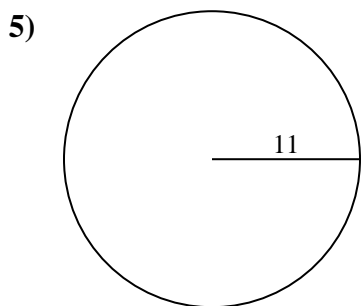
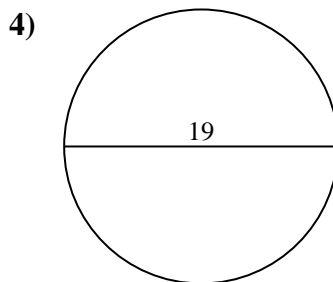
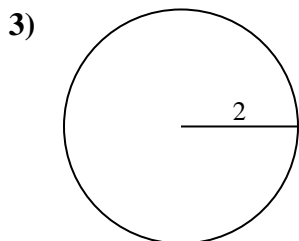
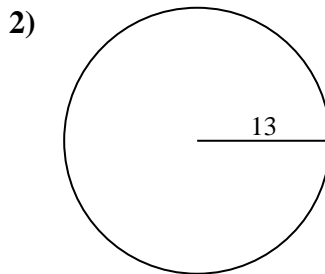
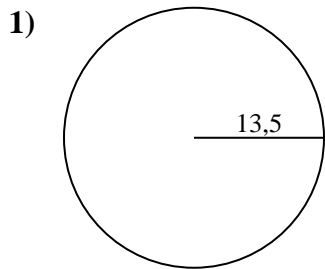
Calcola la circonferenza di ogni cerchio. I cerchi non sono da scalare.

**Risposte**1. **84,82 cm**2. **81,68 cm**3. **12,57 cm**4. **59,69 cm**5. **69,12 cm**6. **50,27 cm**7. **6,28 cm**8. **47,12 cm**9. **40,84 cm**10. **15,71 cm**



Calcola la circonferenza di ogni cerchio. I cerchi non sono da scalare.

69,12 cm	6,28 cm	81,68 cm	15,71 cm	12,57 cm
50,27 cm	47,12 cm	84,82 cm	59,69 cm	40,84 cm



Risposte

- 1. _____
- 2. _____
- 3. _____
- 4. _____
- 5. _____
- 6. _____
- 7. _____
- 8. _____
- 9. _____
- 10. _____