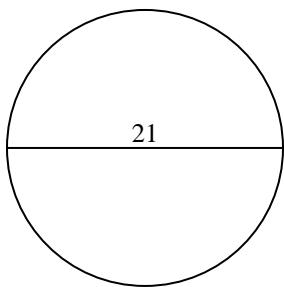


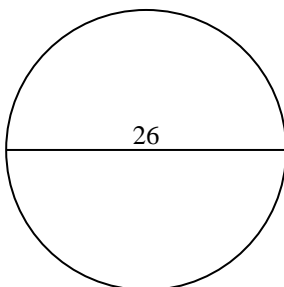


Calcola la circonferenza di ogni cerchio. I cerchi non sono da scalare.

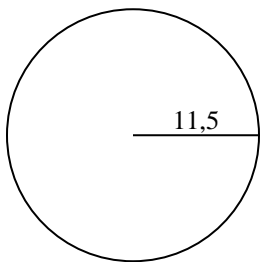
1)



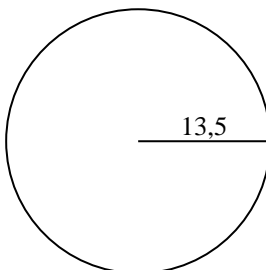
2)



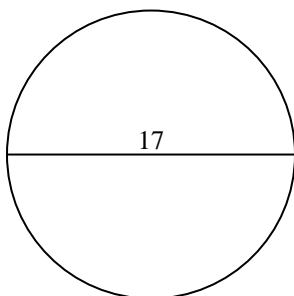
3)



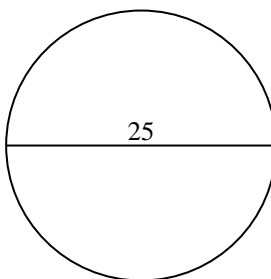
4)



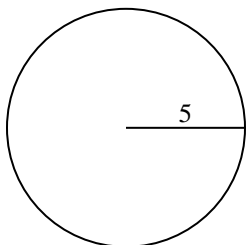
5)



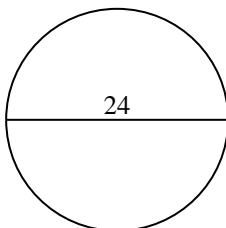
6)



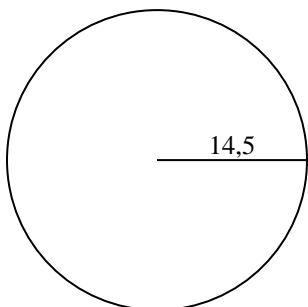
7)



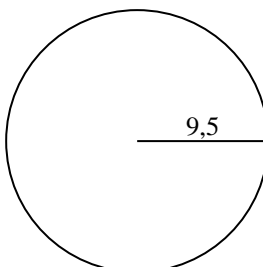
8)



9)



10)



Risposte

1. _____

2. _____

3. _____

4. _____

5. _____

6. _____

7. _____

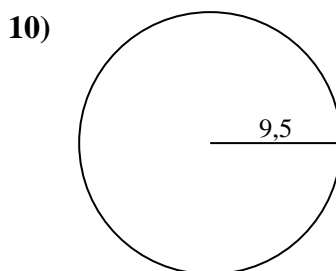
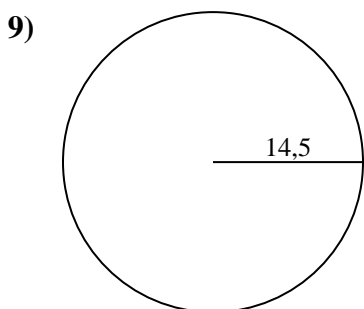
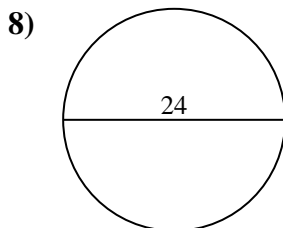
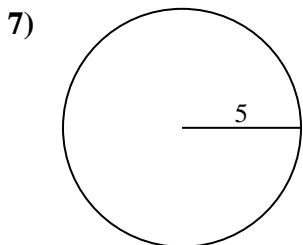
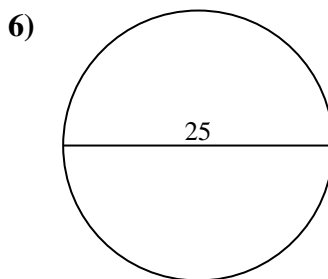
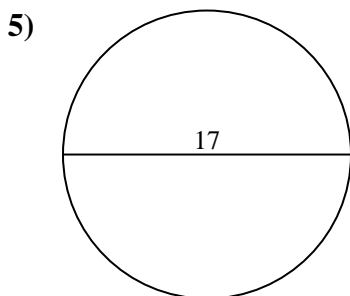
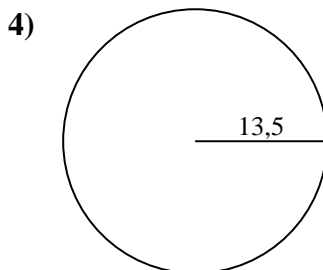
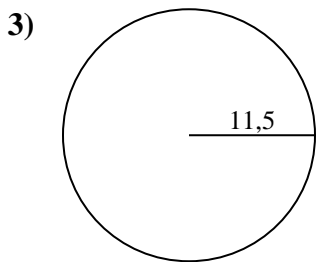
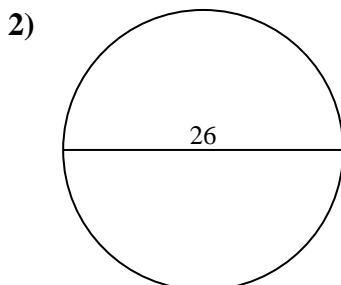
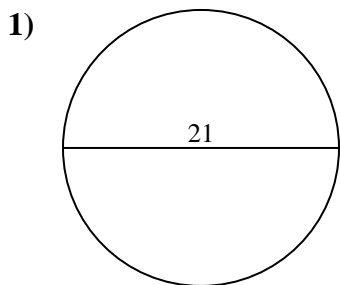
8. _____

9. _____

10. _____



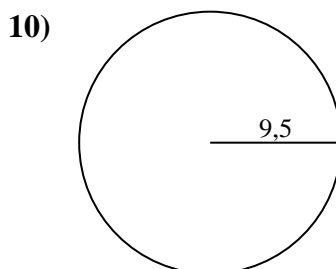
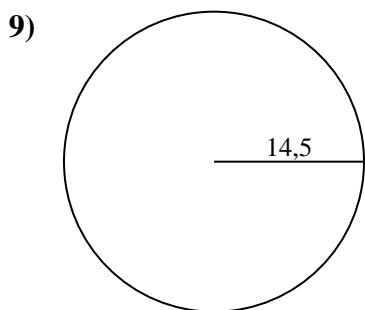
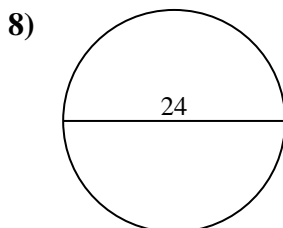
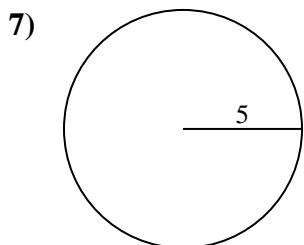
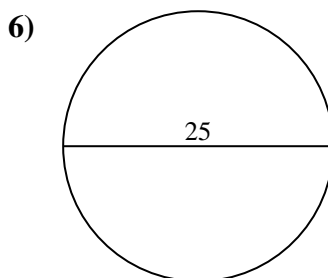
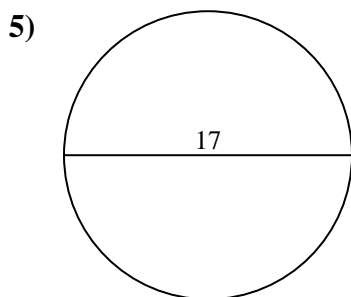
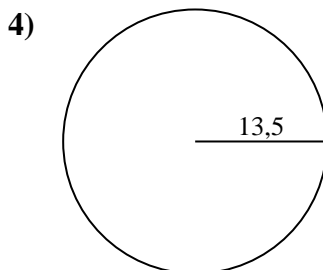
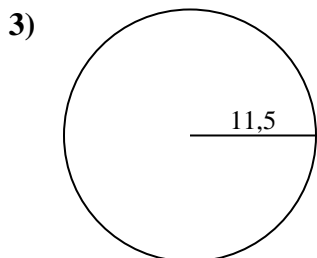
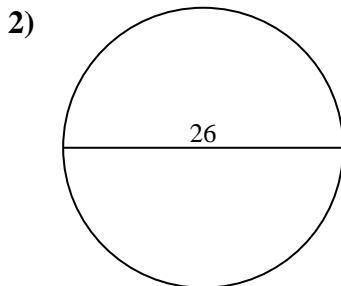
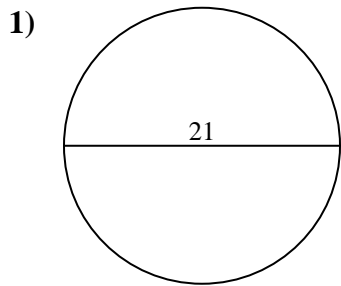
Calcola la circonferenza di ogni cerchio. I cerchi non sono da scalare.

**Risposte**1. 65,97 cm2. 81,68 cm3. 72,26 cm4. 84,82 cm5. 53,41 cm6. 78,54 cm7. 31,42 cm8. 75,4 cm9. 91,11 cm10. 59,69 cm



Calcola la circonferenza di ogni cerchio. I cerchi non sono da scalare.

84,82 cm	78,54 cm	53,41 cm	65,97 cm	91,11 cm
72,26 cm	31,42 cm	75,4 cm	59,69 cm	81,68 cm



Risposte

- 1. _____
- 2. _____
- 3. _____
- 4. _____
- 5. _____
- 6. _____
- 7. _____
- 8. _____
- 9. _____
- 10. _____