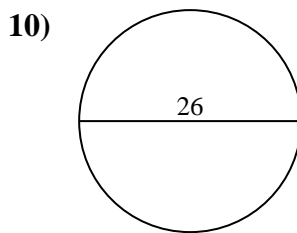
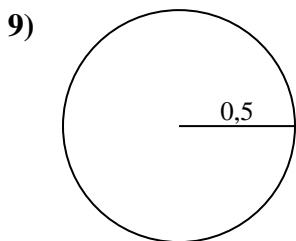
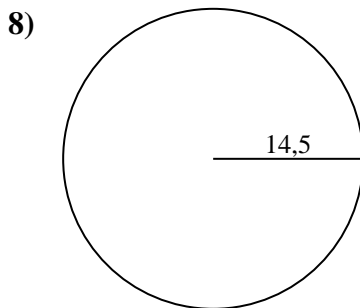
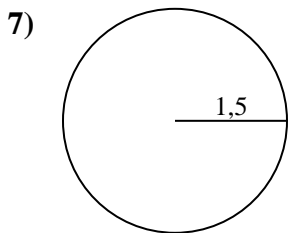
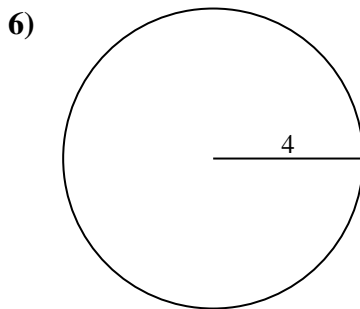
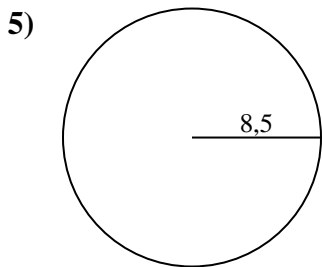
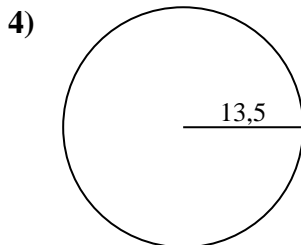
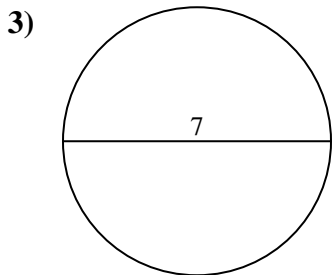
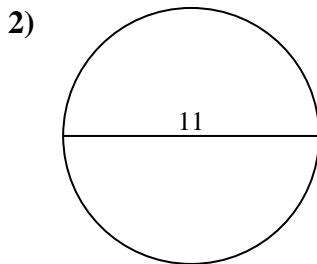
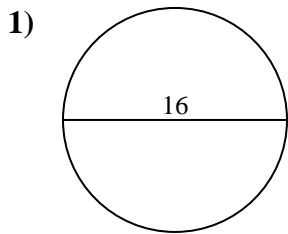




Calcola la circonferenza di ogni cerchio. I cerchi non sono da scalare.

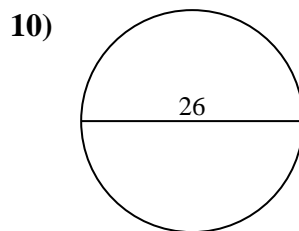
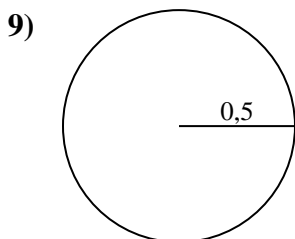
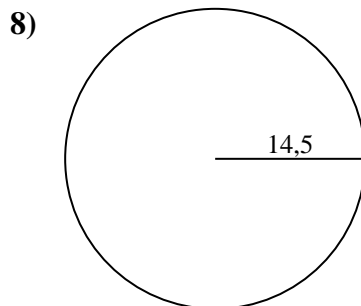
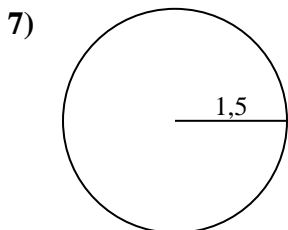
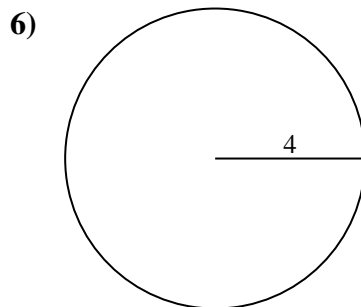
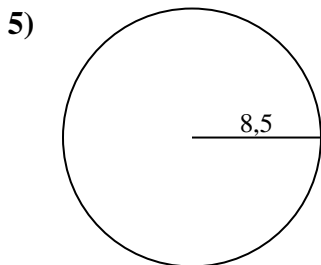
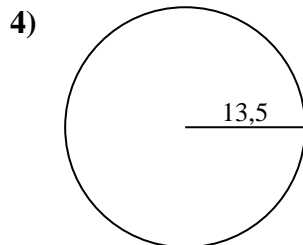
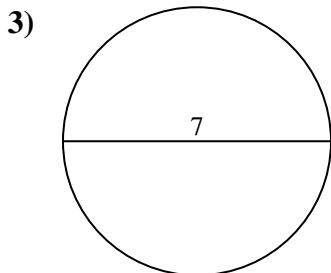
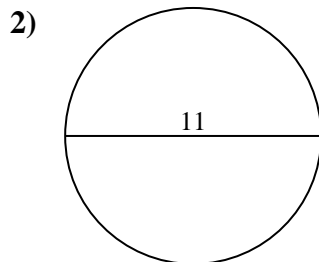
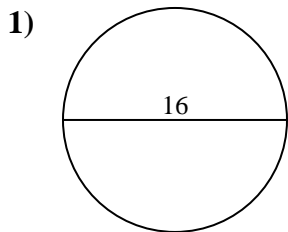


**Risposte**

1. \_\_\_\_\_
2. \_\_\_\_\_
3. \_\_\_\_\_
4. \_\_\_\_\_
5. \_\_\_\_\_
6. \_\_\_\_\_
7. \_\_\_\_\_
8. \_\_\_\_\_
9. \_\_\_\_\_
10. \_\_\_\_\_



Calcola la circonferenza di ogni cerchio. I cerchi non sono da scalare.

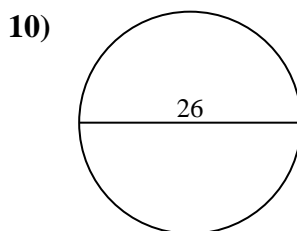
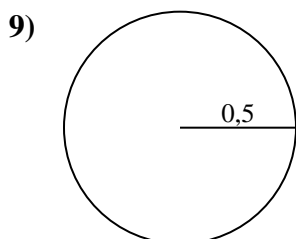
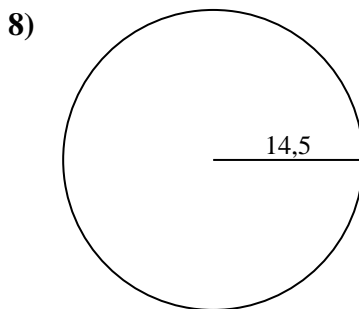
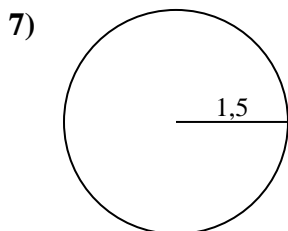
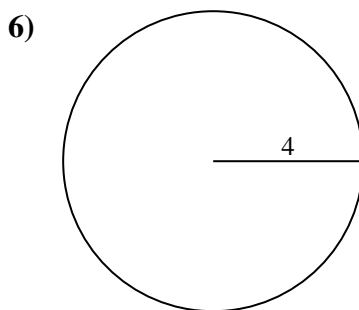
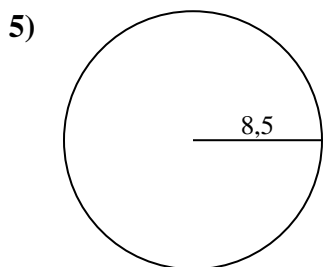
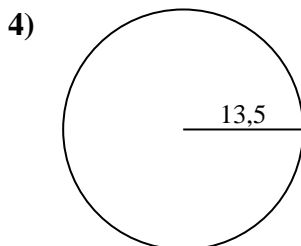
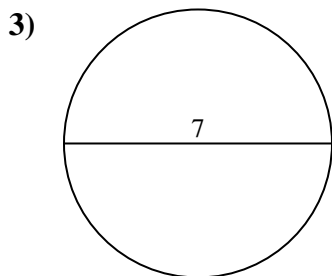
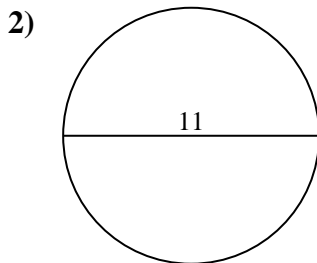
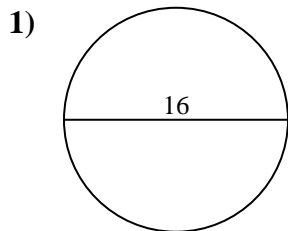
**Risposte**1. 50,27 cm2. 34,56 cm3. 21,99 cm4. 84,82 cm5. 53,41 cm6. 25,13 cm7. 9,42 cm8. 91,11 cm9. 3,14 cm10. 81,68 cm



Calcola la circonferenza di ogni cerchio. I cerchi non sono da scalare.

25,13 cm	81,68 cm	53,41 cm	91,11 cm	50,27 cm
34,56 cm	9,42 cm	21,99 cm	3,14 cm	84,82 cm

**Risposte**



- 1. \_\_\_\_\_
- 2. \_\_\_\_\_
- 3. \_\_\_\_\_
- 4. \_\_\_\_\_
- 5. \_\_\_\_\_
- 6. \_\_\_\_\_
- 7. \_\_\_\_\_
- 8. \_\_\_\_\_
- 9. \_\_\_\_\_
- 10. \_\_\_\_\_