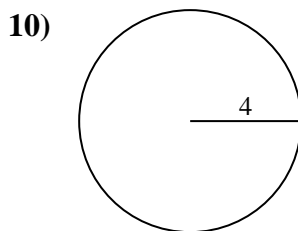
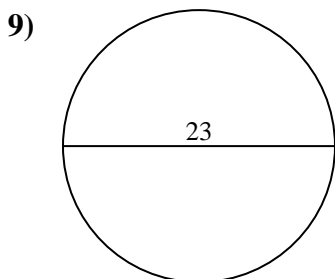
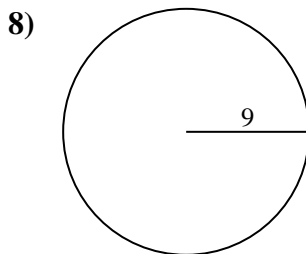
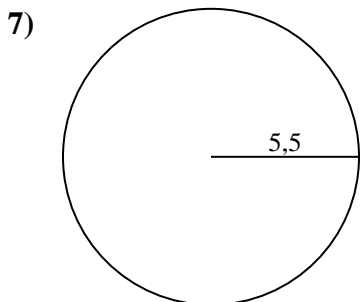
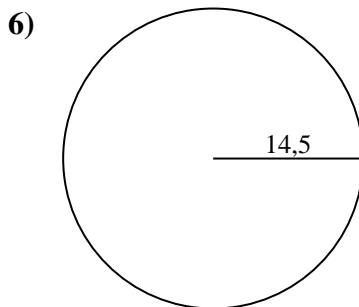
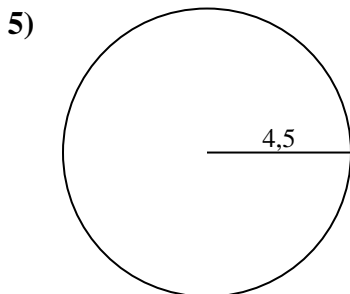
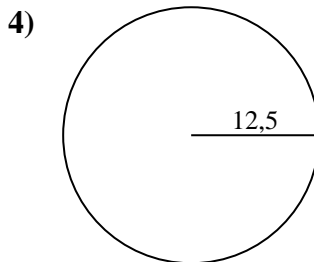
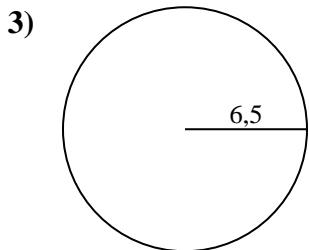
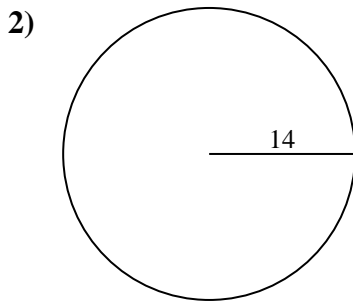
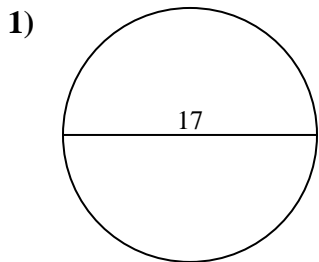




Calcola la circonferenza di ogni cerchio. I cerchi non sono da scalare.



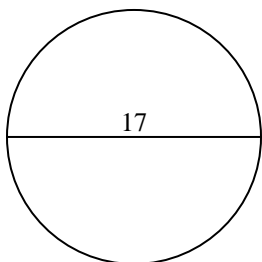
Risposte

- 1. _____
- 2. _____
- 3. _____
- 4. _____
- 5. _____
- 6. _____
- 7. _____
- 8. _____
- 9. _____
- 10. _____

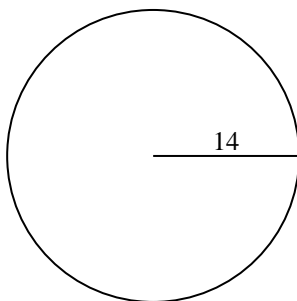


Calcola la circonferenza di ogni cerchio. I cerchi non sono da scalare.

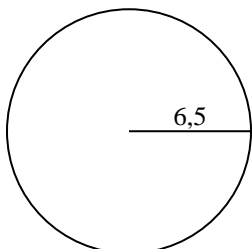
1)



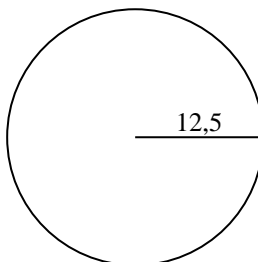
2)



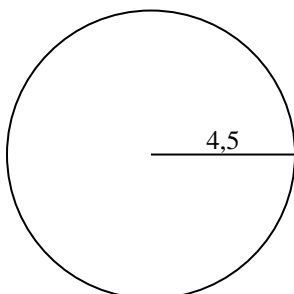
3)



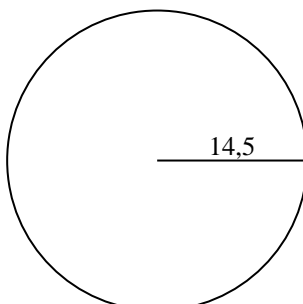
4)



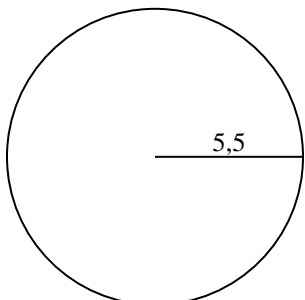
5)



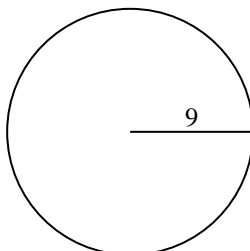
6)



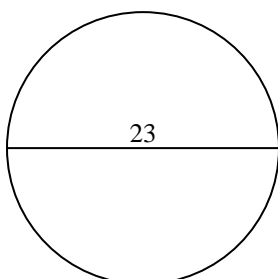
7)



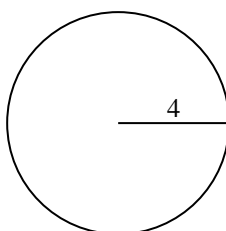
8)



9)



10)

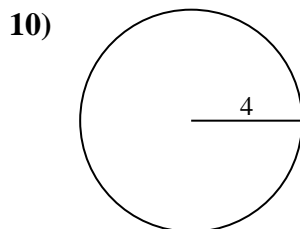
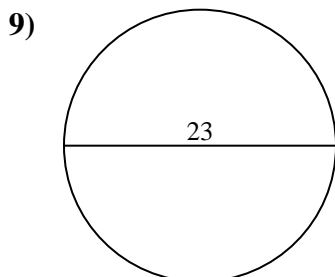
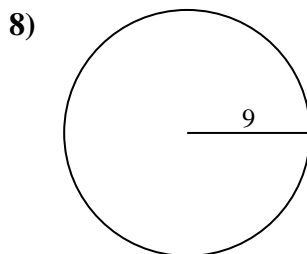
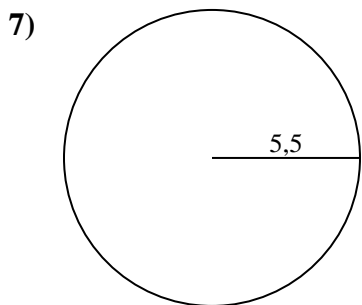
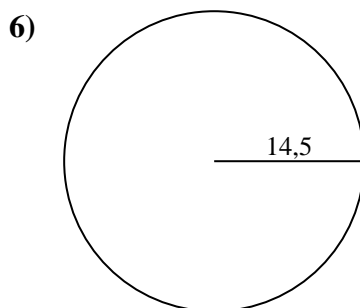
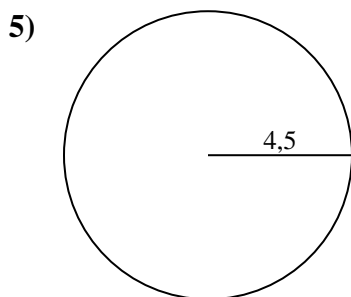
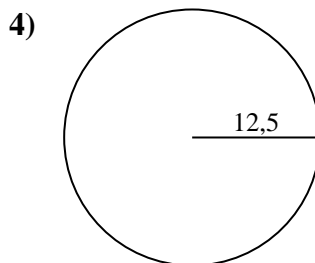
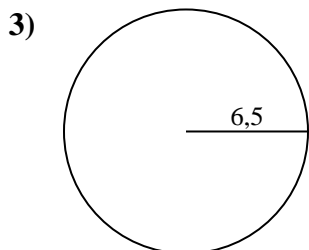
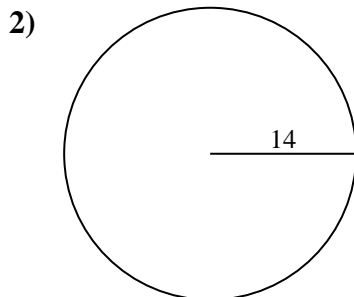
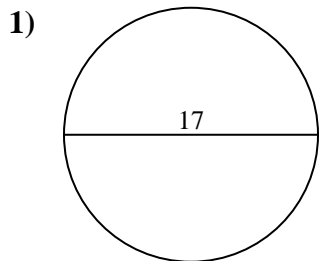
**Risposte**1. **53,41 cm**2. **87,96 cm**3. **40,84 cm**4. **78,54 cm**5. **28,27 cm**6. **91,11 cm**7. **34,56 cm**8. **56,55 cm**9. **72,26 cm**10. **25,13 cm**



Calcola la circonferenza di ogni cerchio. I cerchi non sono da scalare.

72,26 cm	40,84 cm	34,56 cm	53,41 cm	25,13 cm
28,27 cm	87,96 cm	78,54 cm	91,11 cm	56,55 cm

Risposte



- 1. _____
- 2. _____
- 3. _____
- 4. _____
- 5. _____
- 6. _____
- 7. _____
- 8. _____
- 9. _____
- 10. _____