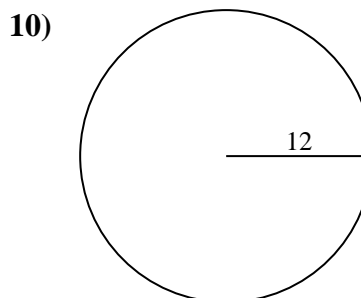
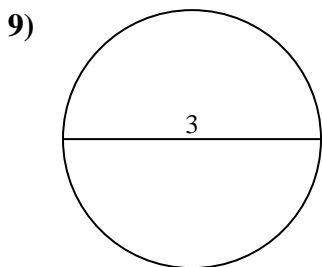
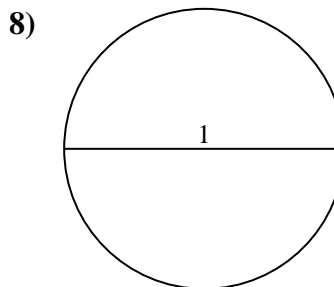
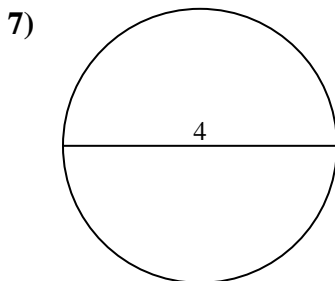
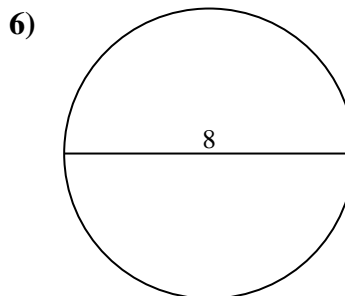
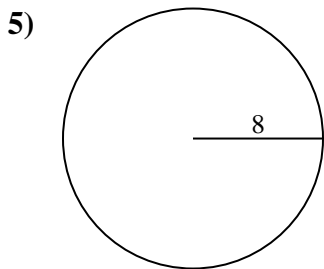
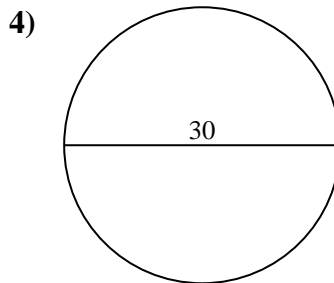
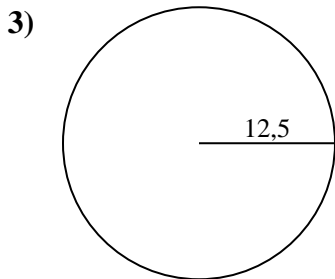
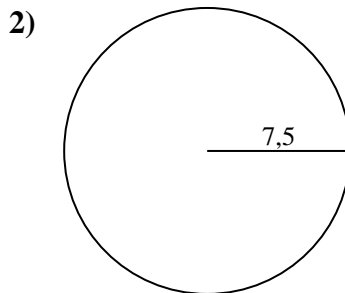
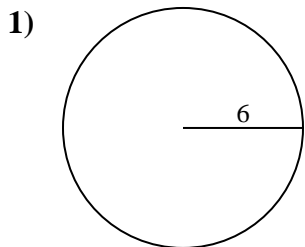




Calcola la circonferenza di ogni cerchio. I cerchi non sono da scalare.

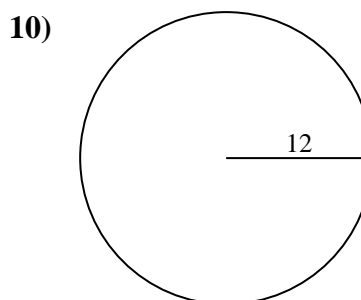
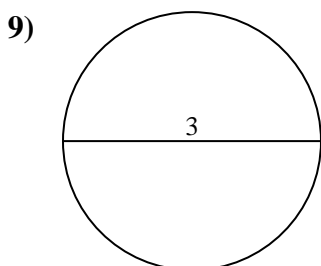
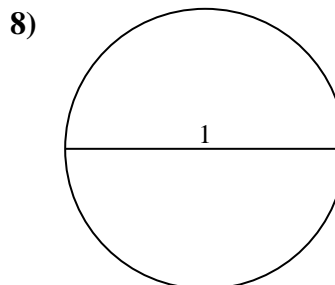
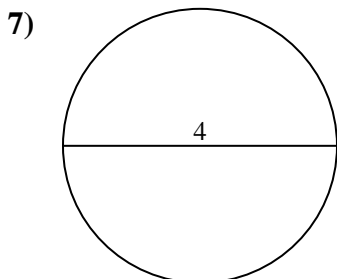
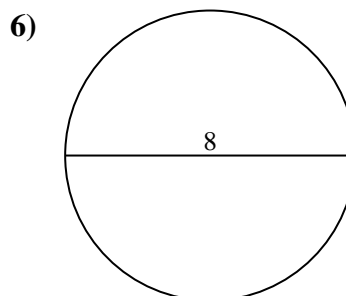
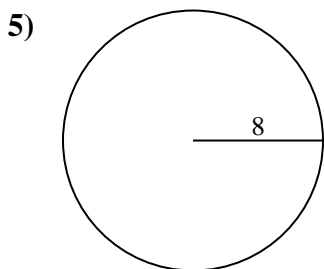
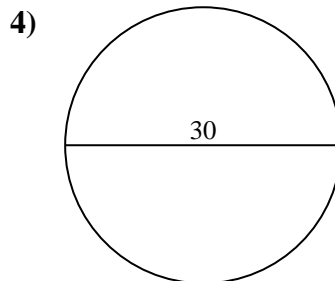
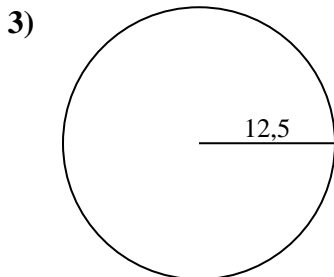
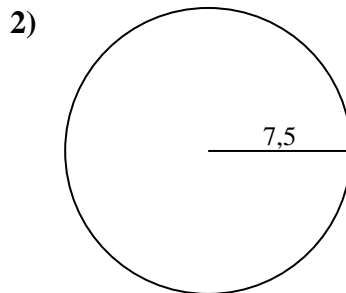
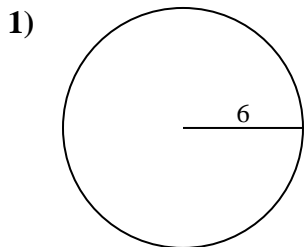


Risposte

- 1. _____
- 2. _____
- 3. _____
- 4. _____
- 5. _____
- 6. _____
- 7. _____
- 8. _____
- 9. _____
- 10. _____



Calcola la circonferenza di ogni cerchio. I cerchi non sono da scalare.

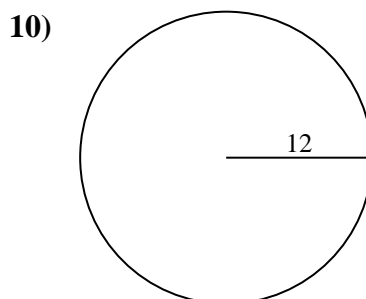
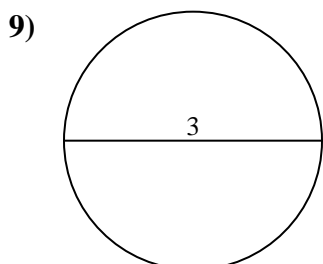
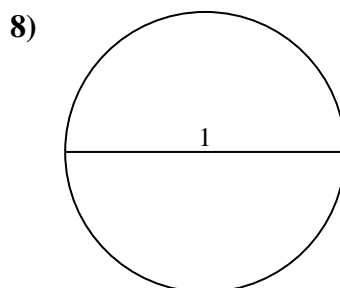
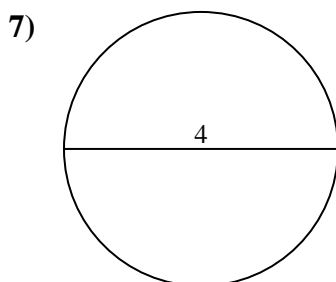
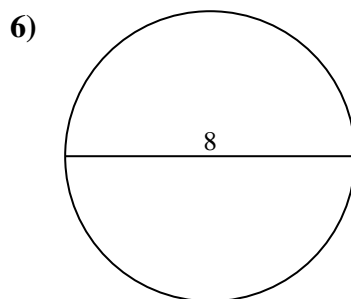
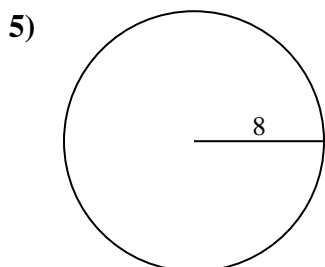
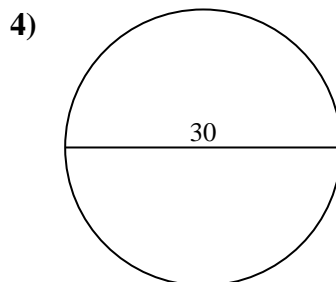
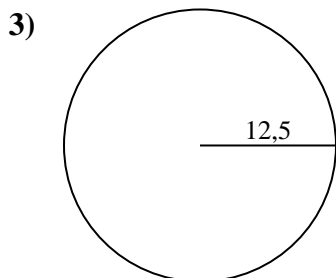
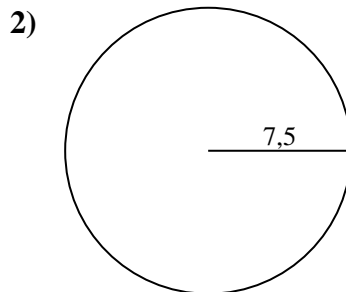
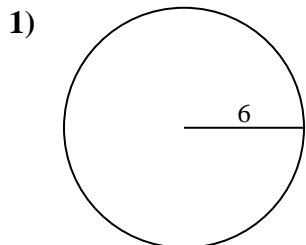
**Risposte**

1. 37,7 cm
2. 47,12 cm
3. 78,54 cm
4. 94,25 cm
5. 50,27 cm
6. 25,13 cm
7. 12,57 cm
8. 3,14 cm
9. 9,42 cm
10. 75,4 cm



Calcola la circonferenza di ogni cerchio. I cerchi non sono da scalare.

| | | | | |
|----------|----------|----------|----------|----------|
| 12,57 cm | 75,4 cm | 25,13 cm | 94,25 cm | 50,27 cm |
| 9,42 cm | 78,54 cm | 37,7 cm | 47,12 cm | 3,14 cm |



Risposte

- 1. _____
- 2. _____
- 3. _____
- 4. _____
- 5. _____
- 6. _____
- 7. _____
- 8. _____
- 9. _____
- 10. _____