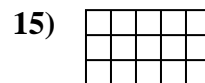

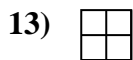
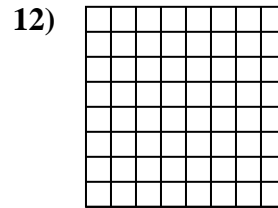
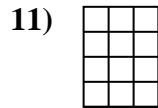
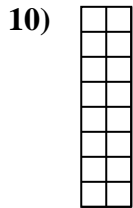
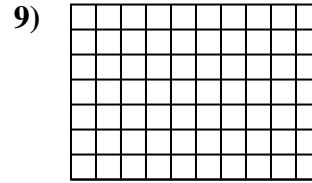
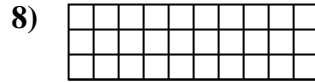
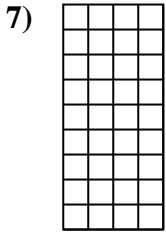
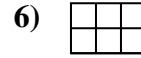
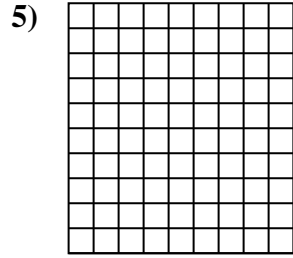
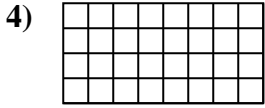
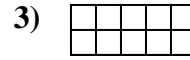
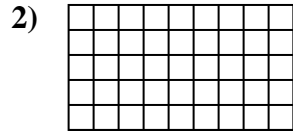
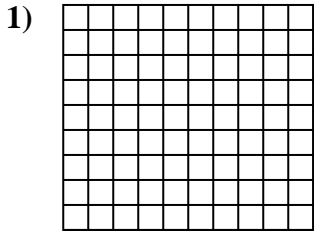




Calcola l'area. Ogni quadratino corrisponde ad 1 unità.

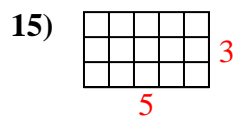
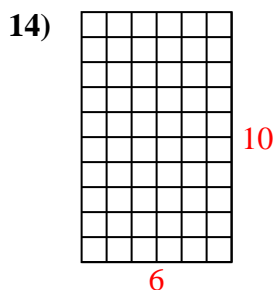
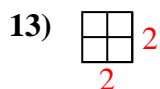
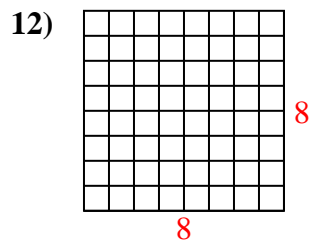
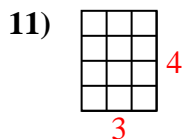
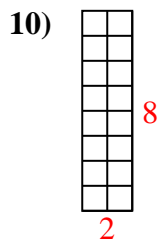
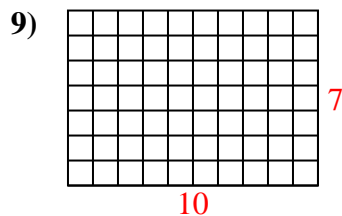
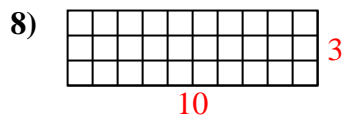
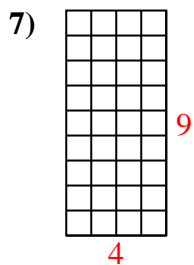
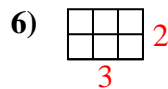
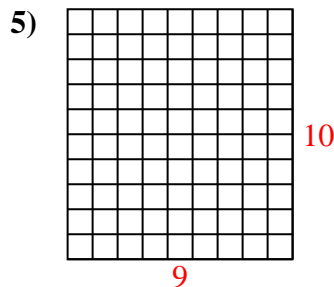
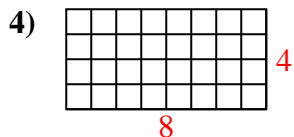
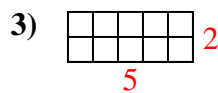
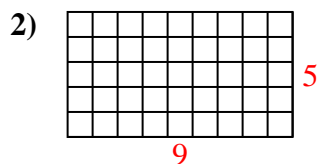
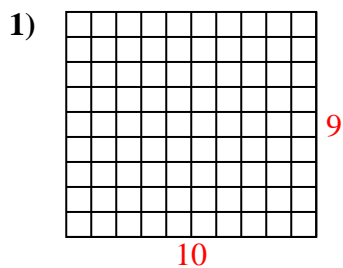


**Risposte**

1. \_\_\_\_\_
2. \_\_\_\_\_
3. \_\_\_\_\_
4. \_\_\_\_\_
5. \_\_\_\_\_
6. \_\_\_\_\_
7. \_\_\_\_\_
8. \_\_\_\_\_
9. \_\_\_\_\_
10. \_\_\_\_\_
11. \_\_\_\_\_
12. \_\_\_\_\_
13. \_\_\_\_\_
14. \_\_\_\_\_
15. \_\_\_\_\_



Calcola l'area. Ogni quadratino corrisponde ad 1 unità.



**Risposte**

1. 90 u<sup>2</sup>

2. 45 u<sup>2</sup>

3. 10 u<sup>2</sup>

4. 32 u<sup>2</sup>

5. 90 u<sup>2</sup>

6. 6 u<sup>2</sup>

7. 36 u<sup>2</sup>

8. 30 u<sup>2</sup>

9. 70 u<sup>2</sup>

10. 16 u<sup>2</sup>

11. 12 u<sup>2</sup>

12. 64 u<sup>2</sup>

13. 4 u<sup>2</sup>

14. 60 u<sup>2</sup>

15. 15 u<sup>2</sup>