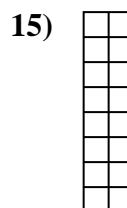

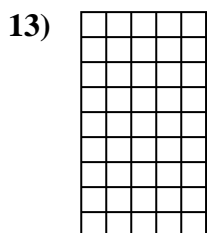
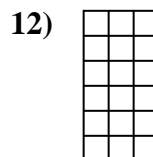
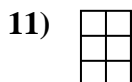
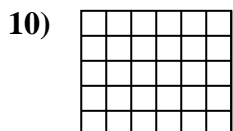
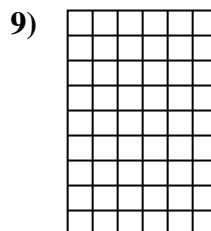
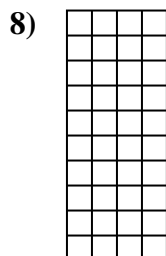

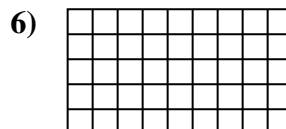
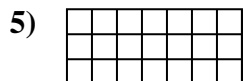
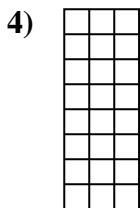
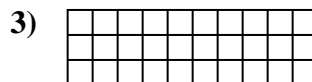
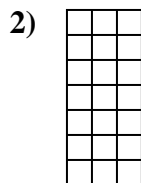
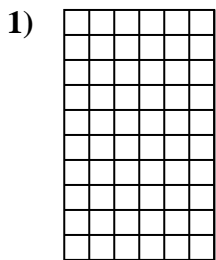




Calcola l'area. Ogni quadratino corrisponde ad 1 unità.



Risposte

1. _____

2. _____

3. _____

4. _____

5. _____

6. _____

7. _____

8. _____

9. _____

10. _____

11. _____

12. _____

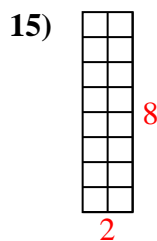
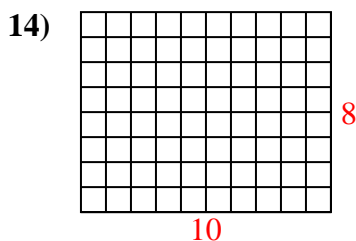
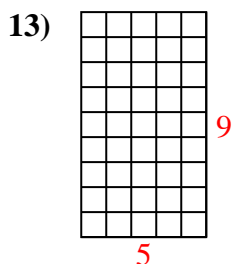
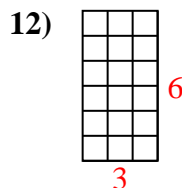
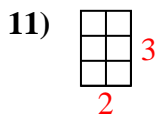
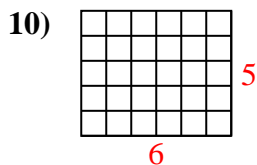
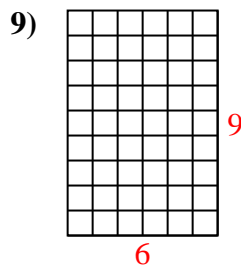
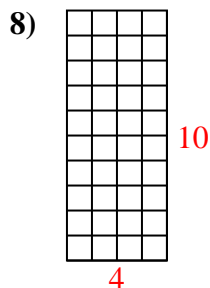
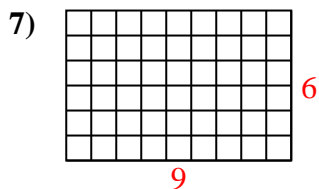
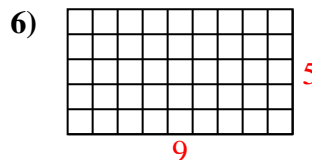
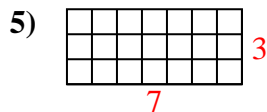
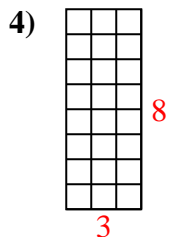
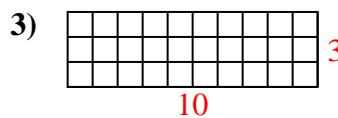
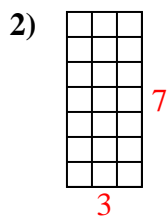
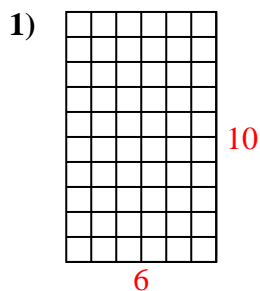
13. _____

14. _____

15. _____



Calcola l'area. Ogni quadratino corrisponde ad 1 unità.



Risposte

1. 60 u²

2. 21 u²

3. 30 u²

4. 24 u²

5. 21 u²

6. 45 u²

7. 54 u²

8. 40 u²

9. 54 u²

10. 30 u²

11. 6 u²

12. 18 u²

13. 45 u²

14. 80 u²

15. 16 u²