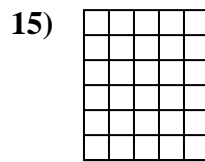
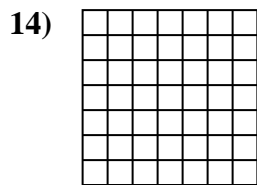
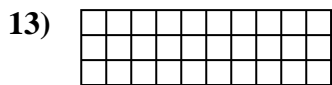

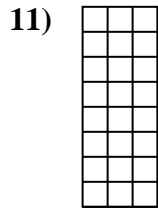
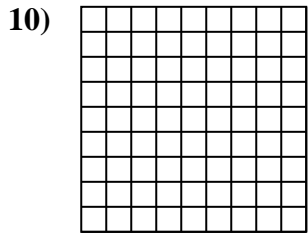
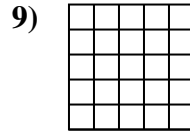
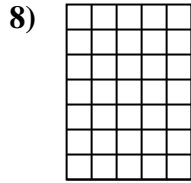
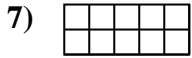
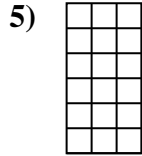
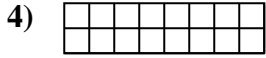
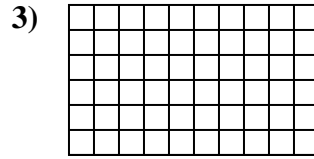
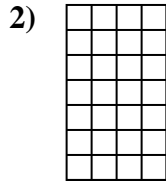
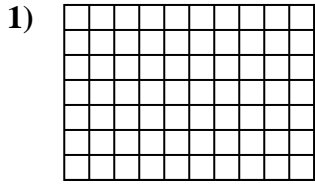




Calcola l'area. Ogni quadratino corrisponde ad 1 unità.



**Risposte**

1. \_\_\_\_\_

2. \_\_\_\_\_

3. \_\_\_\_\_

4. \_\_\_\_\_

5. \_\_\_\_\_

6. \_\_\_\_\_

7. \_\_\_\_\_

8. \_\_\_\_\_

9. \_\_\_\_\_

10. \_\_\_\_\_

11. \_\_\_\_\_

12. \_\_\_\_\_

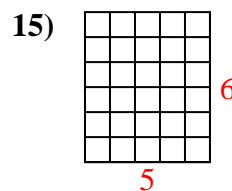
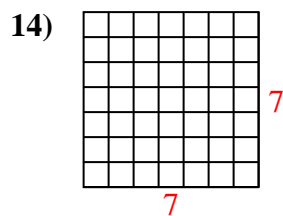
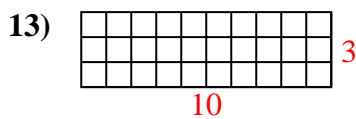
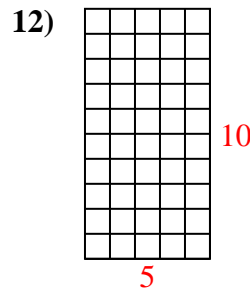
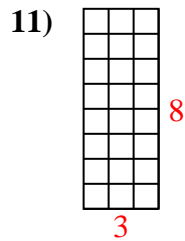
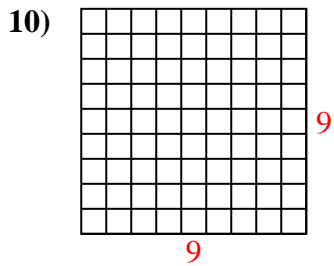
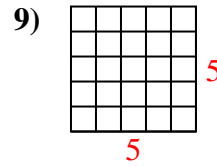
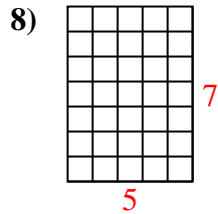
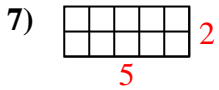
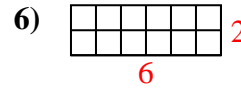
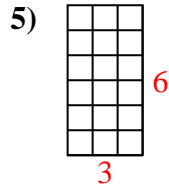
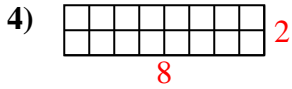
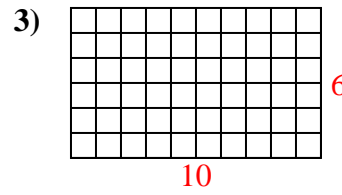
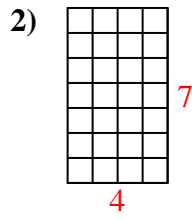
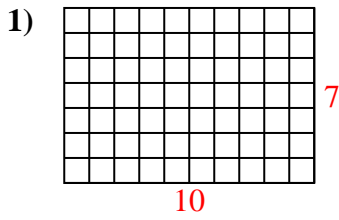
13. \_\_\_\_\_

14. \_\_\_\_\_

15. \_\_\_\_\_



Calcola l'area. Ogni quadratino corrisponde ad 1 unità.



**Risposte**

1. 70 u<sup>2</sup>

2. 28 u<sup>2</sup>

3. 60 u<sup>2</sup>

4. 16 u<sup>2</sup>

5. 18 u<sup>2</sup>

6. 12 u<sup>2</sup>

7. 10 u<sup>2</sup>

8. 35 u<sup>2</sup>

9. 25 u<sup>2</sup>

10. 81 u<sup>2</sup>

11. 24 u<sup>2</sup>

12. 50 u<sup>2</sup>

13. 30 u<sup>2</sup>

14. 49 u<sup>2</sup>

15. 30 u<sup>2</sup>