
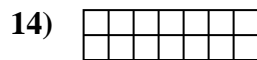
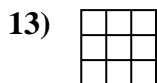
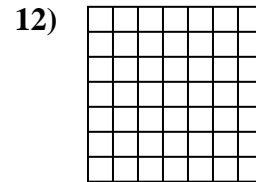
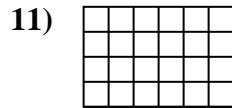
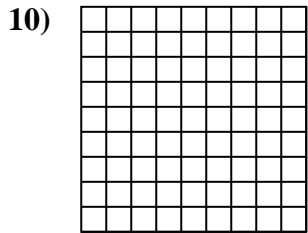
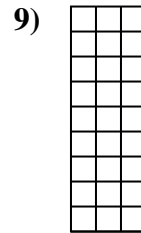
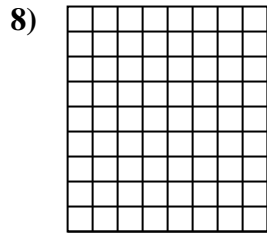
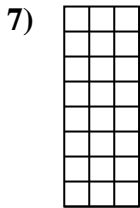

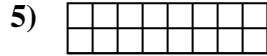
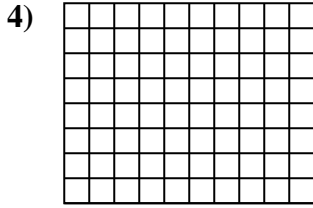
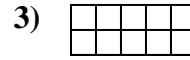
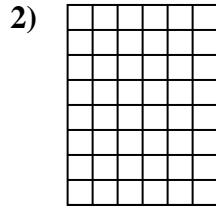
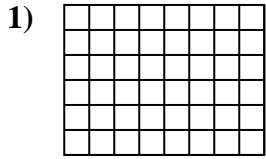




Calcola l'area. Ogni quadratino corrisponde ad 1 unità.

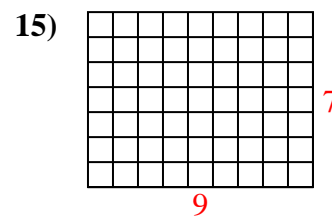
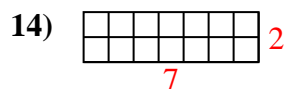
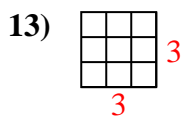
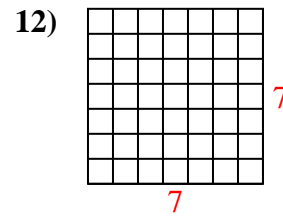
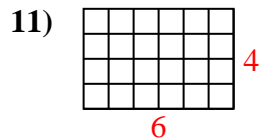
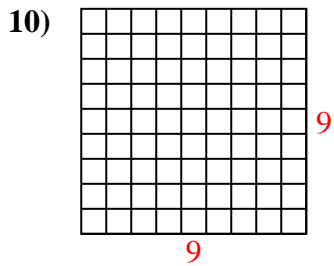
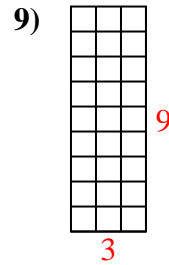
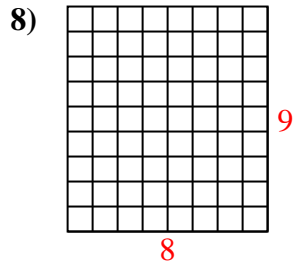
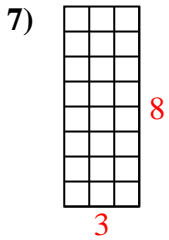
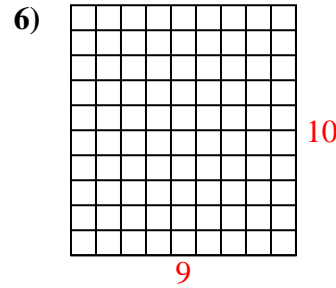
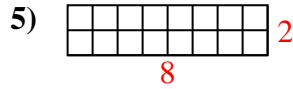
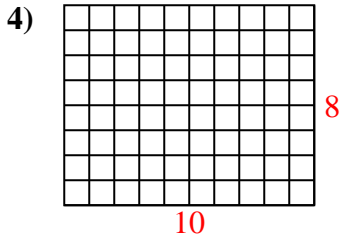
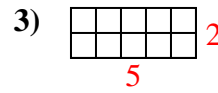
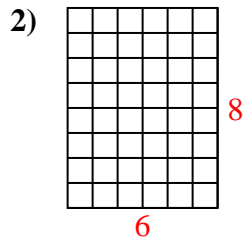
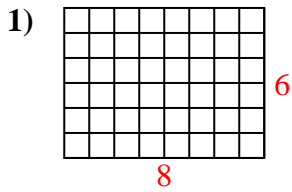


Risposte

1. _____
2. _____
3. _____
4. _____
5. _____
6. _____
7. _____
8. _____
9. _____
10. _____
11. _____
12. _____
13. _____
14. _____
15. _____



Calcola l'area. Ogni quadratino corrisponde ad 1 unità.



Risposte

1. 48 u²

2. 48 u²

3. 10 u²

4. 80 u²

5. 16 u²

6. 90 u²

7. 24 u²

8. 72 u²

9. 27 u²

10. 81 u²

11. 24 u²

12. 49 u²

13. 9 u²

14. 14 u²

15. 63 u²